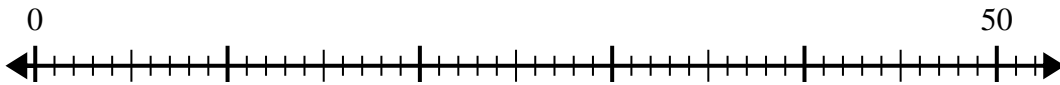


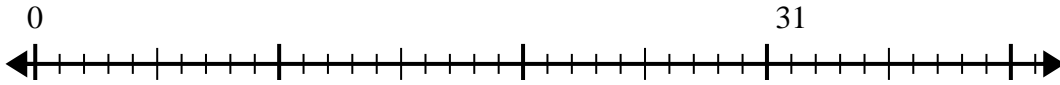


Use the number line to solve the division problem.

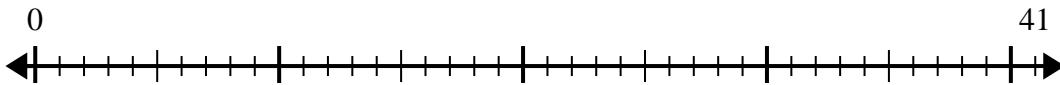
1) $50 \div 8 =$



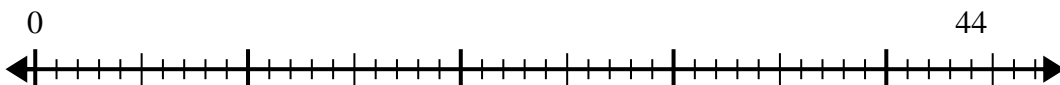
2) $31 \div 5 =$



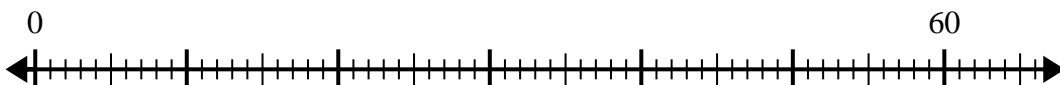
3) $41 \div 8 =$



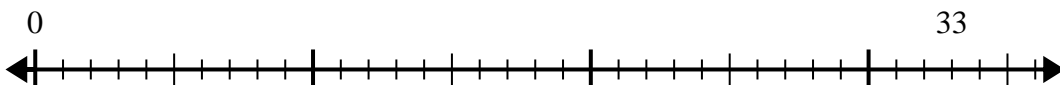
4) $44 \div 5 =$



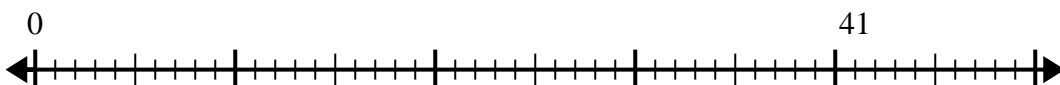
5) $60 \div 7 =$



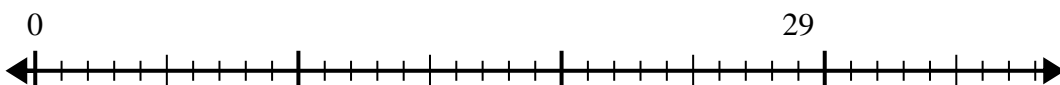
6) $33 \div 4 =$



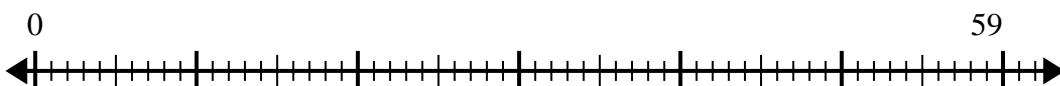
7) $41 \div 7 =$



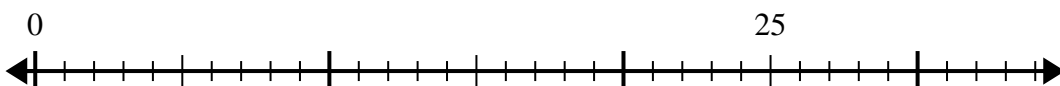
8) $29 \div 4 =$



9) $59 \div 8 =$



10) $25 \div 4 =$



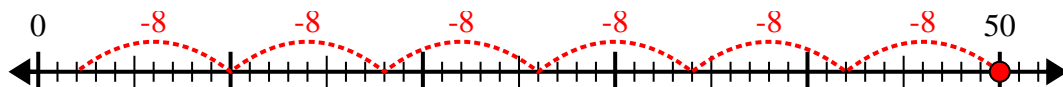
Answers

- 1. _____
- 2. _____
- 3. _____
- 4. _____
- 5. _____
- 6. _____
- 7. _____
- 8. _____
- 9. _____
- 10. _____

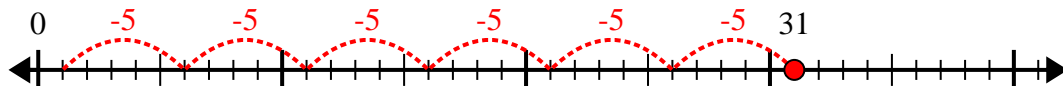


Use the number line to solve the division problem.

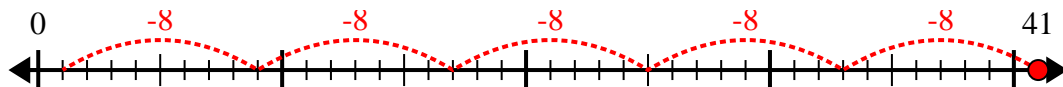
1) $50 \div 8 =$



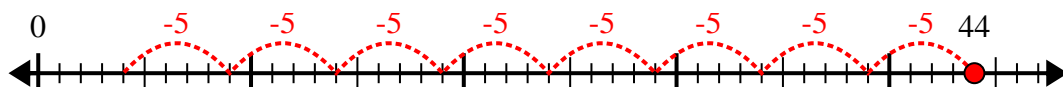
2) $31 \div 5 =$



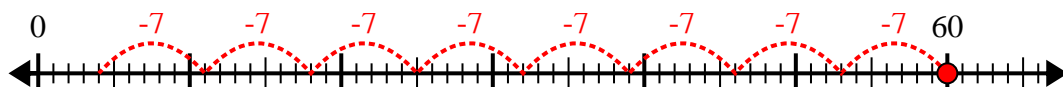
3) $41 \div 8 =$



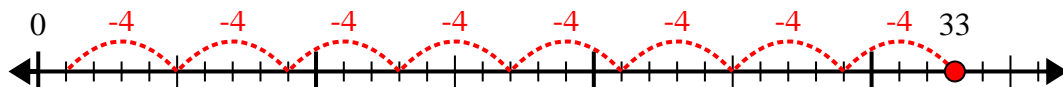
4) $44 \div 5 =$



5) $60 \div 7 =$



6) $33 \div 4 =$



7) $41 \div 7 =$



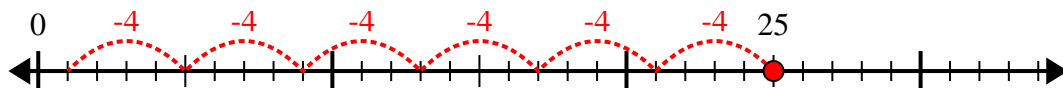
8) $29 \div 4 =$



9) $59 \div 8 =$



10) $25 \div 4 =$



Answers

1. 6r2

2. 6r1

3. 5r1

4. 8r4

5. 8r4

6. 8r1

7. 5r6

8. 7r1

9. 7r3

10. 6r1