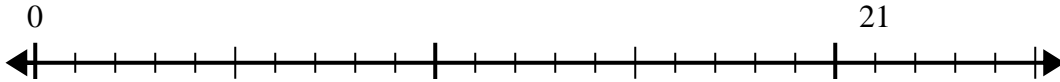


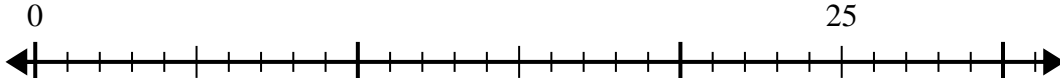


Use the number line to solve the division problem.

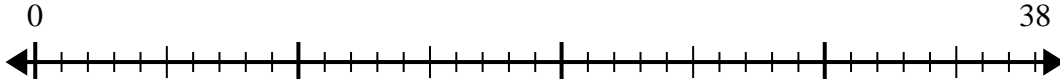
1) $21 \div 5 =$
0



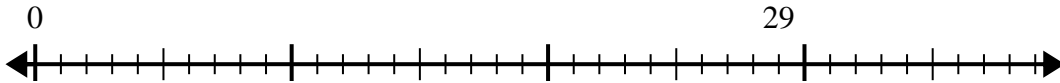
2) $25 \div 6 =$
0



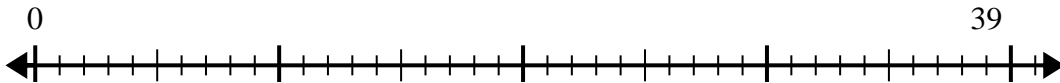
3) $38 \div 8 =$
0



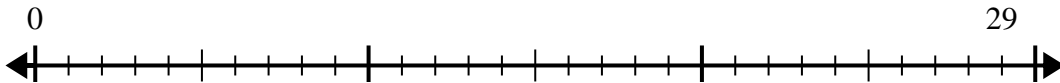
4) $29 \div 7 =$
0



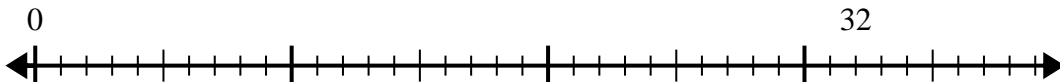
5) $39 \div 5 =$
0



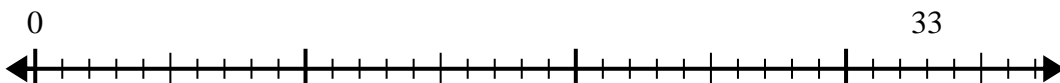
6) $29 \div 4 =$
0



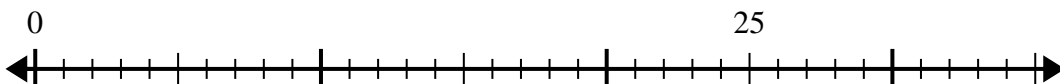
7) $32 \div 6 =$
0



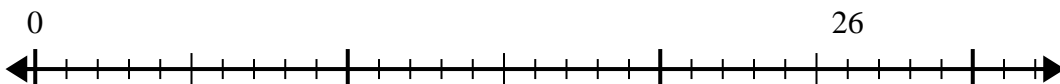
8) $33 \div 4 =$
0



9) $25 \div 4 =$
0



10) $26 \div 7 =$
0



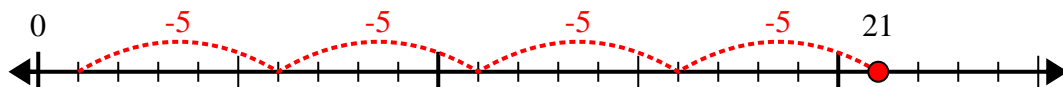
Answers

1. _____
2. _____
3. _____
4. _____
5. _____
6. _____
7. _____
8. _____
9. _____
10. _____

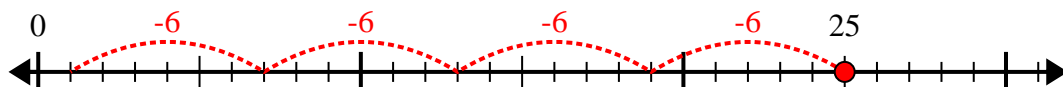


Use the number line to solve the division problem.

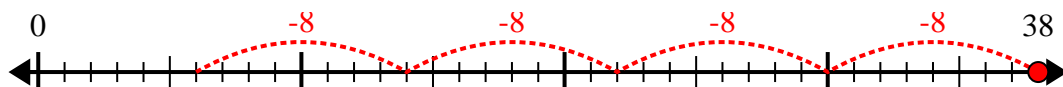
1) $21 \div 5 =$



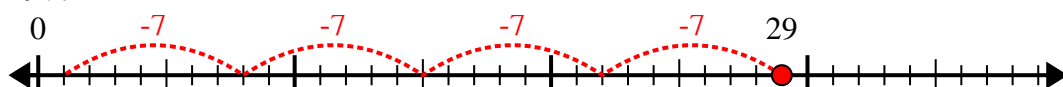
2) $25 \div 6 =$



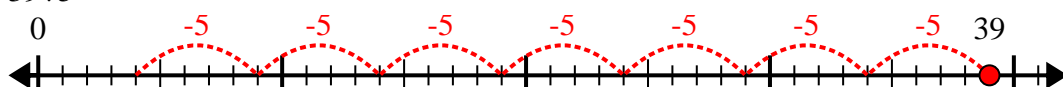
3) $38 \div 8 =$



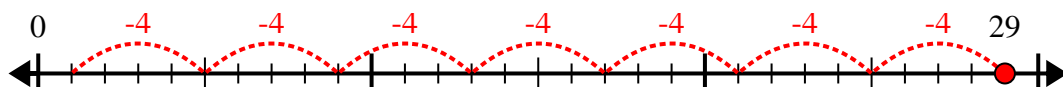
4) $29 \div 7 =$



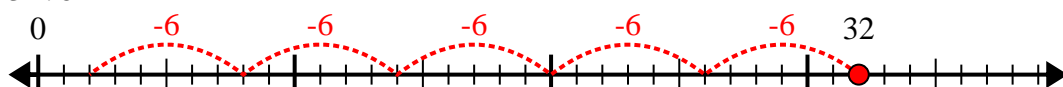
5) $39 \div 5 =$



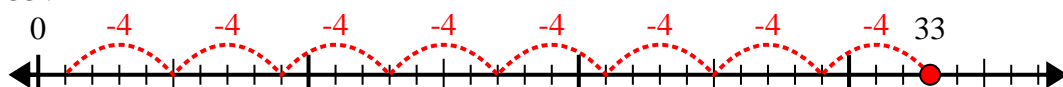
6) $29 \div 4 =$



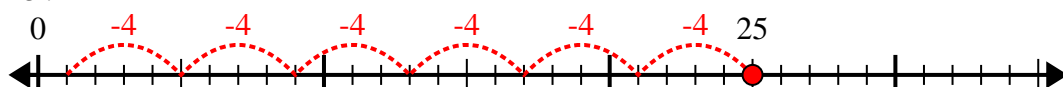
7) $32 \div 6 =$



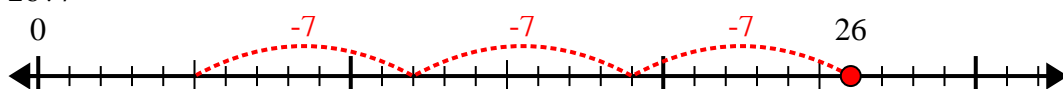
8) $33 \div 4 =$



9) $25 \div 4 =$



10) $26 \div 7 =$



Answers

1. 4r1

2. 4r1

3. 4r6

4. 4r1

5. 7r4

6. 7r1

7. 5r2

8. 8r1

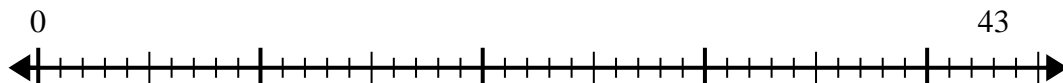
9. 6r1

10. 3r5



Use the number line to solve the division problem.

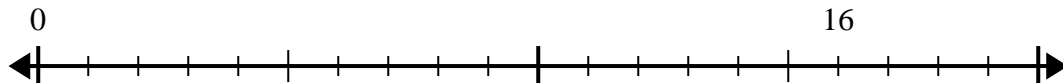
1) $43 \div 5 =$



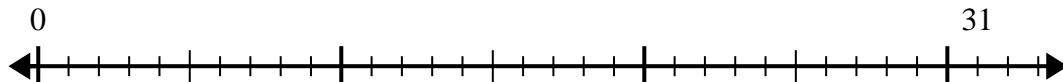
2) $60 \div 7 =$



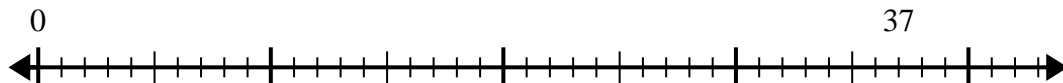
3) $16 \div 5 =$



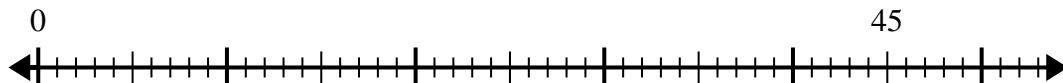
4) $31 \div 4 =$



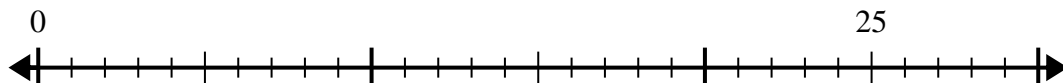
5) $37 \div 7 =$



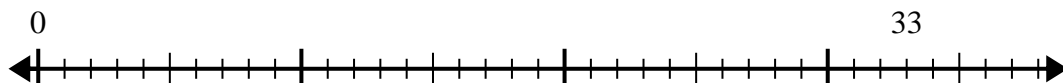
6) $45 \div 8 =$



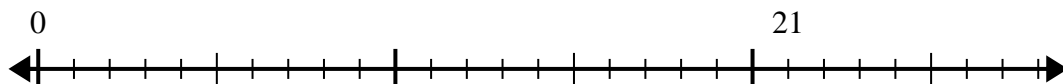
7) $25 \div 4 =$



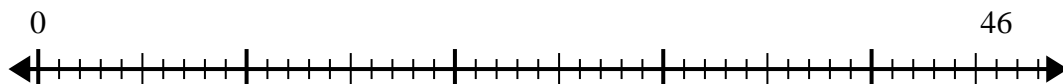
8) $33 \div 5 =$



9) $21 \div 4 =$



10) $46 \div 6 =$



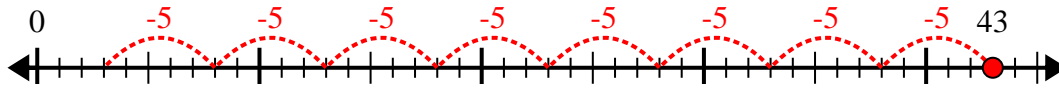
Answers

- 1. _____
- 2. _____
- 3. _____
- 4. _____
- 5. _____
- 6. _____
- 7. _____
- 8. _____
- 9. _____
- 10. _____

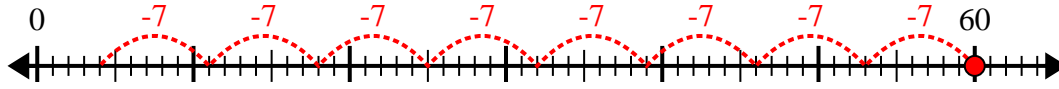


Use the number line to solve the division problem.

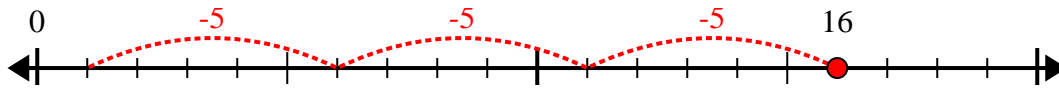
1) $43 \div 5 =$



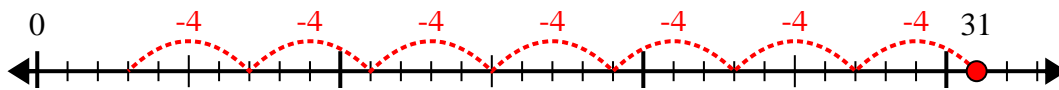
2) $60 \div 7 =$



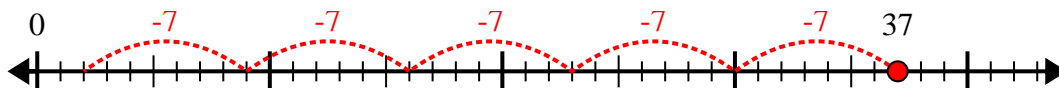
3) $16 \div 5 =$



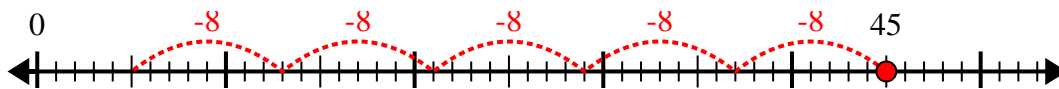
4) $31 \div 4 =$



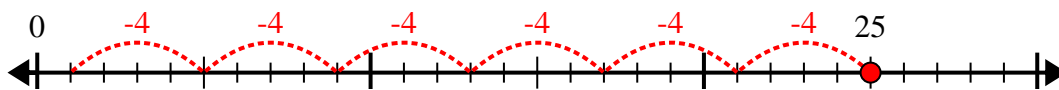
5) $37 \div 7 =$



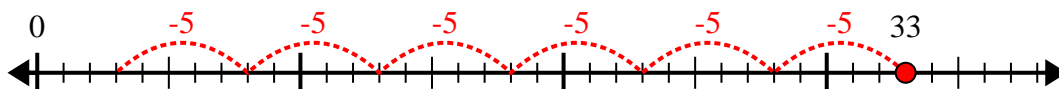
6) $45 \div 8 =$



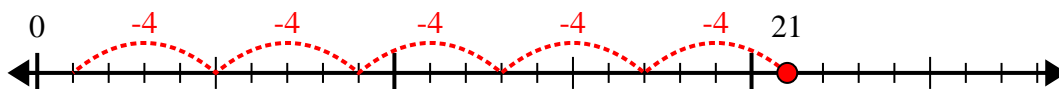
7) $25 \div 4 =$



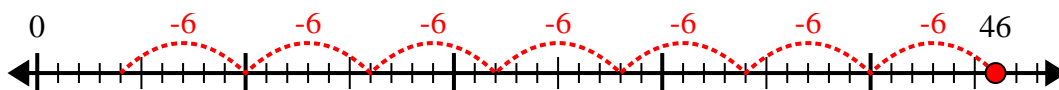
8) $33 \div 5 =$



9) $21 \div 4 =$



10) $46 \div 6 =$



Answers

1. 8r3

2. 8r4

3. 3r1

4. 7r3

5. 5r2

6. 5r5

7. 6r1

8. 6r3

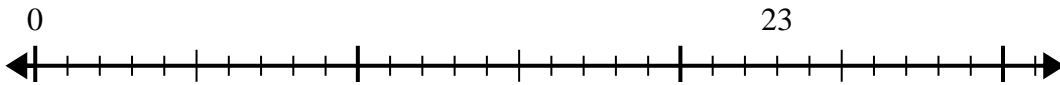
9. 5r1

10. 7r4

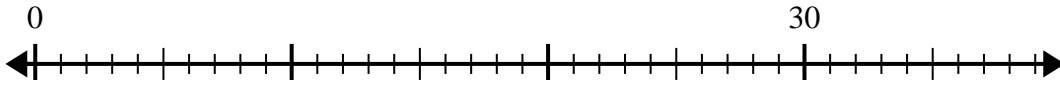


Use the number line to solve the division problem.

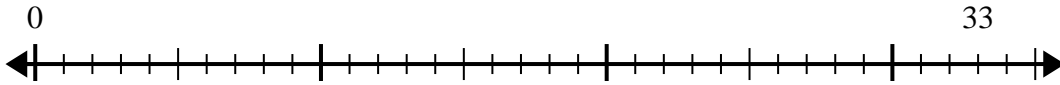
1) $23 \div 5 =$



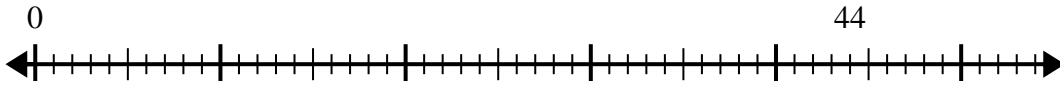
2) $30 \div 4 =$



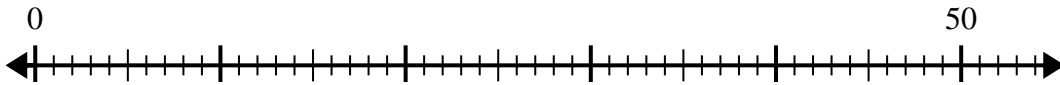
3) $33 \div 6 =$



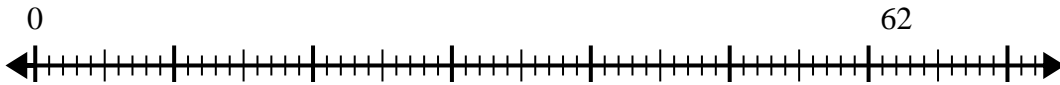
4) $44 \div 6 =$



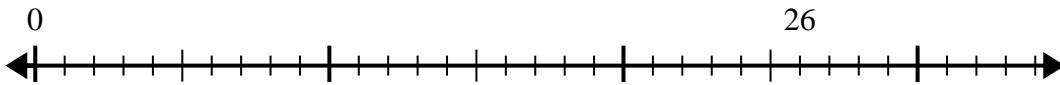
5) $50 \div 6 =$



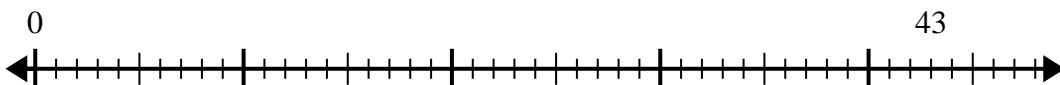
6) $62 \div 8 =$



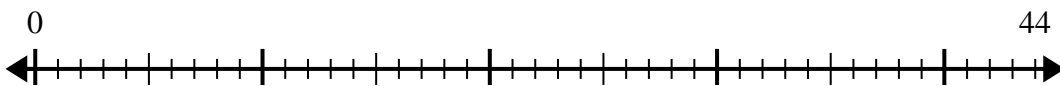
7) $26 \div 6 =$



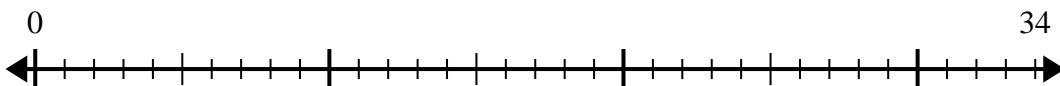
8) $43 \div 8 =$



9) $44 \div 7 =$



10) $34 \div 4 =$



Answers

1. _____
2. _____
3. _____
4. _____
5. _____
6. _____
7. _____
8. _____
9. _____
10. _____

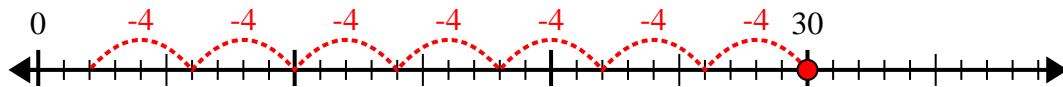


Use the number line to solve the division problem.

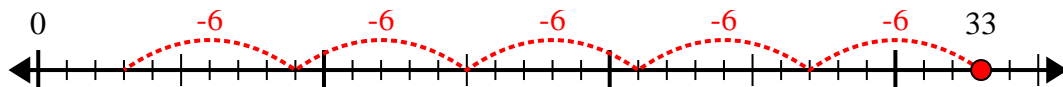
1) $23 \div 5 =$



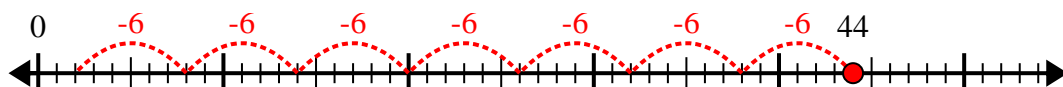
2) $30 \div 4 =$



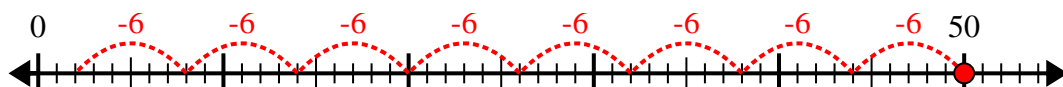
3) $33 \div 6 =$



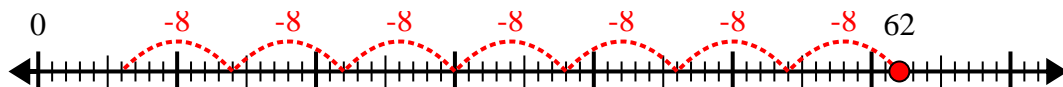
4) $44 \div 6 =$



5) $50 \div 6 =$



6) $62 \div 8 =$



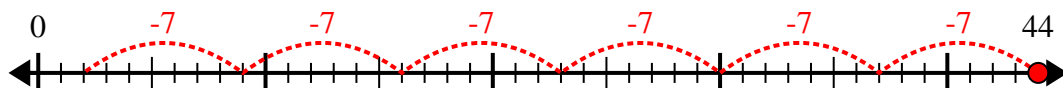
7) $26 \div 6 =$



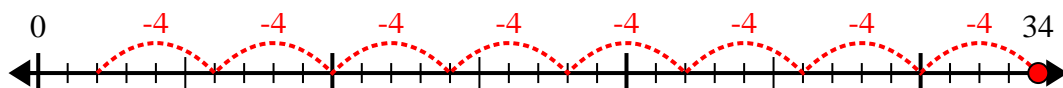
8) $43 \div 8 =$



9) $44 \div 7 =$



10) $34 \div 4 =$



Answers

1. 4r3

2. 7r2

3. 5r3

4. 7r2

5. 8r2

6. 7r6

7. 4r2

8. 5r3

9. 6r2

10. 8r2

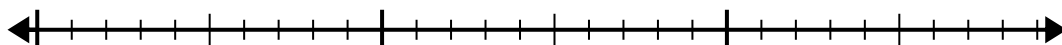


Use the number line to solve the division problem.

1) $25 \div 6 =$

0

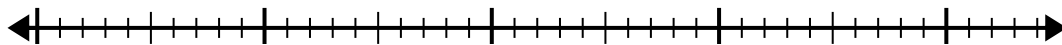
25



2) $38 \div 7 =$

0

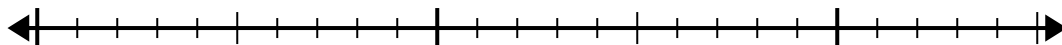
38



3) $20 \div 6 =$

0

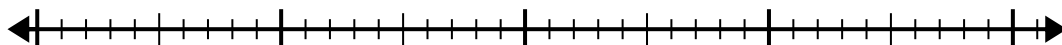
20



4) $35 \div 6 =$

0

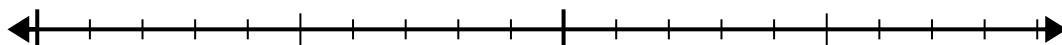
35



5) $18 \div 5 =$

0

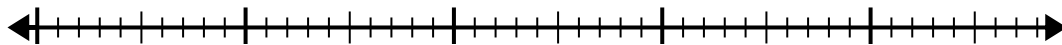
18



6) $46 \div 6 =$

0

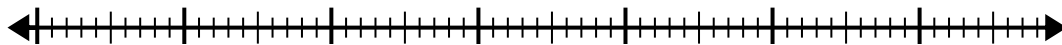
46



7) $60 \div 8 =$

0

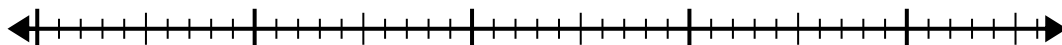
60



8) $45 \div 7 =$

0

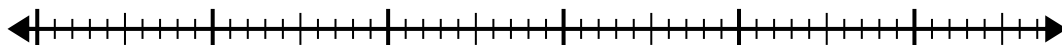
45



9) $53 \div 8 =$

0

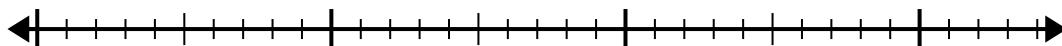
53



10) $29 \div 4 =$

0

29



Answers

1. _____

2. _____

3. _____

4. _____

5. _____

6. _____

7. _____

8. _____

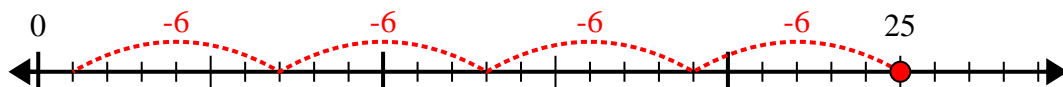
9. _____

10. _____

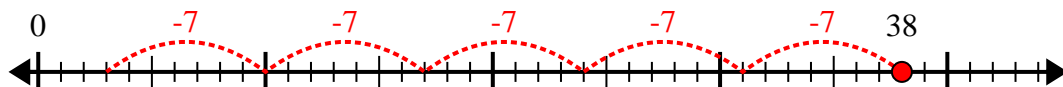


Use the number line to solve the division problem.

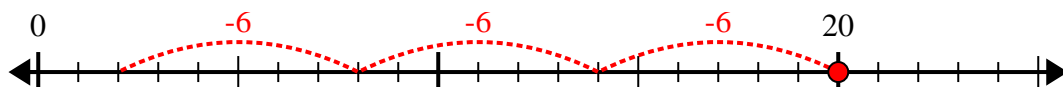
1) $25 \div 6 =$



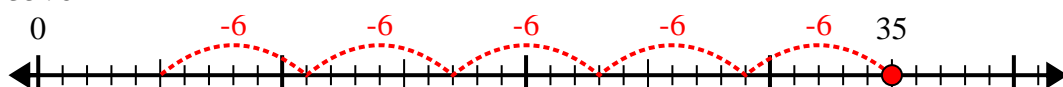
2) $38 \div 7 =$



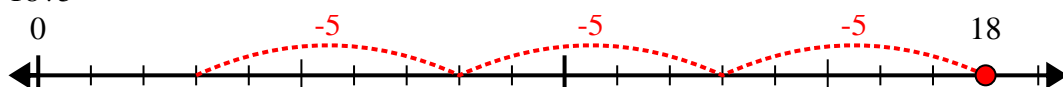
3) $20 \div 6 =$



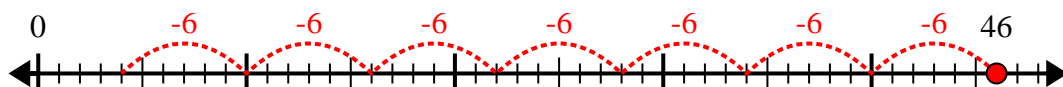
4) $35 \div 6 =$



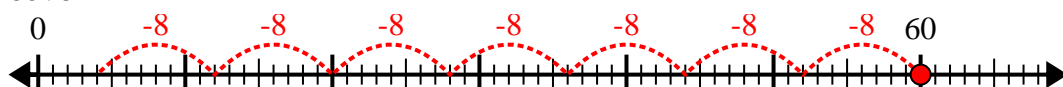
5) $18 \div 5 =$



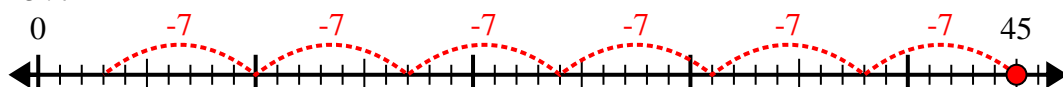
6) $46 \div 6 =$



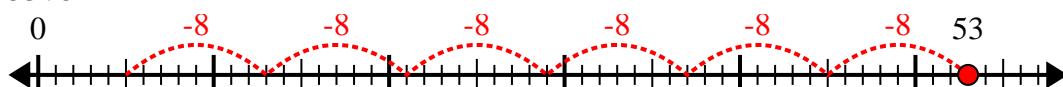
7) $60 \div 8 =$



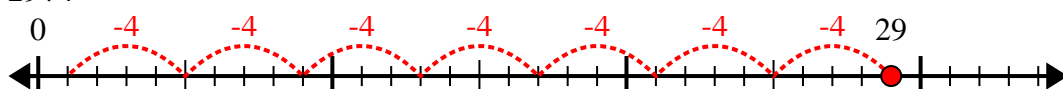
8) $45 \div 7 =$



9) $53 \div 8 =$



10) $29 \div 4 =$



Answers

1. 4r1

2. 5r3

3. 3r2

4. 5r5

5. 3r3

6. 7r4

7. 7r4

8. 6r3

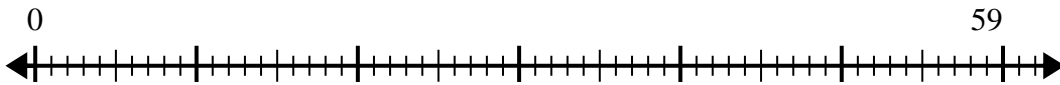
9. 6r5

10. 7r1

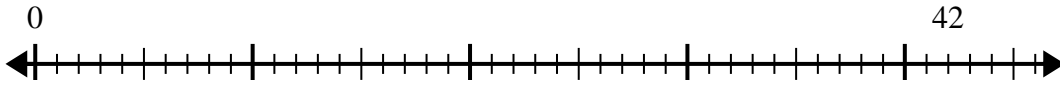


Use the number line to solve the division problem.

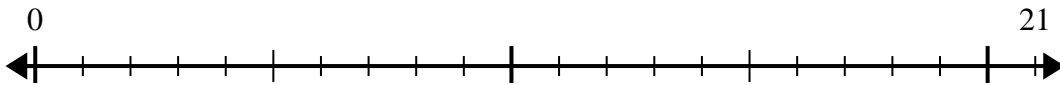
1) $59 \div 7 =$



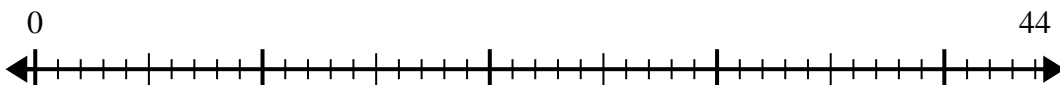
2) $42 \div 5 =$



3) $21 \div 4 =$



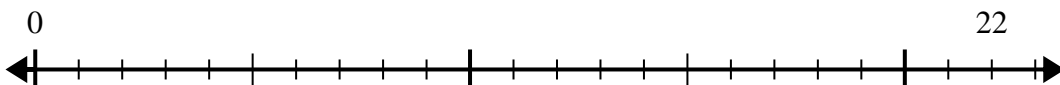
4) $44 \div 7 =$



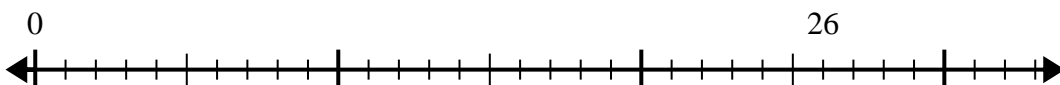
5) $60 \div 8 =$



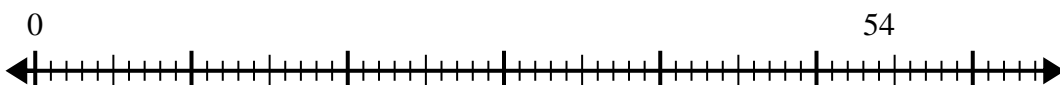
6) $22 \div 5 =$



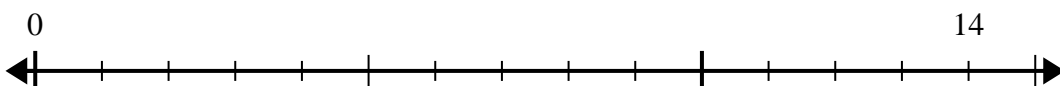
7) $26 \div 4 =$



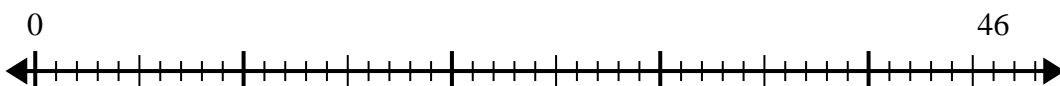
8) $54 \div 8 =$



9) $14 \div 4 =$



10) $46 \div 6 =$



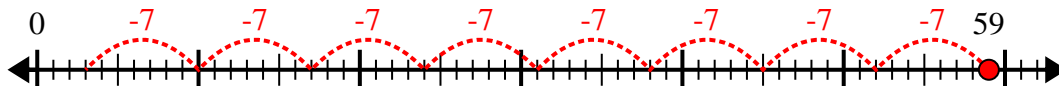
Answers

- 1. _____
- 2. _____
- 3. _____
- 4. _____
- 5. _____
- 6. _____
- 7. _____
- 8. _____
- 9. _____
- 10. _____

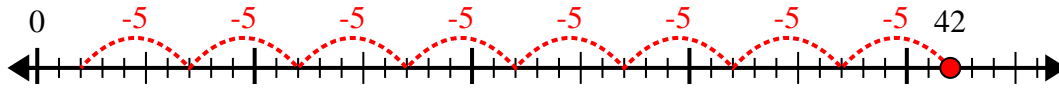


Use the number line to solve the division problem.

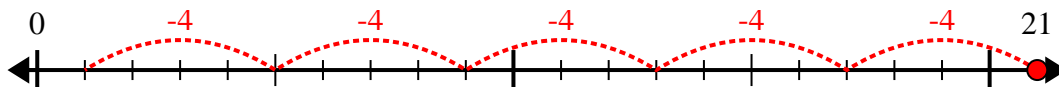
1) $59 \div 7 =$



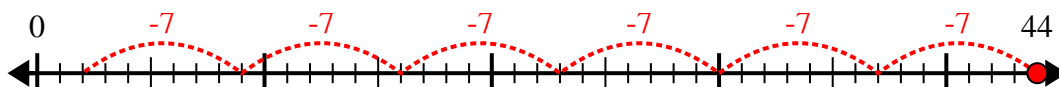
2) $42 \div 5 =$



3) $21 \div 4 =$



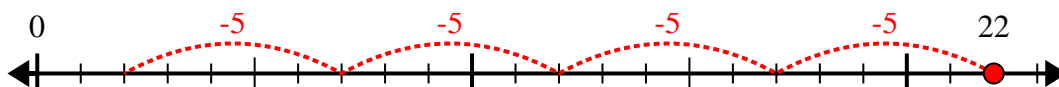
4) $44 \div 7 =$



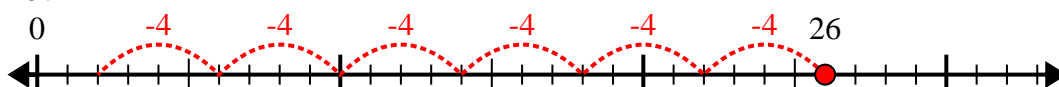
5) $60 \div 8 =$



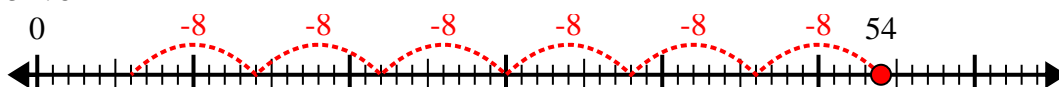
6) $22 \div 5 =$



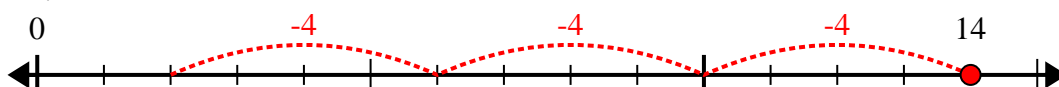
7) $26 \div 4 =$



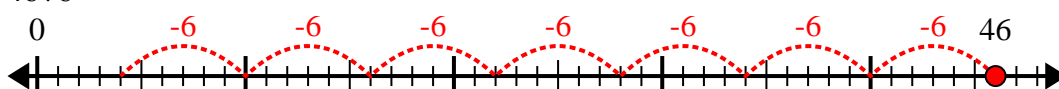
8) $54 \div 8 =$



9) $14 \div 4 =$



10) $46 \div 6 =$



Answers

1. 8r3

2. 8r2

3. 5r1

4. 6r2

5. 7r4

6. 4r2

7. 6r2

8. 6r6

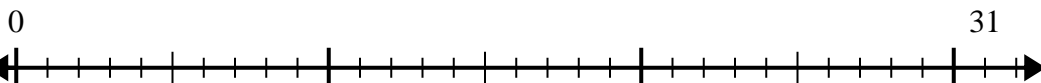
9. 3r2

10. 7r4

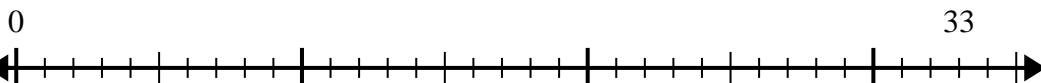


Use the number line to solve the division problem.

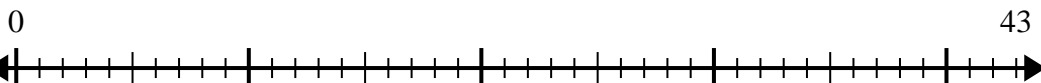
1) $31 \div 6 =$



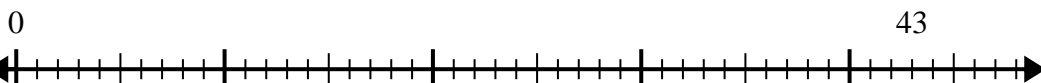
2) $33 \div 4 =$



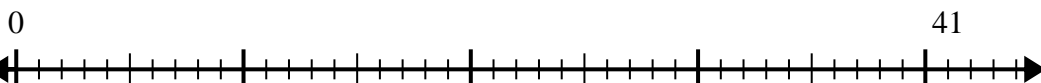
3) $43 \div 7 =$



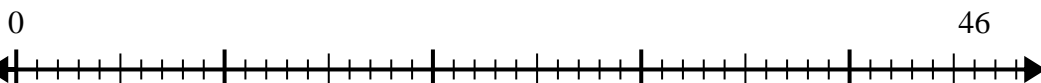
4) $43 \div 5 =$



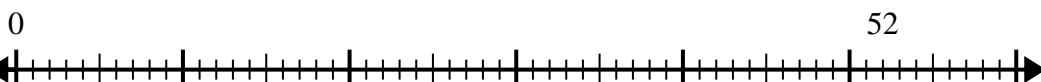
5) $41 \div 8 =$



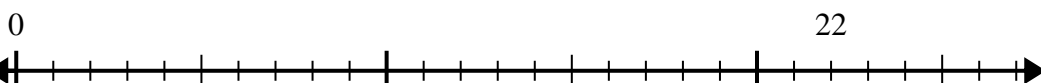
6) $46 \div 6 =$



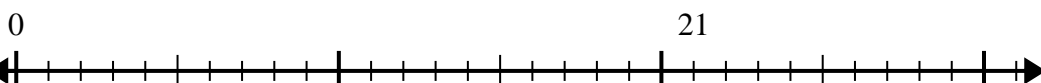
7) $52 \div 6 =$



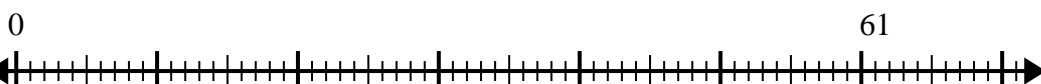
8) $22 \div 4 =$



9) $21 \div 5 =$



10) $61 \div 8 =$



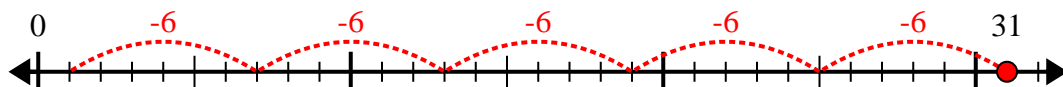
Answers

- 1. _____
- 2. _____
- 3. _____
- 4. _____
- 5. _____
- 6. _____
- 7. _____
- 8. _____
- 9. _____
- 10. _____

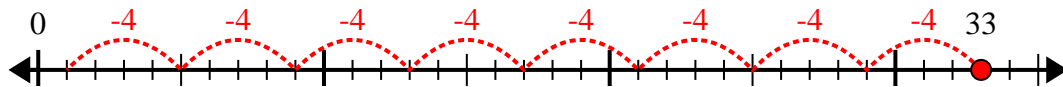


Use the number line to solve the division problem.

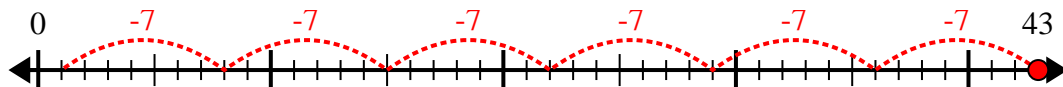
1) $31 \div 6 =$



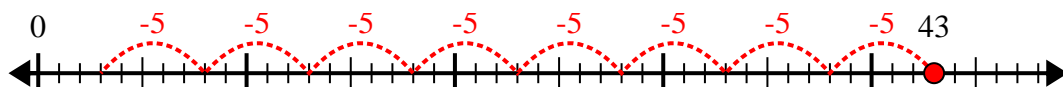
2) $33 \div 4 =$



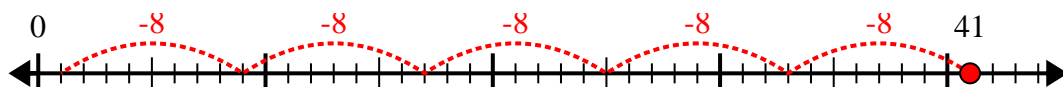
3) $43 \div 7 =$



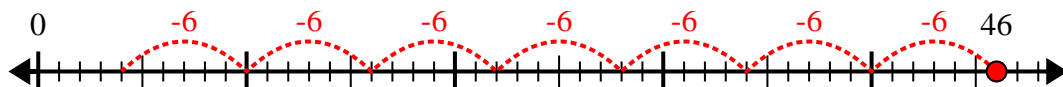
4) $43 \div 5 =$



5) $41 \div 8 =$



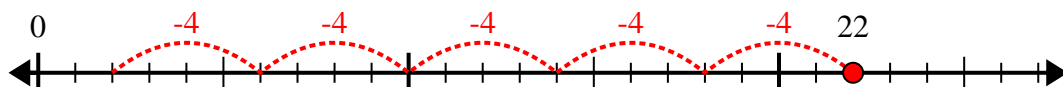
6) $46 \div 6 =$



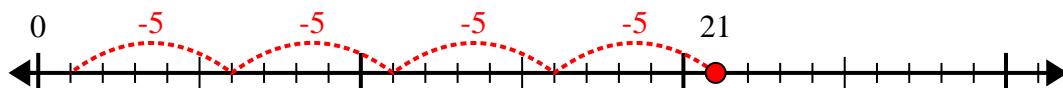
7) $52 \div 6 =$



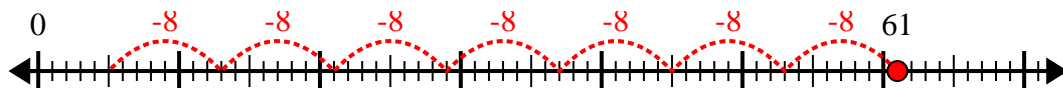
8) $22 \div 4 =$



9) $21 \div 5 =$



10) $61 \div 8 =$



Answers

1. 5r1

2. 8r1

3. 6r1

4. 8r3

5. 5r1

6. 7r4

7. 8r4

8. 5r2

9. 4r1

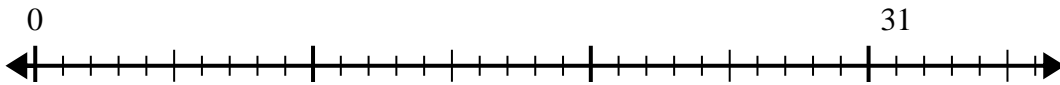
10. 7r5



Use the number line to solve the division problem.

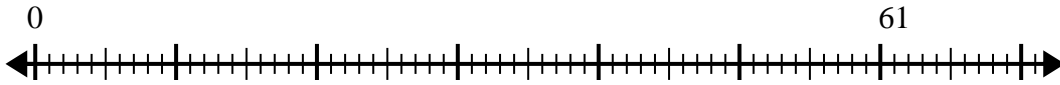
Answers

1) $31 \div 8 =$



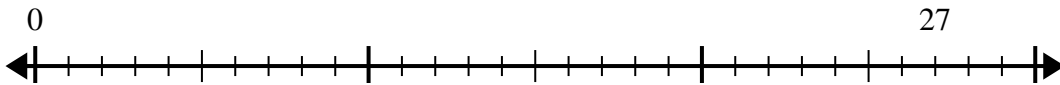
1. _____

2) $61 \div 8 =$



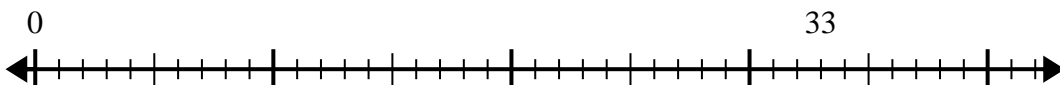
2. _____

3) $27 \div 4 =$



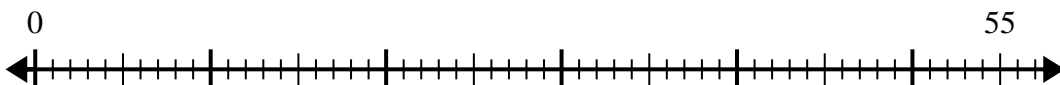
3. _____

4) $33 \div 4 =$



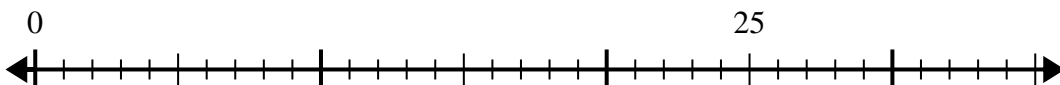
4. _____

5) $55 \div 8 =$



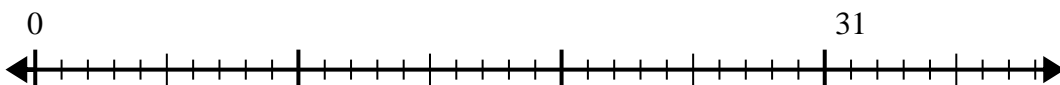
5. _____

6) $25 \div 6 =$



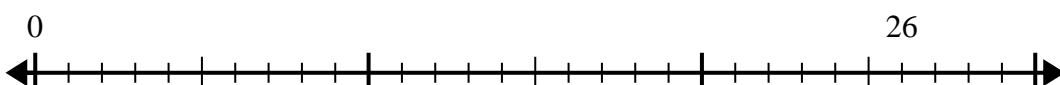
6. _____

7) $31 \div 4 =$



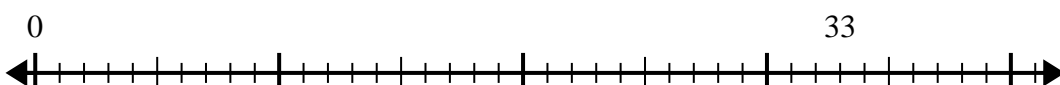
7. _____

8) $26 \div 7 =$



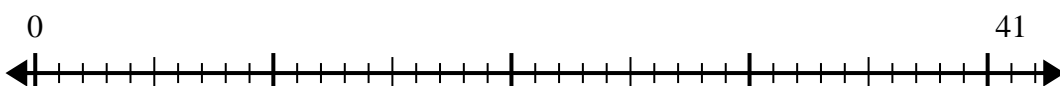
8. _____

9) $33 \div 7 =$



9. _____

10) $41 \div 5 =$

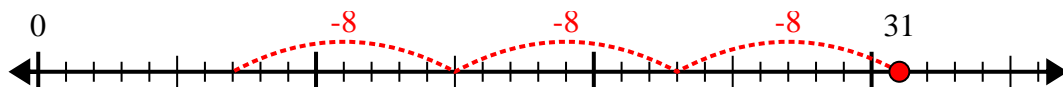


10. _____

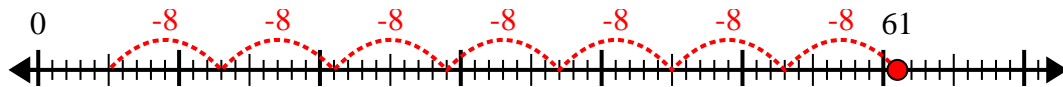


Use the number line to solve the division problem.

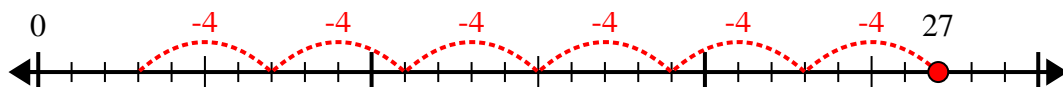
1) $31 \div 8 =$



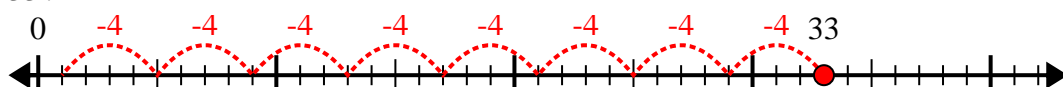
2) $61 \div 8 =$



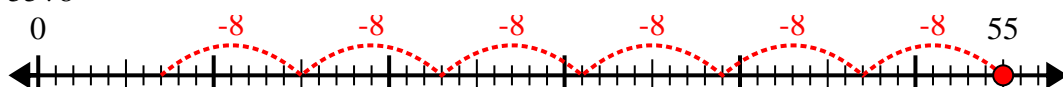
3) $27 \div 4 =$



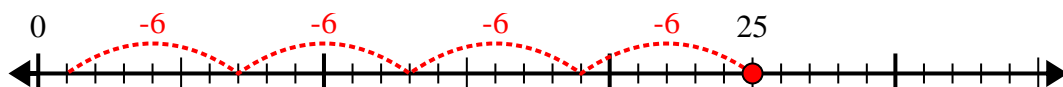
4) $33 \div 4 =$



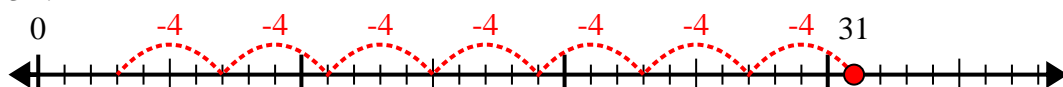
5) $55 \div 8 =$



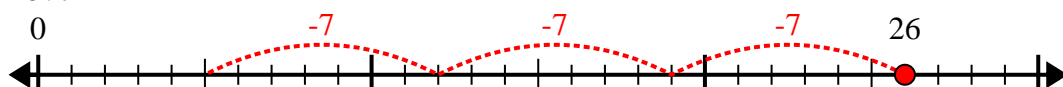
6) $25 \div 6 =$



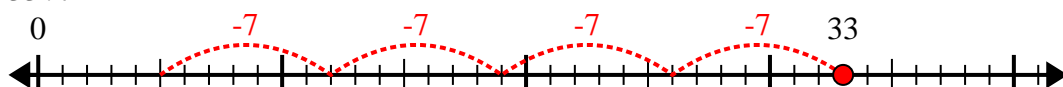
7) $31 \div 4 =$



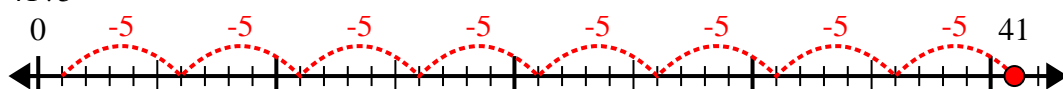
8) $26 \div 7 =$



9) $33 \div 7 =$



10) $41 \div 5 =$



Answers

1. 3r7

2. 7r5

3. 6r3

4. 8r1

5. 6r7

6. 4r1

7. 7r3

8. 3r5

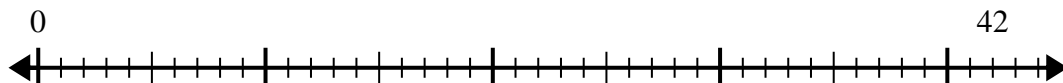
9. 4r5

10. 8r1

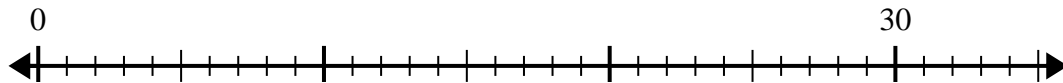


Use the number line to solve the division problem.

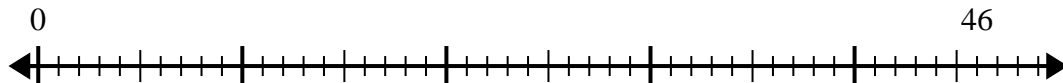
1) $42 \div 5 =$




2) $30 \div 4 =$



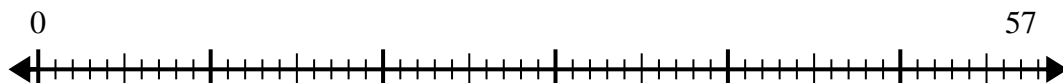
3) $46 \div 6 =$



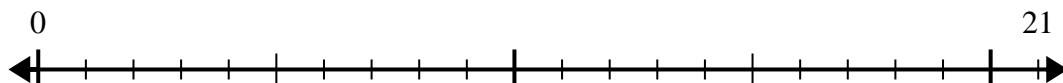
4) $63 \div 8 =$



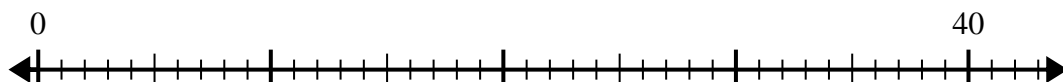
5) $57 \div 7 =$



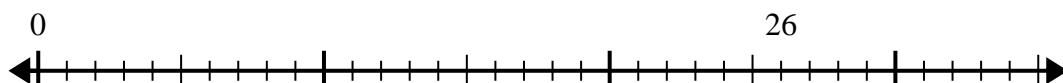
6) $21 \div 5 =$



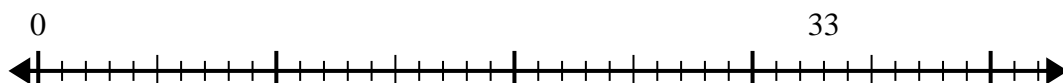
7) $40 \div 7 =$



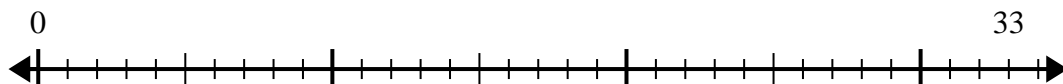
8) $26 \div 8 =$



9) $33 \div 5 =$



10) $33 \div 4 =$



Answers

- 1. _____
- 2. _____
- 3. _____
- 4. _____
- 5. _____
- 6. _____
- 7. _____
- 8. _____
- 9. _____
- 10. _____

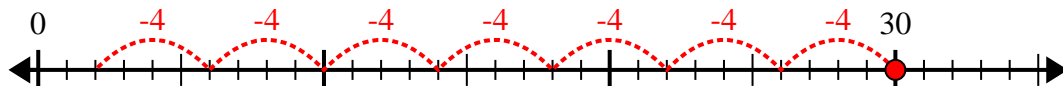


Use the number line to solve the division problem.

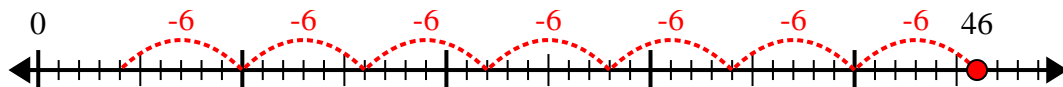
1) $42 \div 5 =$



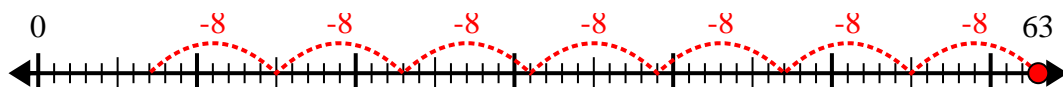
2) $30 \div 4 =$



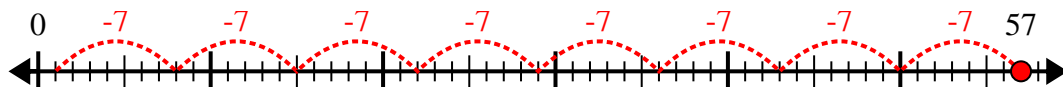
3) $46 \div 6 =$



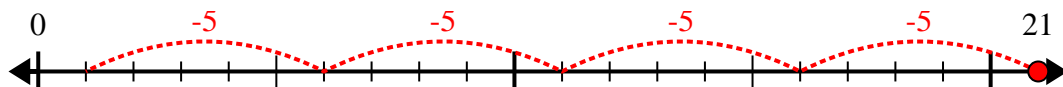
4) $63 \div 8 =$



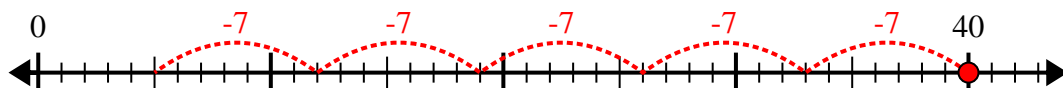
5) $57 \div 7 =$



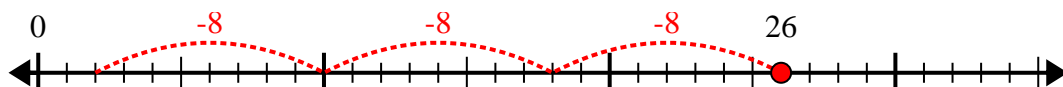
6) $21 \div 5 =$



7) $40 \div 7 =$



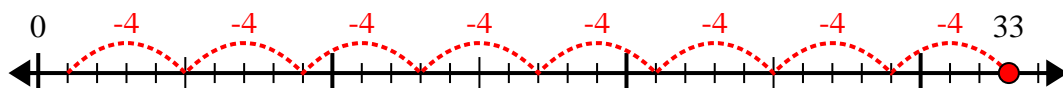
8) $26 \div 8 =$



9) $33 \div 5 =$



10) $33 \div 4 =$



Answers

1. 8r2

2. 7r2

3. 7r4

4. 7r7

5. 8r1

6. 4r1

7. 5r5

8. 3r2

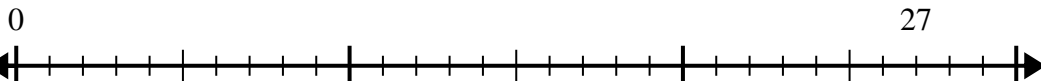
9. 6r3

10. 8r1

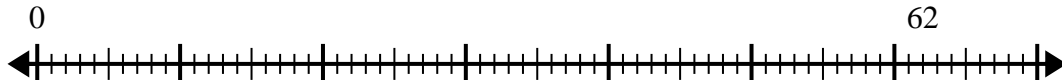


Use the number line to solve the division problem.

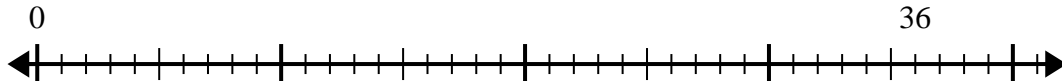
1) $27 \div 4 =$



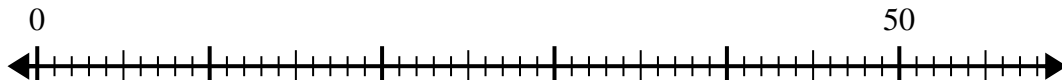
2) $62 \div 8 =$



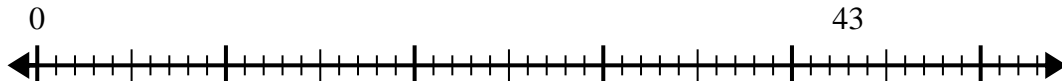
3) $36 \div 5 =$



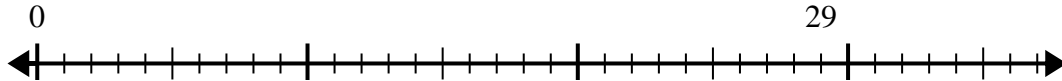
4) $50 \div 8 =$



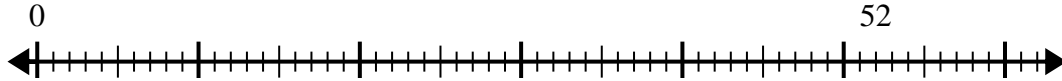
5) $43 \div 6 =$



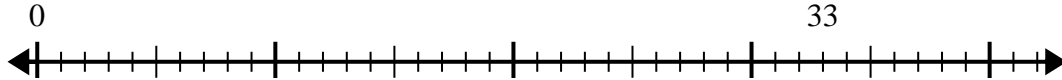
6) $29 \div 6 =$



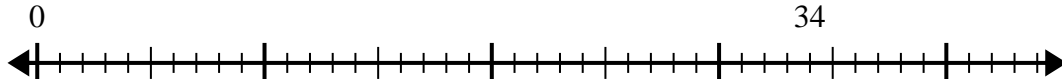
7) $52 \div 6 =$



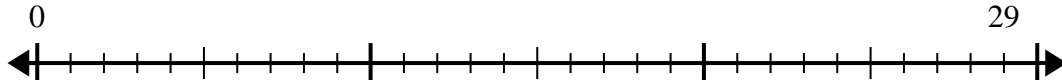
8) $33 \div 5 =$



9) $34 \div 7 =$



10) $29 \div 4 =$



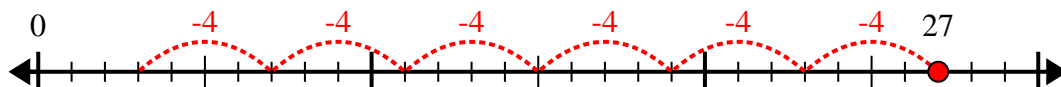
Answers

- 1. _____
- 2. _____
- 3. _____
- 4. _____
- 5. _____
- 6. _____
- 7. _____
- 8. _____
- 9. _____
- 10. _____

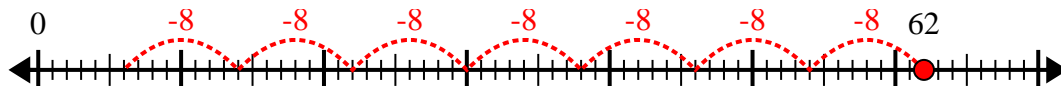


Use the number line to solve the division problem.

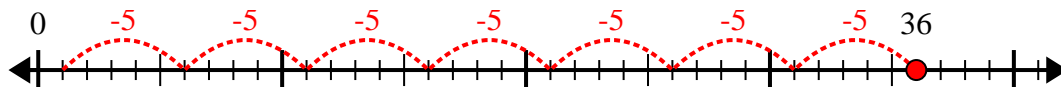
1) $27 \div 4 =$



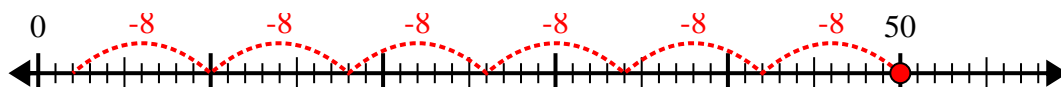
2) $62 \div 8 =$



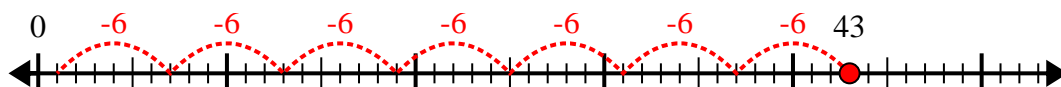
3) $36 \div 5 =$



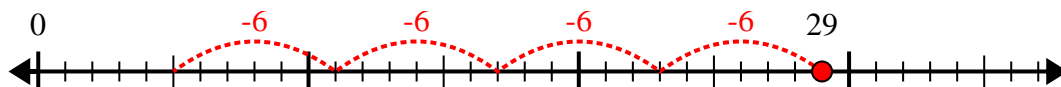
4) $50 \div 8 =$



5) $43 \div 6 =$



6) $29 \div 6 =$



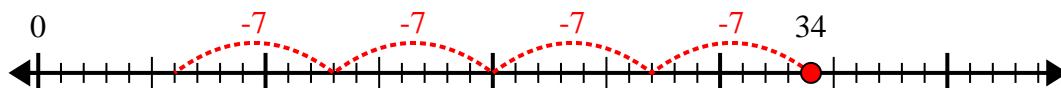
7) $52 \div 6 =$



8) $33 \div 5 =$



9) $34 \div 7 =$



10) $29 \div 4 =$



Answers

1. 6r3

2. 7r6

3. 7r1

4. 6r2

5. 7r1

6. 4r5

7. 8r4

8. 6r3

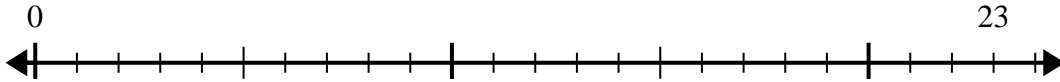
9. 4r6

10. 7r1

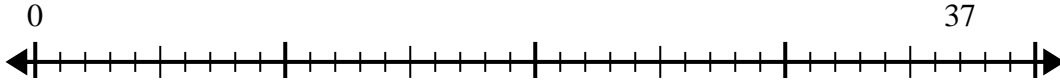


Use the number line to solve the division problem.

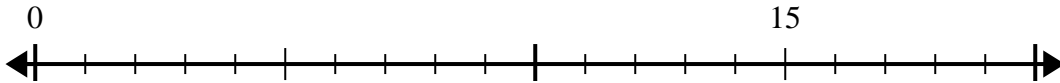
1) $23 \div 4 =$
0



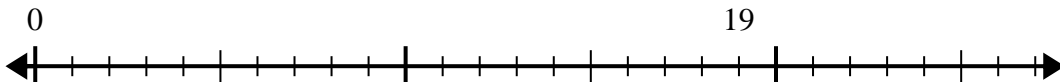
2) $37 \div 8 =$
0



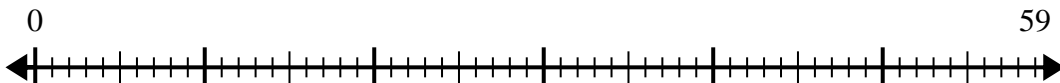
3) $15 \div 4 =$
0



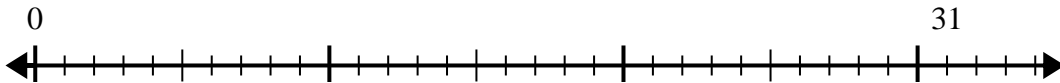
4) $19 \div 6 =$
0



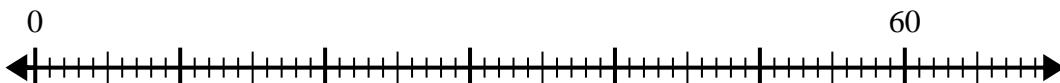
5) $59 \div 8 =$
0



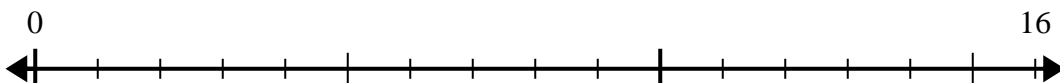
6) $31 \div 8 =$
0



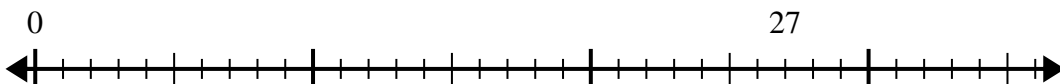
7) $60 \div 7 =$
0



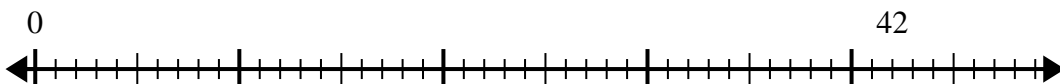
8) $16 \div 5 =$
0



9) $27 \div 4 =$
0



10) $42 \div 5 =$
0



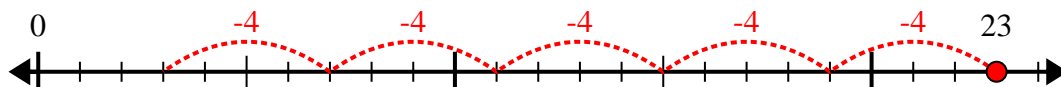
Answers

1. _____
2. _____
3. _____
4. _____
5. _____
6. _____
7. _____
8. _____
9. _____
10. _____

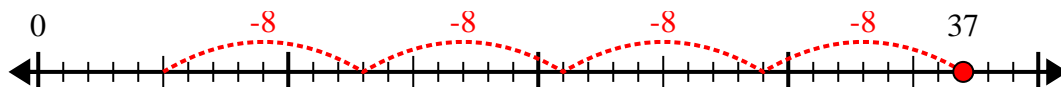


Use the number line to solve the division problem.

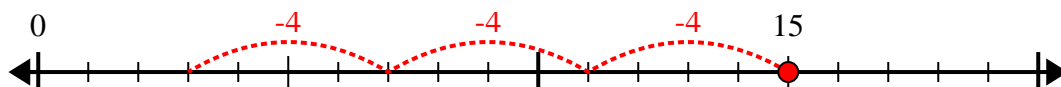
1) $23 \div 4 =$



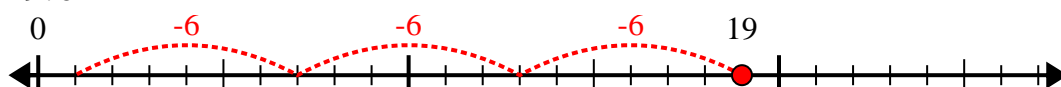
2) $37 \div 8 =$



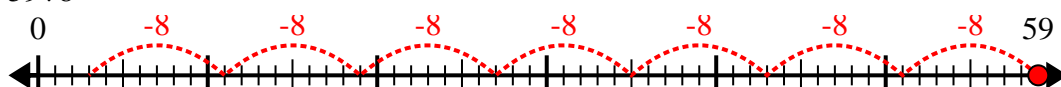
3) $15 \div 4 =$



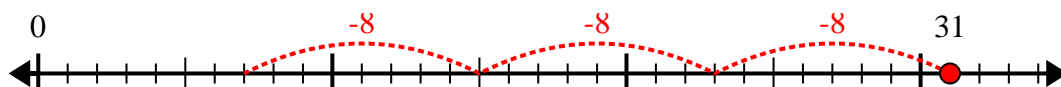
4) $19 \div 6 =$



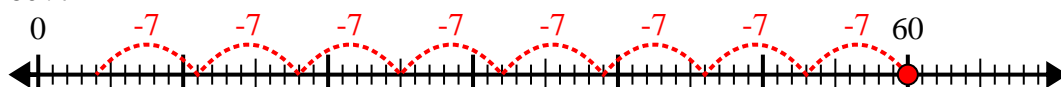
5) $59 \div 8 =$



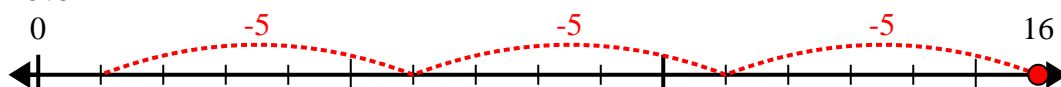
6) $31 \div 8 =$



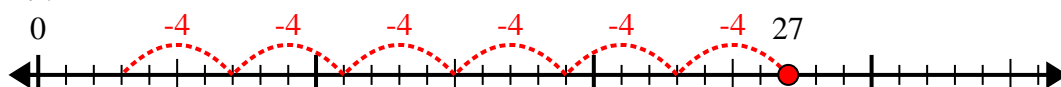
7) $60 \div 7 =$



8) $16 \div 5 =$



9) $27 \div 4 =$



10) $42 \div 5 =$



Answers

1. 5r3

2. 4r5

3. 3r3

4. 3r1

5. 7r3

6. 3r7

7. 8r4

8. 3r1

9. 6r3

10. 8r2