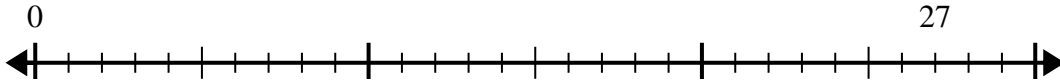


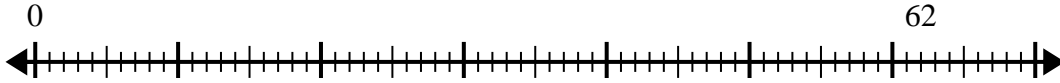


Use the number line to solve the division problem.

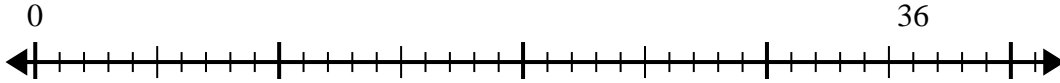
1)  $27 \div 4 =$   
0



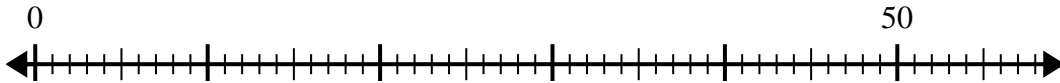
2)  $62 \div 8 =$   
0



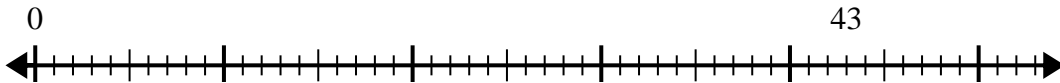
3)  $36 \div 5 =$   
0



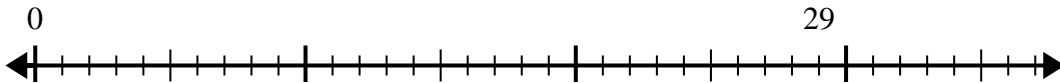
4)  $50 \div 8 =$   
0



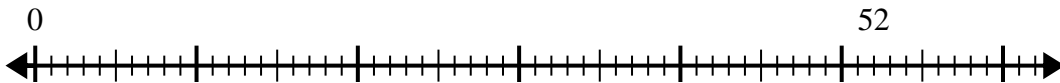
5)  $43 \div 6 =$   
0



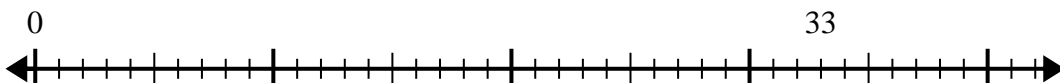
6)  $29 \div 6 =$   
0



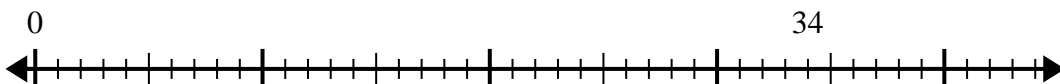
7)  $52 \div 6 =$   
0



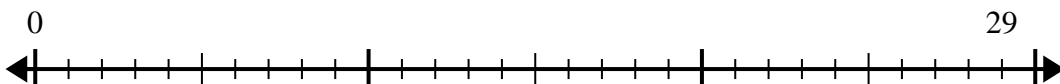
8)  $33 \div 5 =$   
0



9)  $34 \div 7 =$   
0



10)  $29 \div 4 =$   
0



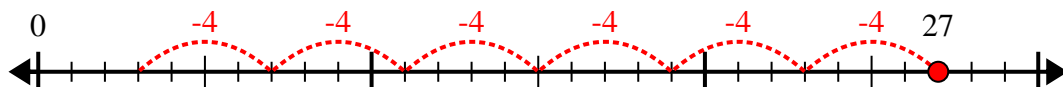
Answers

1. \_\_\_\_\_
2. \_\_\_\_\_
3. \_\_\_\_\_
4. \_\_\_\_\_
5. \_\_\_\_\_
6. \_\_\_\_\_
7. \_\_\_\_\_
8. \_\_\_\_\_
9. \_\_\_\_\_
10. \_\_\_\_\_

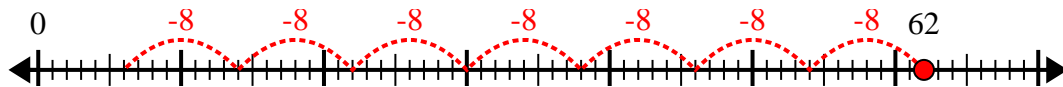


Use the number line to solve the division problem.

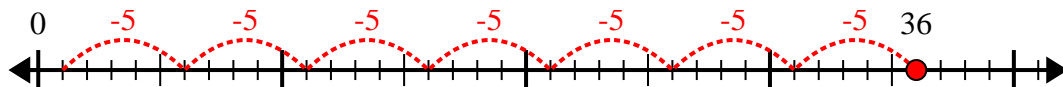
1)  $27 \div 4 =$



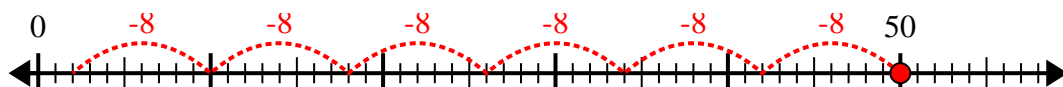
2)  $62 \div 8 =$



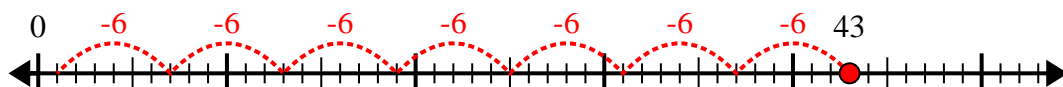
3)  $36 \div 5 =$



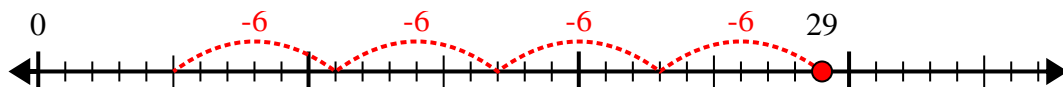
4)  $50 \div 8 =$



5)  $43 \div 6 =$



6)  $29 \div 6 =$



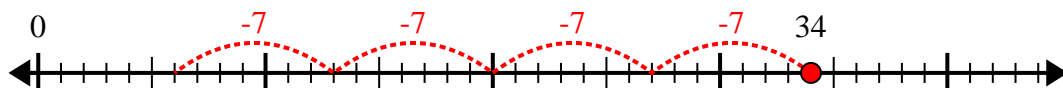
7)  $52 \div 6 =$



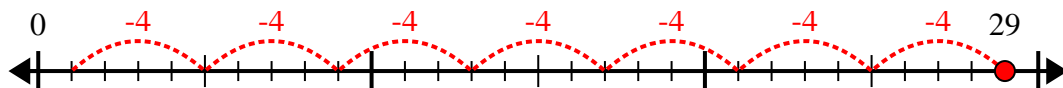
8)  $33 \div 5 =$



9)  $34 \div 7 =$



10)  $29 \div 4 =$



Answers

1. 6r3

2. 7r6

3. 7r1

4. 6r2

5. 7r1

6. 4r5

7. 8r4

8. 6r3

9. 4r6

10. 7r1