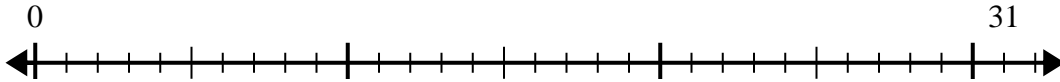


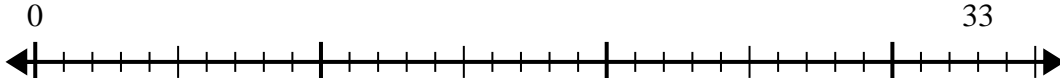


Use the number line to solve the division problem.

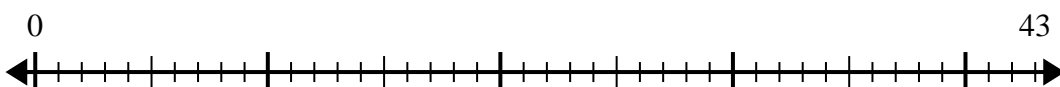
1) $31 \div 6 =$
0



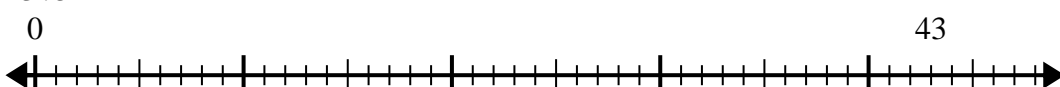
2) $33 \div 4 =$
0



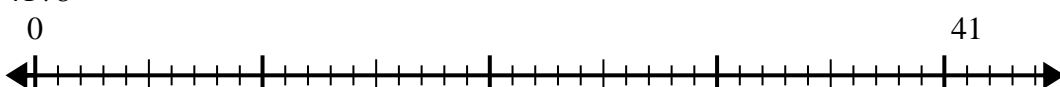
3) $43 \div 7 =$
0



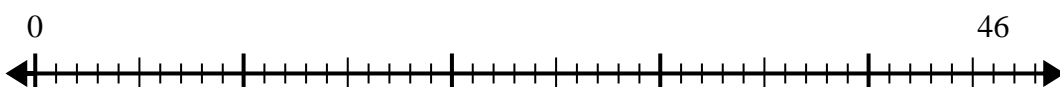
4) $43 \div 5 =$
0



5) $41 \div 8 =$
0



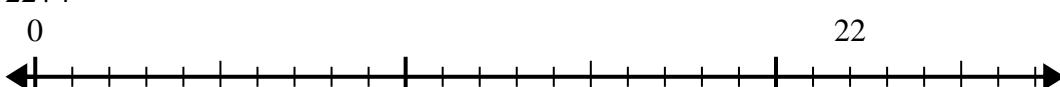
6) $46 \div 6 =$
0



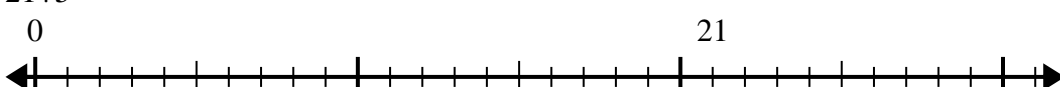
7) $52 \div 6 =$
0



8) $22 \div 4 =$
0



9) $21 \div 5 =$
0



10) $61 \div 8 =$
0



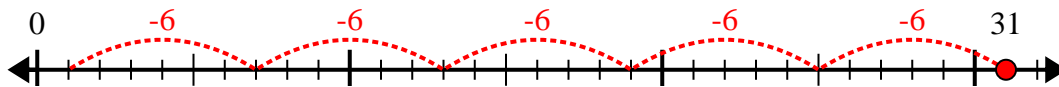
Answers

- 1. _____
- 2. _____
- 3. _____
- 4. _____
- 5. _____
- 6. _____
- 7. _____
- 8. _____
- 9. _____
- 10. _____

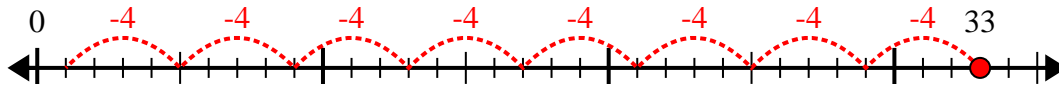


Use the number line to solve the division problem.

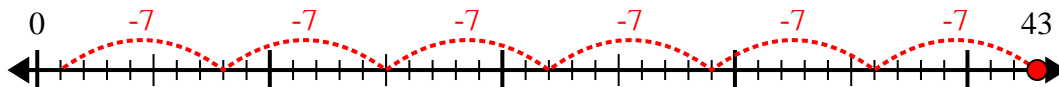
1) $31 \div 6 =$



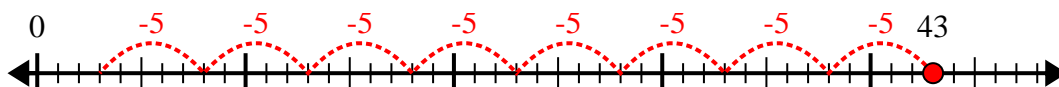
2) $33 \div 4 =$



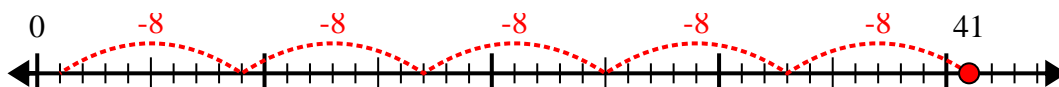
3) $43 \div 7 =$



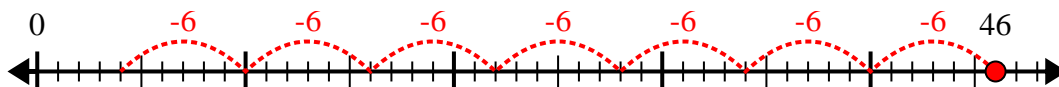
4) $43 \div 5 =$



5) $41 \div 8 =$



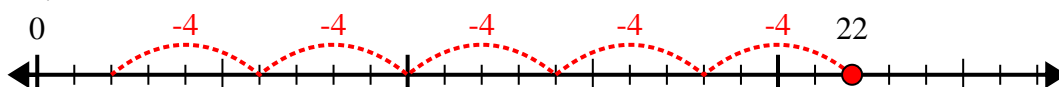
6) $46 \div 6 =$



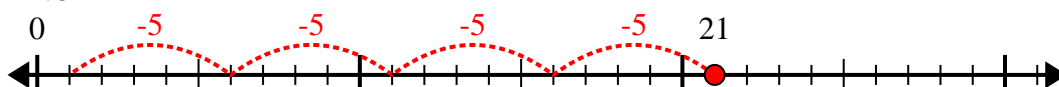
7) $52 \div 6 =$



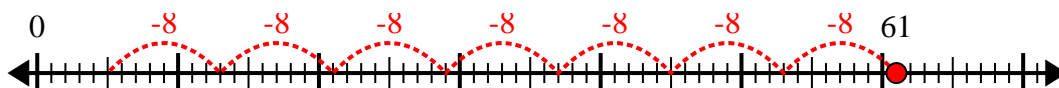
8) $22 \div 4 =$



9) $21 \div 5 =$



10) $61 \div 8 =$



Answers

1. 5r1

2. 8r1

3. 6r1

4. 8r3

5. 5r1

6. 7r4

7. 8r4

8. 5r2

9. 4r1

10. 7r5