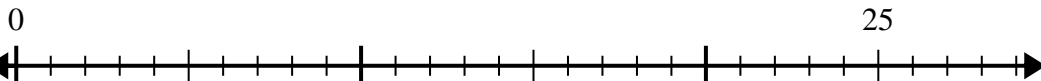




Use the number line to solve the division problem.

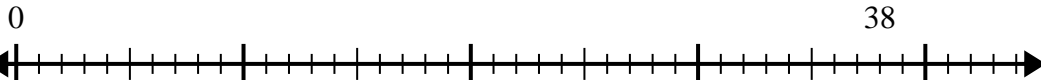
Answers

1) $25 \div 6 =$



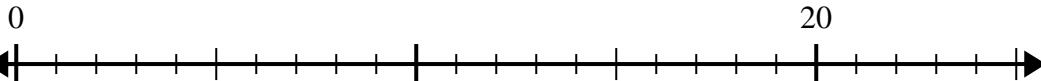
1. _____

2) $38 \div 7 =$



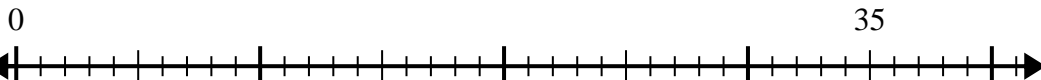
2. _____

3) $20 \div 6 =$



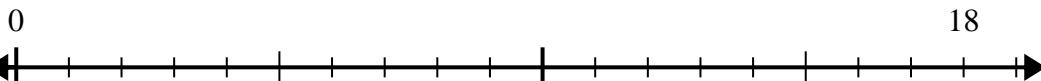
3. _____

4) $35 \div 6 =$



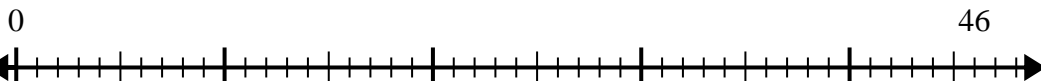
4. _____

5) $18 \div 5 =$



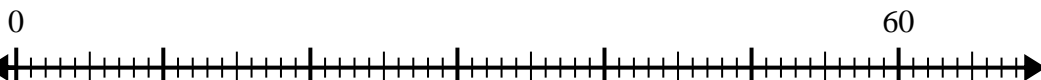
5. _____

6) $46 \div 6 =$



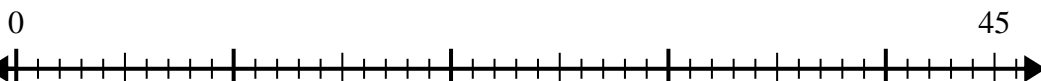
6. _____

7) $60 \div 8 =$



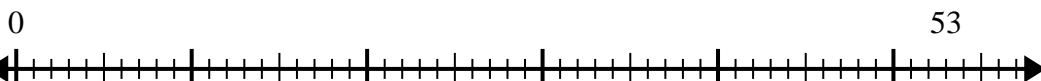
7. _____

8) $45 \div 7 =$



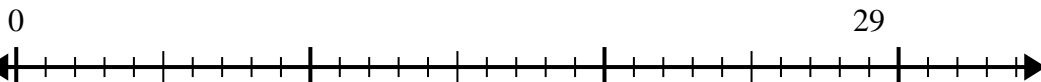
8. _____

9) $53 \div 8 =$



9. _____

10) $29 \div 4 =$

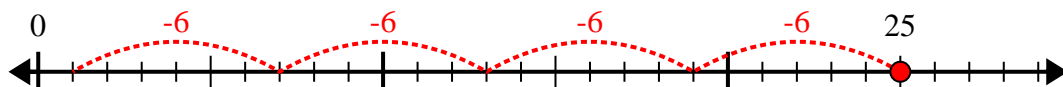


10. _____

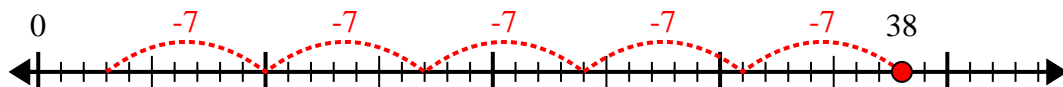


Use the number line to solve the division problem.

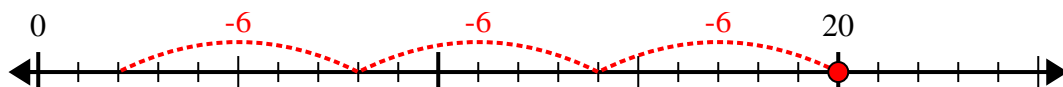
1) $25 \div 6 =$



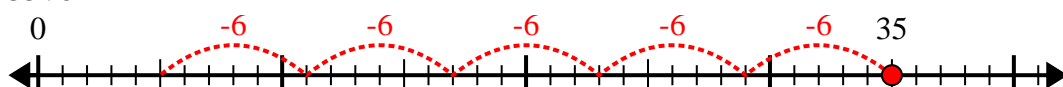
2) $38 \div 7 =$



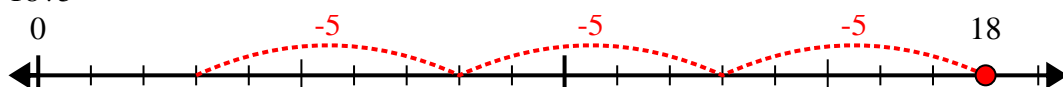
3) $20 \div 6 =$



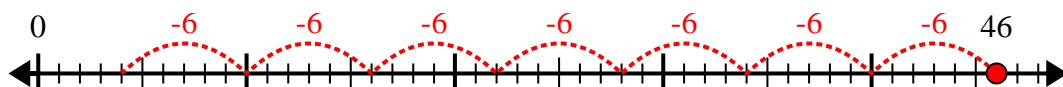
4) $35 \div 6 =$



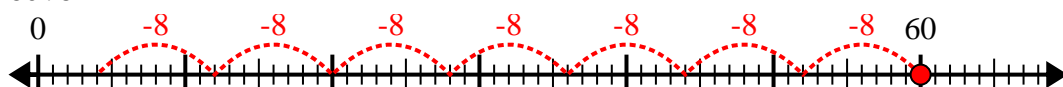
5) $18 \div 5 =$



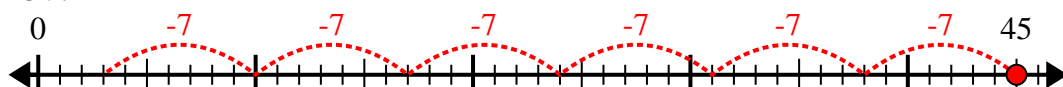
6) $46 \div 6 =$



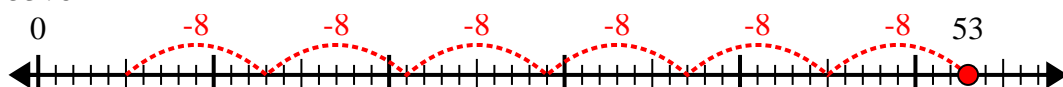
7) $60 \div 8 =$



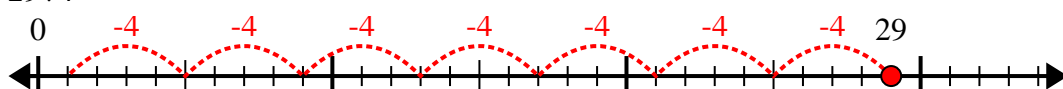
8) $45 \div 7 =$



9) $53 \div 8 =$



10) $29 \div 4 =$



Answers

1. 4r1

2. 5r3

3. 3r2

4. 5r5

5. 3r3

6. 7r4

7. 7r4

8. 6r3

9. 6r5

10. 7r1