

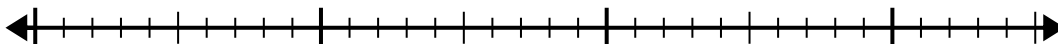


Use the number line to solve the division problem.

1) $30 \div 5 =$

0

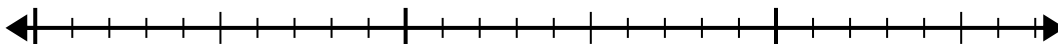
30



2) $24 \div 4 =$

0

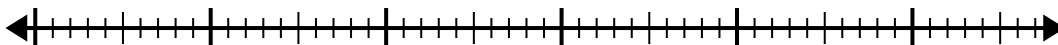
24



3) $48 \div 6 =$

0

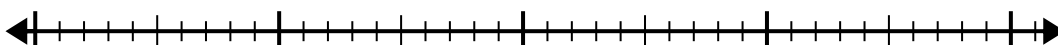
48



4) $32 \div 4 =$

0

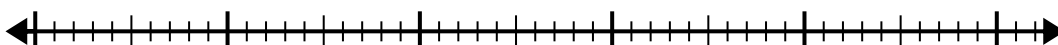
32



5) $42 \div 6 =$

0

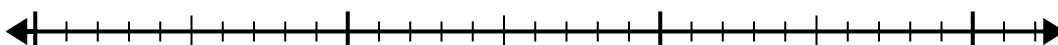
42



6) $24 \div 6 =$

0

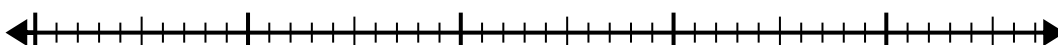
24



7) $40 \div 5 =$

0

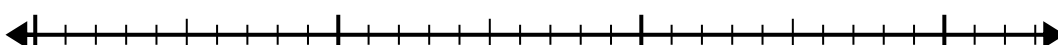
40



8) $24 \div 8 =$

0


24



9) $12 \div 4 =$

0

12



10) $35 \div 5 =$

0

35

**Answers**

1. _____

2. _____

3. _____

4. _____

5. _____

6. _____

7. _____

8. _____

9. _____

10. _____

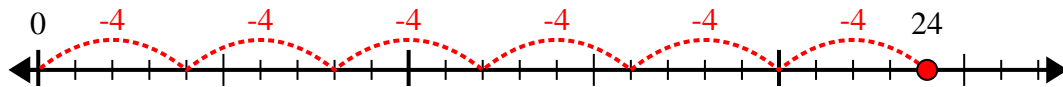


Use the number line to solve the division problem.

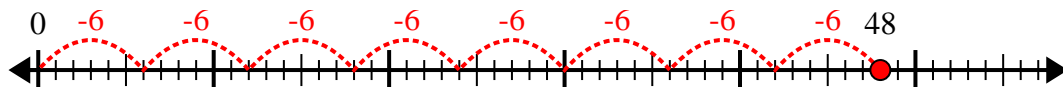
1) $30 \div 5 =$



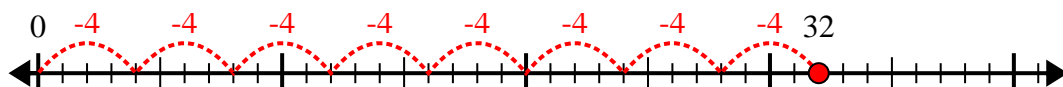
2) $24 \div 4 =$



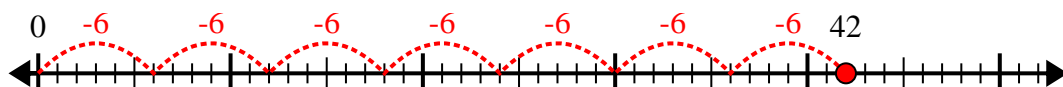
3) $48 \div 6 =$



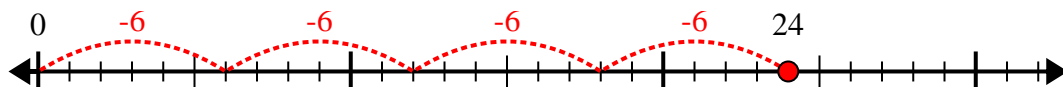
4) $32 \div 4 =$



5) $42 \div 6 =$



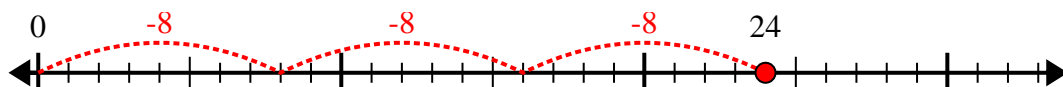
6) $24 \div 6 =$



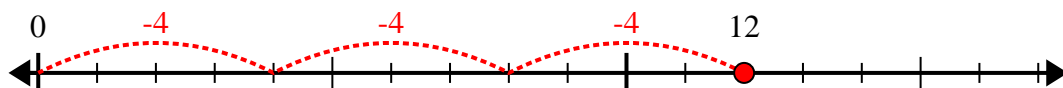
7) $40 \div 5 =$



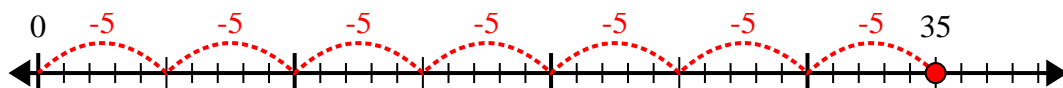
8) $24 \div 8 =$



9) $12 \div 4 =$



10) $35 \div 5 =$



Answers

1. 6

2. 6

3. 8

4. 8

5. 7

6. 4

7. 8

8. 3

9. 3

10. 7