

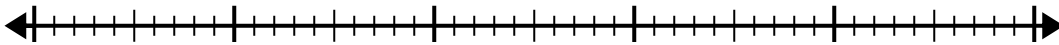


Use the number line to solve the division problem.

1)  $40 \div 5 =$

0

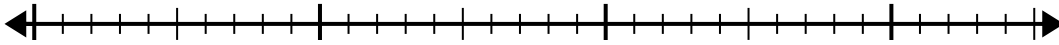
40



2)  $28 \div 4 =$

0

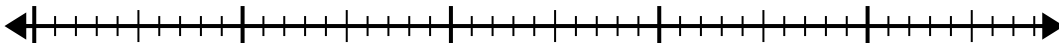
28



3)  $42 \div 6 =$

0

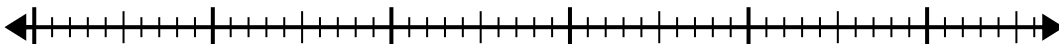
42



4)  $56 \div 8 =$

0

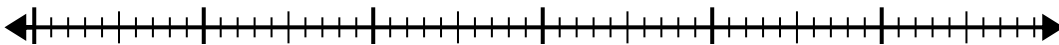
56



5)  $56 \div 7 =$

0

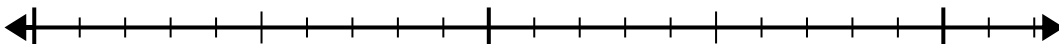
56



6)  $20 \div 5 =$

0

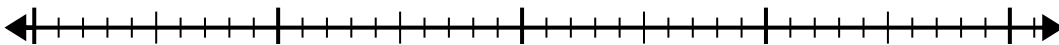
20



7)  $35 \div 7 =$

0

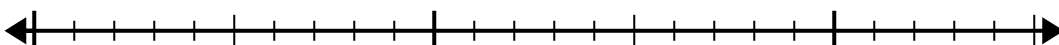
35



8)  $24 \div 8 =$

0

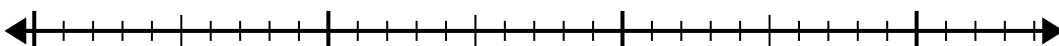
24



9)  $30 \div 5 =$

0

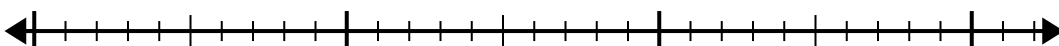
30



10)  $32 \div 4 =$

0

32

**Answers**

1. \_\_\_\_\_

2. \_\_\_\_\_

3. \_\_\_\_\_

4. \_\_\_\_\_

5. \_\_\_\_\_

6. \_\_\_\_\_

7. \_\_\_\_\_

8. \_\_\_\_\_

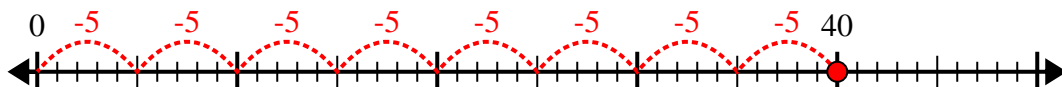
9. \_\_\_\_\_

10. \_\_\_\_\_

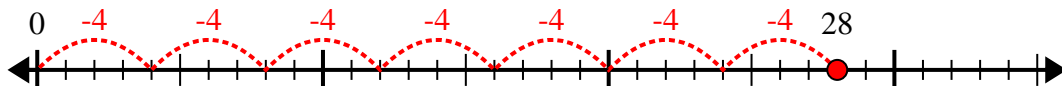


Use the number line to solve the division problem.

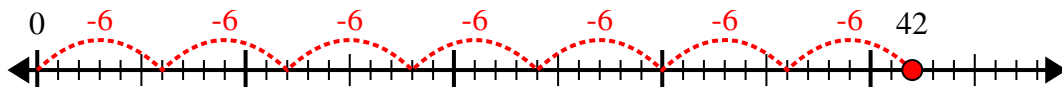
1)  $40 \div 5 =$



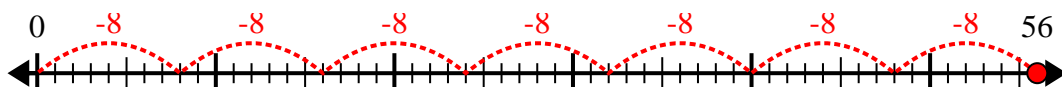
2)  $28 \div 4 =$



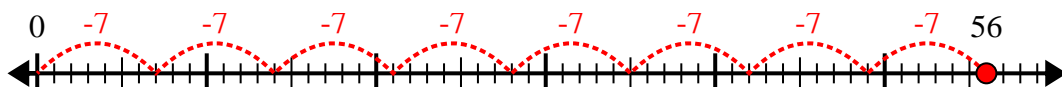
3)  $42 \div 6 =$



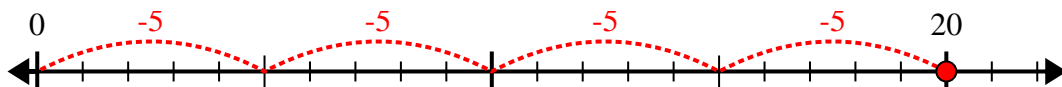
4)  $56 \div 8 =$



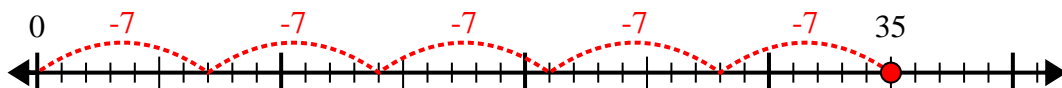
5)  $56 \div 7 =$



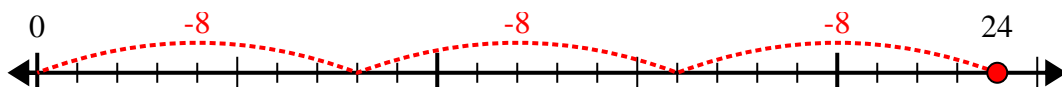
6)  $20 \div 5 =$



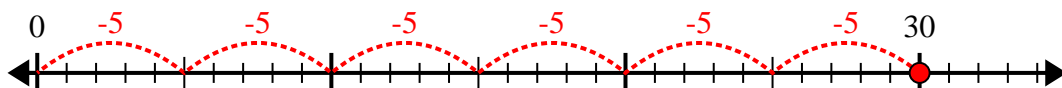
7)  $35 \div 7 =$



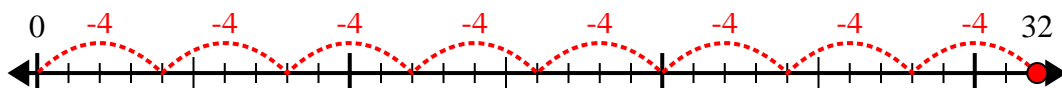
8)  $24 \div 8 =$



9)  $30 \div 5 =$



10)  $32 \div 4 =$



Answers

1. 8

2. 7

3. 7

4. 7

5. 8

6. 4

7. 5

8. 3

9. 6

10. 8