

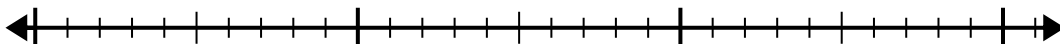


Use the number line to solve the division problem.

1)  $24 \div 8 =$

0


24



2)  $56 \div 8 =$

0

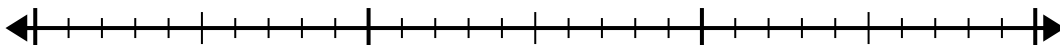
56



3)  $24 \div 4 =$

0

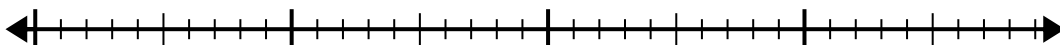
24



4)  $32 \div 4 =$

0

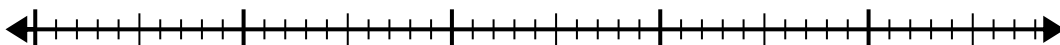
32



5)  $48 \div 8 =$

0

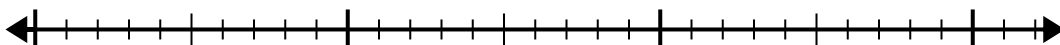
48



6)  $24 \div 6 =$

0

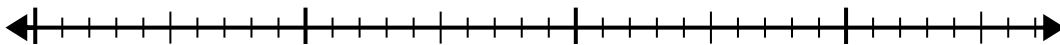
24



7)  $28 \div 4 =$

0

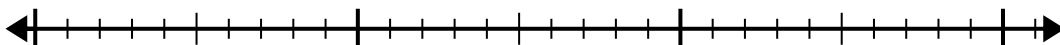
28



8)  $21 \div 7 =$

0

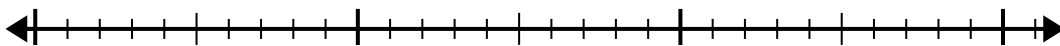
21



9)  $28 \div 7 =$

0

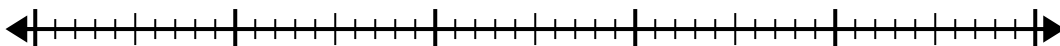
28



10)  $40 \div 5 =$

0

40



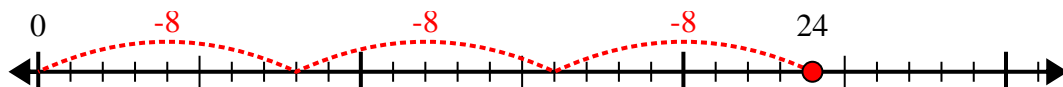
Answers

- 1. \_\_\_\_\_
- 2. \_\_\_\_\_
- 3. \_\_\_\_\_
- 4. \_\_\_\_\_
- 5. \_\_\_\_\_
- 6. \_\_\_\_\_
- 7. \_\_\_\_\_
- 8. \_\_\_\_\_
- 9. \_\_\_\_\_
- 10. \_\_\_\_\_

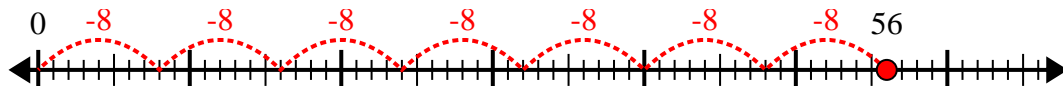


Use the number line to solve the division problem.

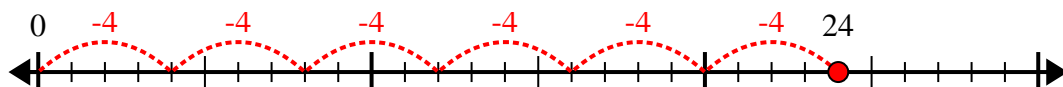
1)  $24 \div 8 =$



2)  $56 \div 8 =$



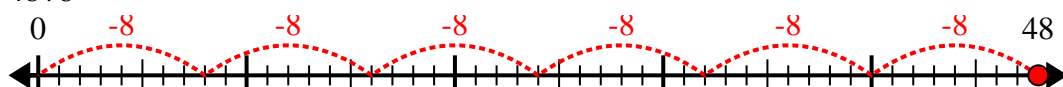
3)  $24 \div 4 =$



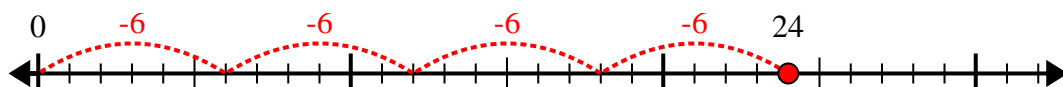
4)  $32 \div 4 =$



5)  $48 \div 8 =$



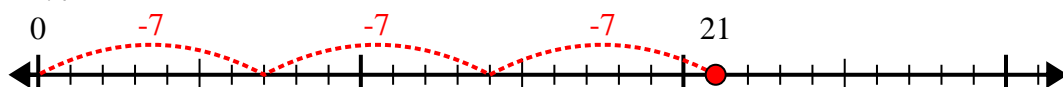
6)  $24 \div 6 =$



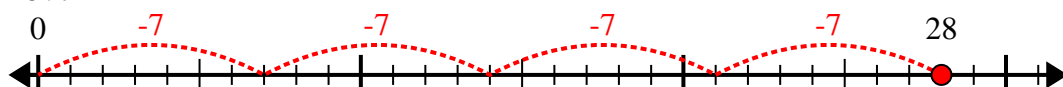
7)  $28 \div 4 =$



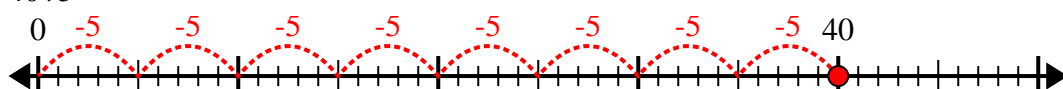
8)  $21 \div 7 =$



9)  $28 \div 7 =$



10)  $40 \div 5 =$



Answers

1. 3

2. 7

3. 6

4. 8

5. 6

6. 4

7. 7

8. 3

9. 4

10. 8