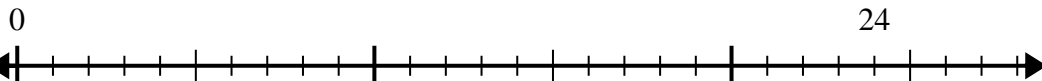




Use the number line to solve the division problem.

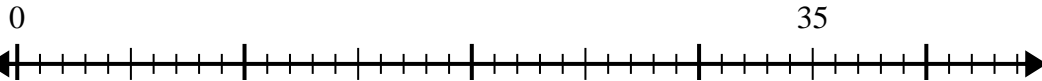
**Answers**

1)  $24 \div 6 =$



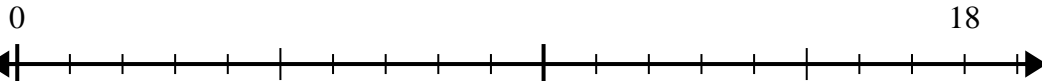
1. \_\_\_\_\_

2)  $35 \div 7 =$



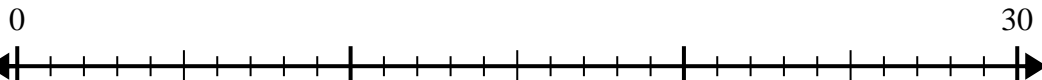
2. \_\_\_\_\_

3)  $18 \div 6 =$



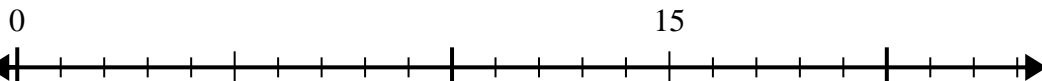
3. \_\_\_\_\_

4)  $30 \div 6 =$



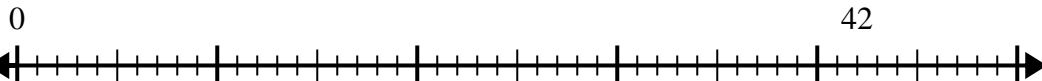
4. \_\_\_\_\_

5)  $15 \div 5 =$



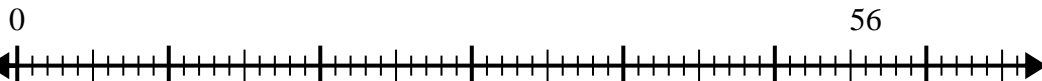
5. \_\_\_\_\_

6)  $42 \div 6 =$



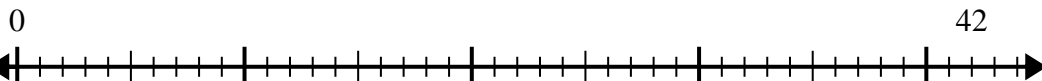
6. \_\_\_\_\_

7)  $56 \div 8 =$



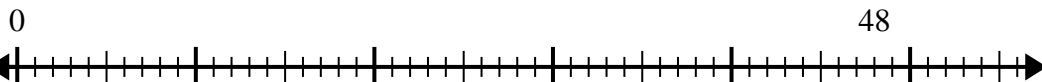
7. \_\_\_\_\_

8)  $42 \div 7 =$



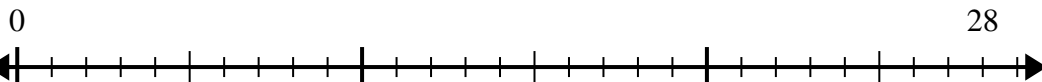
8. \_\_\_\_\_

9)  $48 \div 8 =$



9. \_\_\_\_\_

10)  $28 \div 4 =$

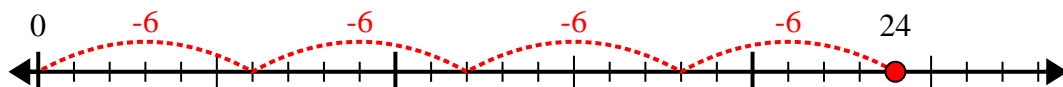


10. \_\_\_\_\_

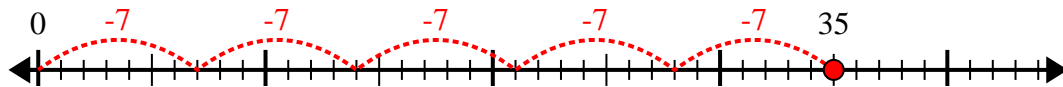


Use the number line to solve the division problem.

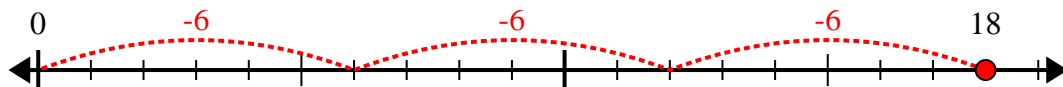
1)  $24 \div 6 =$



2)  $35 \div 7 =$



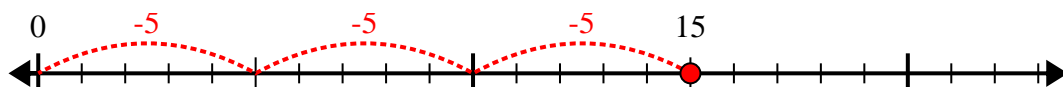
3)  $18 \div 6 =$



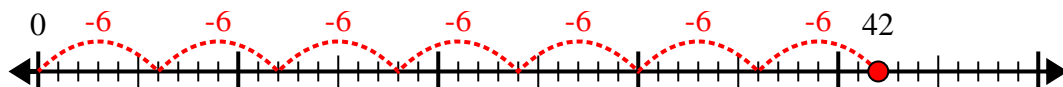
4)  $30 \div 6 =$



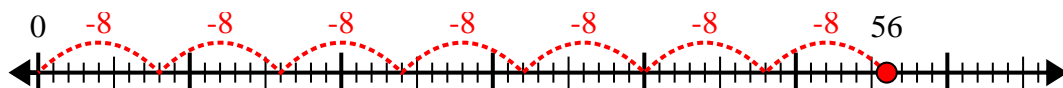
5)  $15 \div 5 =$



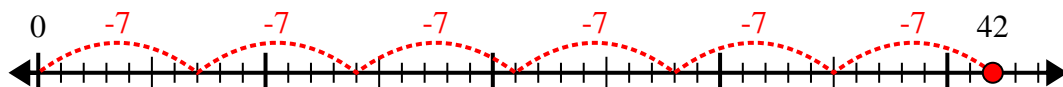
6)  $42 \div 6 =$



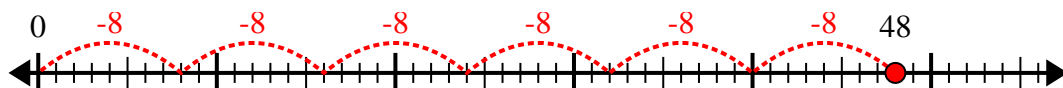
7)  $56 \div 8 =$



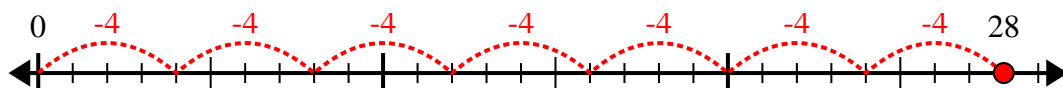
8)  $42 \div 7 =$



9)  $48 \div 8 =$



10)  $28 \div 4 =$



Answers

1. 4

2. 5

3. 3

4. 5

5. 3

6. 7

7. 7

8. 6

9. 6

10. 7