

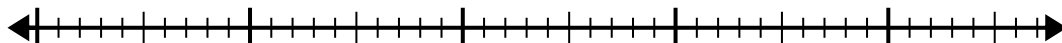


Use the number line to solve the division problem.

1) $40 \div 5 =$

0

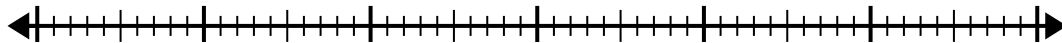
40



2) $56 \div 7 =$

0

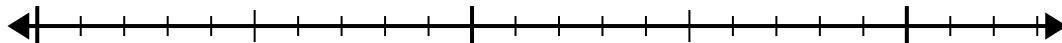
56



3) $15 \div 5 =$

0

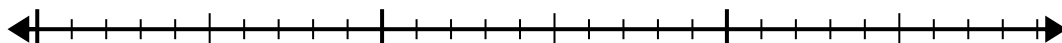
15



4) $28 \div 4 =$

0

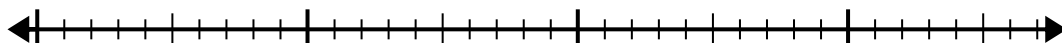
28



5) $35 \div 7 =$

0

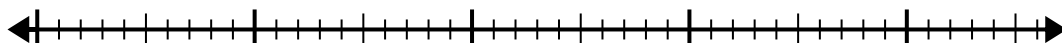
35



6) $40 \div 8 =$

0

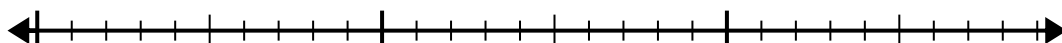
40



7) $24 \div 4 =$

0

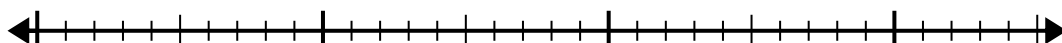
24



8) $30 \div 5 =$

0

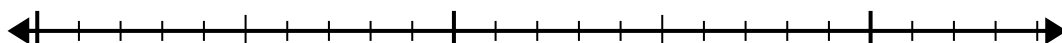
30



9) $20 \div 4 =$

0

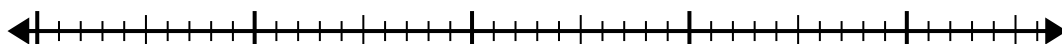
20



10) $42 \div 6 =$

0

42



Answers

1. _____

2. _____

3. _____

4. _____

5. _____

6. _____

7. _____

8. _____

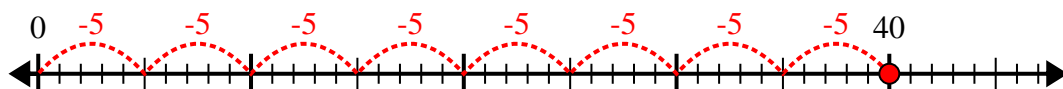
9. _____

10. _____

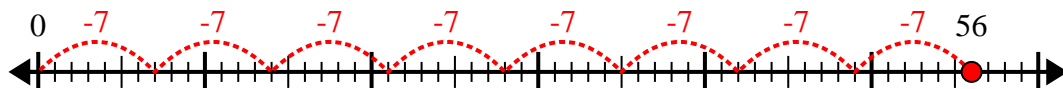


Use the number line to solve the division problem.

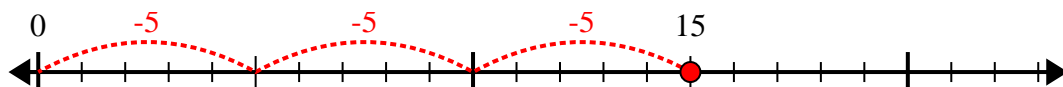
1) $40 \div 5 =$



2) $56 \div 7 =$



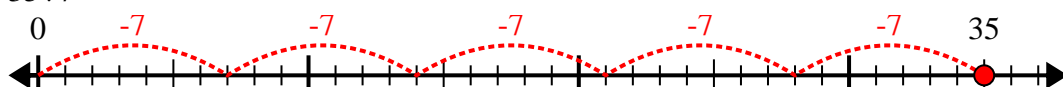
3) $15 \div 5 =$



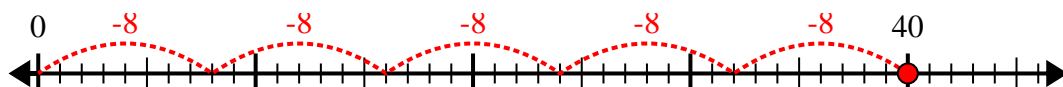
4) $28 \div 4 =$



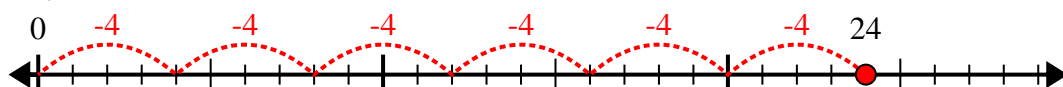
5) $35 \div 7 =$



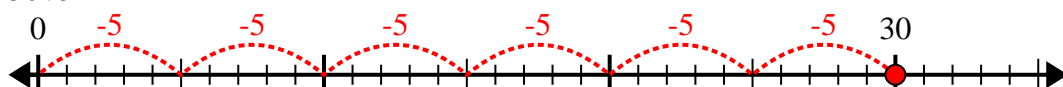
6) $40 \div 8 =$



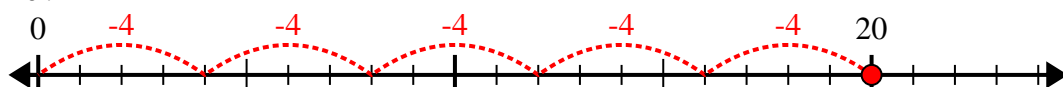
7) $24 \div 4 =$



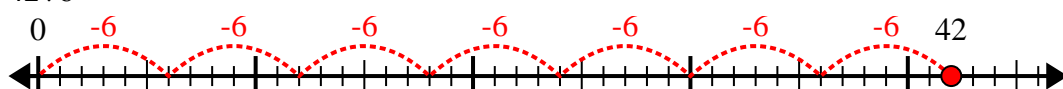
8) $30 \div 5 =$



9) $20 \div 4 =$



10) $42 \div 6 =$



Answers

1. 8

2. 8

3. 3

4. 7

5. 5

6. 5

7. 6

8. 6

9. 5

10. 7