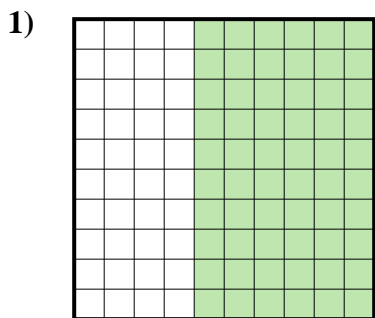


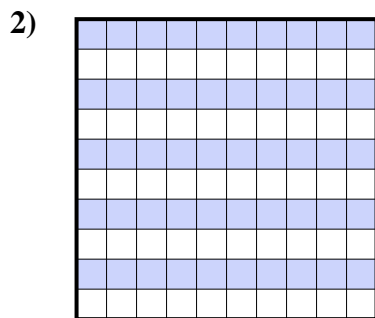


Determine which letter best represents the amount shaded of the whole.

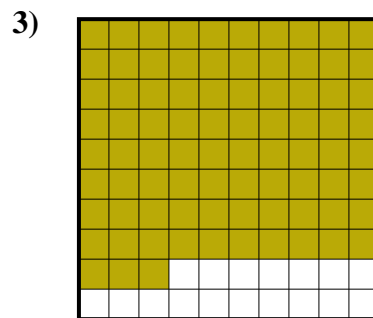
Answers



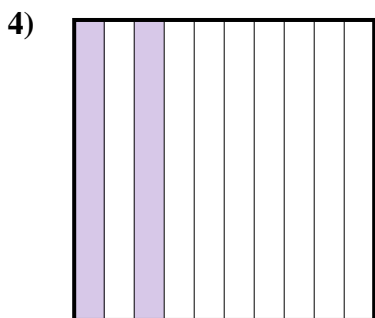
- A. 600.0
- B. 0.6
- C. 600.00
- D. 0.06



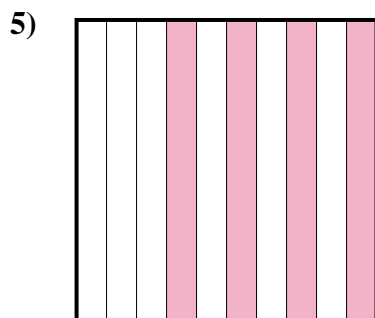
- A. 5
- B. 500.0
- C. 0.5
- D. 50



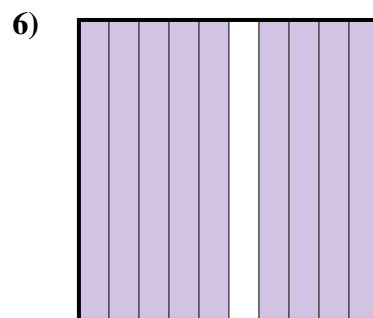
- A. 83
- B. 0.83
- C. 8.3
- D. 830.0



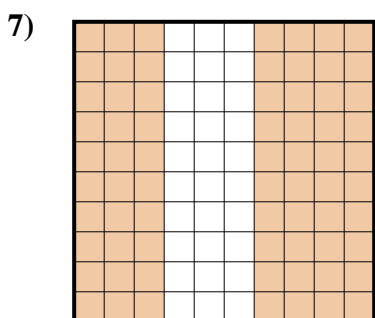
- A. 20
- B. 0.2
- C. 0.02
- D. 200.0




- A. 40
- B. 0.4
- C. 400.0
- D. 400.00



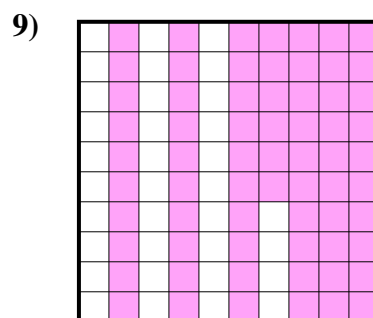
- A. 0.9
- B. 900.00
- C. 0.09
- D. 90



- A. 0.7
- B. 70
- C. 700.00
- D. 7



- A. 7
- B. 700.0
- C. 0.7
- D. 700.00



- A. 66
- B. 0.66
- C. 660.0
- D. 660.00

1. \_\_\_\_\_

2. \_\_\_\_\_

3. \_\_\_\_\_

4. \_\_\_\_\_

5. \_\_\_\_\_

6. \_\_\_\_\_

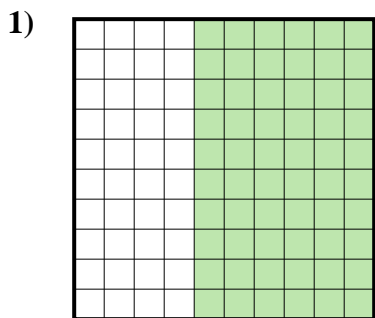
7. \_\_\_\_\_

8. \_\_\_\_\_

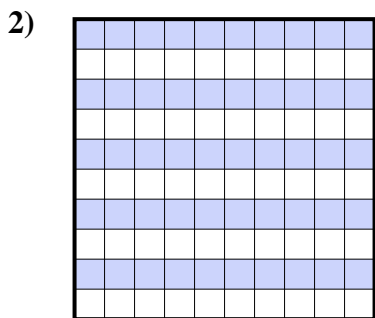
9. \_\_\_\_\_



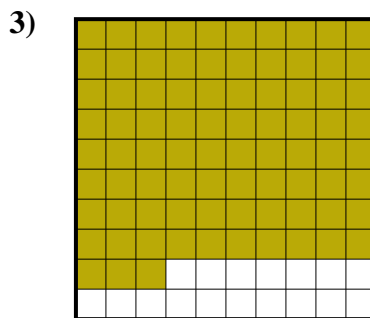
Determine which letter best represents the amount shaded of the whole.



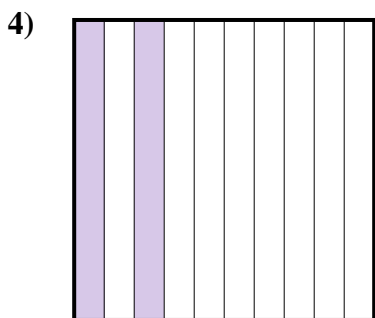
- A. 600.0
- B. 0.6
- C. 600.00
- D. 0.06



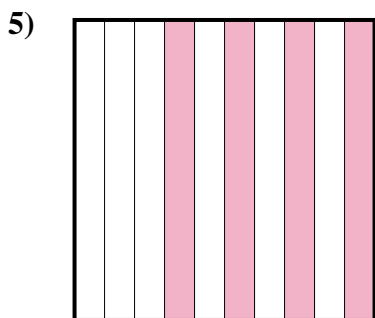
- A. 5
- B. 500.0
- C. 0.5
- D. 50



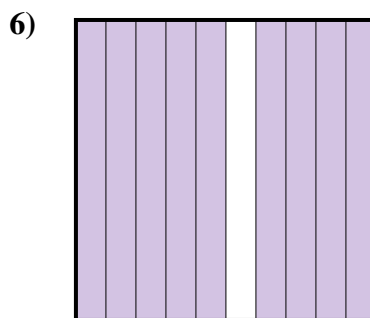
- A. 83
- B. 0.83
- C. 8.3
- D. 830.0



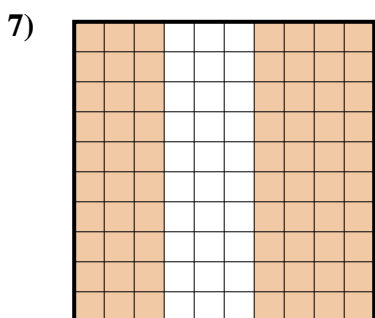
- A. 20
- B. 0.2
- C. 0.02
- D. 200.0




- A. 40
- B. 0.4
- C. 400.0
- D. 400.00



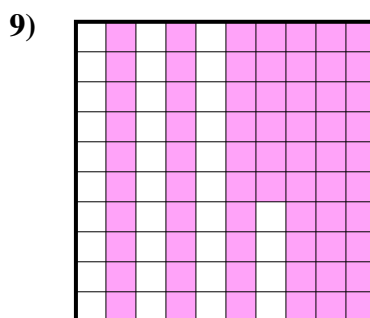
- A. 0.9
- B. 900.00
- C. 0.09
- D. 90



- A. 0.7
- B. 70
- C. 700.00
- D. 7



- A. 7
- B. 700.0
- C. 0.7
- D. 700.00



- A. 66
- B. 0.66
- C. 660.0
- D. 660.00

Answers

- 1. **B**
- 2. **C**
- 3. **B**
- 4. **B**
- 5. **B**
- 6. **A**
- 7. **A**
- 8. **C**
- 9. **B**