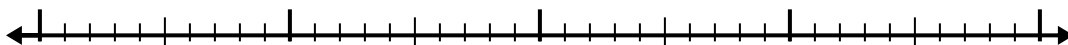


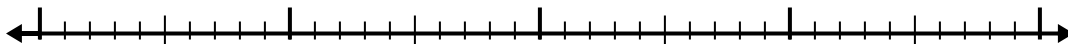


Use the number line to solve each problem.


1) $11.3 - 2.7 =$



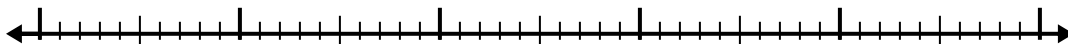
2) $6.9 - 2.6 =$



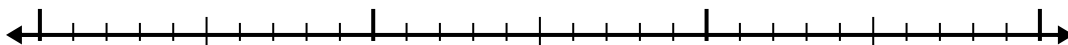
3) $5.3 - 3.1 =$



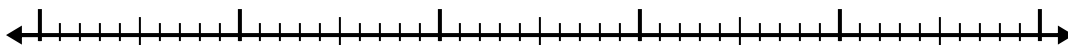
4) $4.5 - 2.3 =$



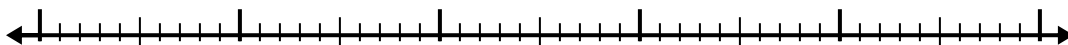
5) $10.3 - 1.5 =$



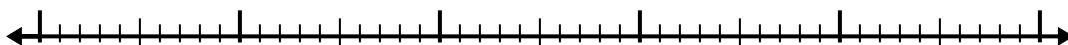
6) $10.7 - 3.5 =$



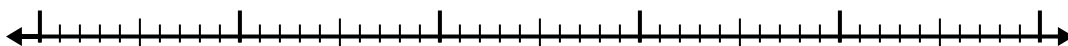
7) $6.9 - 2.8 =$



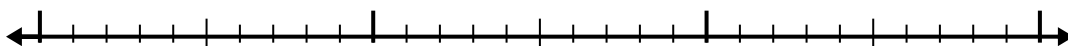
8) $5.4 - 2.7 =$



9) $6.6 - 3.4 =$



10) $2.9 - 1.5 =$



Answers

1. _____

2. _____

3. _____

4. _____

5. _____

6. _____

7. _____

8. _____

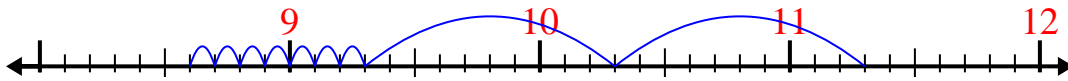
9. _____

10. _____

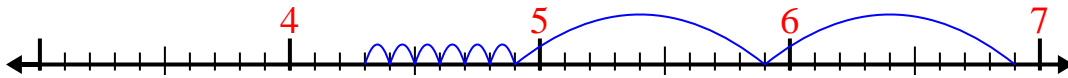


Use the number line to solve each problem.

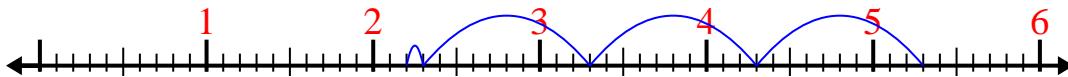
1) $11.3 - 2.7 =$



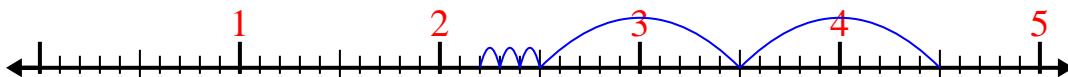
2) $6.9 - 2.6 =$



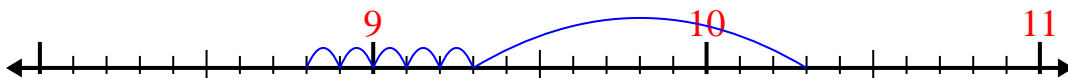
3) $5.3 - 3.1 =$



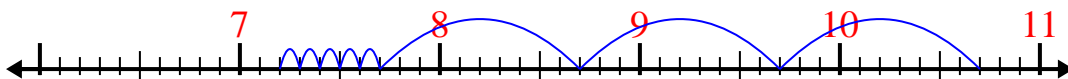
4) $4.5 - 2.3 =$



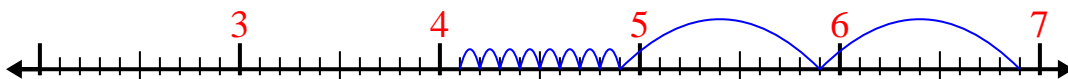
5) $10.3 - 1.5 =$



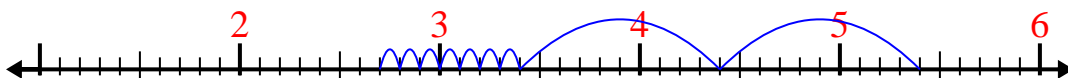
6) $10.7 - 3.5 =$



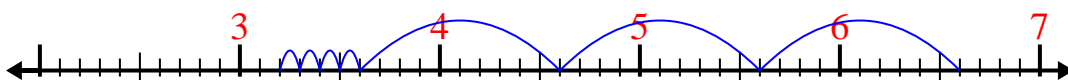
7) $6.9 - 2.8 =$



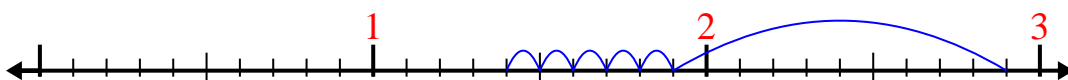
8) $5.4 - 2.7 =$



9) $6.6 - 3.4 =$



10) $2.9 - 1.5 =$

Answers1. 8.62. 4.33. 2.24. 2.25. 8.86. 7.27. 4.18. 2.79. 3.210. 1.4