


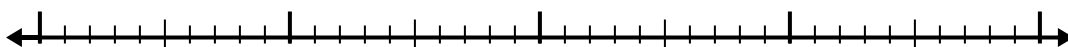


Use the number line to solve each problem.


1) $5.5 - 3.4 =$



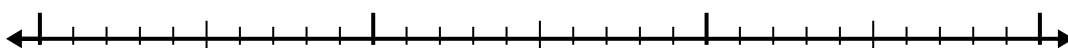
2) $4.6 - 2.1 =$



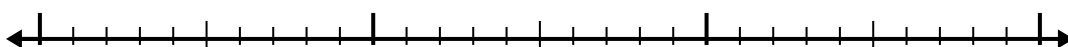
3) $8.1 - 1.2 =$



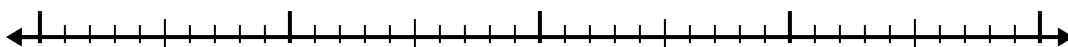
4) $8.1 - 1.3 =$



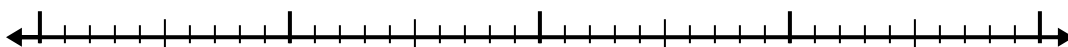
5) $8.9 - 1.8 =$




6) $5.9 - 2.1 =$



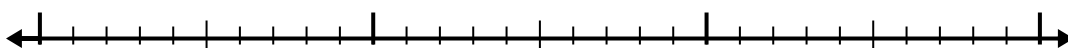
7) $9.3 - 2.1 =$




8) $7.8 - 1.8 =$



9) $5.6 - 1.1 =$



10) $6 - 2.7 =$



Answers

1. _____

2. _____

3. _____

4. _____

5. _____

6. _____

7. _____

8. _____

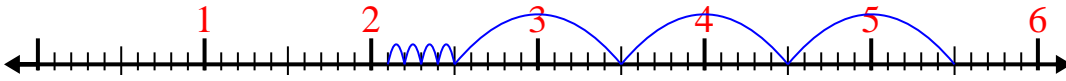
9. _____

10. _____

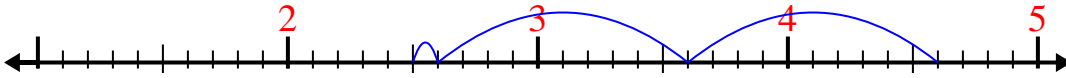


Use the number line to solve each problem.

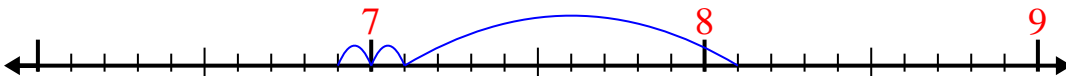
1) $5.5 - 3.4 =$




2) $4.6 - 2.1 =$



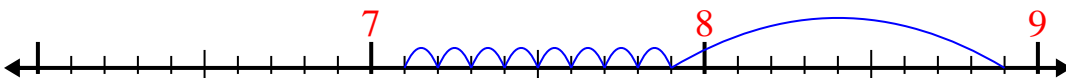
3) $8.1 - 1.2 =$



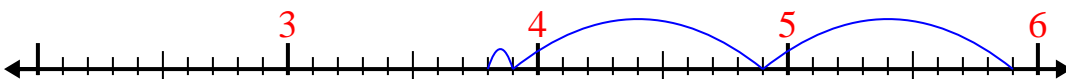
4) $8.1 - 1.3 =$



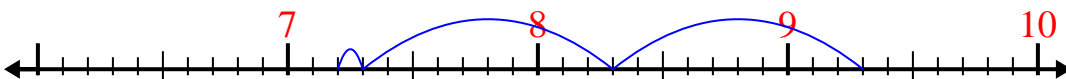
5) $8.9 - 1.8 =$



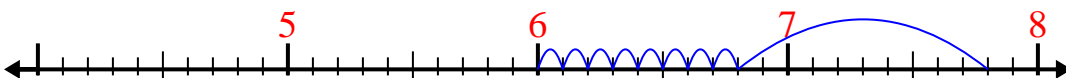
6) $5.9 - 2.1 =$



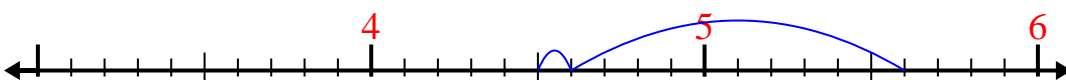
7) $9.3 - 2.1 =$



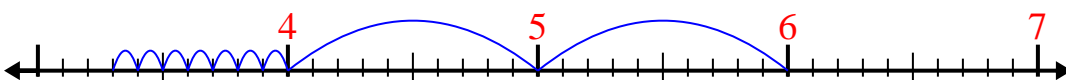
8) $7.8 - 1.8 =$



9) $5.6 - 1.1 =$



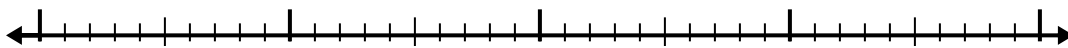
10) $6 - 2.7 =$

Answers1. 2.12. 2.53. 6.94. 6.85. 7.16. 3.87. 7.28. 69. 4.510. 3.3




Use the number line to solve each problem.


1) $7.8 - 1.7 =$



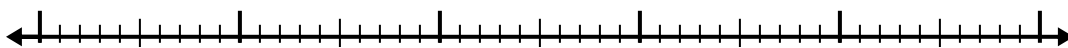
2) $4.1 - 1.3 =$



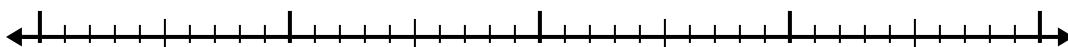
3) $6.9 - 1.3 =$



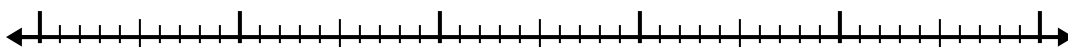
4) $11.2 - 3.7 =$



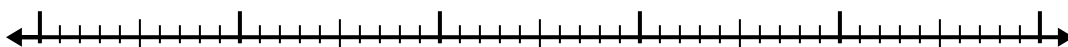
5) $10.7 - 2.9 =$



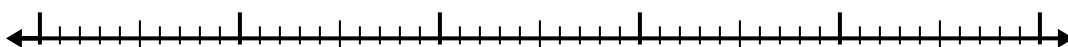
6) $5.9 - 2.5 =$



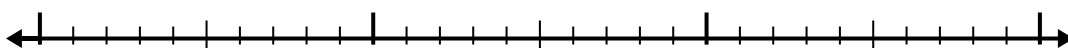
7) $9.4 - 2.7 =$



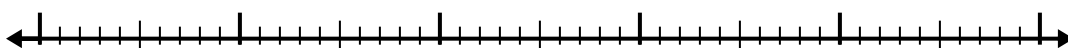
8) $5.4 - 3.3 =$



9) $2.7 - 1.7 =$



10) $6.1 - 3.1 =$



Answers

1. _____

2. _____

3. _____

4. _____

5. _____

6. _____

7. _____

8. _____

9. _____

10. _____

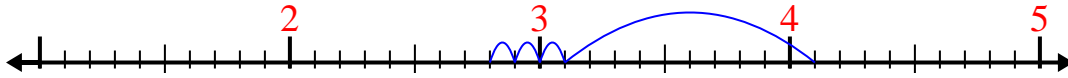


Use the number line to solve each problem.

1) $7.8 - 1.7 =$



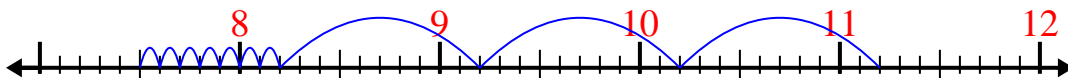
2) $4.1 - 1.3 =$



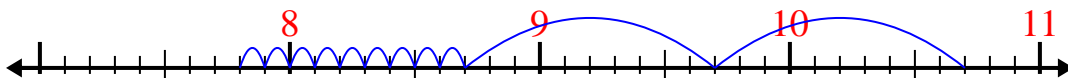
3) $6.9 - 1.3 =$



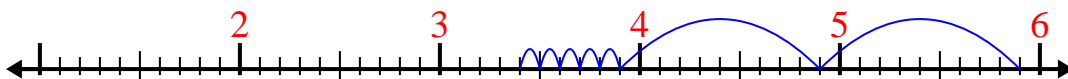
4) $11.2 - 3.7 =$



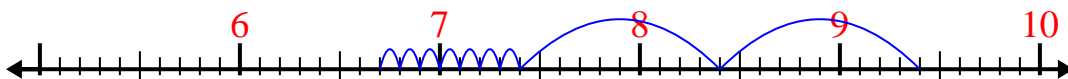
5) $10.7 - 2.9 =$



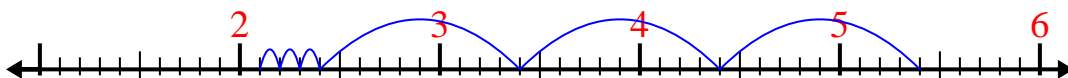
6) $5.9 - 2.5 =$



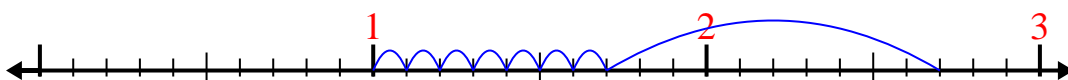
7) $9.4 - 2.7 =$



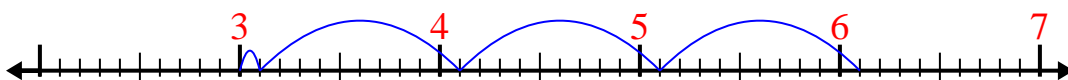
8) $5.4 - 3.3 =$



9) $2.7 - 1.7 =$



10) $6.1 - 3.1 =$



Answers

1. 6.1

2. 2.8

3. 5.6

4. 7.5

5. 7.8

6. 3.4

7. 6.7

8. 2.1

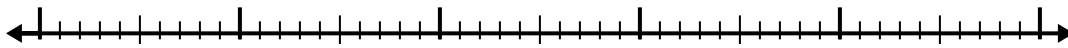
9. 1

10. 3

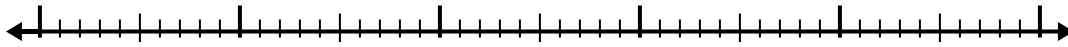


Use the number line to solve each problem.


1) $6.2 - 3.6 =$



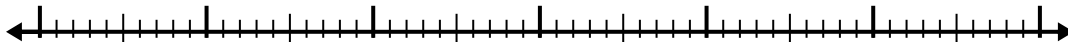
2) $5.2 - 2.2 =$



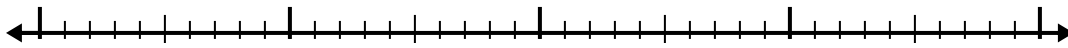
3) $3.3 - 2.2 =$



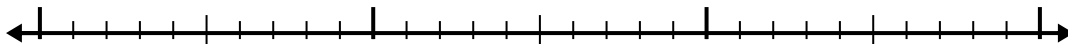
4) $7.6 - 3.9 =$



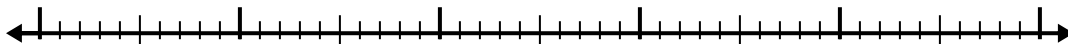
5) $10.4 - 2.2 =$



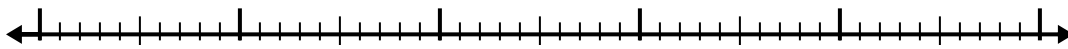
6) $7.2 - 1.8 =$



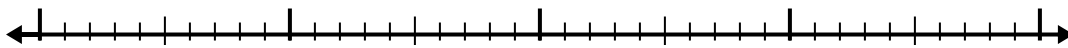
7) $5.8 - 3.6 =$



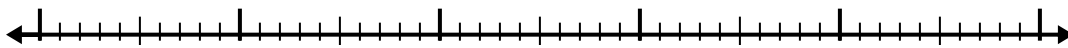
8) $8.2 - 2.8 =$



9) $5.7 - 2.2 =$



10) $4.1 - 2.2 =$



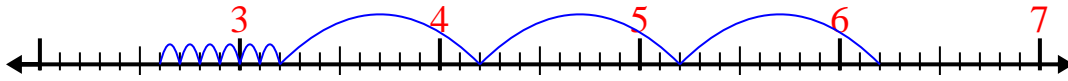
Answers

- 1. _____
- 2. _____
- 3. _____
- 4. _____
- 5. _____
- 6. _____
- 7. _____
- 8. _____
- 9. _____
- 10. _____

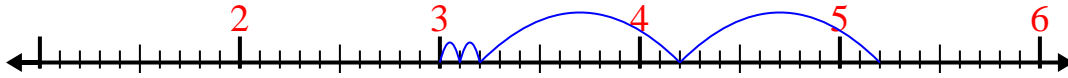


Use the number line to solve each problem.

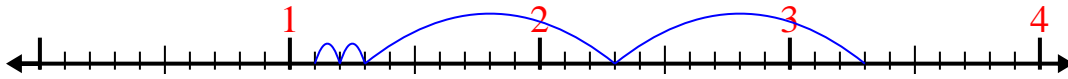
1) $6.2 - 3.6 =$



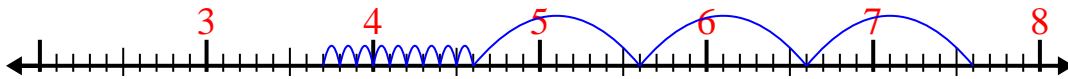
2) $5.2 - 2.2 =$



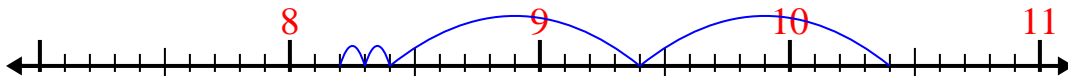
3) $3.3 - 2.2 =$



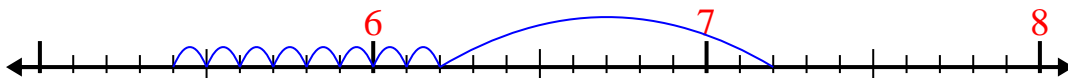
4) $7.6 - 3.9 =$



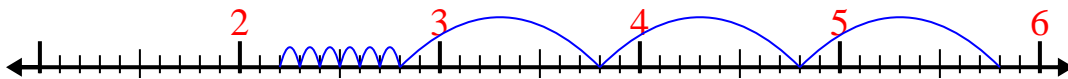
5) $10.4 - 2.2 =$



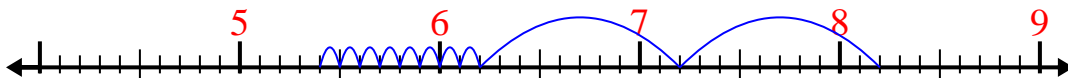
6) $7.2 - 1.8 =$



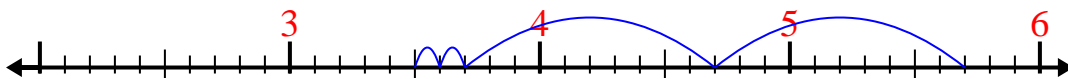
7) $5.8 - 3.6 =$




8) $8.2 - 2.8 =$



9) $5.7 - 2.2 =$




10) $4.1 - 2.2 =$

Answers1. 2.62. 33. 1.14. 3.75. 8.26. 5.47. 2.28. 5.49. 3.510. 1.9




Use the number line to solve each problem.

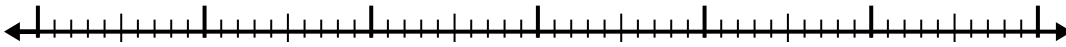
1) $5.8 - 3.1 =$



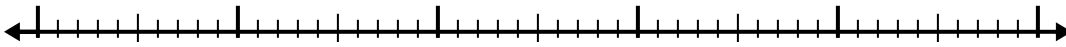
2) $7.4 - 2.3 =$



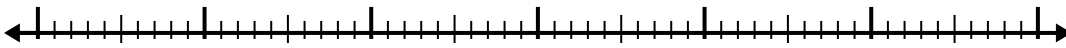
3) $10.3 - 3.1 =$



4) $6.9 - 3.7 =$



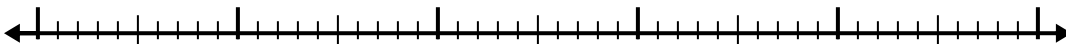
5) $11.2 - 3.6 =$




6) $4.5 - 2.7 =$



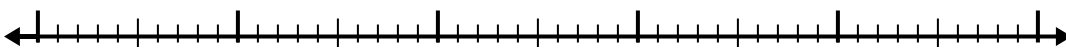
7) $4.1 - 2.4 =$



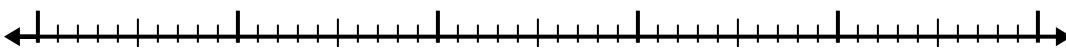
8) $12.4 - 3.6 =$



9) $11.5 - 2.6 =$



10) $9.2 - 3.9 =$



Answers

1. _____

2. _____

3. _____

4. _____

5. _____

6. _____

7. _____

8. _____

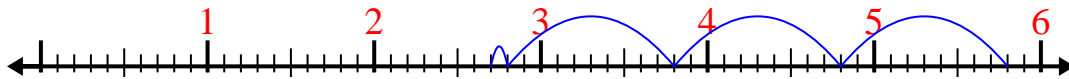
9. _____

10. _____

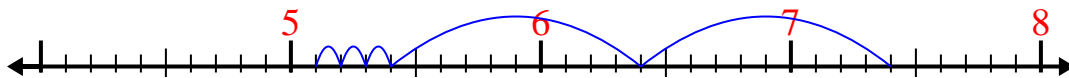


Use the number line to solve each problem.

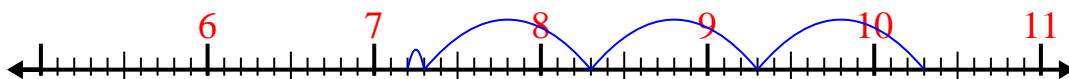
1) $5.8 - 3.1 =$



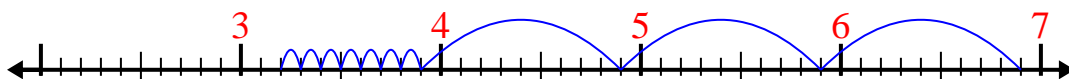
2) $7.4 - 2.3 =$



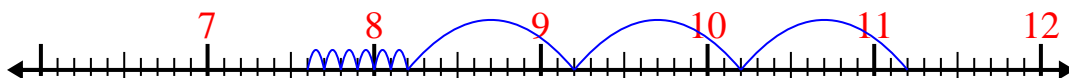
3) $10.3 - 3.1 =$



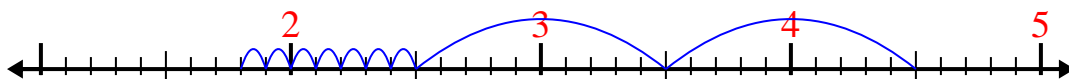
4) $6.9 - 3.7 =$



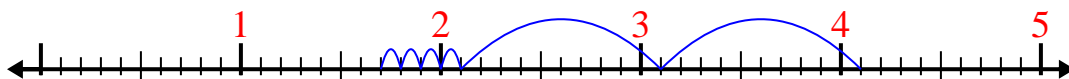
5) $11.2 - 3.6 =$



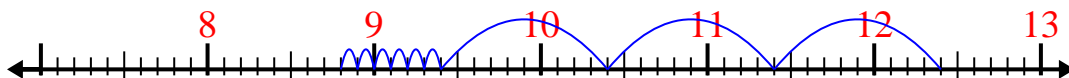
6) $4.5 - 2.7 =$



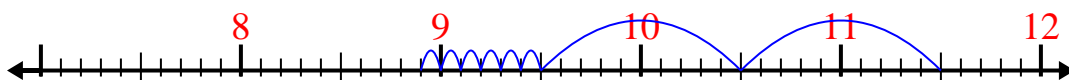
7) $4.1 - 2.4 =$



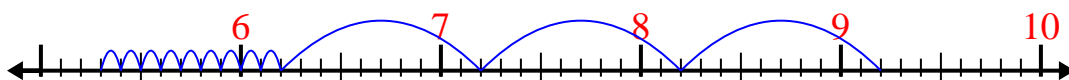
8) $12.4 - 3.6 =$



9) $11.5 - 2.6 =$



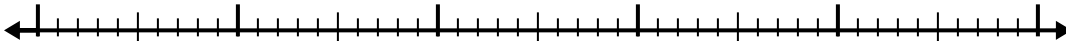
10) $9.2 - 3.9 =$

Answers1. 2.72. 5.13. 7.24. 3.25. 7.66. 1.87. 1.78. 8.89. 8.910. 5.3

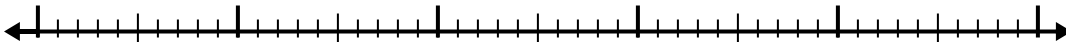


Use the number line to solve each problem.

1) $8.6 - 3.8 =$



2) $8.8 - 2.7 =$



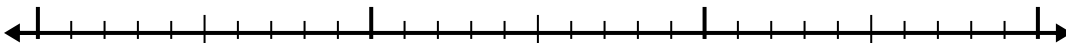
3) $6.8 - 1.3 =$



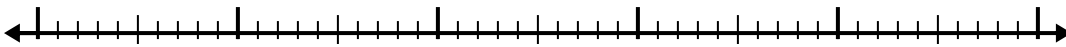
4) $5.2 - 2.4 =$



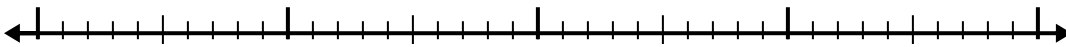
5) $2.7 - 1.3 =$




6) $7 - 2.4 =$



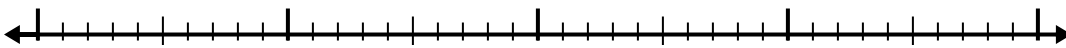
7) $10.5 - 2.5 =$



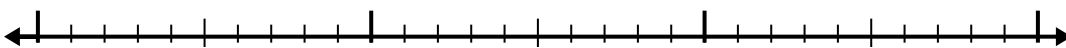
8) $12.3 - 3.8 =$



9) $4.2 - 2.7 =$



10) $3 - 1.3 =$



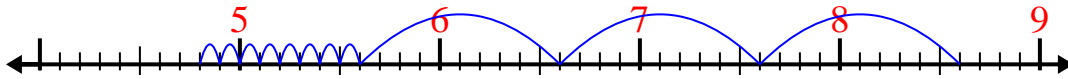
Answers

- 1. _____
- 2. _____
- 3. _____
- 4. _____
- 5. _____
- 6. _____
- 7. _____
- 8. _____
- 9. _____
- 10. _____

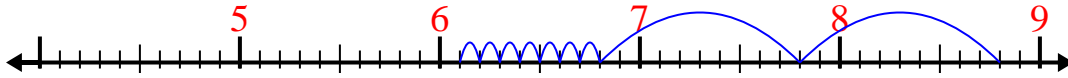


Use the number line to solve each problem.

1) $8.6 - 3.8 =$



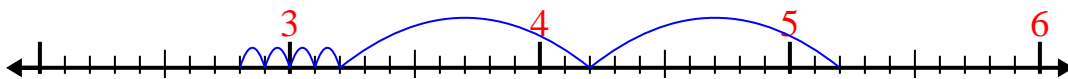
2) $8.8 - 2.7 =$



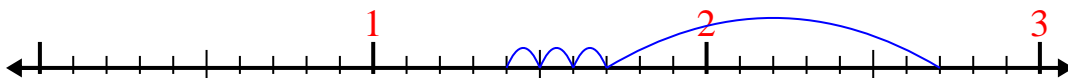
3) $6.8 - 1.3 =$



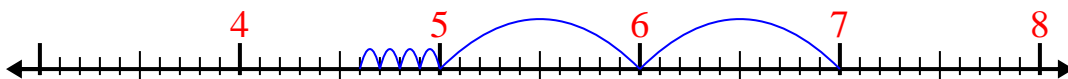
4) $5.2 - 2.4 =$



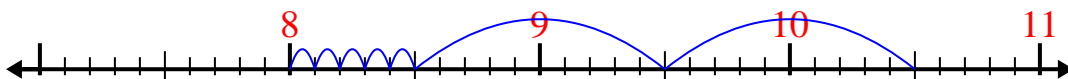
5) $2.7 - 1.3 =$



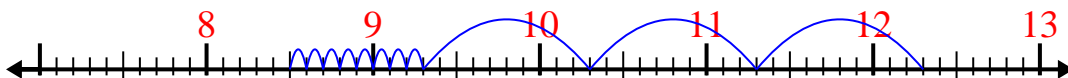
6) $7 - 2.4 =$



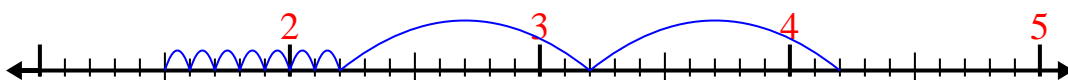
7) $10.5 - 2.5 =$



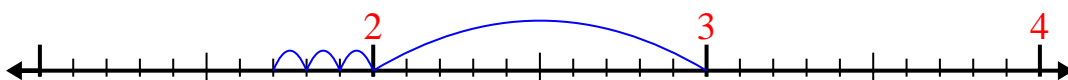
8) $12.3 - 3.8 =$



9) $4.2 - 2.7 =$




10) $3 - 1.3 =$

Answers1. 4.82. 6.13. 5.54. 2.85. 1.46. 4.67. 88. 8.59. 1.510. 1.7

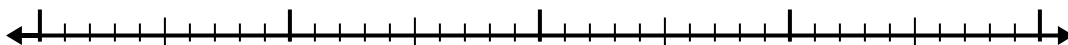


Use the number line to solve each problem.


1) $2.5 - 1.3 =$



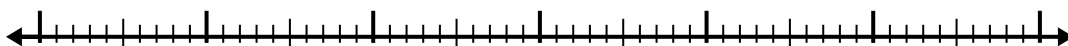
2) $10.8 - 2.4 =$




3) $4.5 - 1.7 =$



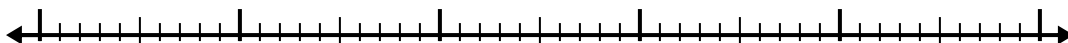
4) $9.9 - 3.8 =$



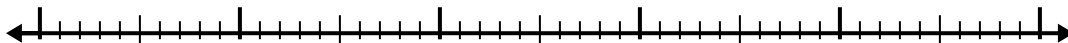
5) $4.4 - 2.5 =$




6) $9.7 - 2.4 =$



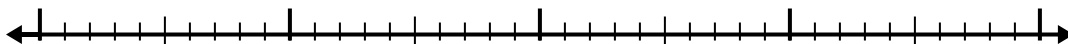
7) $12.6 - 3.7 =$



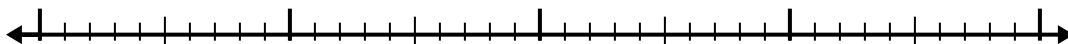
8) $6.2 - 2.7 =$



9) $7.7 - 1.6 =$



10) $6.5 - 2.1 =$

**Answers**

1. _____

2. _____

3. _____

4. _____

5. _____

6. _____

7. _____

8. _____

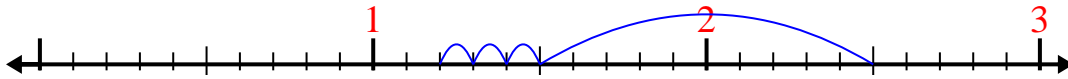
9. _____

10. _____

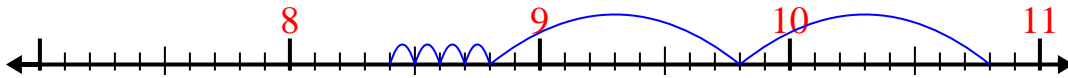


Use the number line to solve each problem.

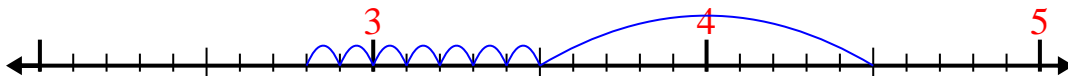
1) $2.5 - 1.3 =$



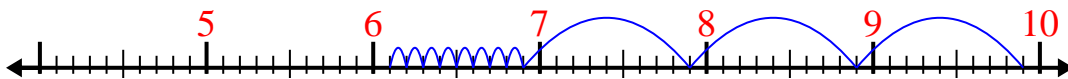
2) $10.8 - 2.4 =$



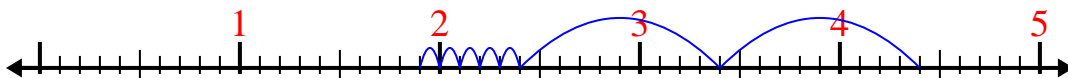
3) $4.5 - 1.7 =$



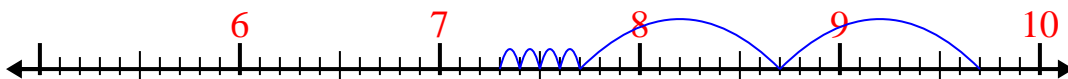
4) $9.9 - 3.8 =$



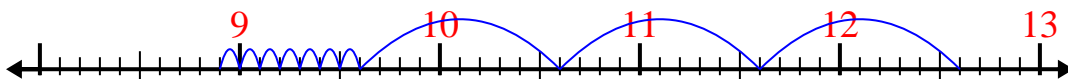
5) $4.4 - 2.5 =$



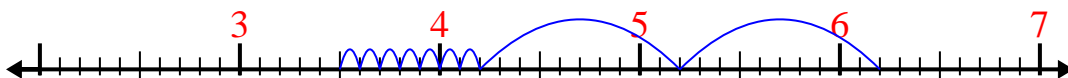
6) $9.7 - 2.4 =$



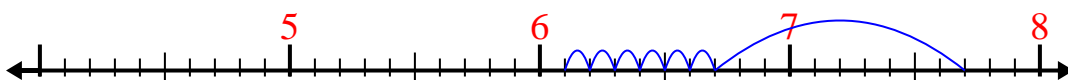
7) $12.6 - 3.7 =$



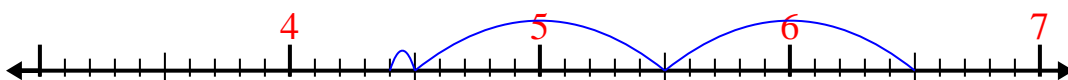
8) $6.2 - 2.7 =$



9) $7.7 - 1.6 =$



10) $6.5 - 2.1 =$



Answers

1. 1.2

2. 8.4

3. 2.8

4. 6.1

5. 1.9

6. 7.3

7. 8.9

8. 3.5

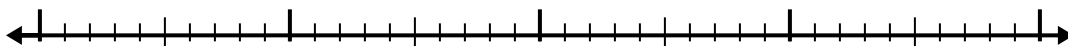
9. 6.1

10. 4.4

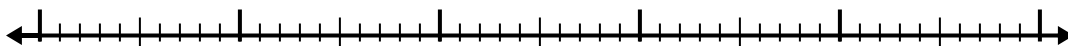


Use the number line to solve each problem.

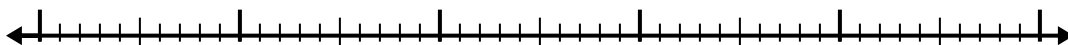
1) $9.6 - 2.2 =$



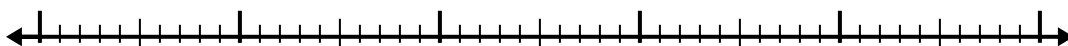
2) $7.7 - 2.3 =$



3) $7.6 - 2.9 =$



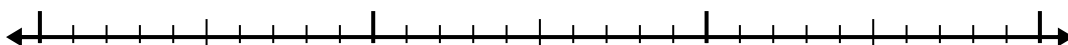
4) $8.1 - 3.7 =$



5) $4.5 - 2.3 =$



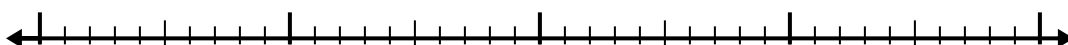
6) $5.2 - 1.3 =$



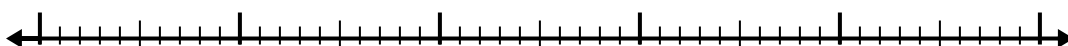
7) $4.9 - 3.9 =$




8) $7.9 - 2.1 =$



9) $8.6 - 2.3 =$



10) $10.2 - 2.9 =$



Answers

1. _____

2. _____

3. _____

4. _____

5. _____

6. _____

7. _____

8. _____

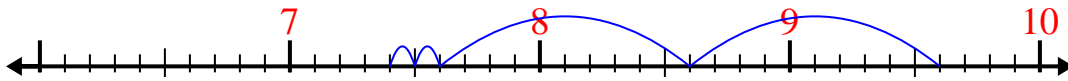
9. _____

10. _____

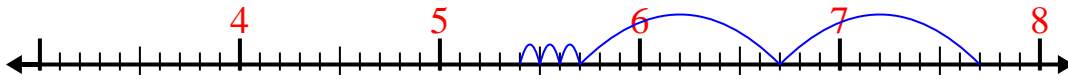


Use the number line to solve each problem.

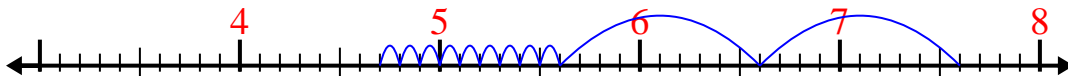
1) $9.6 - 2.2 =$




2) $7.7 - 2.3 =$



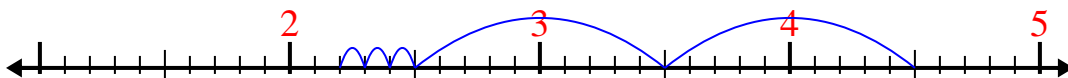
3) $7.6 - 2.9 =$



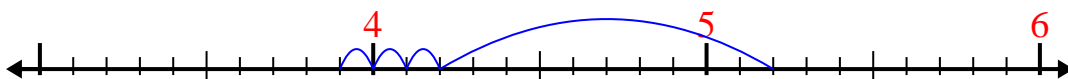
4) $8.1 - 3.7 =$



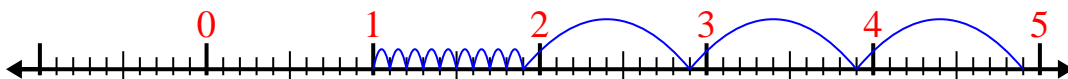
5) $4.5 - 2.3 =$



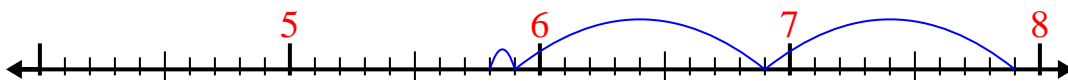
6) $5.2 - 1.3 =$



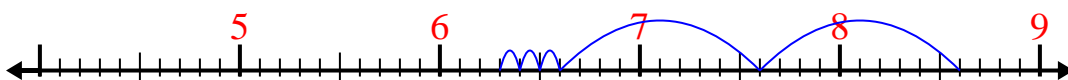
7) $4.9 - 3.9 =$



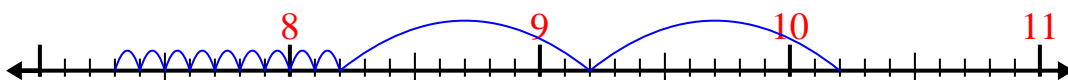
8) $7.9 - 2.1 =$



9) $8.6 - 2.3 =$



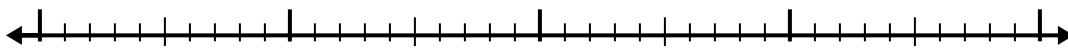
10) $10.2 - 2.9 =$

Answers1. 7.42. 5.43. 4.74. 4.45. 2.26. 3.97. 18. 5.89. 6.310. 7.3

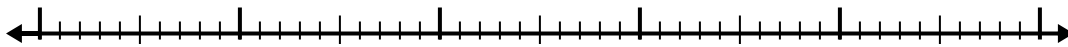


Use the number line to solve each problem.

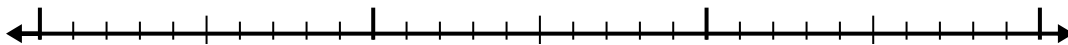
1) $7 - 2.6 =$



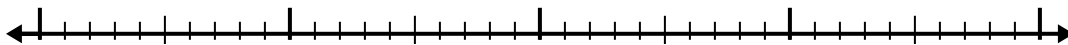
2) $6.2 - 2.7 =$



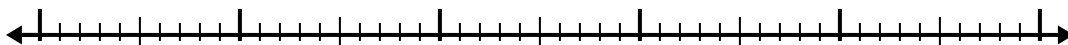
3) $2.5 - 1.2 =$



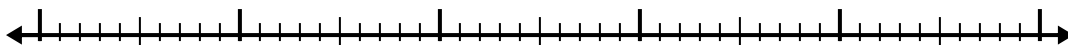
4) $5.2 - 1.9 =$



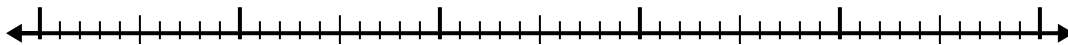
5) $12.3 - 3.4 =$




6) $11 - 2.7 =$



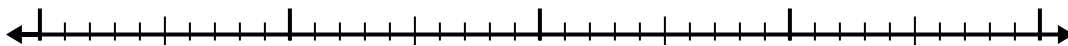
7) $8 - 2.7 =$



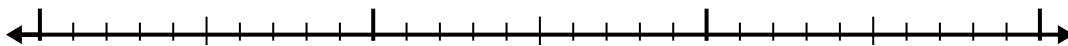
8) $5 - 3.1 =$



9) $10.9 - 2.3 =$



10) $5.1 - 1.1 =$



Answers

1. _____

2. _____

3. _____

4. _____

5. _____

6. _____

7. _____

8. _____

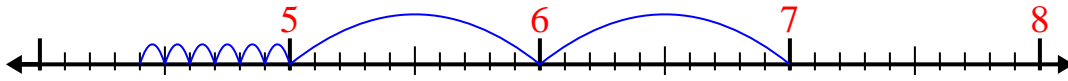
9. _____

10. _____

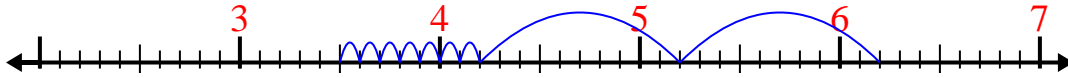


Use the number line to solve each problem.

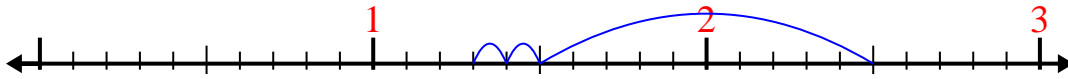
1) $7 - 2.6 =$



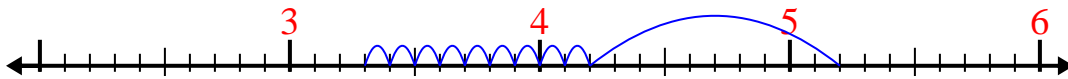
2) $6.2 - 2.7 =$



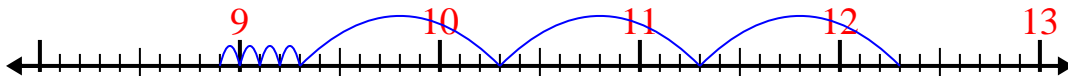
3) $2.5 - 1.2 =$



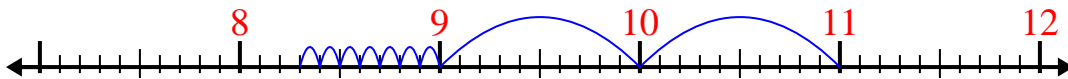
4) $5.2 - 1.9 =$



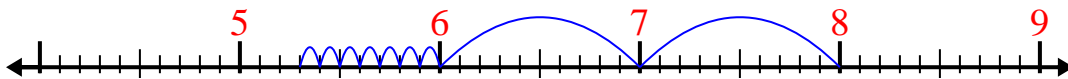
5) $12.3 - 3.4 =$



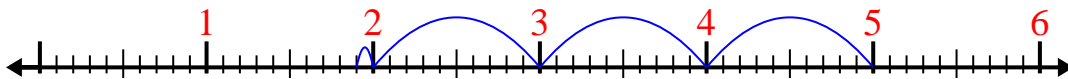
6) $11 - 2.7 =$



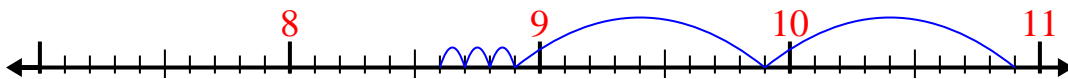
7) $8 - 2.7 =$




8) $5 - 3.1 =$



9) $10.9 - 2.3 =$



10) $5.1 - 1.1 =$



Answers

1. 4.4

2. 3.5

3. 1.3

4. 3.3

5. 8.9

6. 8.3

7. 5.3

8. 1.9

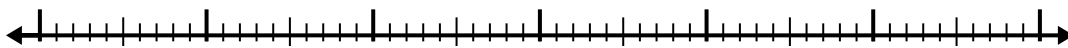
9. 8.6

10. 4

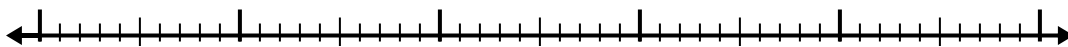


Use the number line to solve each problem.

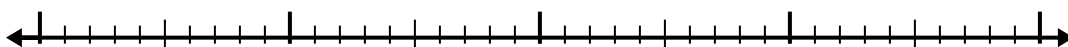
1) $9.7 - 3.2 =$



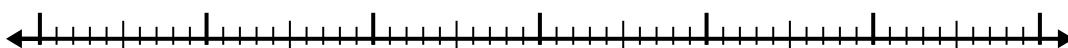
2) $9.1 - 3.8 =$



3) $4.2 - 1.1 =$



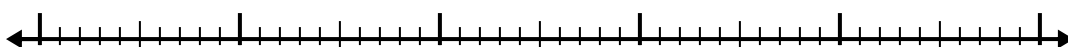
4) $11.6 - 3.2 =$



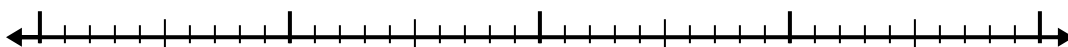
5) $6.9 - 1.2 =$




6) $4.8 - 2.8 =$



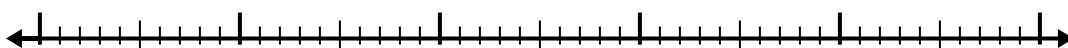
7) $6 - 1.8 =$



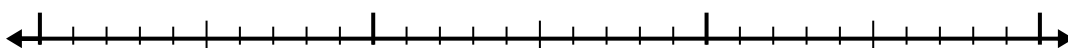
8) $8 - 1.4 =$



9) $8.2 - 3.9 =$



10) $2.5 - 1.4 =$

Answers

1. _____

2. _____

3. _____

4. _____

5. _____

6. _____

7. _____

8. _____

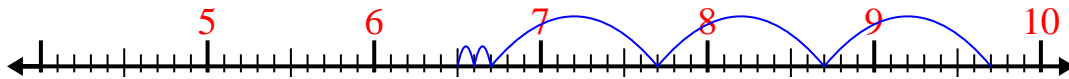
9. _____

10. _____




Use the number line to solve each problem.

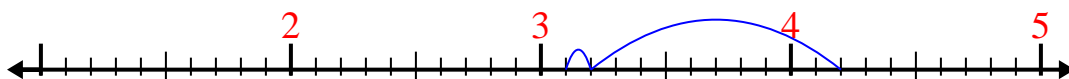
1) $9.7 - 3.2 =$



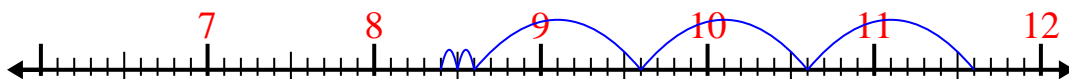
2) $9.1 - 3.8 =$



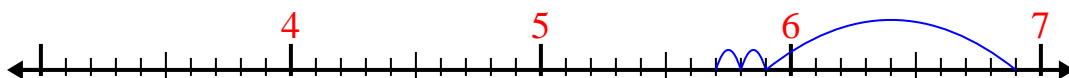
3) $4.2 - 1.1 =$



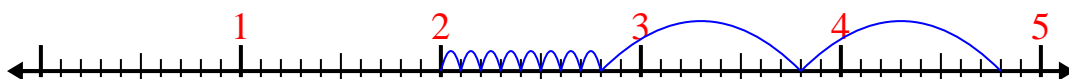
4) $11.6 - 3.2 =$



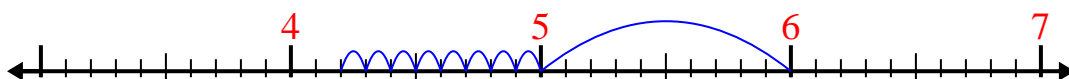
5) $6.9 - 1.2 =$



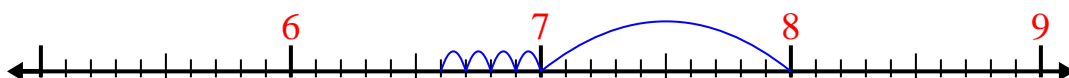
6) $4.8 - 2.8 =$



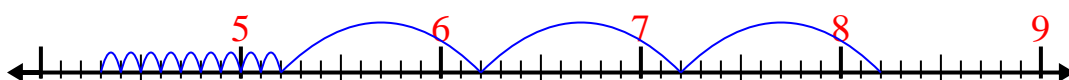
7) $6 - 1.8 =$



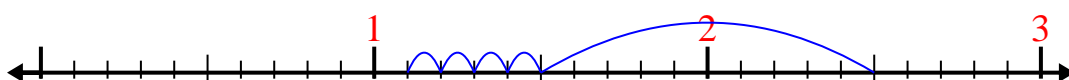
8) $8 - 1.4 =$



9) $8.2 - 3.9 =$



10) $2.5 - 1.4 =$



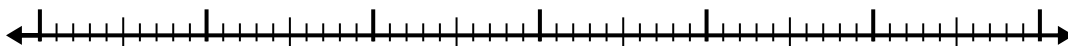
Answers

1. 6.5
2. 5.3
3. 3.1
4. 8.4
5. 5.7
6. 2
7. 4.2
8. 6.6
9. 4.3
10. 1.1

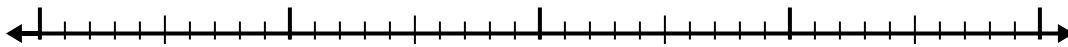


Use the number line to solve each problem.

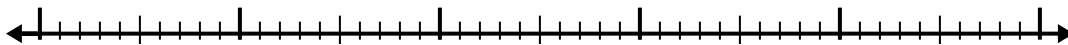
1) $9.1 - 3.6 =$



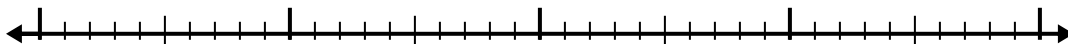
2) $8.1 - 1.6 =$



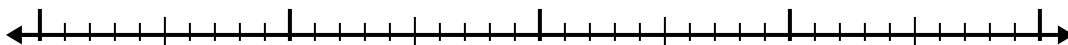
3) $6.7 - 3.2 =$



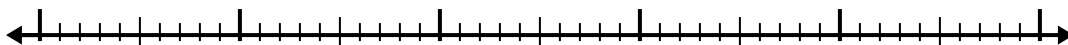
4) $10.3 - 2.6 =$



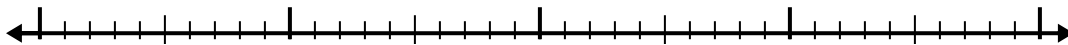
5) $5.8 - 1.9 =$



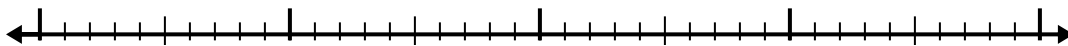
6) $8.2 - 2.3 =$




7) $5.9 - 1.6 =$



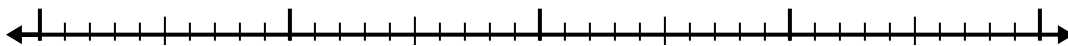
8) $11.2 - 2.9 =$



9) $10.5 - 3.5 =$



10) $8 - 2.4 =$



Answers

1. _____

2. _____

3. _____

4. _____

5. _____

6. _____

7. _____

8. _____

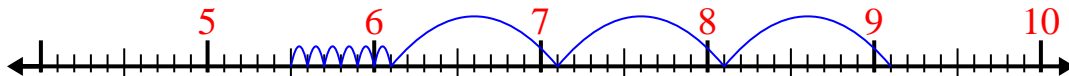
9. _____

10. _____

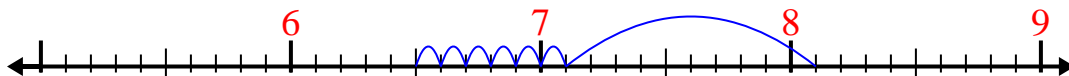


Use the number line to solve each problem.

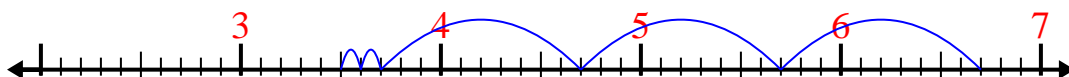
1) $9.1 - 3.6 =$



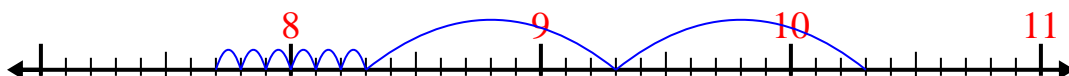
2) $8.1 - 1.6 =$



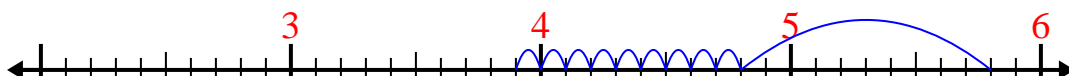
3) $6.7 - 3.2 =$



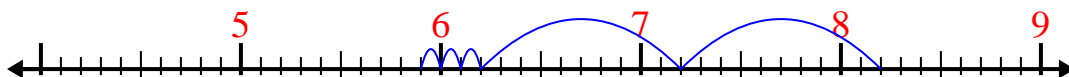
4) $10.3 - 2.6 =$



5) $5.8 - 1.9 =$



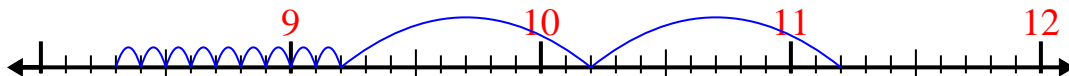
6) $8.2 - 2.3 =$



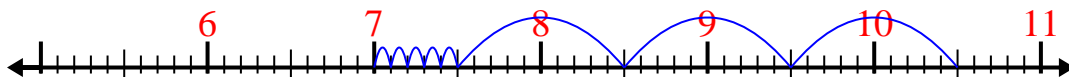
7) $5.9 - 1.6 =$



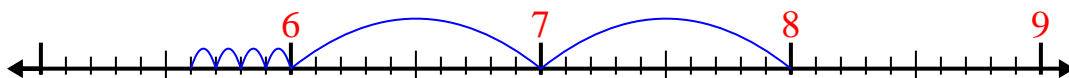
8) $11.2 - 2.9 =$



9) $10.5 - 3.5 =$



10) $8 - 2.4 =$

Answers1. 5.52. 6.53. 3.54. 7.75. 3.96. 5.97. 4.38. 8.39. 710. 5.6