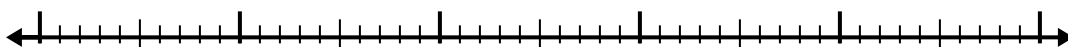


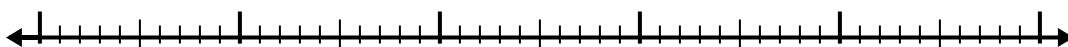


Use the number line to solve each problem.

1)  $8.6 - 3.8 =$



2)  $8.8 - 2.7 =$



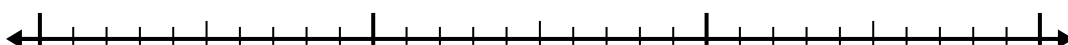
3)  $6.8 - 1.3 =$



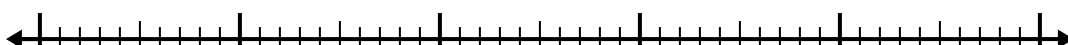
4)  $5.2 - 2.4 =$



5)  $2.7 - 1.3 =$



6)  $7 - 2.4 =$



7)  $10.5 - 2.5 =$



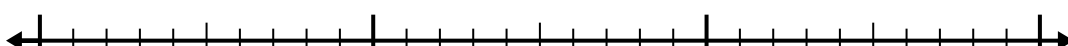
8)  $12.3 - 3.8 =$



9)  $4.2 - 2.7 =$



10)  $3 - 1.3 =$



Answers

1. \_\_\_\_\_

2. \_\_\_\_\_

3. \_\_\_\_\_

4. \_\_\_\_\_

5. \_\_\_\_\_

6. \_\_\_\_\_

7. \_\_\_\_\_

8. \_\_\_\_\_

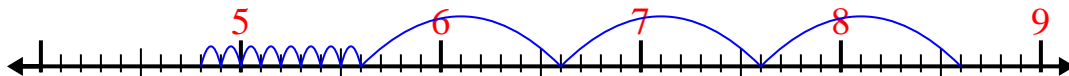
9. \_\_\_\_\_

10. \_\_\_\_\_

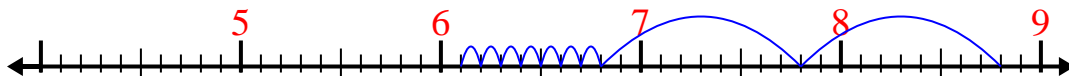


Use the number line to solve each problem.

1)  $8.6 - 3.8 =$



2)  $8.8 - 2.7 =$



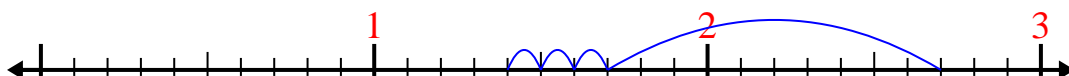
3)  $6.8 - 1.3 =$



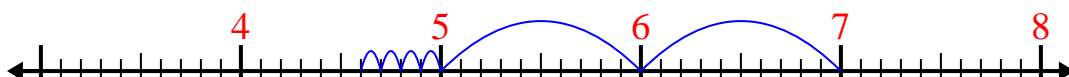
4)  $5.2 - 2.4 =$



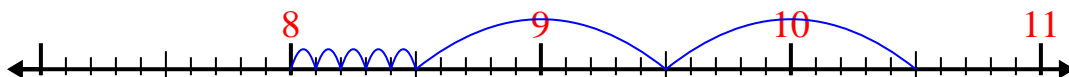
5)  $2.7 - 1.3 =$



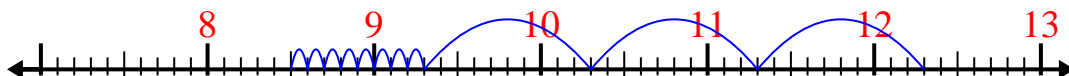
6)  $7 - 2.4 =$



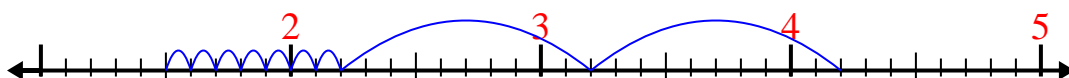
7)  $10.5 - 2.5 =$




8)  $12.3 - 3.8 =$



9)  $4.2 - 2.7 =$



10)  $3 - 1.3 =$

Answers1. 4.82. 6.13. 5.54. 2.85. 1.46. 4.67. 88. 8.59. 1.510. 1.7