




Use the number line to solve each problem.

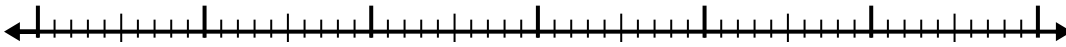
1)  $5.8 - 3.1 =$



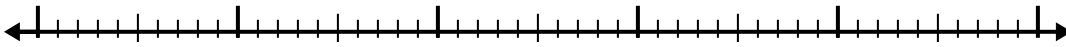
2)  $7.4 - 2.3 =$



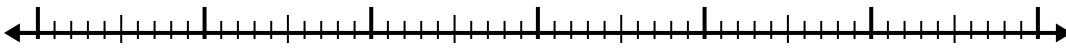
3)  $10.3 - 3.1 =$



4)  $6.9 - 3.7 =$



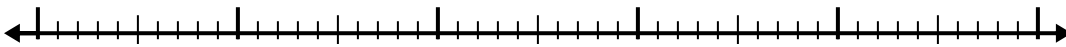
5)  $11.2 - 3.6 =$




6)  $4.5 - 2.7 =$



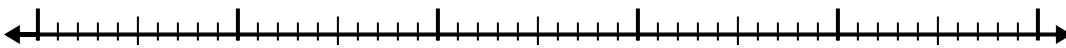
7)  $4.1 - 2.4 =$



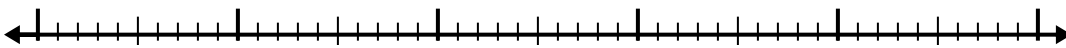
8)  $12.4 - 3.6 =$



9)  $11.5 - 2.6 =$



10)  $9.2 - 3.9 =$



Answers

1. \_\_\_\_\_

2. \_\_\_\_\_

3. \_\_\_\_\_

4. \_\_\_\_\_

5. \_\_\_\_\_

6. \_\_\_\_\_

7. \_\_\_\_\_

8. \_\_\_\_\_

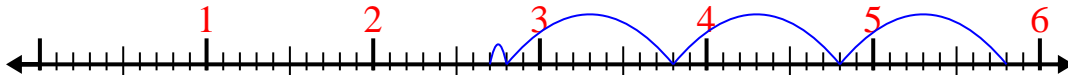
9. \_\_\_\_\_

10. \_\_\_\_\_

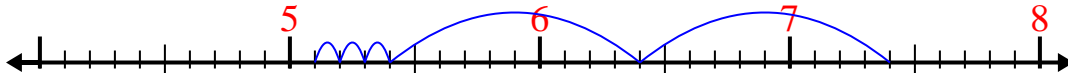


Use the number line to solve each problem.

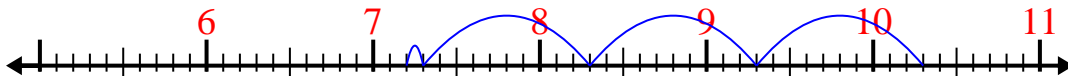
1)  $5.8 - 3.1 =$



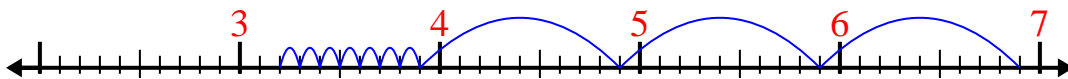
2)  $7.4 - 2.3 =$



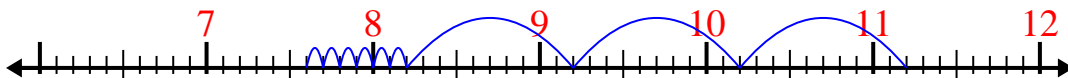
3)  $10.3 - 3.1 =$



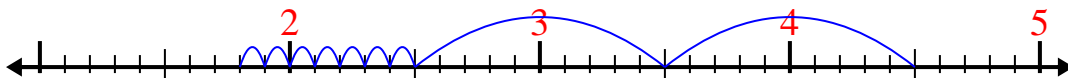
4)  $6.9 - 3.7 =$



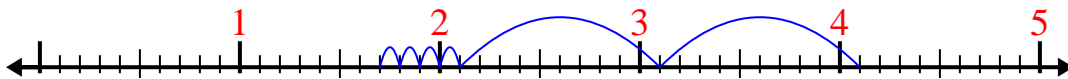
5)  $11.2 - 3.6 =$



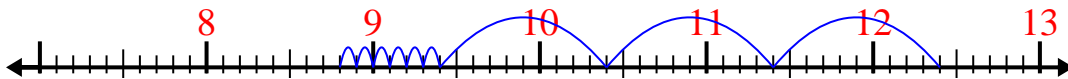
6)  $4.5 - 2.7 =$



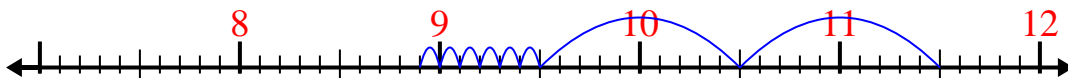
7)  $4.1 - 2.4 =$



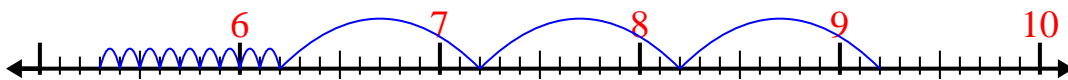
8)  $12.4 - 3.6 =$



9)  $11.5 - 2.6 =$



10)  $9.2 - 3.9 =$

Answers1. 2.72. 5.13. 7.24. 3.25. 7.66. 1.87. 1.78. 8.89. 8.910. 5.3