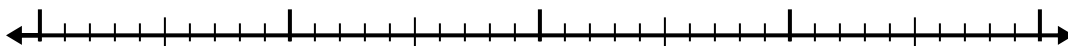


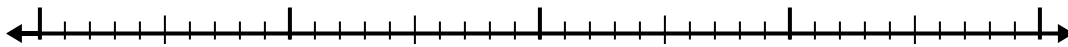


Use the number line to solve each problem.

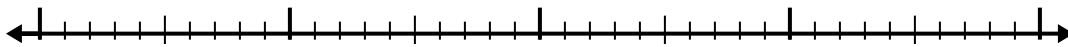
1)  $7.8 - 1.7 =$



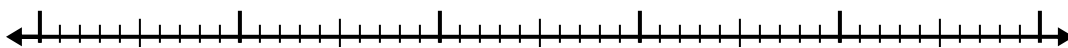
2)  $4.1 - 1.3 =$



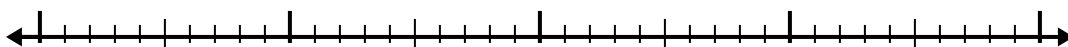
3)  $6.9 - 1.3 =$



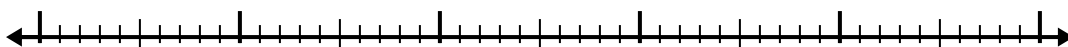
4)  $11.2 - 3.7 =$



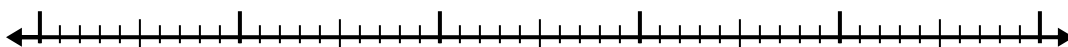
5)  $10.7 - 2.9 =$



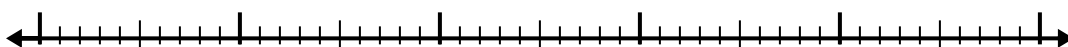
6)  $5.9 - 2.5 =$



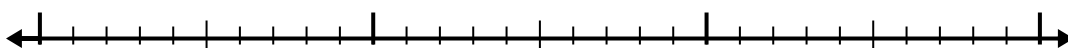
7)  $9.4 - 2.7 =$



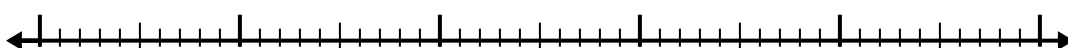
8)  $5.4 - 3.3 =$



9)  $2.7 - 1.7 =$



10)  $6.1 - 3.1 =$



Answers

1. \_\_\_\_\_

2. \_\_\_\_\_

3. \_\_\_\_\_

4. \_\_\_\_\_

5. \_\_\_\_\_

6. \_\_\_\_\_

7. \_\_\_\_\_

8. \_\_\_\_\_

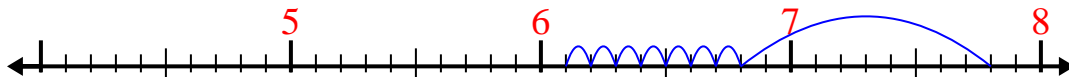
9. \_\_\_\_\_

10. \_\_\_\_\_

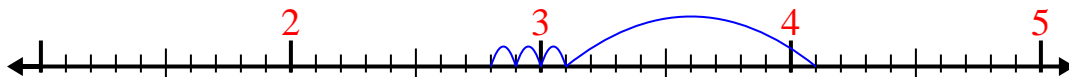


Use the number line to solve each problem.

1)  $7.8 - 1.7 =$



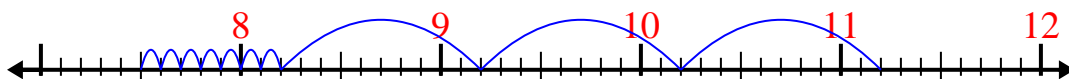
2)  $4.1 - 1.3 =$



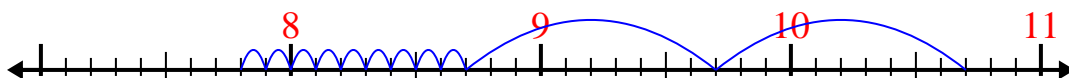
3)  $6.9 - 1.3 =$



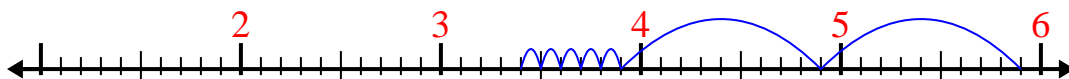
4)  $11.2 - 3.7 =$



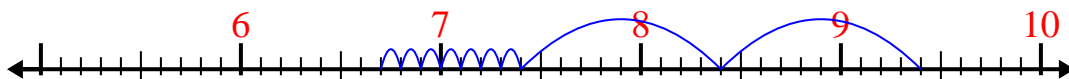
5)  $10.7 - 2.9 =$



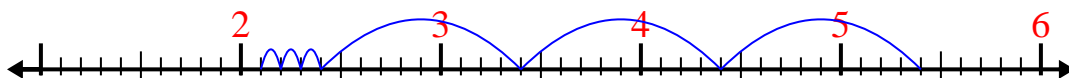
6)  $5.9 - 2.5 =$



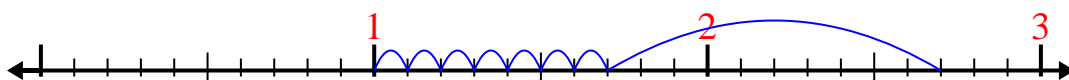
7)  $9.4 - 2.7 =$



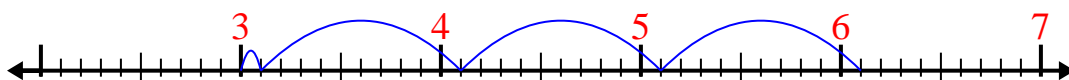
8)  $5.4 - 3.3 =$



9)  $2.7 - 1.7 =$



10)  $6.1 - 3.1 =$

Answers1. 6.12. 2.83. 5.64. 7.55. 7.86. 3.47. 6.78. 2.19. 110. 3