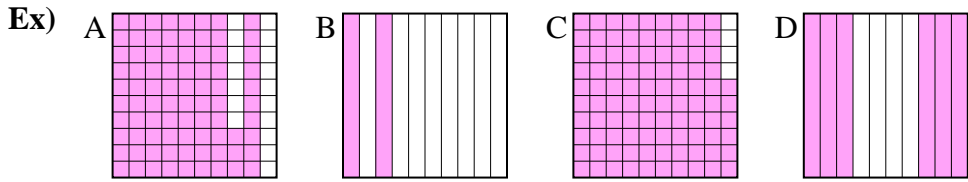




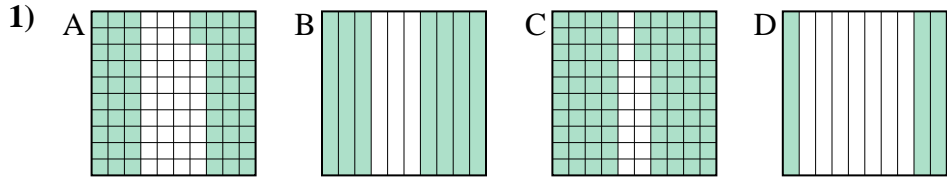
Put the boxes in order from least to greatest based on the shaded amount.

Answers



small 0.2 - B
0.6 - D
0.83 - A
 large 0.96 - C

Ex. **B,D,A,C**



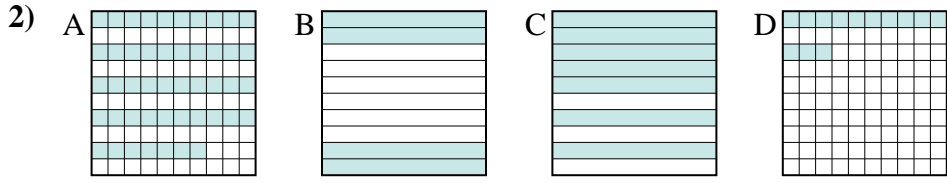
small _____

 large _____

1. _____

2. _____

3. _____

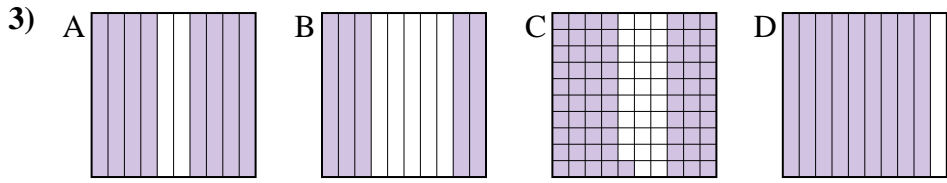


small _____

 large _____

4. _____

5. _____



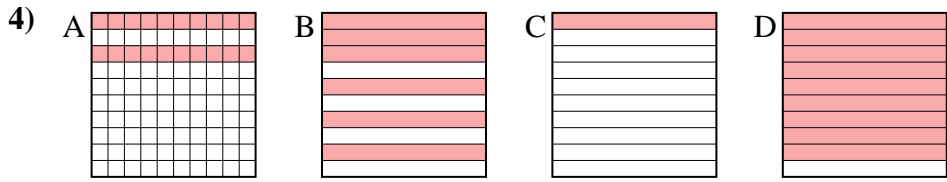
small _____

 large _____

6. _____

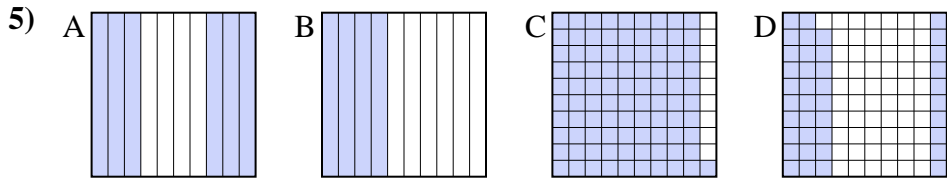
7. _____

8. _____



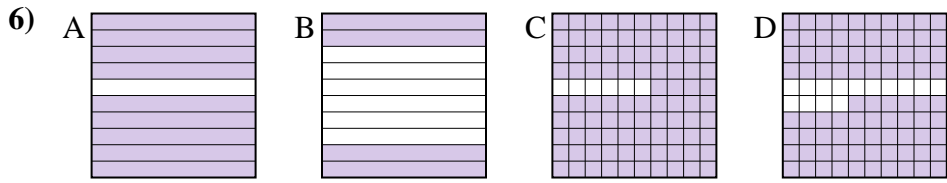
small _____

 large _____



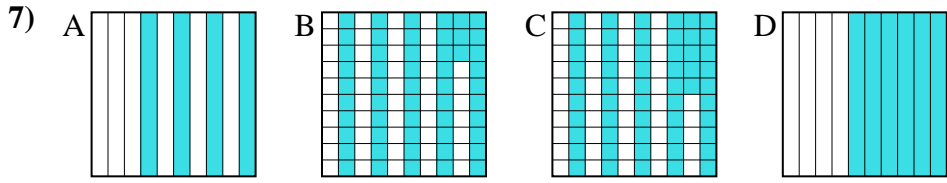
small _____

 large _____



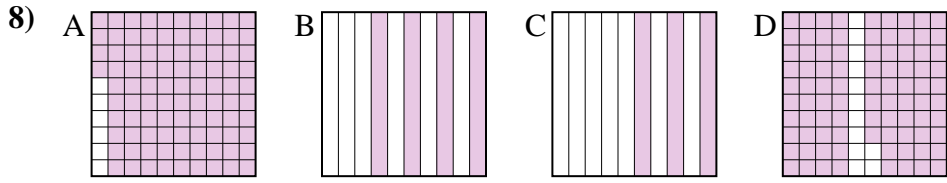
small _____

 large _____



small _____

 large _____


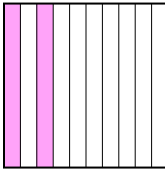

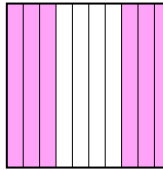


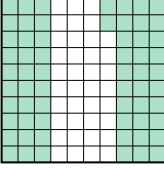
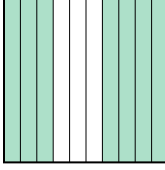
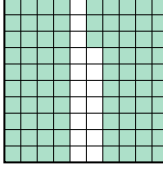
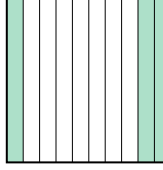
small _____

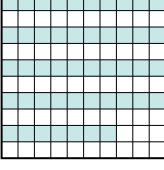


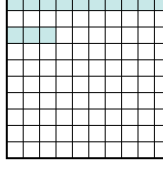
 large _____


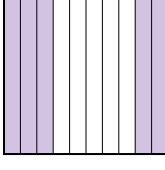
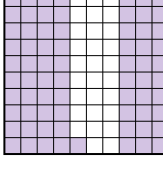
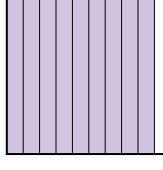






Put the boxes in order from least to greatest based on the shaded amount.

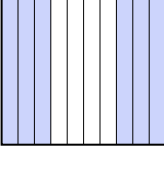
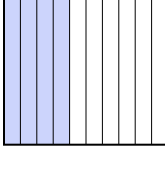

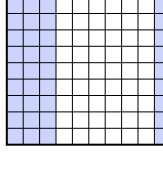
Ex) A  B  C  D  small $\frac{0.2}{0.6} - B$
large $\frac{0.83}{0.96} - C$



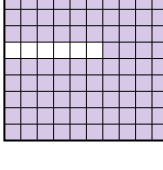
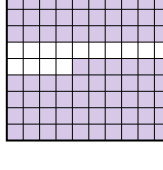
1) A  B  C  D  small $\frac{0.3}{0.62} - D$
large $\frac{0.7}{0.83} - B$



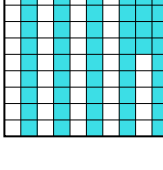

2) A  B  C  D  small $\frac{0.13}{0.4} - D$
large $\frac{0.47}{0.7} - A$



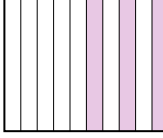
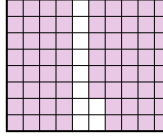
3) A  B  C  D  small $\frac{0.5}{0.71} - B$
large $\frac{0.8}{0.9} - A$

4) A  B  C  D  small $\frac{0.1}{0.2} - C$
large $\frac{0.6}{0.9} - B$

5) A  B  C  D  small $\frac{0.39}{0.4} - D$
large $\frac{0.6}{0.91} - A$

6) A  B  C  D  small $\frac{0.4}{0.86} - B$
large $\frac{0.9}{0.94} - C$

7) A  B  C  D  small $\frac{0.4}{0.53} - A$
large $\frac{0.55}{0.6} - C$

8) A  B  C  D  small $\frac{0.3}{0.4} - B$
large $\frac{0.88}{0.94} - A$

Answers

- Ex. B,D,A,C
1. D,A,B,C
2. D,B,A,C
3. B,C,A,D
4. C,A,B,D
5. D,B,A,C
6. B,D,A,C
7. A,B,C,D
8. C,B,D,A