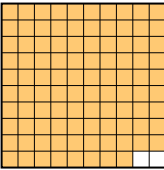
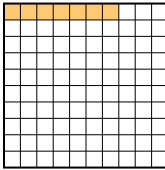

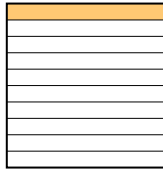




Put the boxes in order from least to greatest based on the shaded amount.



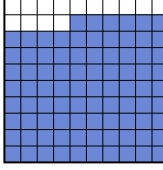
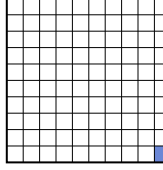
Answers

Ex) A  B  C  D 


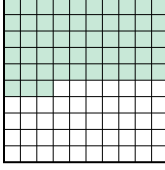

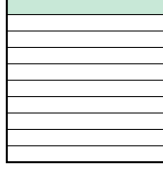
small 0.07 - B  
0.1 - D  
0.4 - C  
 large 0.98 - A

Ex. B,D,C,A


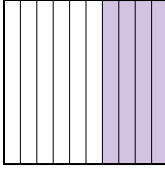
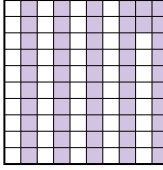
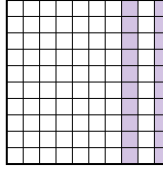
1. \_\_\_\_\_
2. \_\_\_\_\_
3. \_\_\_\_\_
4. \_\_\_\_\_
5. \_\_\_\_\_
6. \_\_\_\_\_
7. \_\_\_\_\_
8. \_\_\_\_\_

1) A  B  C  D 


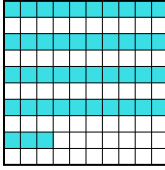


small \_\_\_\_\_  
 large \_\_\_\_\_

2) A  B  C  D 


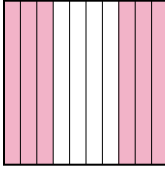
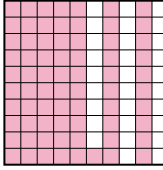
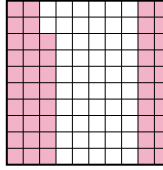
small \_\_\_\_\_  
 large \_\_\_\_\_

3) A  B  C  D 


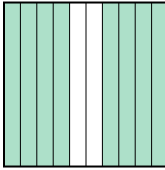


small \_\_\_\_\_  
 large \_\_\_\_\_

4) A  B  C  D 


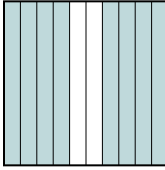

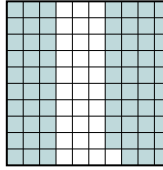
small \_\_\_\_\_  
 large \_\_\_\_\_

5) A  B  C  D 

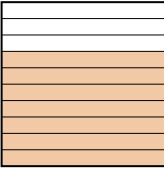
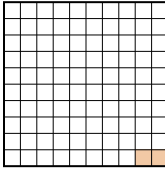
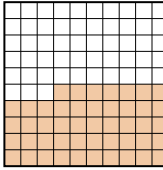
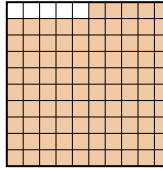
small \_\_\_\_\_  
 large \_\_\_\_\_

6) A  B  C  D 

small \_\_\_\_\_  
 large \_\_\_\_\_

7) A  B  C  D 

small \_\_\_\_\_  
 large \_\_\_\_\_

8) A  B  C  D 

small \_\_\_\_\_  
 large \_\_\_\_\_



Put the boxes in order from least to greatest based on the shaded amount.

Ex) A B C D

small  $\frac{0.07 - B}{0.1 - D}$   
 $\frac{0.4 - C}{0.98 - A}$

large

1) A B C D

small  $\frac{0.01 - D}{0.3 - A}$   
 $\frac{0.86 - C}{0.9 - B}$

large

2) A B C D

small  $\frac{0.1 - D}{0.5 - A}$   
 $\frac{0.53 - B}{0.8 - C}$

large

3) A B C D

small  $\frac{0.2 - D}{0.4 - B}$   
 $\frac{0.5 - A}{0.52 - C}$

large

4) A B C D

small  $\frac{0.03 - A}{0.2 - C}$   
 $\frac{0.43 - B}{0.9 - D}$

large

5) A B C D

small  $\frac{0.1 - A}{0.48 - D}$   
 $\frac{0.6 - B}{0.71 - C}$

large

6) A B C D

small  $\frac{0.5 - D}{0.6 - C}$   
 $\frac{0.8 - B}{0.83 - A}$

large

7) A B C D

small  $\frac{0.69 - D}{0.7 - A}$   
 $\frac{0.8 - B}{0.9 - C}$

large

8) A B C D

small  $\frac{0.02 - B}{0.47 - C}$   
 $\frac{0.7 - A}{0.95 - D}$

large

Answers

Ex. B,D,C,A

1. D,A,C,B

2. D,A,B,C

3. D,B,A,C

4. A,C,B,D

5. A,D,B,C

6. D,C,B,A

7. D,A,B,C

8. B,C,A,D