



Put the boxes in order from least to greatest based on the shaded amount.

Answers

Ex) A B C D

small 0.2 - B
0.6 - D
0.86 - C
large 0.91 - A

Ex. B,D,C,A

1. _____

2. _____

3. _____

4. _____

5. _____

6. _____

7. _____

8. _____

1) A B C D

small _____

 large _____

2) A B C D

small _____

 large _____

3) A B C D

small _____

 large _____

4) A B C D

small _____

 large _____

5) A B C D

small _____

 large _____

6) A B C D

small _____

 large _____

7) A B C D

small _____

 large _____





8) A B C D

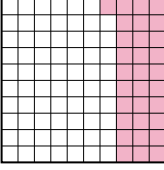
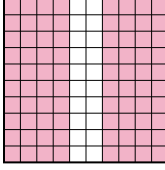
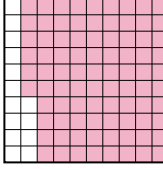
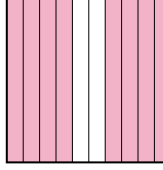
small _____


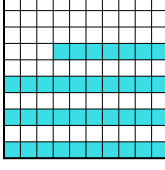

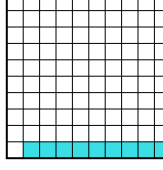
 large _____

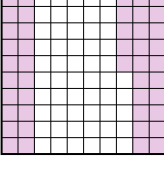

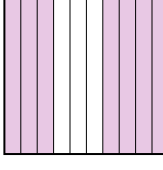
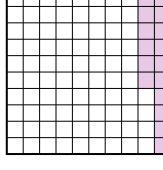




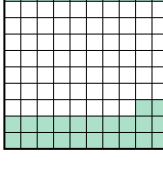

Put the boxes in order from least to greatest based on the shaded amount.




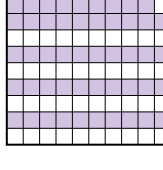
Ex) A  B  C  D  small $\frac{0.2 - B}{0.6 - D}$
large $\frac{0.86 - C}{0.91 - A}$


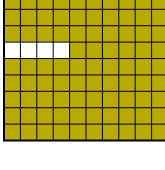


1) A  B  C  D  small $\frac{0.31 - A}{0.8 - B}$
large $\frac{0.86 - C}{0.8 - B}$

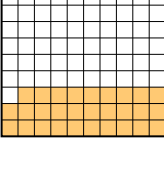


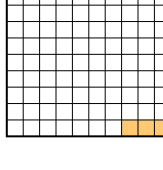
2) A  B  C  D  small $\frac{0.09 - D}{0.37 - B}$
large $\frac{0.6 - A}{0.8 - C}$

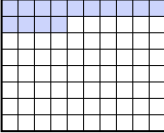
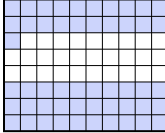
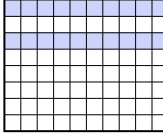

3) A  B  C  D  small $\frac{0.16 - D}{0.45 - A}$
large $\frac{0.58 - B}{0.7 - C}$

4) A  B  C  D  small $\frac{0.2 - D}{0.32 - C}$
large $\frac{0.5 - A}{0.8 - B}$

5) A  B  C  D  small $\frac{0.5 - C}{0.59 - D}$
large $\frac{0.6 - B}{0.7 - A}$

6) A  B  C  D  small $\frac{0.1 - C}{0.7 - D}$
large $\frac{0.9 - A}{0.96 - B}$

7) A  B  C  D  small $\frac{0.03 - D}{0.08 - C}$
large $\frac{0.1 - B}{0.29 - A}$

8) A  B  C  D  small $\frac{0.3 - C}{0.34 - A}$
large $\frac{0.71 - B}{0.8 - D}$

Answers

- Ex. B,D,C,A
1. A,B,B,C
2. D,B,A,C
3. D,A,B,C
4. D,C,A,B
5. C,D,B,A
6. C,D,A,B
7. D,C,B,A
8. C,A,B,D