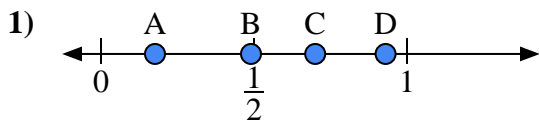


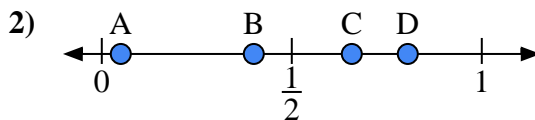


Use the number lines to answer the questions.

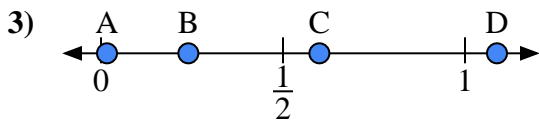
**Answers**



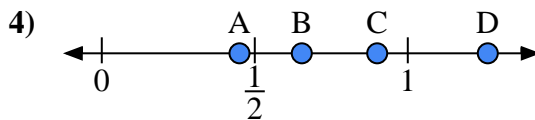
- a) Which letter best represents the location of 0.7?
- b) Which letter best represents the location of 0.93?



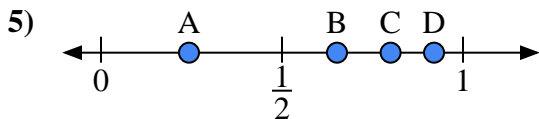
- a) Which letter best represents the location of 0.40?
- b) Which letter best represents the location of 0.05?



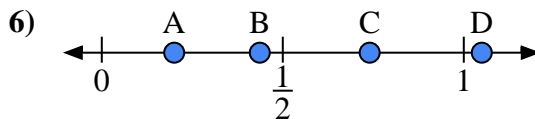
- a) Which letter best represents the location of 0.60?
- b) Which letter best represents the location of 0.24?



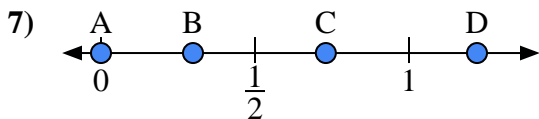
- a) Which letter best represents the location of 0.90?
- b) Which letter best represents the location of 0.45?



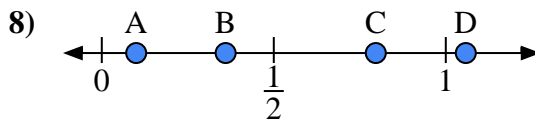
- a) Which letter best represents the location of 0.8?
- b) Which letter best represents the location of 0.92?



- a) Which letter best represents the location of 0.20?
- b) Which letter best represents the location of 0.74?



- a) Which letter best represents the location of 0.00?
- b) Which letter best represents the location of 0.73?

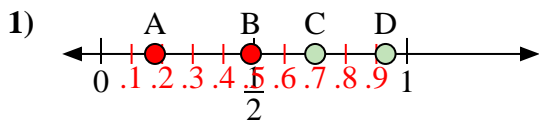


- a) Which letter best represents the location of 0.1?
- b) Which letter best represents the location of 0.36?

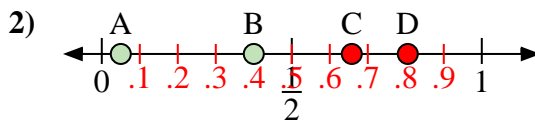
- 1. \_\_\_\_\_
- 2. \_\_\_\_\_
- 3. \_\_\_\_\_
- 4. \_\_\_\_\_
- 5. \_\_\_\_\_
- 6. \_\_\_\_\_
- 7. \_\_\_\_\_
- 8. \_\_\_\_\_



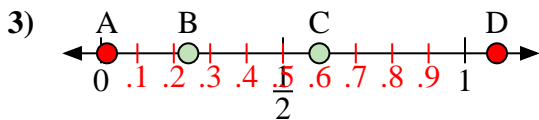
Use the number lines to answer the questions.



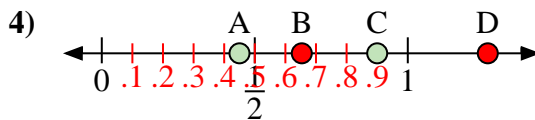
- a) Which letter best represents the location of 0.7?
- b) Which letter best represents the location of 0.93?



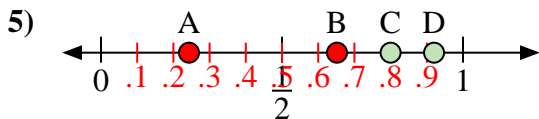
- a) Which letter best represents the location of 0.40?
- b) Which letter best represents the location of 0.05?



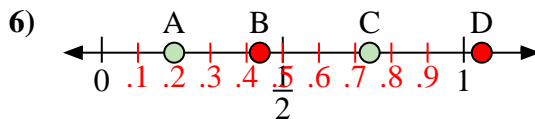
- a) Which letter best represents the location of 0.60?
- b) Which letter best represents the location of 0.24?



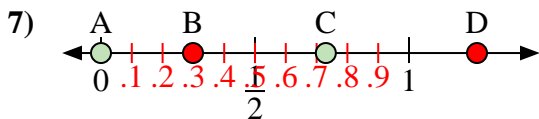
- a) Which letter best represents the location of 0.90?
- b) Which letter best represents the location of 0.45?



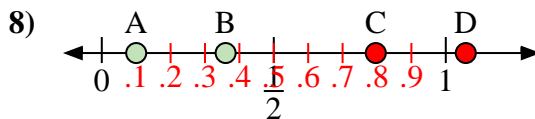
- a) Which letter best represents the location of 0.8?
- b) Which letter best represents the location of 0.92?



- a) Which letter best represents the location of 0.20?
- b) Which letter best represents the location of 0.74?



- a) Which letter best represents the location of 0.00?
- b) Which letter best represents the location of 0.73?



- a) Which letter best represents the location of 0.1?
- b) Which letter best represents the location of 0.36?

**Answers**

- 1. C D
- 2. B A
- 3. C B
- 4. C A
- 5. C D
- 6. A C
- 7. A C
- 8. A B