



Use the block on the left to find the value of the set of blocks on the right.

Answers

1) = 1

1. _____

2) = 1

2. _____

3) = 1

3. _____

4) = 1

4. _____

5) = 1

5. _____

6) = 1

6. _____

7) = 1

7. _____

8) = 1

8. _____

9) = 1

9. _____

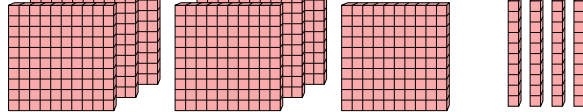
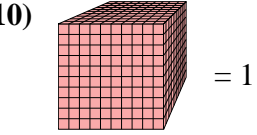
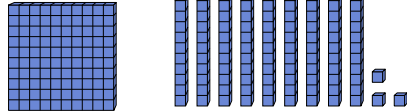
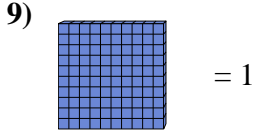
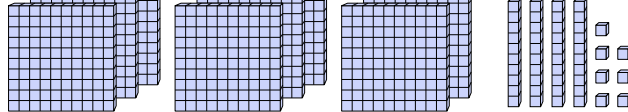
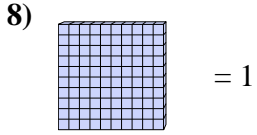
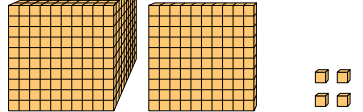
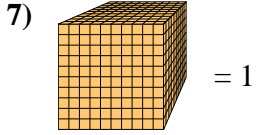
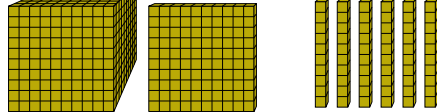
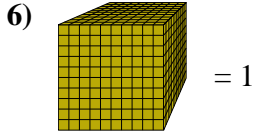
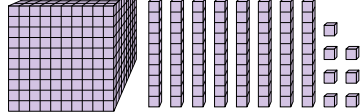
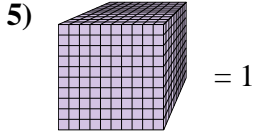
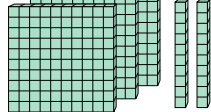
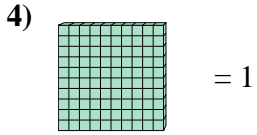
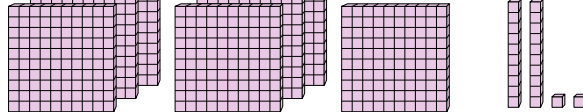
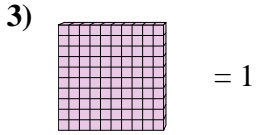
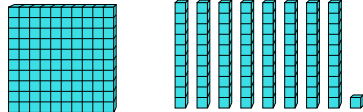
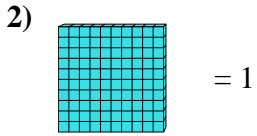
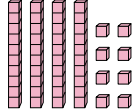
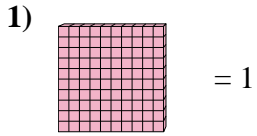
10) = 1

10. _____

10. _____



Use the block on the left to find the value of the set of blocks on the right.



Answers

1. 0.48

2. 1.81

3. 7.22

4. 3.2

5. 1.087

6. 1.16

7. 1.104

8. 8.47

9. 1.93

10. 0.74



Use the block on the left to find the value of the set of blocks on the right.

Answers

1) = 1

1. _____

2) = 1

2. _____

3) = 1

3. _____

4) = 1

4. _____

5) = 1

5. _____

6) = 1

6. _____

7) = 1

7. _____

8) = 1

8. _____

9) = 1

9. _____

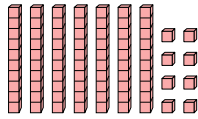
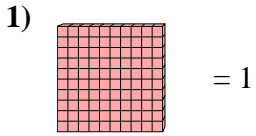
10) = 1

10. _____

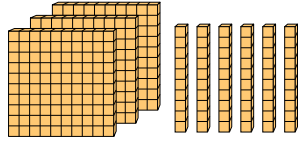
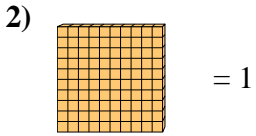


Use the block on the left to find the value of the set of blocks on the right.

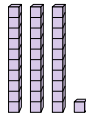
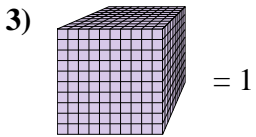
Answers



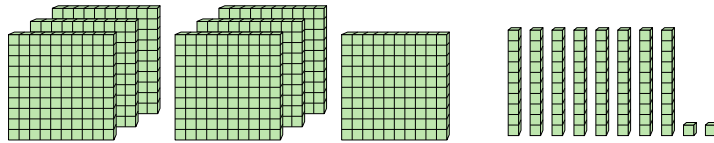
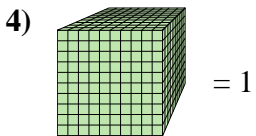
1. 0.78



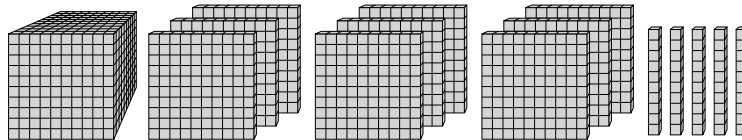
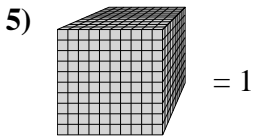
2. 3.6



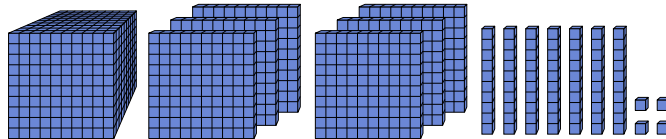
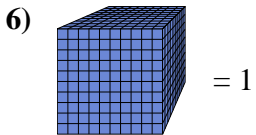
3. 0.031



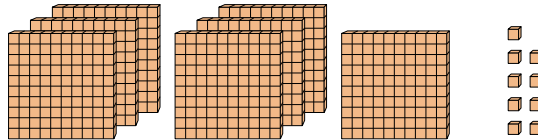
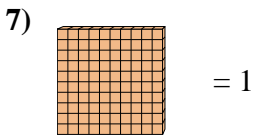
4. 0.782



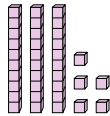
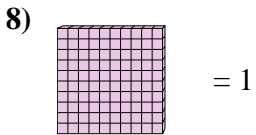
5. 1.95



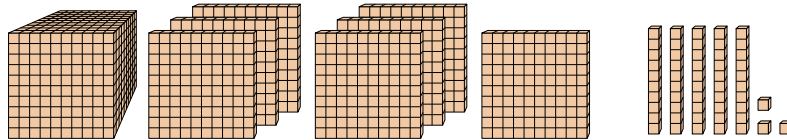
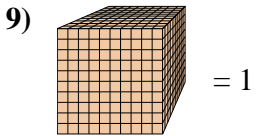
6. 1.674



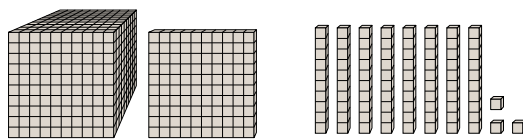
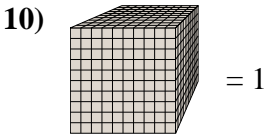
7. 7.09



8. 0.35



9. 1.753

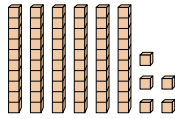
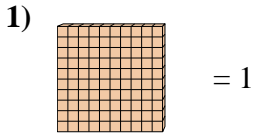


10. 1.183

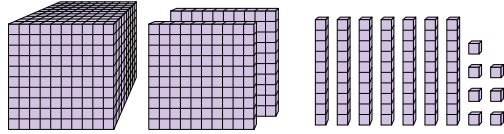
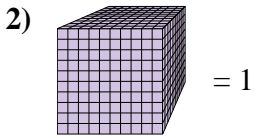


Use the block on the left to find the value of the set of blocks on the right.

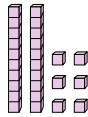
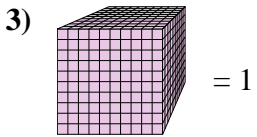
Answers



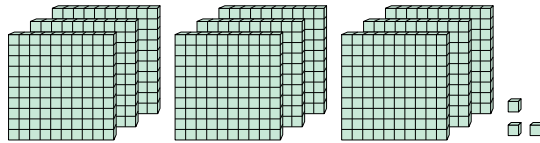
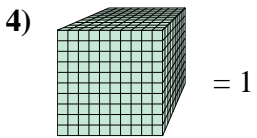
1. _____



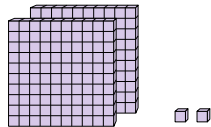
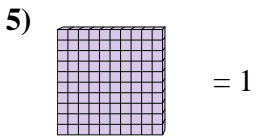
2. _____



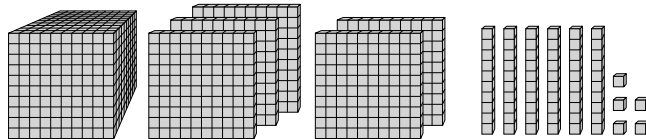
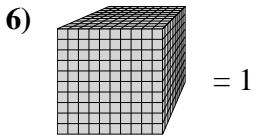
3. _____



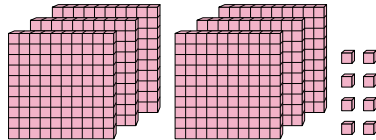
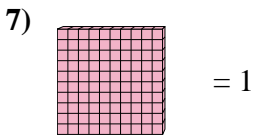
4. _____



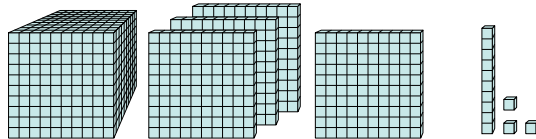
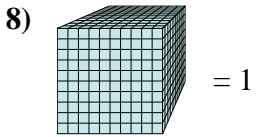
5. _____



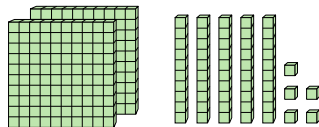
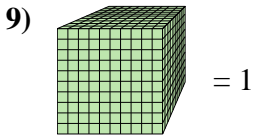
6. _____




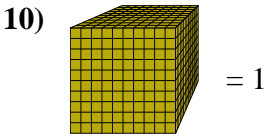
7. _____



8. _____



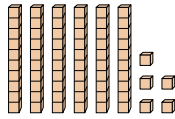
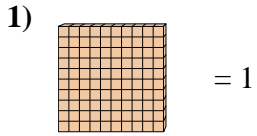
9. _____



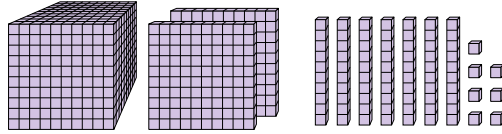
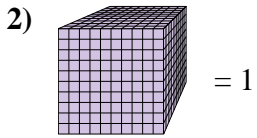
10. _____



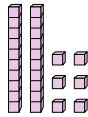
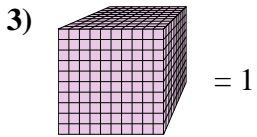
Use the block on the left to find the value of the set of blocks on the right.



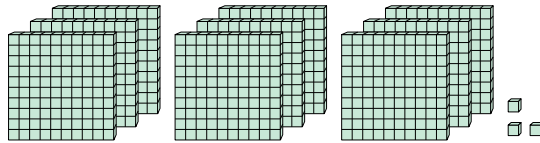
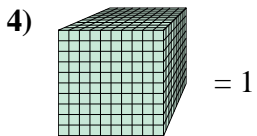
1. 0.65



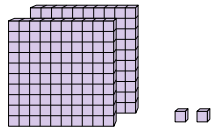
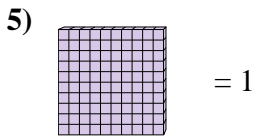
2. 1.277



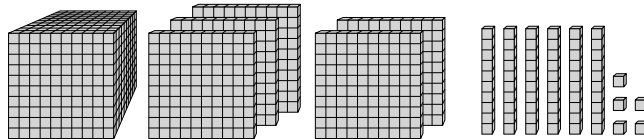
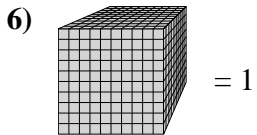
3. 0.026



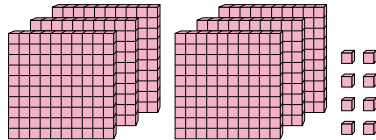
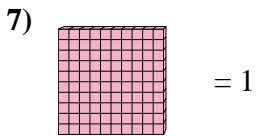
4. 0.903



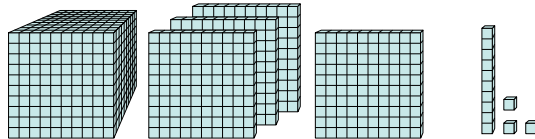
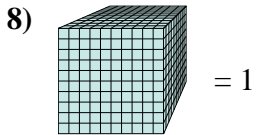
5. 2.02



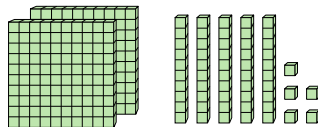
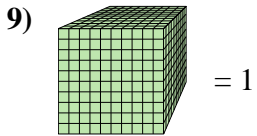
6. 1.565




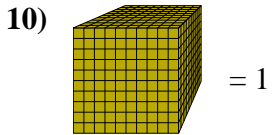
7. 6.08



8. 1.413



9. 0.255



10. 1.551

Answers



Use the block on the left to find the value of the set of blocks on the right.

Answers

1) = 1

1. _____

2) = 1

2. _____

3) = 1

3. _____

4) = 1

4. _____

5) = 1

5. _____

6) = 1

6. _____

7) = 1

7. _____

8) = 1

8. _____

9) = 1

9. _____

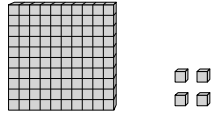
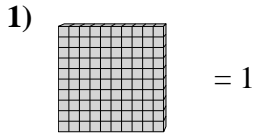
10) = 1

10. _____

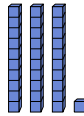
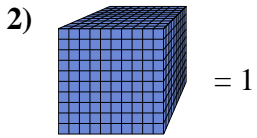
10. _____



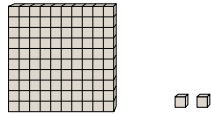
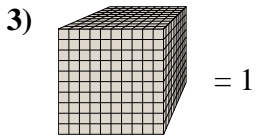
Use the block on the left to find the value of the set of blocks on the right.



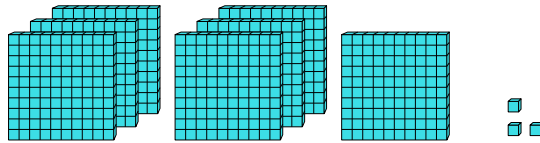
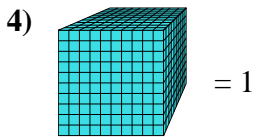
1. 1.04



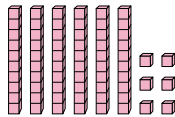
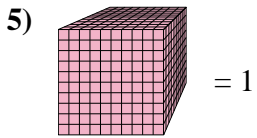
2. 0.031



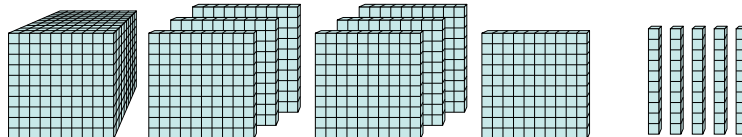
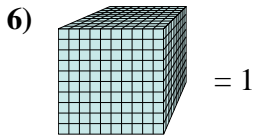
3. 0.102



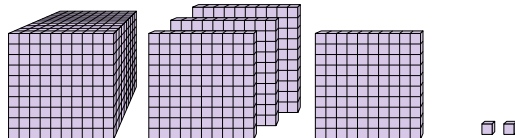
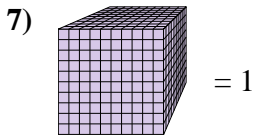
4. 0.703



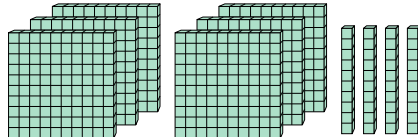
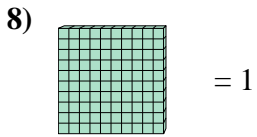
5. 1.75



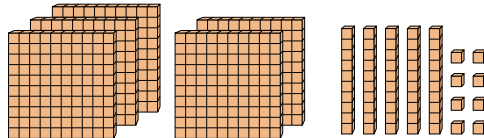
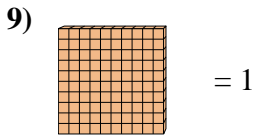
6. 1.402



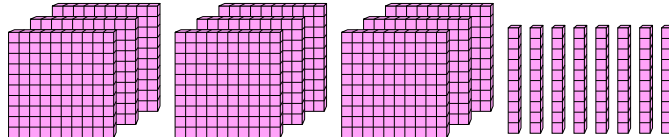
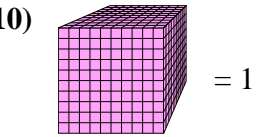
7. 6.4



8. 5.58



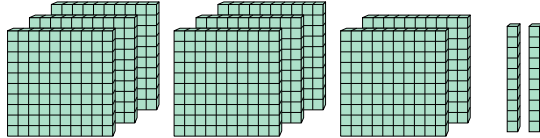
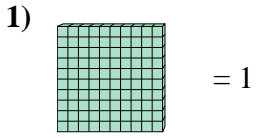
9. 0.98



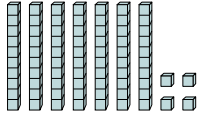
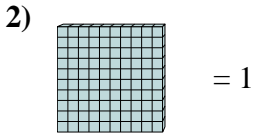


Use the block on the left to find the value of the set of blocks on the right.

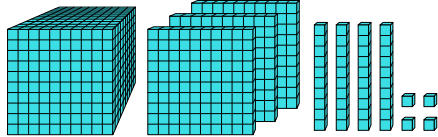
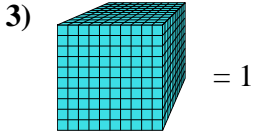
Answers



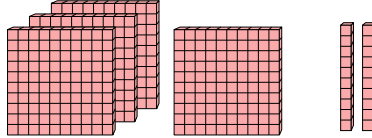
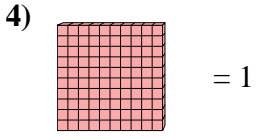
1. _____



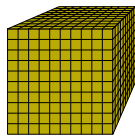
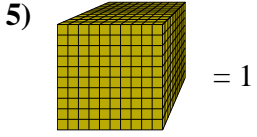
2. _____



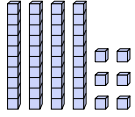
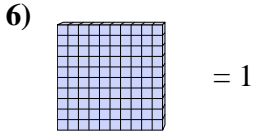
3. _____



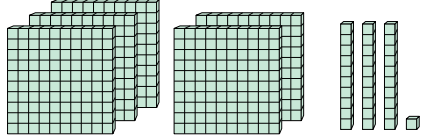
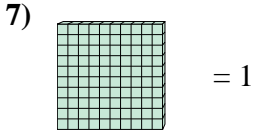
4. _____



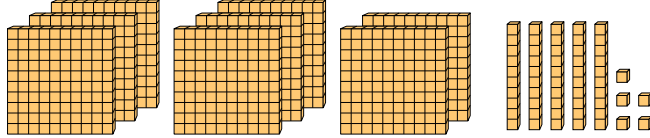
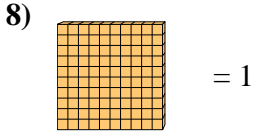
5. _____



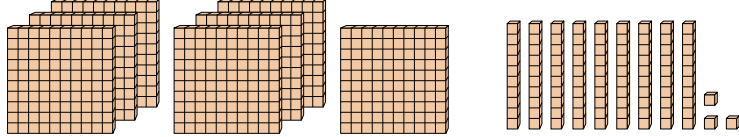
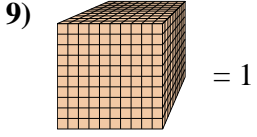
6. _____



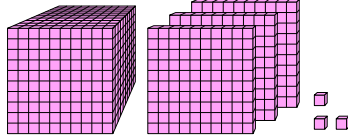
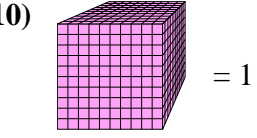
7. _____



8. _____



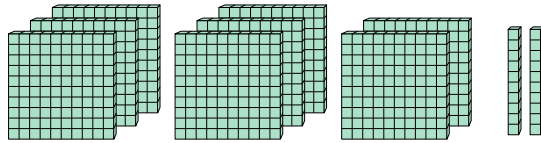
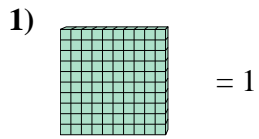
9. _____



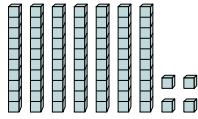
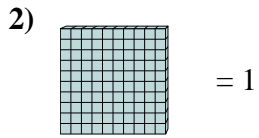
10. _____



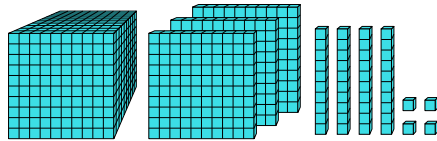
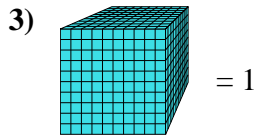
Use the block on the left to find the value of the set of blocks on the right.



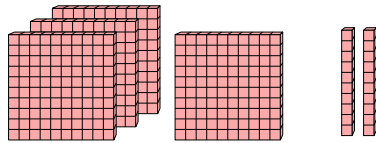
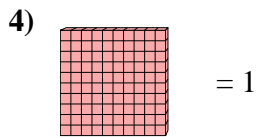
1. 8.2



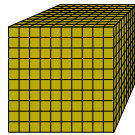
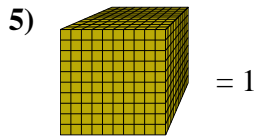
2. 0.74



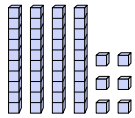
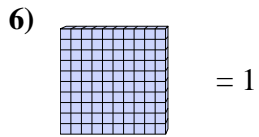
3. 1.344



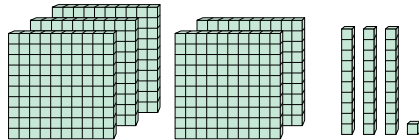
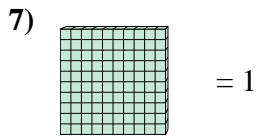
4. 4.2



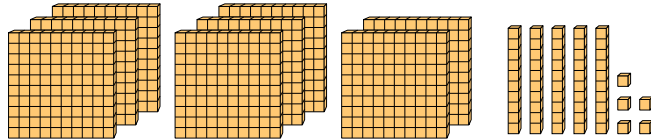
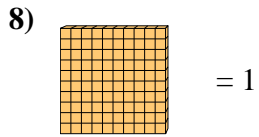
5. 1



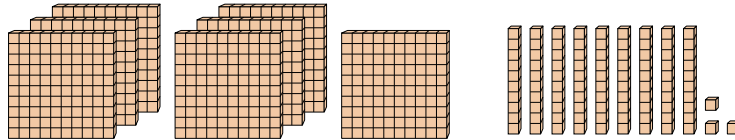
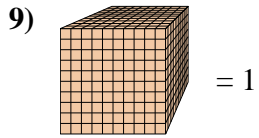
6. 0.46



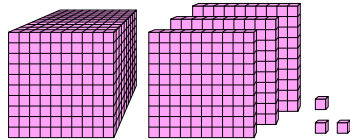
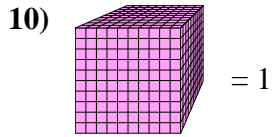
7. 5.31



8. 8.55



9. 0.793



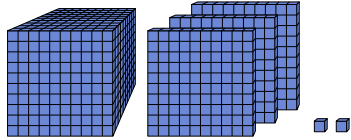
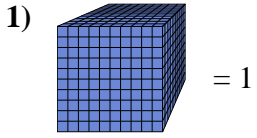
10. 1.303

Answers

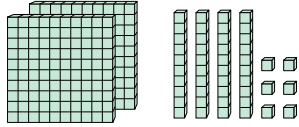
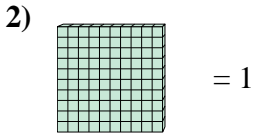


Use the block on the left to find the value of the set of blocks on the right.

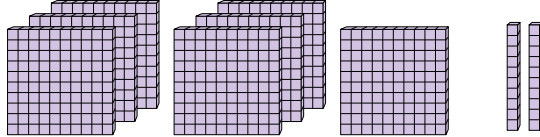
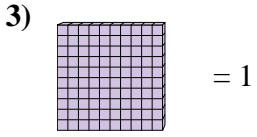
Answers



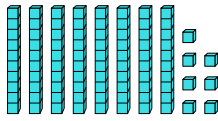
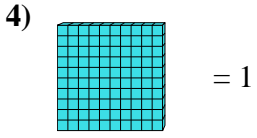
1. _____



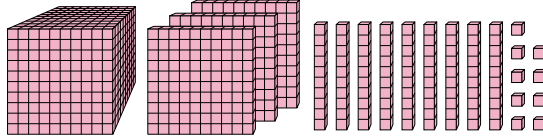
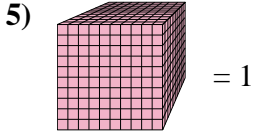
2. _____



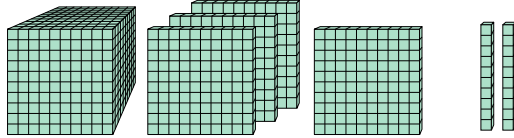
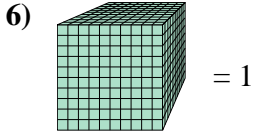
3. _____



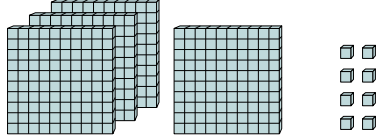
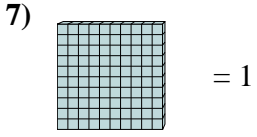
4. _____



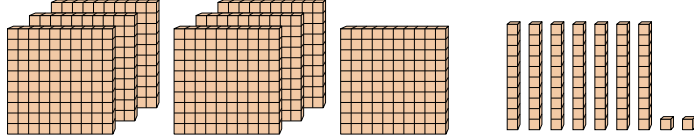
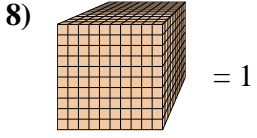
5. _____



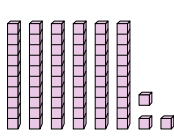
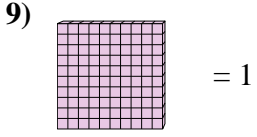
6. _____



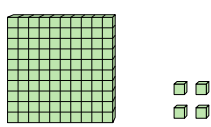
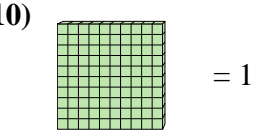
7. _____



8. _____



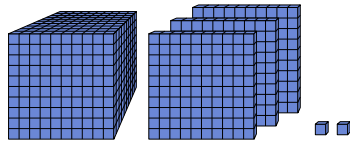
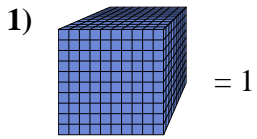
9. _____



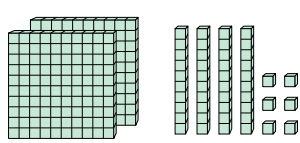
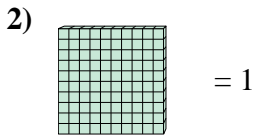
10. _____



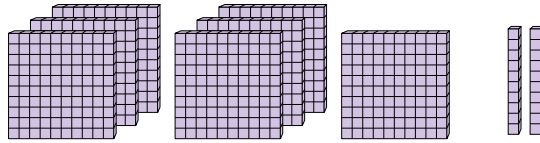
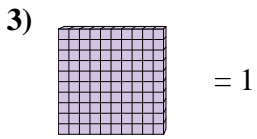
Use the block on the left to find the value of the set of blocks on the right.




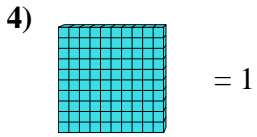
1. 1.302



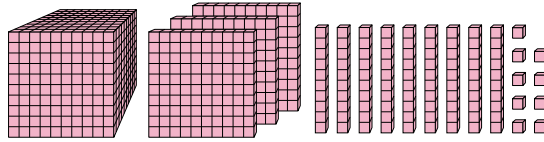
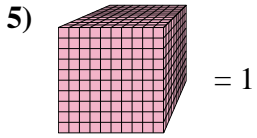
2. 2.46



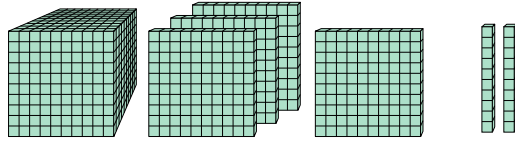
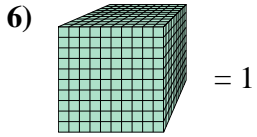
3. 7.2



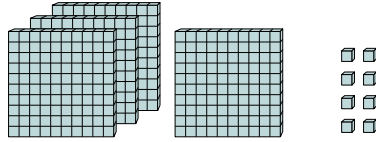
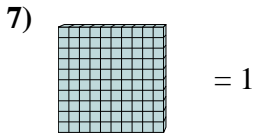
4. 0.87



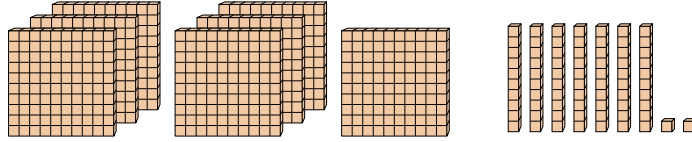
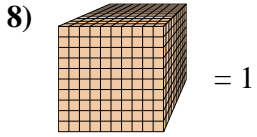
5. 1.399



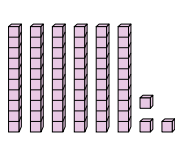
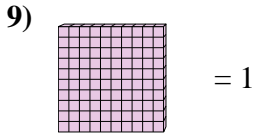
6. 1.42



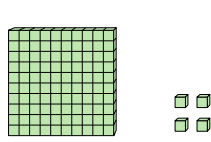
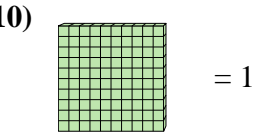
7. 4.08



8. 0.772



9. 0.63



10. 1.04

Answers



Use the block on the left to find the value of the set of blocks on the right.

Answers

1) = 1

1. _____

2) = 1

2. _____

3) = 1

3. _____

4) = 1

4. _____

5) = 1

5. _____

6) = 1

6. _____

7) = 1

7. _____

8) = 1

8. _____

9) = 1

9. _____

10) = 1

10. _____

10. _____

10. _____

10. _____

10. _____

10. _____

10. _____

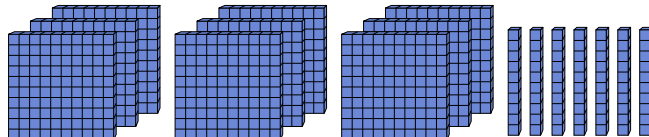
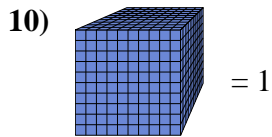
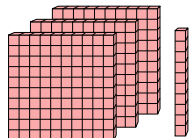
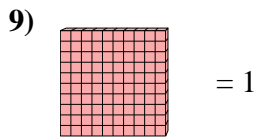
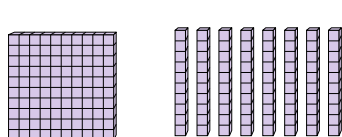
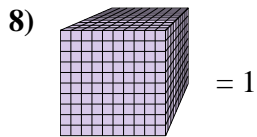
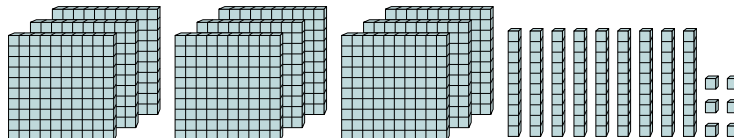
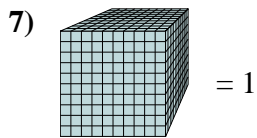
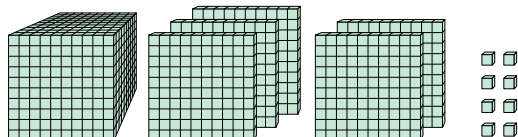
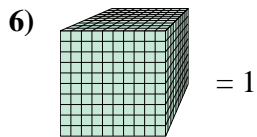
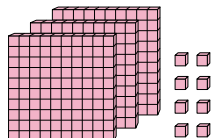
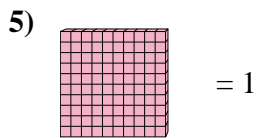
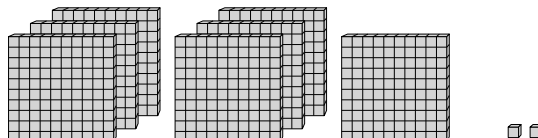
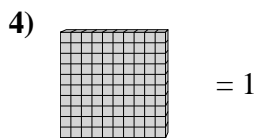
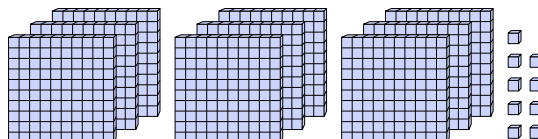
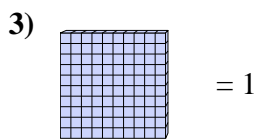
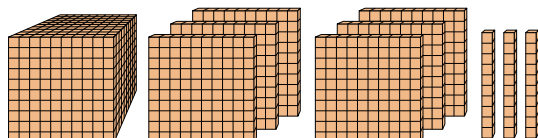
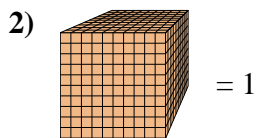
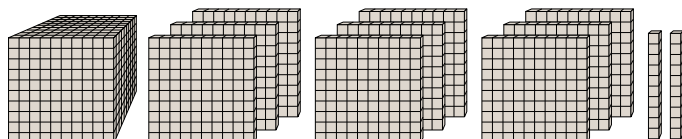
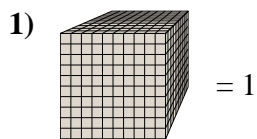
10. _____

10. _____

10. _____



Use the block on the left to find the value of the set of blocks on the right.



Answers

1. 1.92

2. 1.63

3. 9.09

4. 7.02

5. 3.08

6. 1.508

7. 0.996

8. 0.18

9. 3.1

10. 0.97



Use the block on the left to find the value of the set of blocks on the right.

Answers

1) = 1

1. _____

2. _____

2) = 1

3. _____

4. _____

3) = 1

5. _____

6. _____

4) = 1

7. _____

8. _____

5) = 1

9. _____

10. _____

6) = 1

7) = 1

8) = 1

9) = 1

10) = 1



Use the block on the left to find the value of the set of blocks on the right.

1) = 1

2) = 1

3) = 1

4) = 1

5) = 1

6) = 1

7) = 1

8) = 1

9) = 1

10) = 1

Answers

1. 8.85

2. 0.733

3. 0.22

4. 0.92

5. 3.68

6. 7.6

7. 0.71

8. 1.159

9. 0.38

10. 1.17



Use the block on the left to find the value of the set of blocks on the right.

Answers

1) = 1

1. _____

2) = 1

2. _____

3) = 1

3. _____

4) = 1

4. _____

5) = 1

5. _____

6) = 1

6. _____

7) = 1

7. _____

8) = 1

8. _____

9) = 1

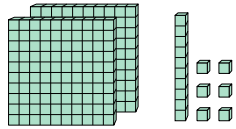
9. _____

10) = 1

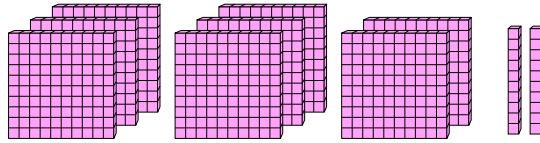
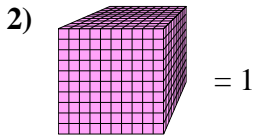
10. _____



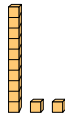
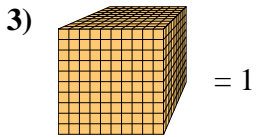
Use the block on the left to find the value of the set of blocks on the right.



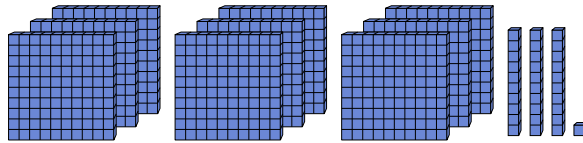
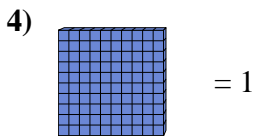
1. 2.16



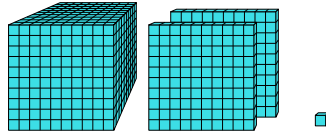
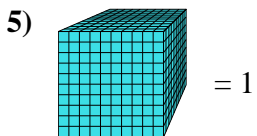
2. 0.82



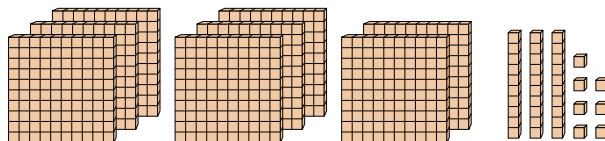
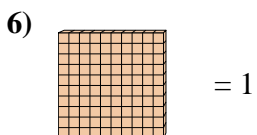
3. 0.012



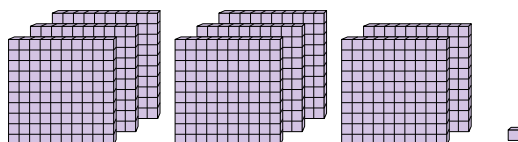
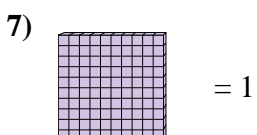
4. 9.31



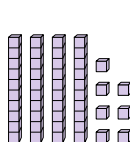
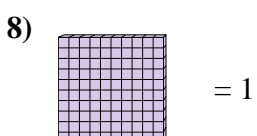
5. 1.201



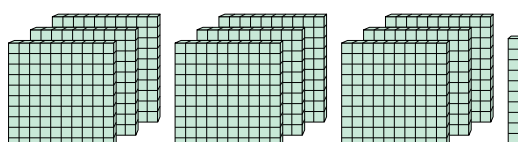
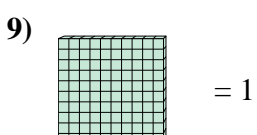
6. 8.37



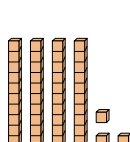
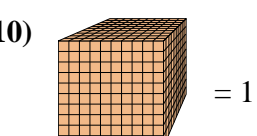
7. 8.01



8. 0.47



9. 9.1



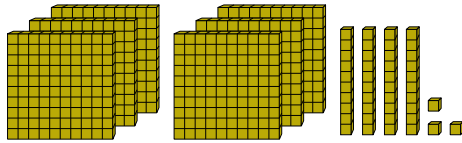
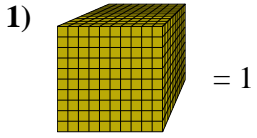
10. 0.043

Answers

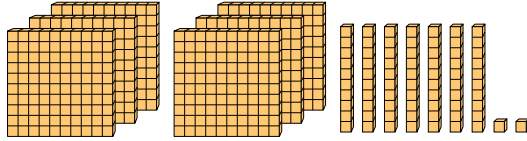
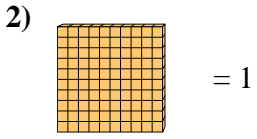


Use the block on the left to find the value of the set of blocks on the right.

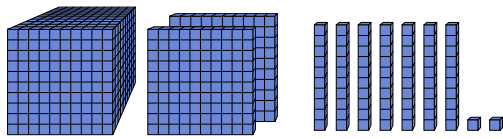
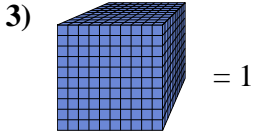
Answers



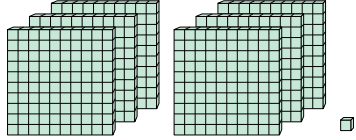
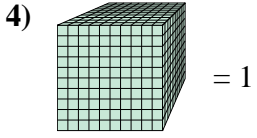
1. _____



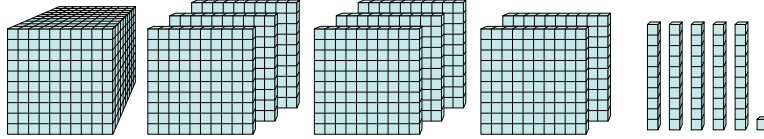
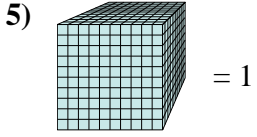
2. _____



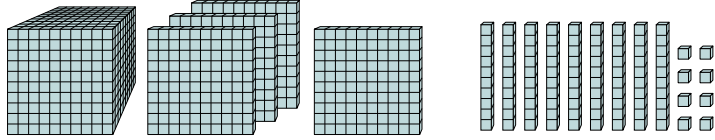
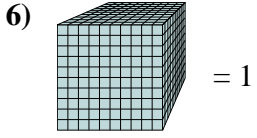
3. _____



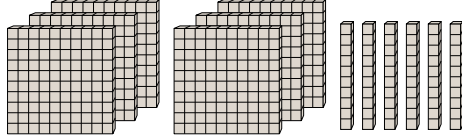
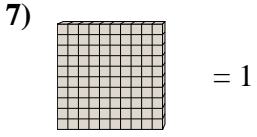
4. _____



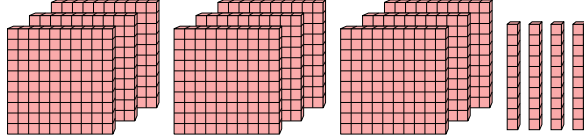
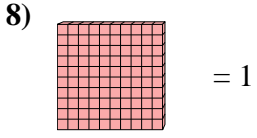
5. _____



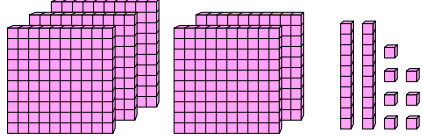
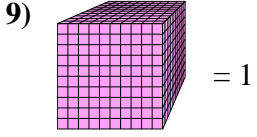
6. _____



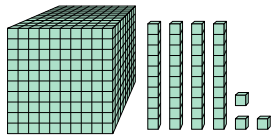
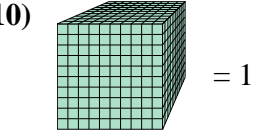
7. _____



8. _____



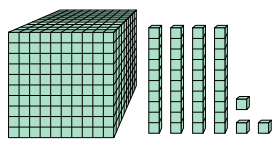
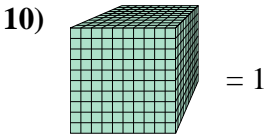
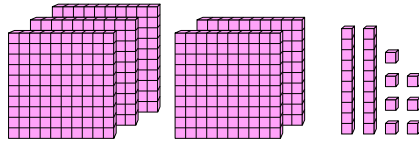
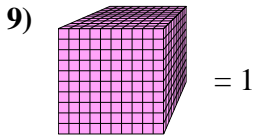
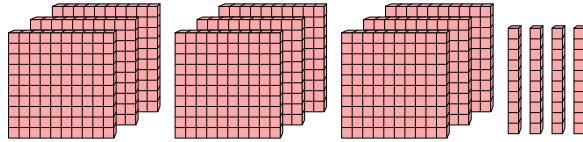
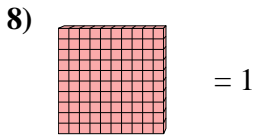
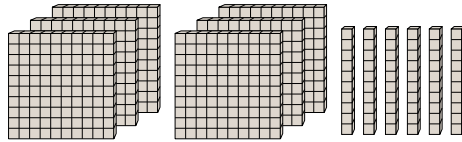
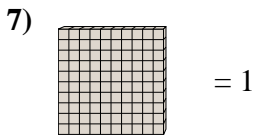
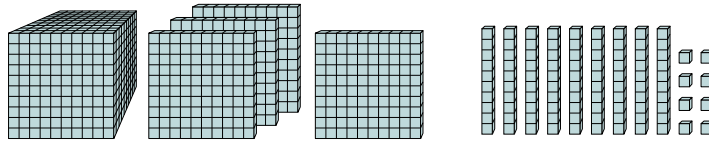
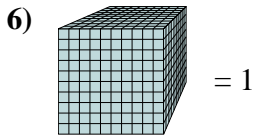
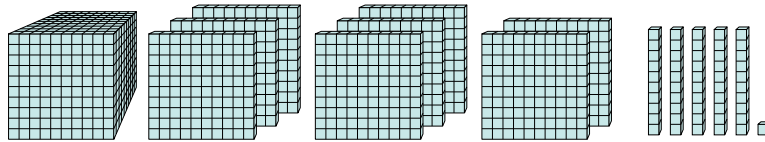
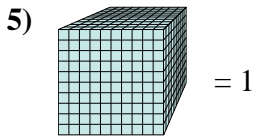
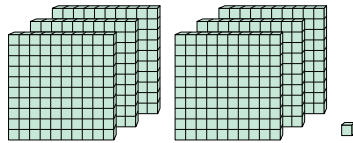
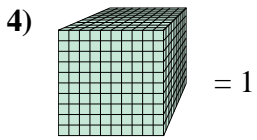
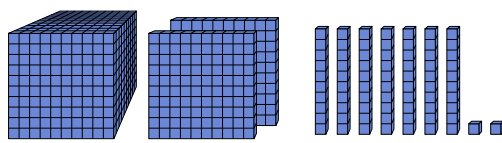
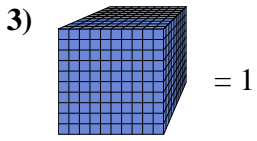
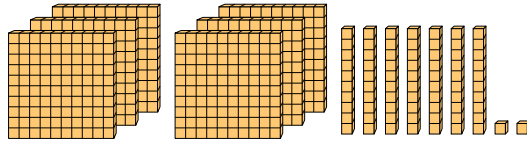
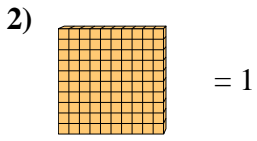
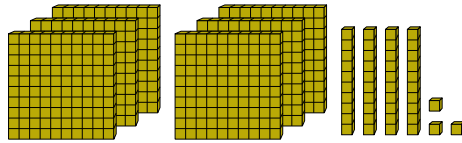
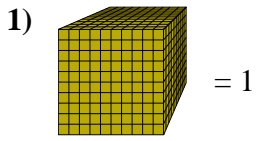
9. _____



10. _____



Use the block on the left to find the value of the set of blocks on the right.



Answers

1. 0.643

2. 6.72

3. 1.272

4. 0.601

5. 1.851

6. 1.498

7. 6.6

8. 9.4

9. 0.527

10. 1.043