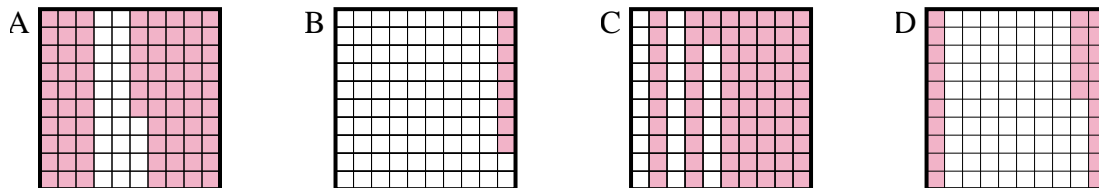




Determine which letter best answer the question.

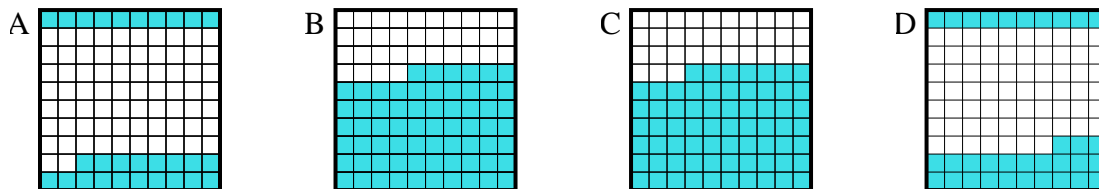
Answers

1) Which  $10 \times 10$  grid is shaded to represent the decimal number that, when added to 0.75, results in a total of 1.00?



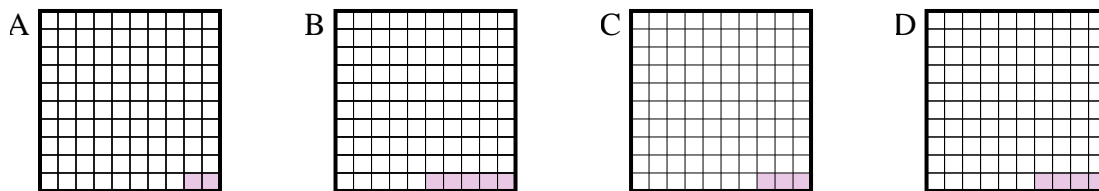
1. \_\_\_\_\_

2) Which  $10 \times 10$  grid is shaded to represent the decimal number that, when added to 0.67, results in a total of 1.00?



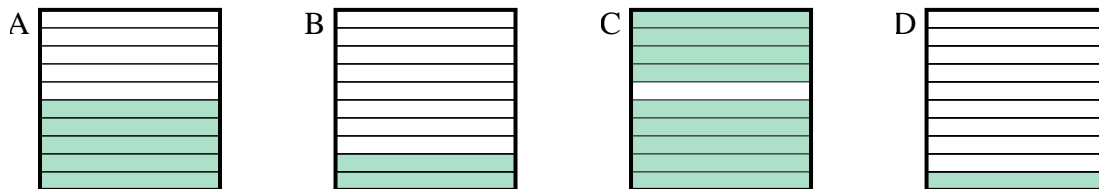
2. \_\_\_\_\_

3) Which  $10 \times 10$  grid is shaded to represent the decimal number that, when added to 0.97, results in a total of 1.00?



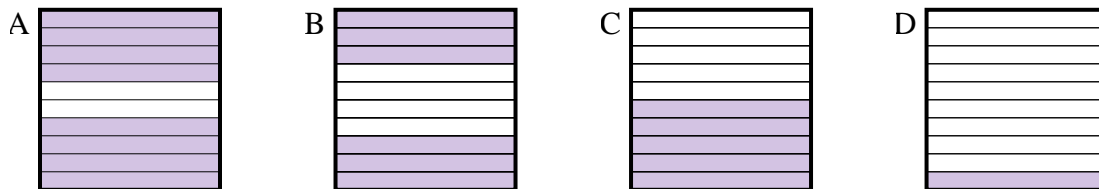
3. \_\_\_\_\_

4) Which  $10 \times 1$  grid is shaded to represent the decimal number that, when added to 0.1, results in a total of 1.00?



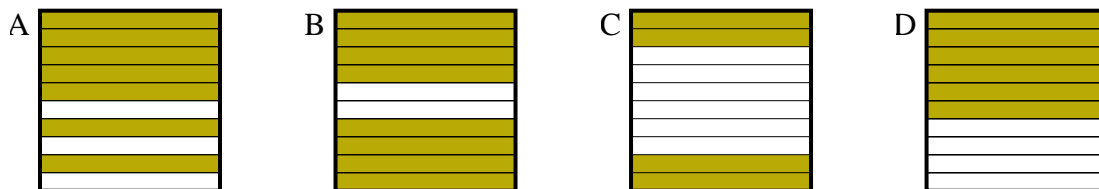
4. \_\_\_\_\_

5) Which  $10 \times 1$  grid is shaded to represent the decimal number that, when added to 0.2, results in a total of 1.00?



5. \_\_\_\_\_

6) Which  $10 \times 1$  grid is shaded to represent the decimal number that, when added to 0.6, results in a total of 1.00?

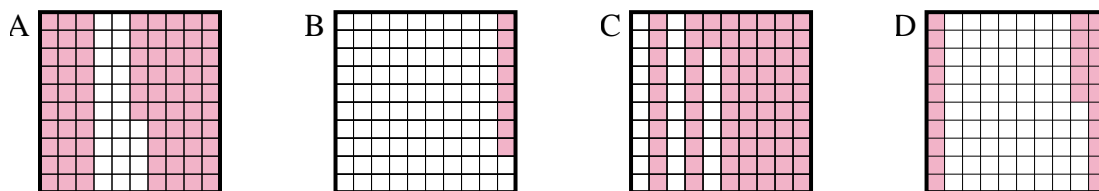


6. \_\_\_\_\_

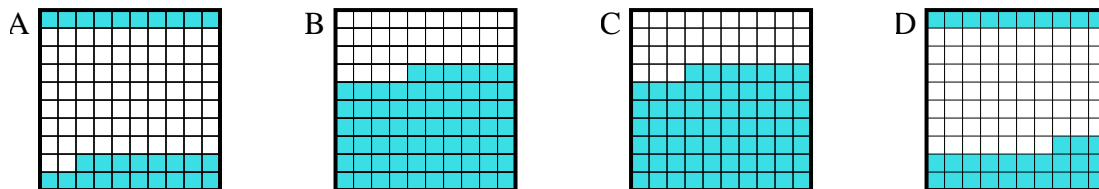


Determine which letter best answer the question.

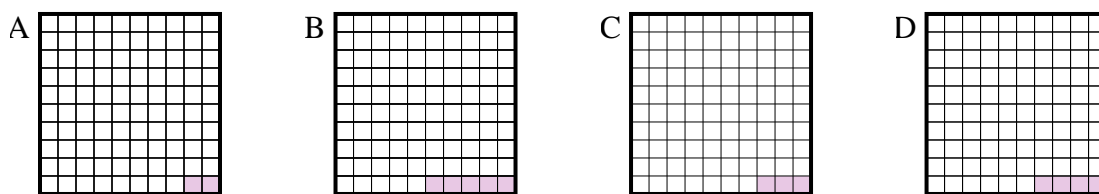
1) Which  $10 \times 10$  grid is shaded to represent the decimal number that, when added to 0.75, results in a total of 1.00?



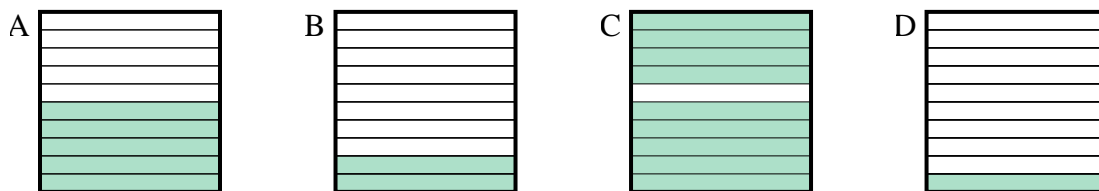
2) Which  $10 \times 10$  grid is shaded to represent the decimal number that, when added to 0.67, results in a total of 1.00?



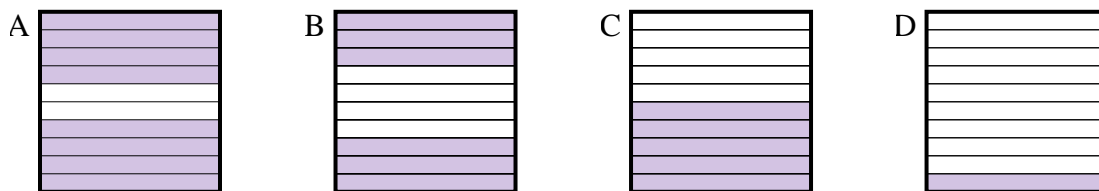
3) Which  $10 \times 10$  grid is shaded to represent the decimal number that, when added to 0.97, results in a total of 1.00?



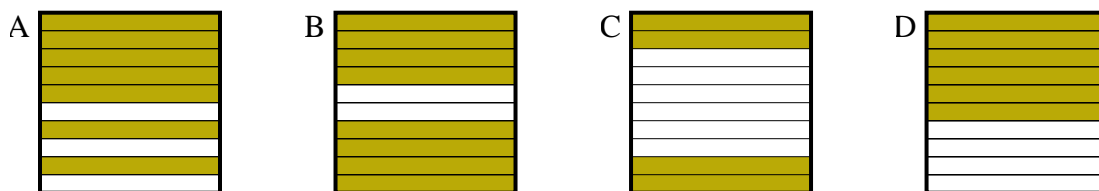
4) Which  $10 \times 1$  grid is shaded to represent the decimal number that, when added to 0.1, results in a total of 1.00?



5) Which  $10 \times 1$  grid is shaded to represent the decimal number that, when added to 0.2, results in a total of 1.00?



6) Which  $10 \times 1$  grid is shaded to represent the decimal number that, when added to 0.6, results in a total of 1.00?



Answers

1. **D**

2. **D**

3. **C**

4. **C**

5. **A**

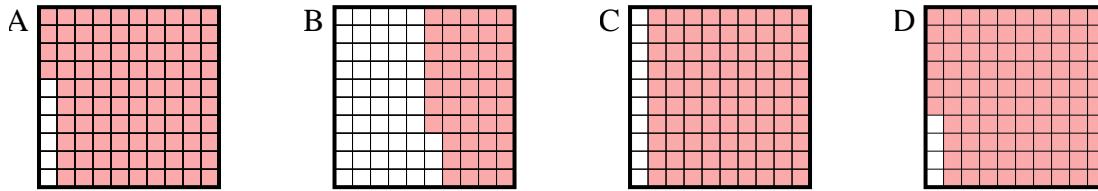
6. **C**



Determine which letter best answer the question.

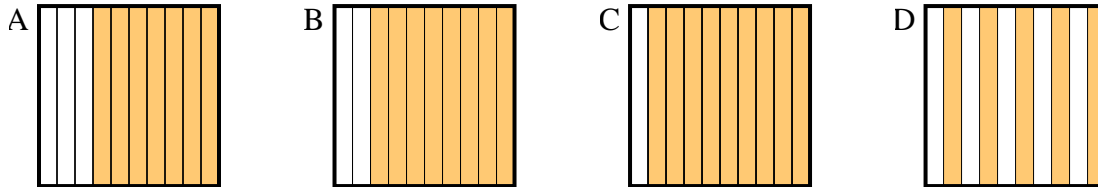
Answers

1) Which  $10 \times 10$  grid is shaded to represent the decimal number that, when added to 0.04, results in a total of 1.00?



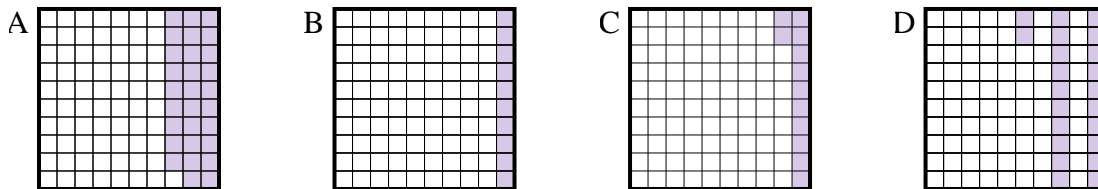
1. \_\_\_\_\_

2) Which  $10 \times 1$  grid is shaded to represent the decimal number that, when added to 0.5, results in a total of 1.00?



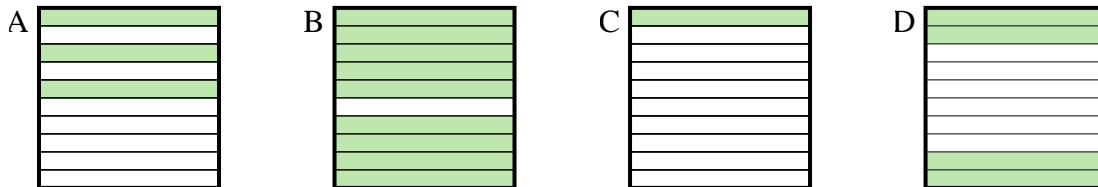
2. \_\_\_\_\_

3) Which  $10 \times 10$  grid is shaded to represent the decimal number that, when added to 0.88, results in a total of 1.00?



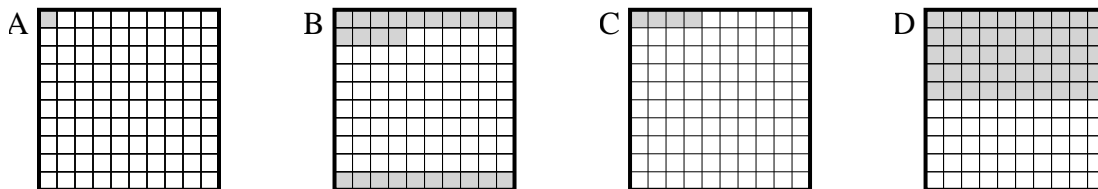
3. \_\_\_\_\_

4) Which  $10 \times 1$  grid is shaded to represent the decimal number that, when added to 0.6, results in a total of 1.00?



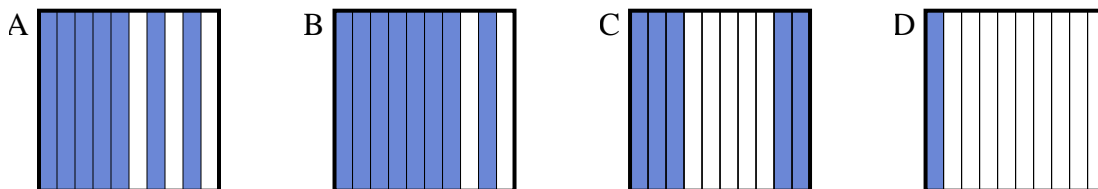
4. \_\_\_\_\_

5) Which  $10 \times 10$  grid is shaded to represent the decimal number that, when added to 0.96, results in a total of 1.00?



5. \_\_\_\_\_

6) Which  $10 \times 1$  grid is shaded to represent the decimal number that, when added to 0.3, results in a total of 1.00?

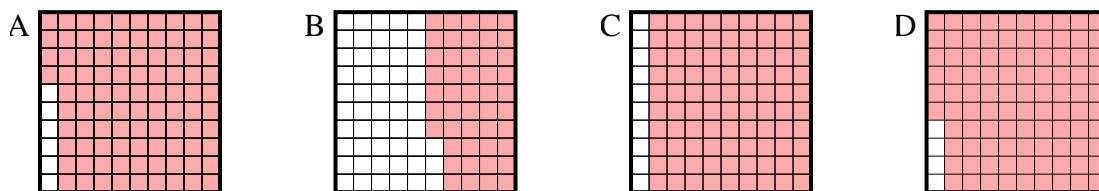


6. \_\_\_\_\_

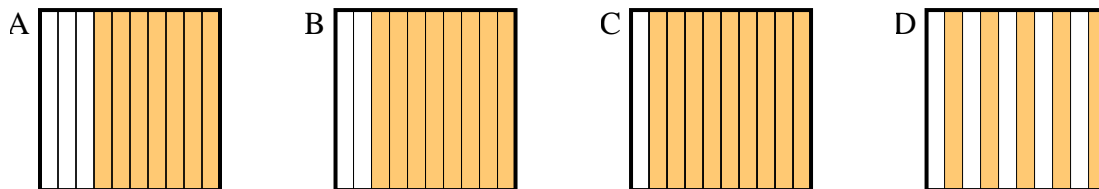


Determine which letter best answer the question.

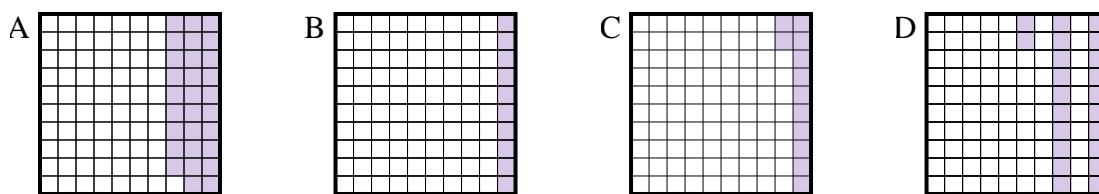
- 1) Which  $10 \times 10$  grid is shaded to represent the decimal number that, when added to 0.04, results in a total of 1.00?



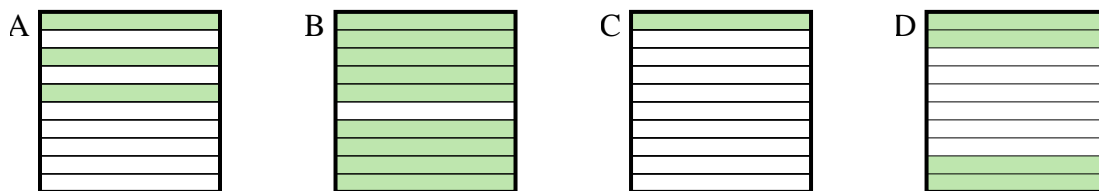
- 2) Which  $10 \times 1$  grid is shaded to represent the decimal number that, when added to 0.5, results in a total of 1.00?



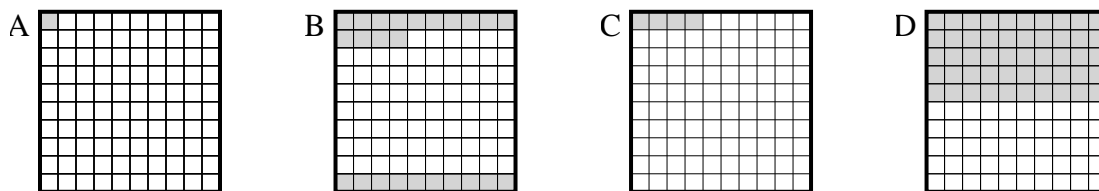
- 3) Which  $10 \times 10$  grid is shaded to represent the decimal number that, when added to 0.88, results in a total of 1.00?



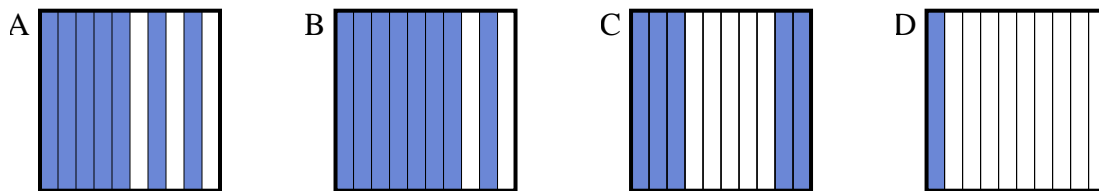
- 4) Which  $10 \times 1$  grid is shaded to represent the decimal number that, when added to 0.6, results in a total of 1.00?



- 5) Which  $10 \times 10$  grid is shaded to represent the decimal number that, when added to 0.96, results in a total of 1.00?



- 6) Which  $10 \times 1$  grid is shaded to represent the decimal number that, when added to 0.3, results in a total of 1.00?

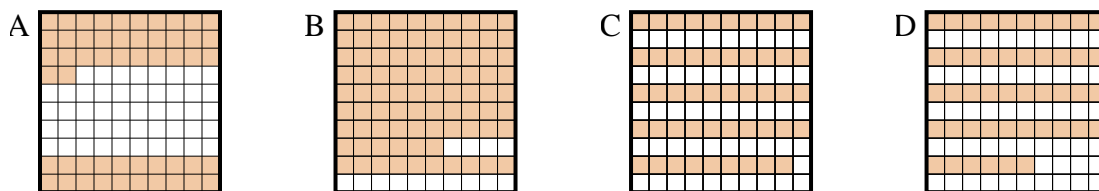
Answers1. **D**2. **D**3. **C**4. **D**5. **C**6. **A**



Determine which letter best answer the question.

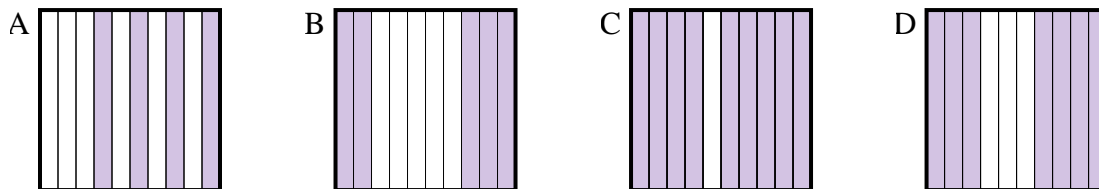
Answers

1) Which  $10 \times 10$  grid is shaded to represent the decimal number that, when added to 0.48, results in a total of 1.00?



1. \_\_\_\_\_

2) Which  $10 \times 1$  grid is shaded to represent the decimal number that, when added to 0.5, results in a total of 1.00?



2. \_\_\_\_\_

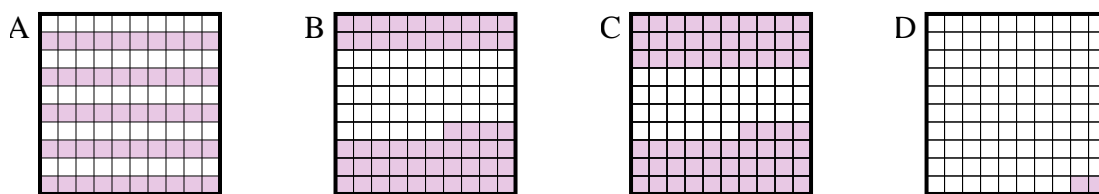
3. \_\_\_\_\_

4. \_\_\_\_\_

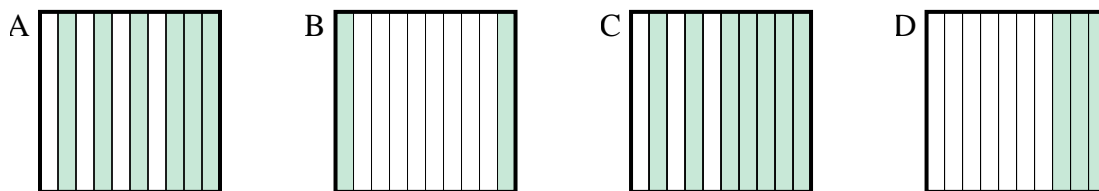
5. \_\_\_\_\_

6. \_\_\_\_\_

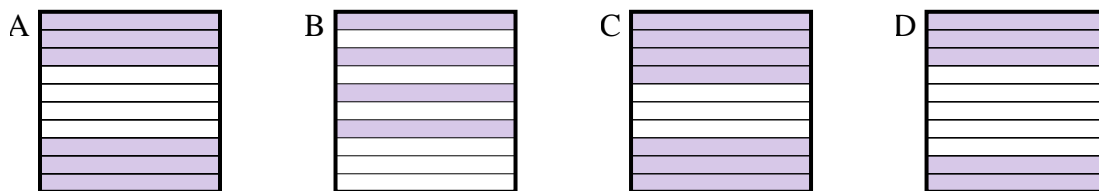
3) Which  $10 \times 10$  grid is shaded to represent the decimal number that, when added to 0.5, results in a total of 1.00?



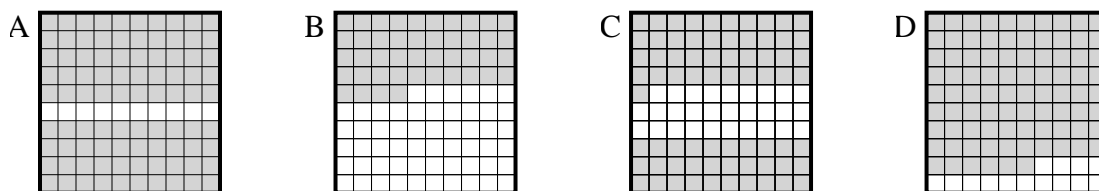
4) Which  $10 \times 1$  grid is shaded to represent the decimal number that, when added to 0.8, results in a total of 1.00?



5) Which  $10 \times 1$  grid is shaded to represent the decimal number that, when added to 0.6, results in a total of 1.00?



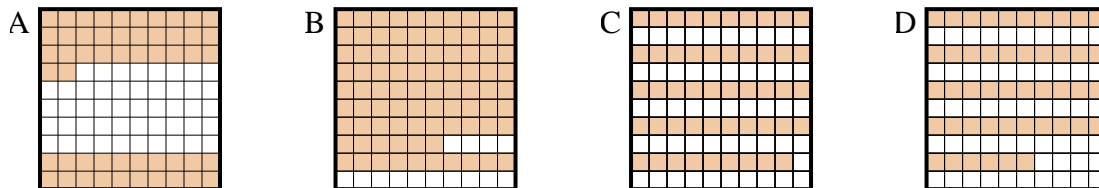
6) Which  $10 \times 10$  grid is shaded to represent the decimal number that, when added to 0.1, results in a total of 1.00?



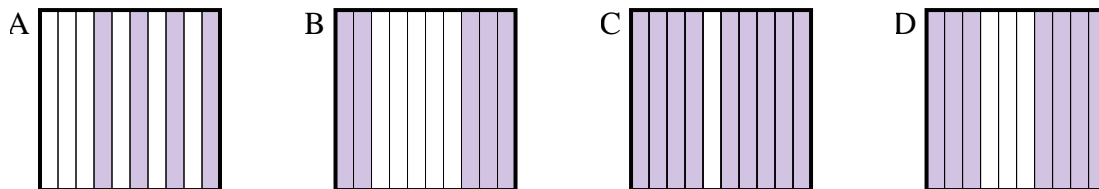


Determine which letter best answer the question.

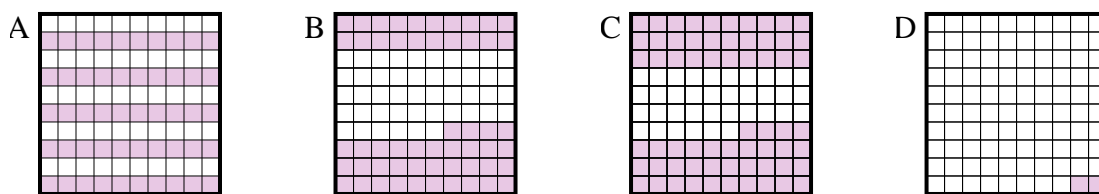
1) Which  $10 \times 10$  grid is shaded to represent the decimal number that, when added to 0.48, results in a total of 1.00?



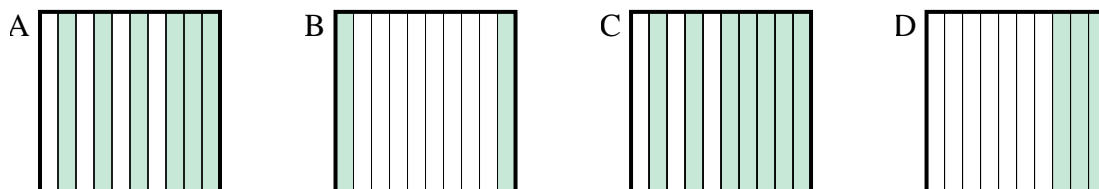
2) Which  $10 \times 1$  grid is shaded to represent the decimal number that, when added to 0.5, results in a total of 1.00?



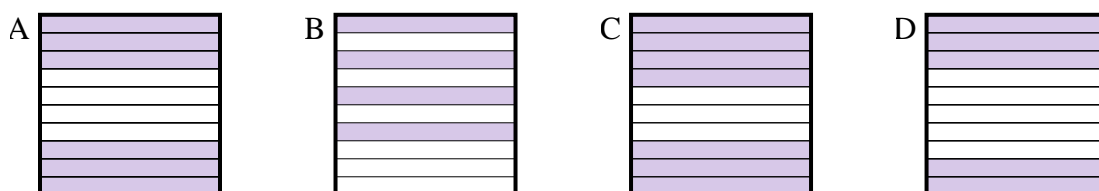
3) Which  $10 \times 10$  grid is shaded to represent the decimal number that, when added to 0.5, results in a total of 1.00?



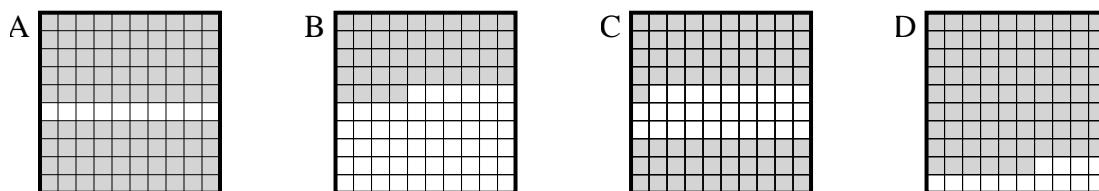
4) Which  $10 \times 1$  grid is shaded to represent the decimal number that, when added to 0.8, results in a total of 1.00?



5) Which  $10 \times 1$  grid is shaded to represent the decimal number that, when added to 0.6, results in a total of 1.00?



6) Which  $10 \times 10$  grid is shaded to represent the decimal number that, when added to 0.1, results in a total of 1.00?



Answers

1.     **A**    

2.     **B**    

3.     **A**    

4.     **B**    

5.     **B**    

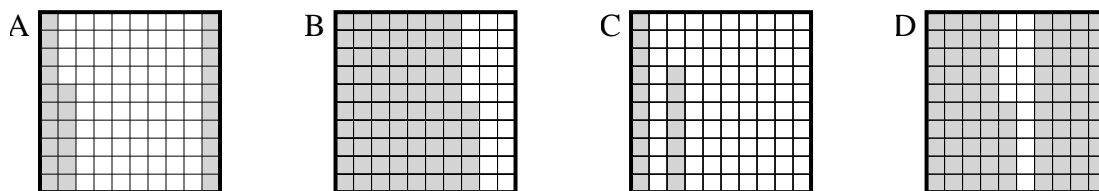
6.     **A**



Determine which letter best answer the question.

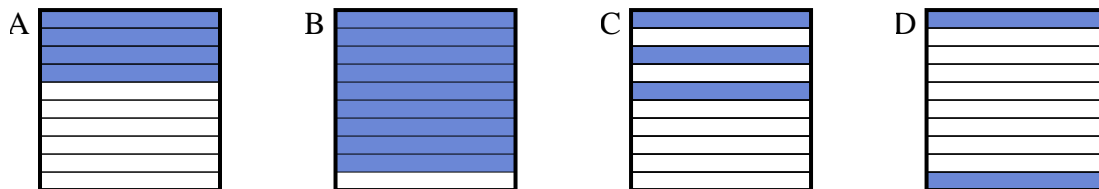
Answers

1) Which  $10 \times 10$  grid is shaded to represent the decimal number that, when added to 0.74, results in a total of 1.00?



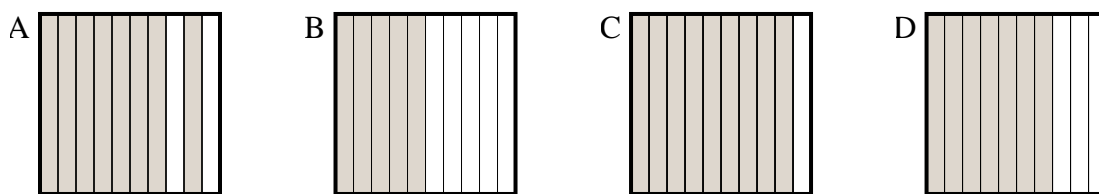
1. \_\_\_\_\_

2) Which  $10 \times 1$  grid is shaded to represent the decimal number that, when added to 0.1, results in a total of 1.00?



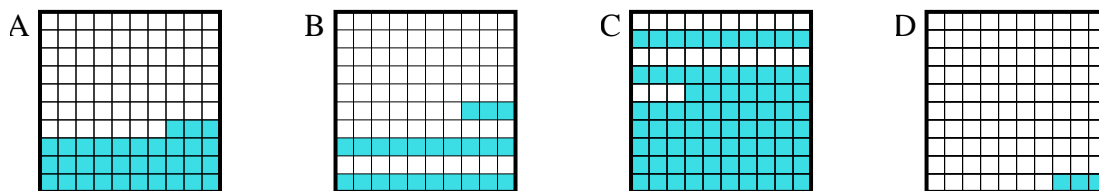
2. \_\_\_\_\_

3) Which  $10 \times 1$  grid is shaded to represent the decimal number that, when added to 0.5, results in a total of 1.00?



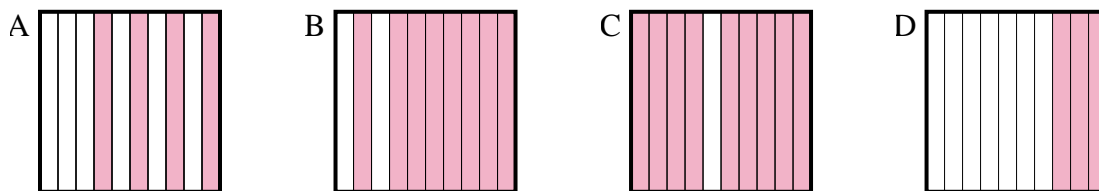
3. \_\_\_\_\_

4) Which  $10 \times 10$  grid is shaded to represent the decimal number that, when added to 0.77, results in a total of 1.00?



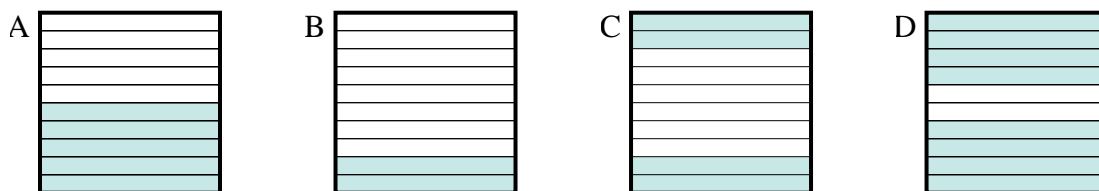
4. \_\_\_\_\_

5) Which  $10 \times 1$  grid is shaded to represent the decimal number that, when added to 0.7, results in a total of 1.00?



5. \_\_\_\_\_

6) Which  $10 \times 1$  grid is shaded to represent the decimal number that, when added to 0.6, results in a total of 1.00?

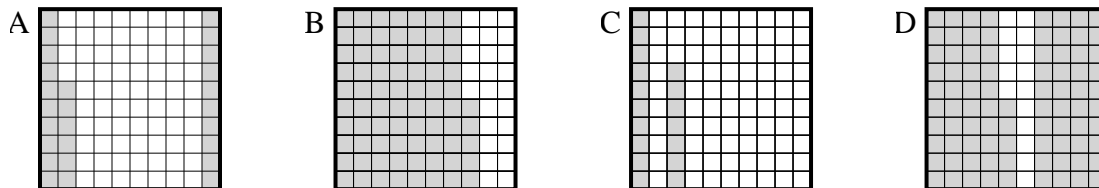


6. \_\_\_\_\_

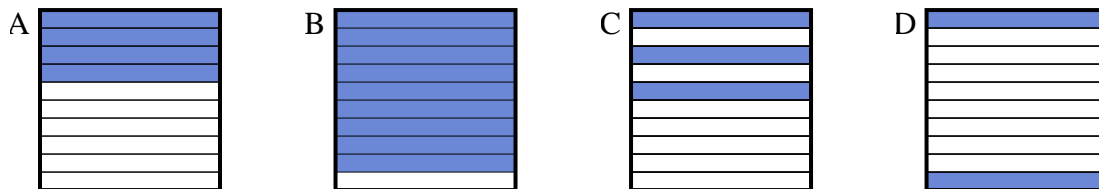


Determine which letter best answer the question.

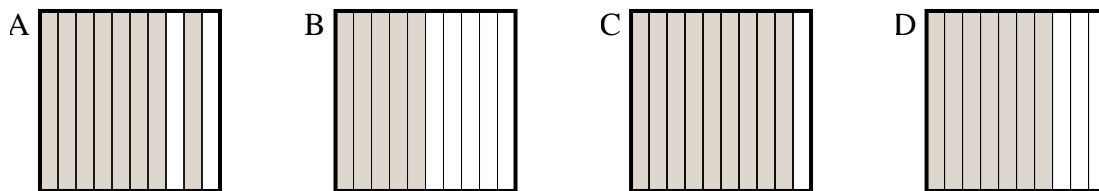
1) Which  $10 \times 10$  grid is shaded to represent the decimal number that, when added to 0.74, results in a total of 1.00?



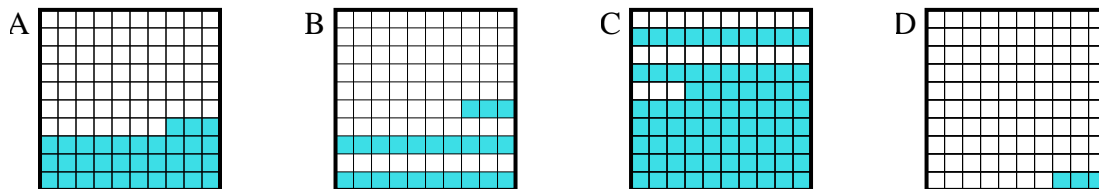
2) Which  $10 \times 1$  grid is shaded to represent the decimal number that, when added to 0.1, results in a total of 1.00?



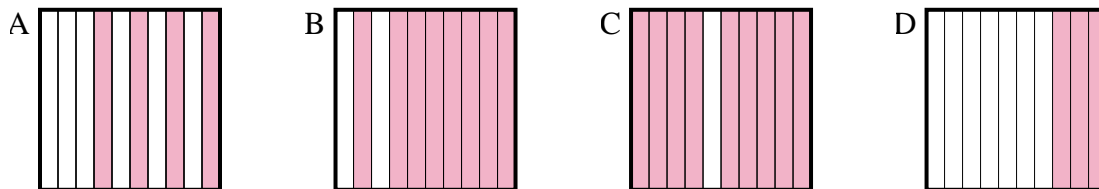
3) Which  $10 \times 1$  grid is shaded to represent the decimal number that, when added to 0.5, results in a total of 1.00?



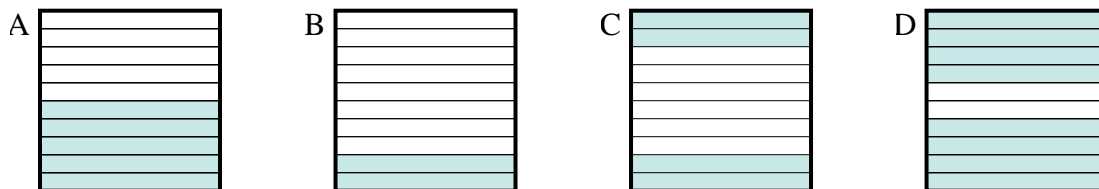
4) Which  $10 \times 10$  grid is shaded to represent the decimal number that, when added to 0.77, results in a total of 1.00?



5) Which  $10 \times 1$  grid is shaded to represent the decimal number that, when added to 0.7, results in a total of 1.00?



6) Which  $10 \times 1$  grid is shaded to represent the decimal number that, when added to 0.6, results in a total of 1.00?



Answers

1. **A**

2. **B**

3. **B**

4. **B**

5. **D**

6. **C**

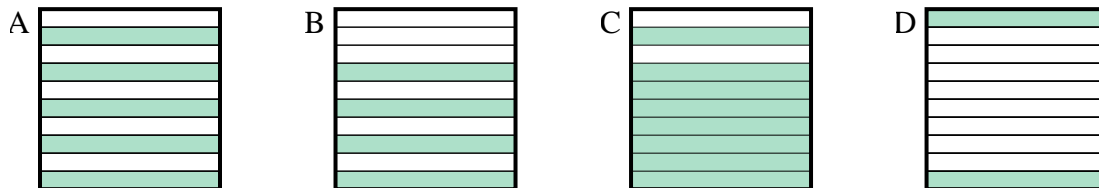




Determine which letter best answer the question.

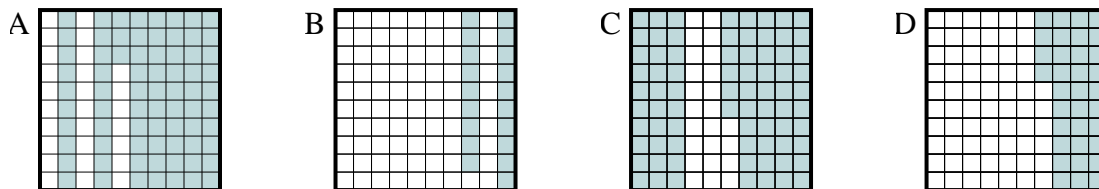
Answers

1) Which  $10 \times 1$  grid is shaded to represent the decimal number that, when added to 0.2, results in a total of 1.00?



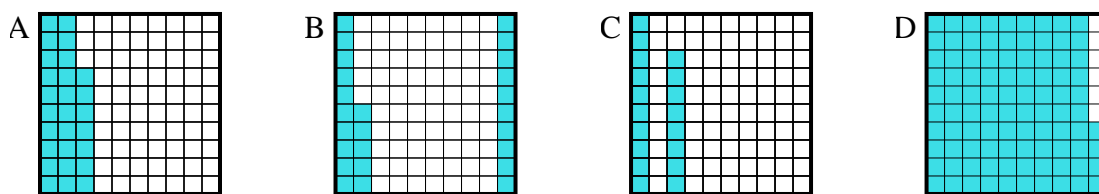
1. \_\_\_\_\_  
 2. \_\_\_\_\_  
 3. \_\_\_\_\_

2) Which  $10 \times 10$  grid is shaded to represent the decimal number that, when added to 0.27, results in a total of 1.00?

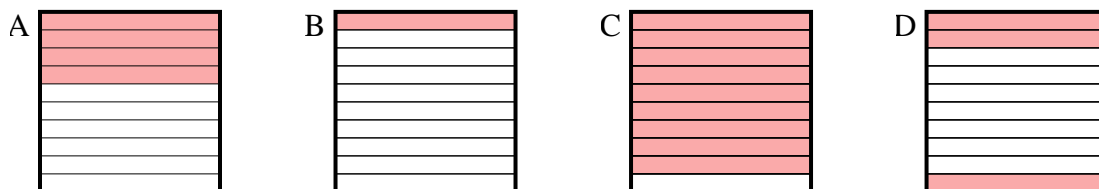


4. \_\_\_\_\_  
 5. \_\_\_\_\_  
 6. \_\_\_\_\_

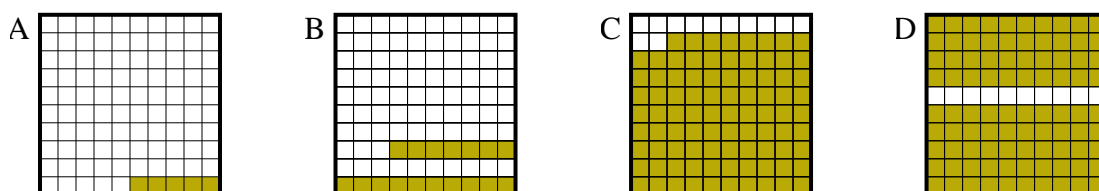
3) Which  $10 \times 10$  grid is shaded to represent the decimal number that, when added to 0.06, results in a total of 1.00?



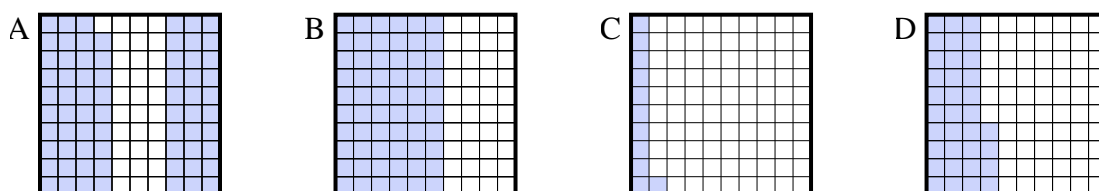
4) Which  $10 \times 1$  grid is shaded to represent the decimal number that, when added to 0.6, results in a total of 1.00?



5) Which  $10 \times 10$  grid is shaded to represent the decimal number that, when added to 0.95, results in a total of 1.00?



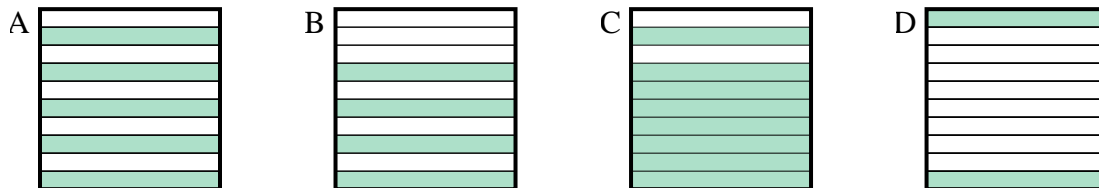
6) Which  $10 \times 10$  grid is shaded to represent the decimal number that, when added to 0.89, results in a total of 1.00?



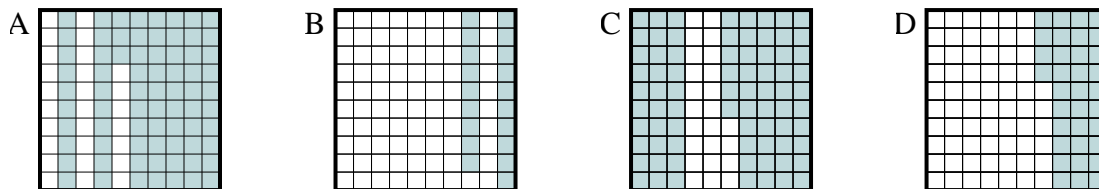


Determine which letter best answer the question.

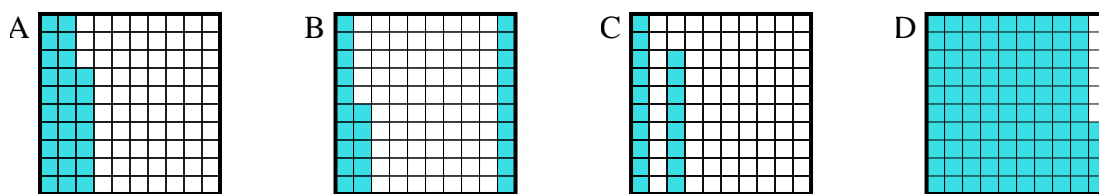
1) Which  $10 \times 1$  grid is shaded to represent the decimal number that, when added to 0.2, results in a total of 1.00?



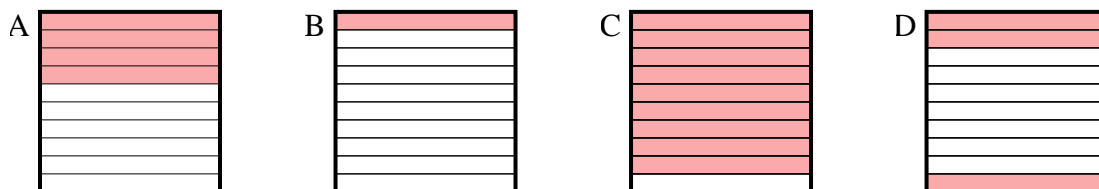
2) Which  $10 \times 10$  grid is shaded to represent the decimal number that, when added to 0.27, results in a total of 1.00?



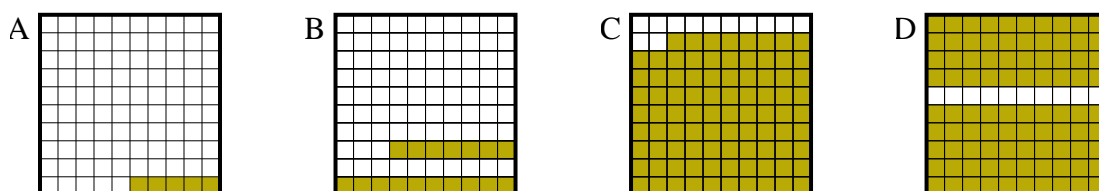
3) Which  $10 \times 10$  grid is shaded to represent the decimal number that, when added to 0.06, results in a total of 1.00?



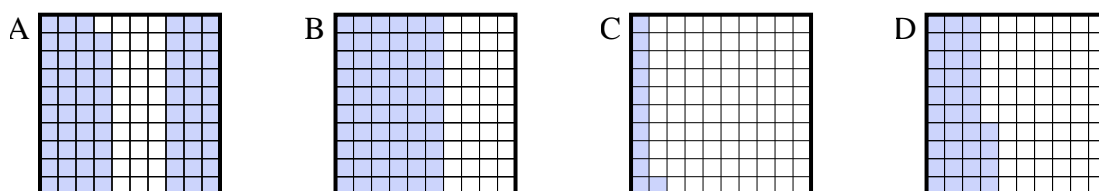
4) Which  $10 \times 1$  grid is shaded to represent the decimal number that, when added to 0.6, results in a total of 1.00?



5) Which  $10 \times 10$  grid is shaded to represent the decimal number that, when added to 0.95, results in a total of 1.00?



6) Which  $10 \times 10$  grid is shaded to represent the decimal number that, when added to 0.89, results in a total of 1.00?



Answers

1.     **C**    

2.     **A**    

3.     **D**    

4.     **A**    

5.     **A**    

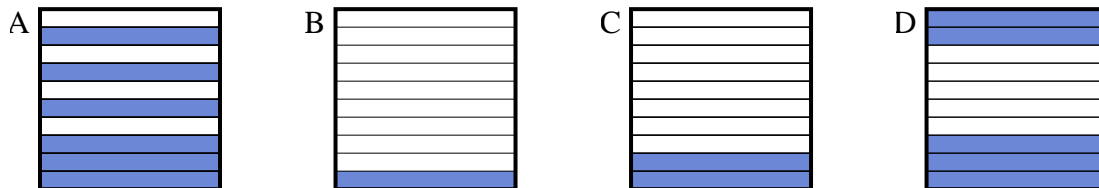
6.     **C**



Determine which letter best answer the question.

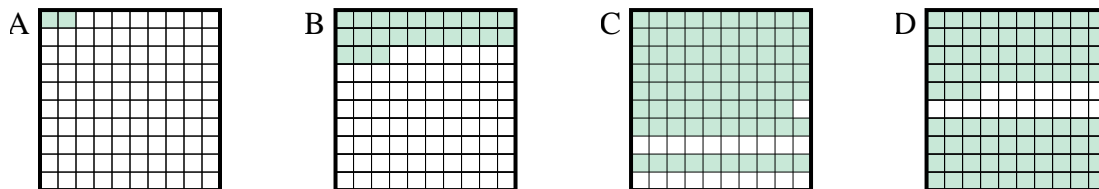
Answers

1) Which  $10 \times 1$  grid is shaded to represent the decimal number that, when added to 0.9, results in a total of 1.00?



1. \_\_\_\_\_

2) Which  $10 \times 10$  grid is shaded to represent the decimal number that, when added to 0.21, results in a total of 1.00?



2. \_\_\_\_\_

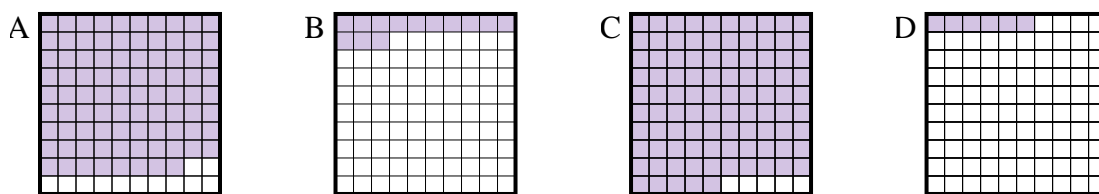
3. \_\_\_\_\_

4. \_\_\_\_\_

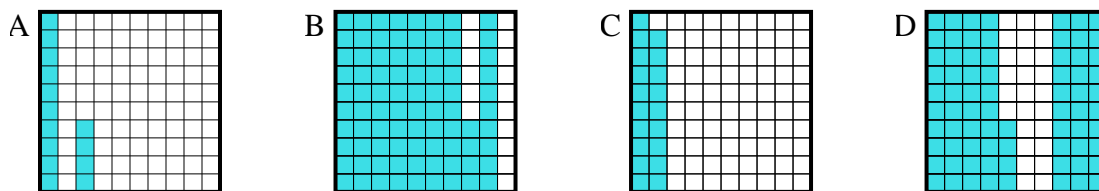
5. \_\_\_\_\_

6. \_\_\_\_\_

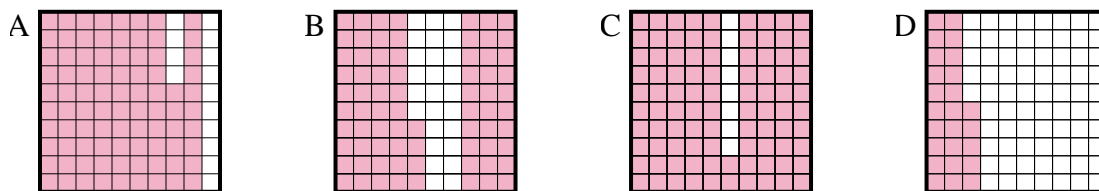
3) Which  $10 \times 10$  grid is shaded to represent the decimal number that, when added to 0.87, results in a total of 1.00?



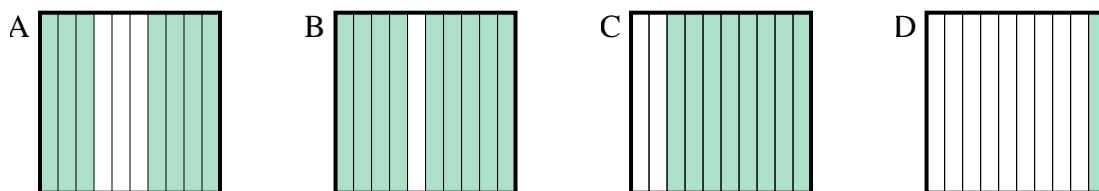
4) Which  $10 \times 10$  grid is shaded to represent the decimal number that, when added to 0.86, results in a total of 1.00?



5) Which  $10 \times 10$  grid is shaded to represent the decimal number that, when added to 0.14, results in a total of 1.00?



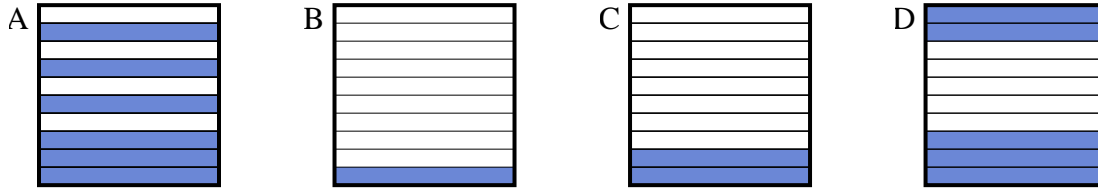
6) Which  $10 \times 1$  grid is shaded to represent the decimal number that, when added to 0.3, results in a total of 1.00?



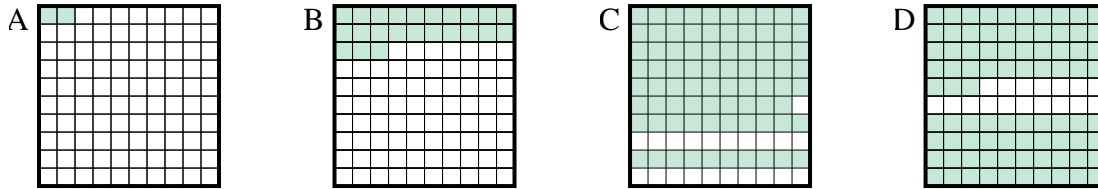


Determine which letter best answer the question.

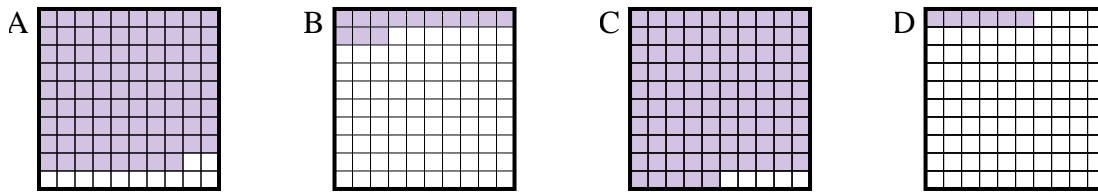
- 1) Which  $10 \times 1$  grid is shaded to represent the decimal number that, when added to 0.9, results in a total of 1.00?



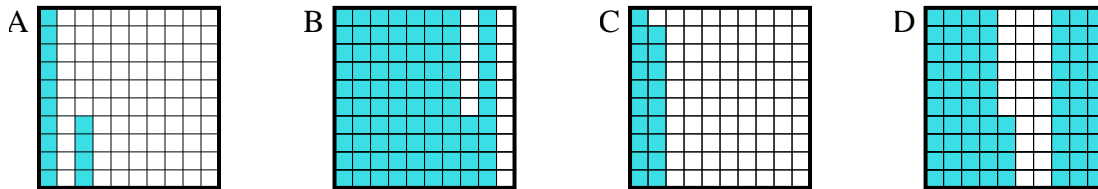
- 2) Which  $10 \times 10$  grid is shaded to represent the decimal number that, when added to 0.21, results in a total of 1.00?



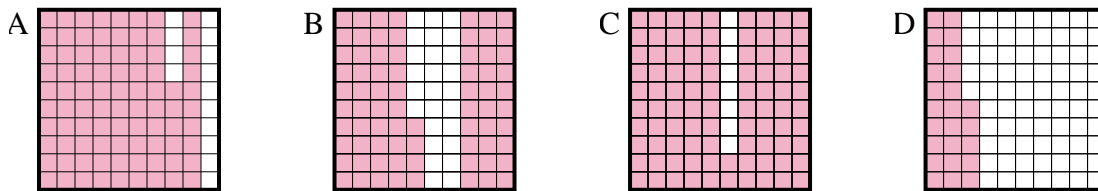
- 3) Which  $10 \times 10$  grid is shaded to represent the decimal number that, when added to 0.87, results in a total of 1.00?



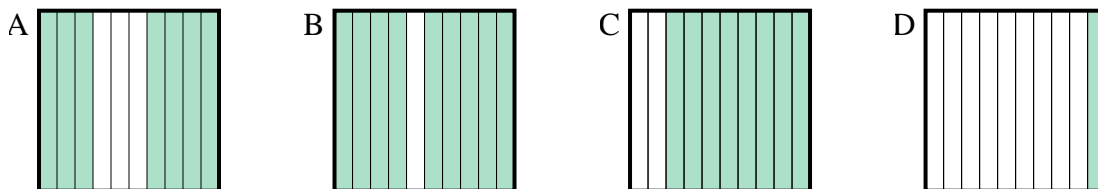
- 4) Which  $10 \times 10$  grid is shaded to represent the decimal number that, when added to 0.86, results in a total of 1.00?



- 5) Which  $10 \times 10$  grid is shaded to represent the decimal number that, when added to 0.14, results in a total of 1.00?



- 6) Which  $10 \times 1$  grid is shaded to represent the decimal number that, when added to 0.3, results in a total of 1.00?



Answers

1. **B**

2. **C**

3. **B**

4. **A**

5. **A**

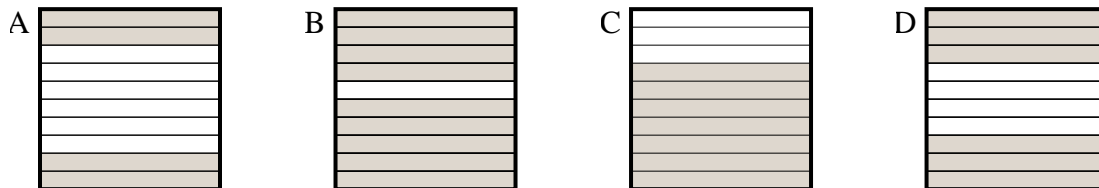
6. **A**



Determine which letter best answer the question.

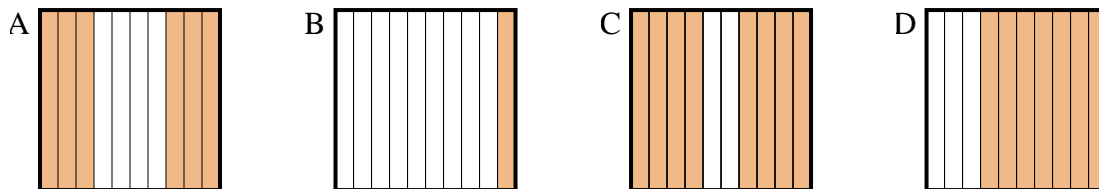
Answers

1) Which  $10 \times 1$  grid is shaded to represent the decimal number that, when added to 0.3, results in a total of 1.00?



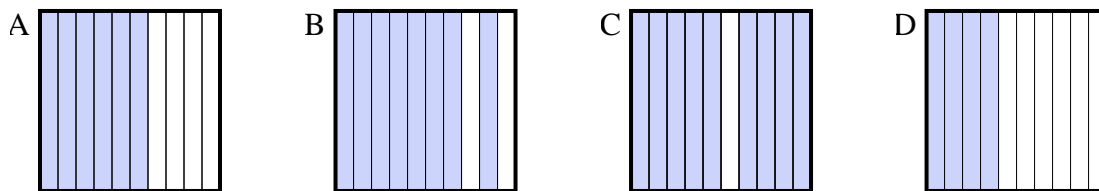
1. \_\_\_\_\_

2) Which  $10 \times 1$  grid is shaded to represent the decimal number that, when added to 0.4, results in a total of 1.00?



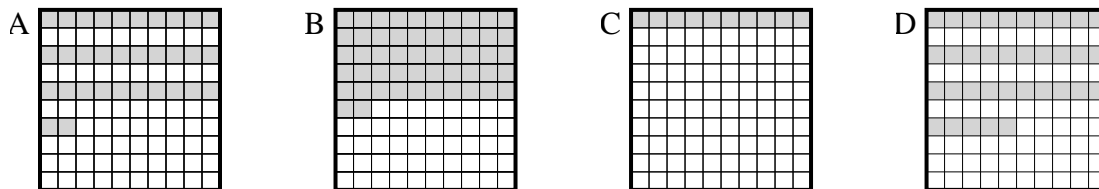
2. \_\_\_\_\_

3) Which  $10 \times 1$  grid is shaded to represent the decimal number that, when added to 0.6, results in a total of 1.00?



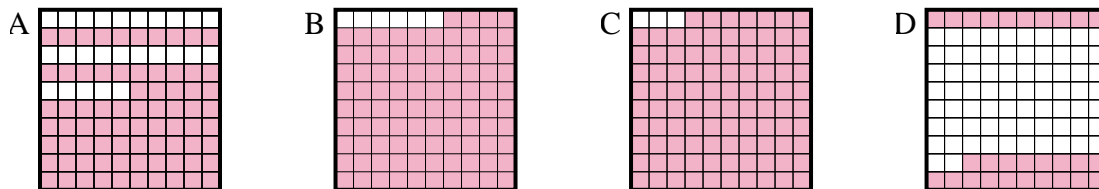
3. \_\_\_\_\_

4) Which  $10 \times 10$  grid is shaded to represent the decimal number that, when added to 0.65, results in a total of 1.00?



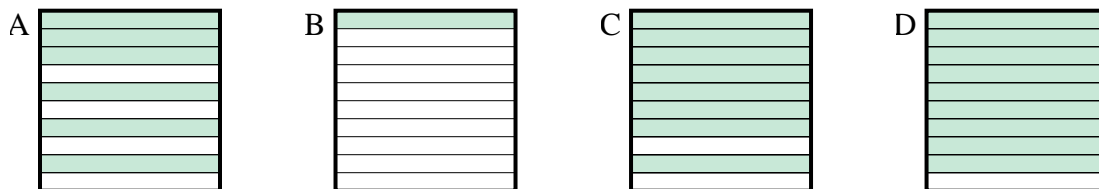
4. \_\_\_\_\_

5) Which  $10 \times 10$  grid is shaded to represent the decimal number that, when added to 0.06, results in a total of 1.00?



5. \_\_\_\_\_

6) Which  $10 \times 1$  grid is shaded to represent the decimal number that, when added to 0.9, results in a total of 1.00?

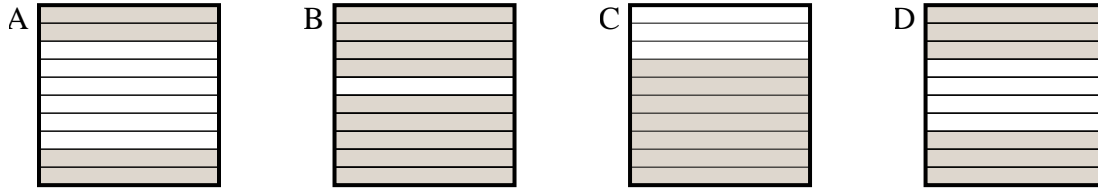


6. \_\_\_\_\_

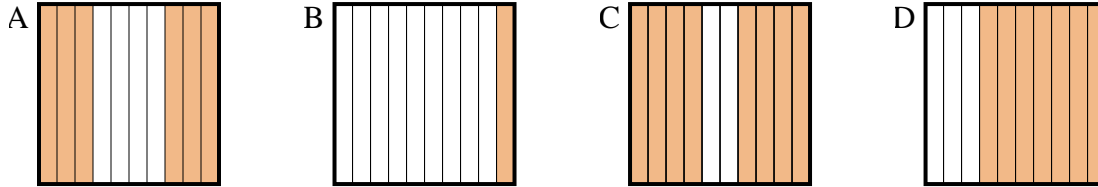


Determine which letter best answer the question.

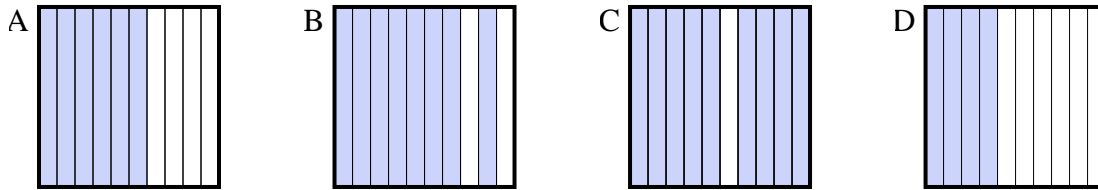
1) Which  $10 \times 1$  grid is shaded to represent the decimal number that, when added to 0.3, results in a total of 1.00?



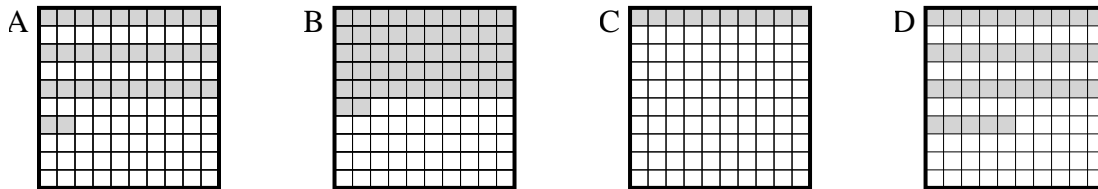
2) Which  $10 \times 1$  grid is shaded to represent the decimal number that, when added to 0.4, results in a total of 1.00?



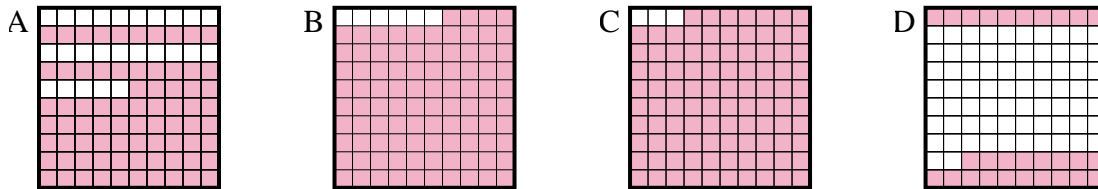
3) Which  $10 \times 1$  grid is shaded to represent the decimal number that, when added to 0.6, results in a total of 1.00?



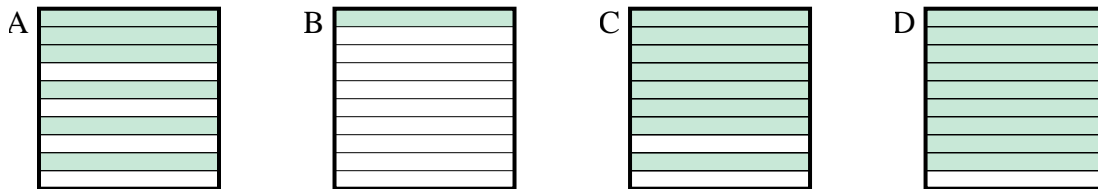
4) Which  $10 \times 10$  grid is shaded to represent the decimal number that, when added to 0.65, results in a total of 1.00?



5) Which  $10 \times 10$  grid is shaded to represent the decimal number that, when added to 0.06, results in a total of 1.00?



6) Which  $10 \times 1$  grid is shaded to represent the decimal number that, when added to 0.9, results in a total of 1.00?



Answers

1. **C**

2. **A**

3. **D**

4. **D**

5. **B**

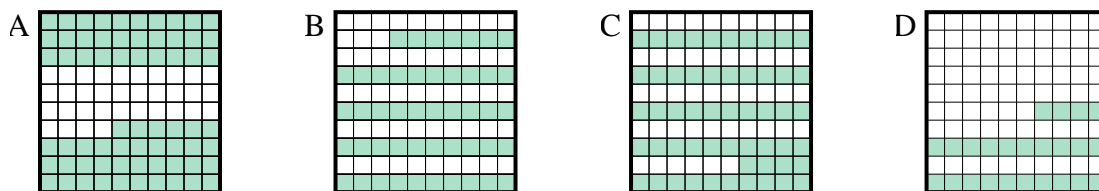
6. **B**



Determine which letter best answer the question.

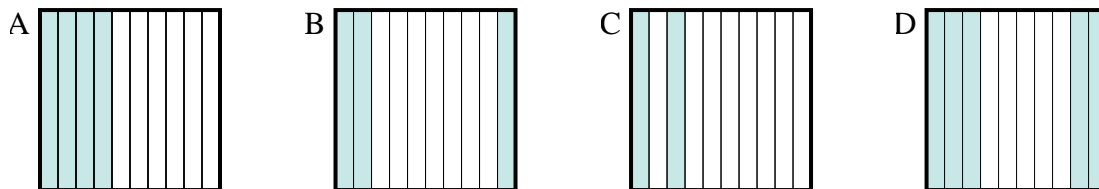
Answers

1) Which  $10 \times 10$  grid is shaded to represent the decimal number that, when added to 0.76, results in a total of 1.00?



1. \_\_\_\_\_

2) Which  $10 \times 1$  grid is shaded to represent the decimal number that, when added to 0.5, results in a total of 1.00?



2. \_\_\_\_\_

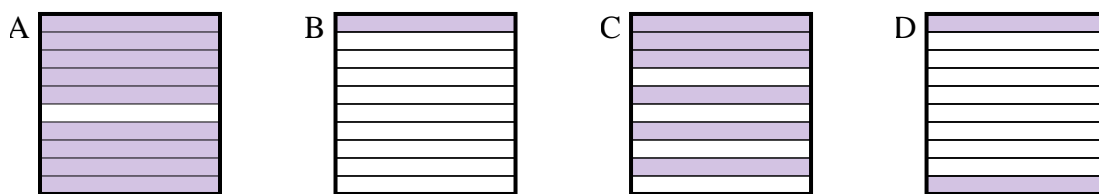
3. \_\_\_\_\_

4. \_\_\_\_\_

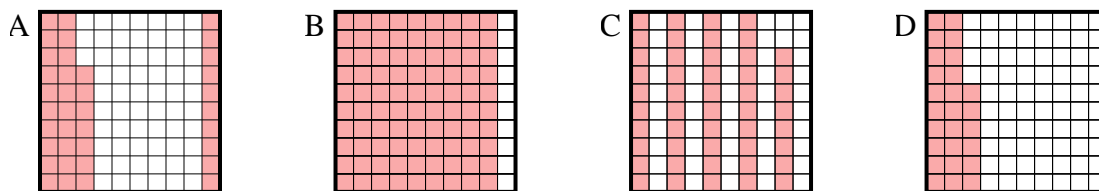
5. \_\_\_\_\_

6. \_\_\_\_\_

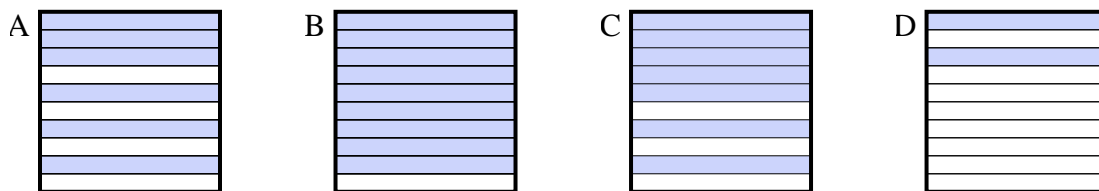
3) Which  $10 \times 1$  grid is shaded to represent the decimal number that, when added to 0.1, results in a total of 1.00?



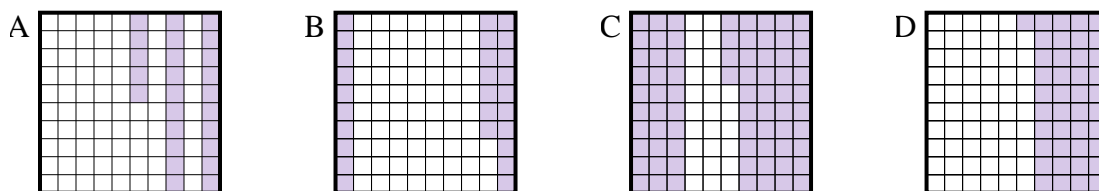
4) Which  $10 \times 10$  grid is shaded to represent the decimal number that, when added to 0.63, results in a total of 1.00?



5) Which  $10 \times 1$  grid is shaded to represent the decimal number that, when added to 0.3, results in a total of 1.00?



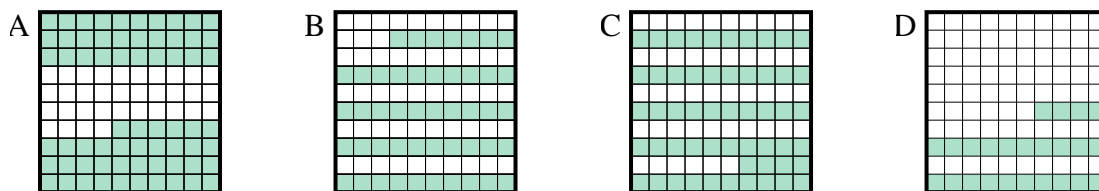
6) Which  $10 \times 10$  grid is shaded to represent the decimal number that, when added to 0.75, results in a total of 1.00?



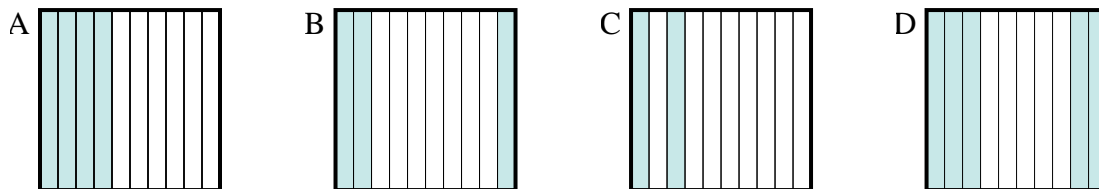


Determine which letter best answer the question.

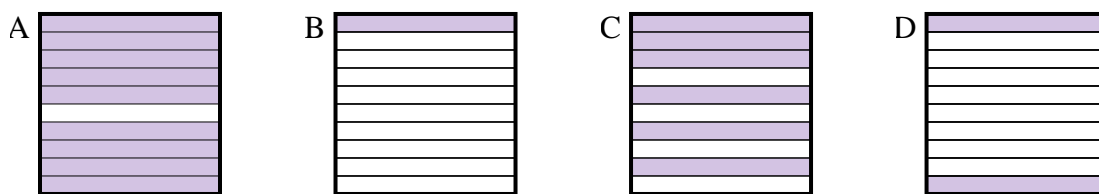
1) Which  $10 \times 10$  grid is shaded to represent the decimal number that, when added to 0.76, results in a total of 1.00?



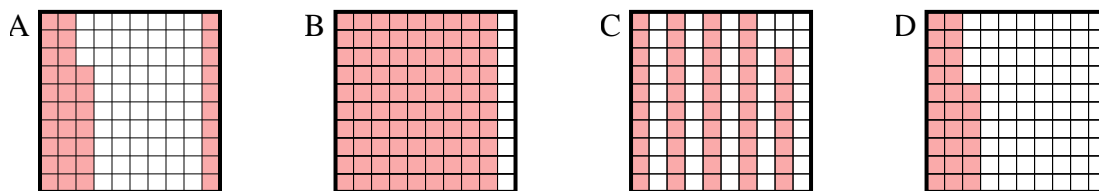
2) Which  $10 \times 1$  grid is shaded to represent the decimal number that, when added to 0.5, results in a total of 1.00?



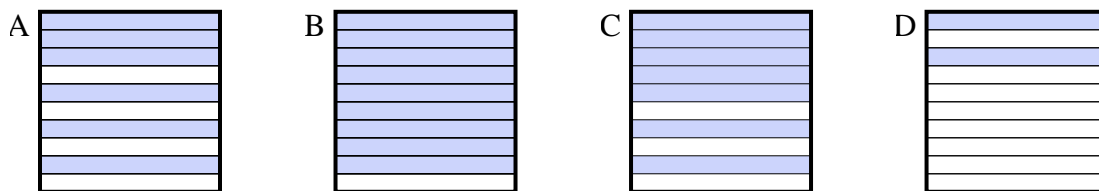
3) Which  $10 \times 1$  grid is shaded to represent the decimal number that, when added to 0.1, results in a total of 1.00?



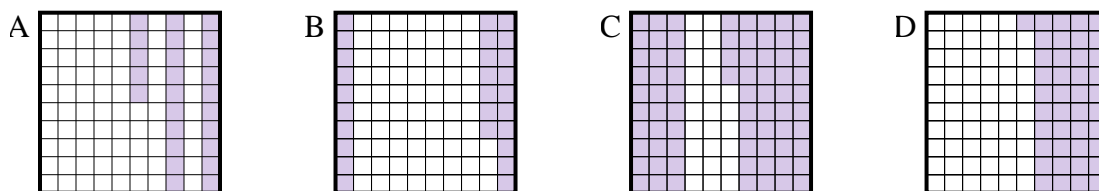
4) Which  $10 \times 10$  grid is shaded to represent the decimal number that, when added to 0.63, results in a total of 1.00?



5) Which  $10 \times 1$  grid is shaded to represent the decimal number that, when added to 0.3, results in a total of 1.00?



6) Which  $10 \times 10$  grid is shaded to represent the decimal number that, when added to 0.75, results in a total of 1.00?



Answers

1. **D**

2. **D**

3. **A**

4. **A**

5. **C**

6. **A**

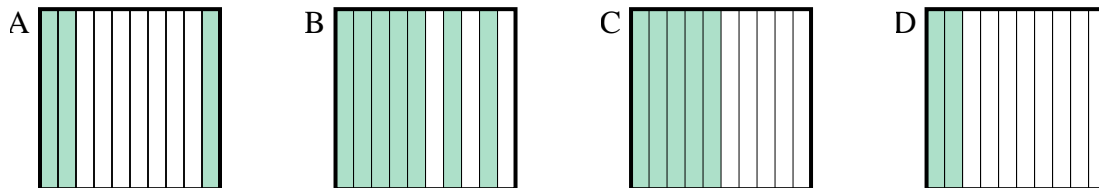




Determine which letter best answer the question.

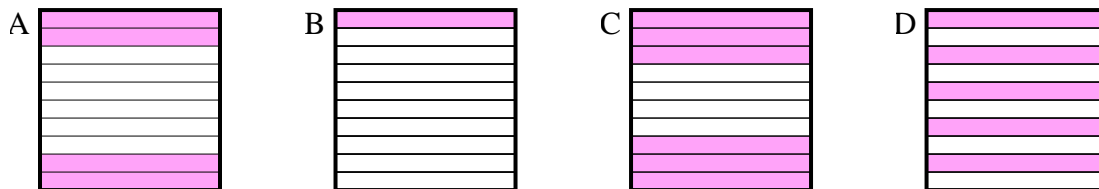
Answers

1) Which  $10 \times 1$  grid is shaded to represent the decimal number that, when added to 0.5, results in a total of 1.00?



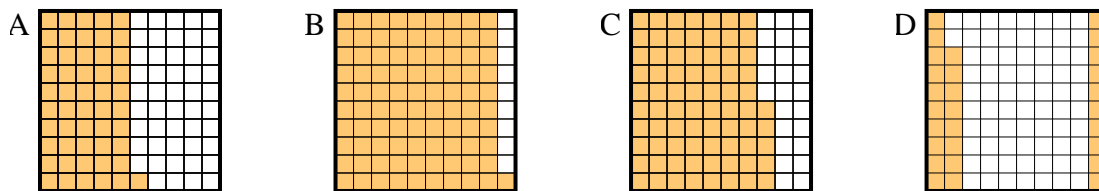
1. \_\_\_\_\_  
 2. \_\_\_\_\_  
 3. \_\_\_\_\_

2) Which  $10 \times 1$  grid is shaded to represent the decimal number that, when added to 0.6, results in a total of 1.00?

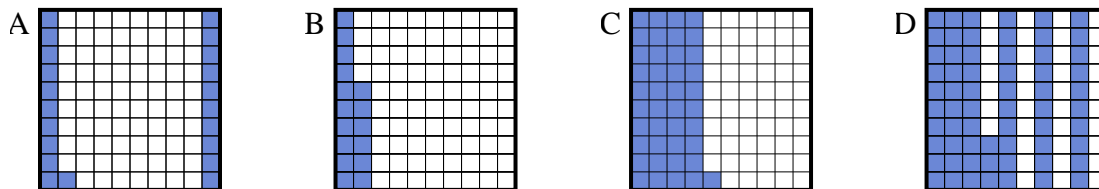


4. \_\_\_\_\_  
 5. \_\_\_\_\_  
 6. \_\_\_\_\_

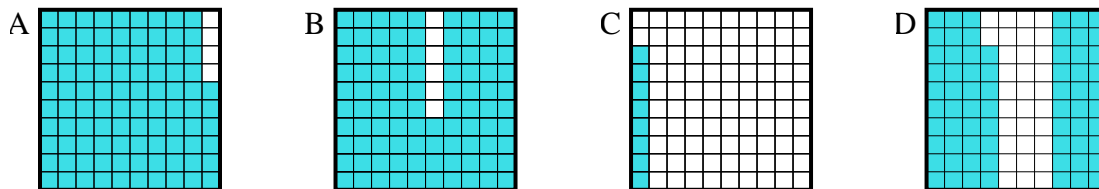
3) Which  $10 \times 10$  grid is shaded to represent the decimal number that, when added to 0.72, results in a total of 1.00?



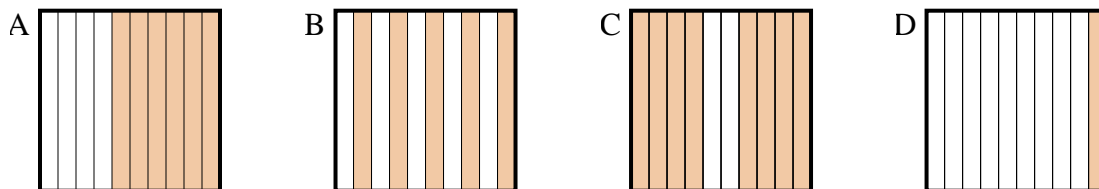
4) Which  $10 \times 10$  grid is shaded to represent the decimal number that, when added to 0.59, results in a total of 1.00?



5) Which  $10 \times 10$  grid is shaded to represent the decimal number that, when added to 0.32, results in a total of 1.00?



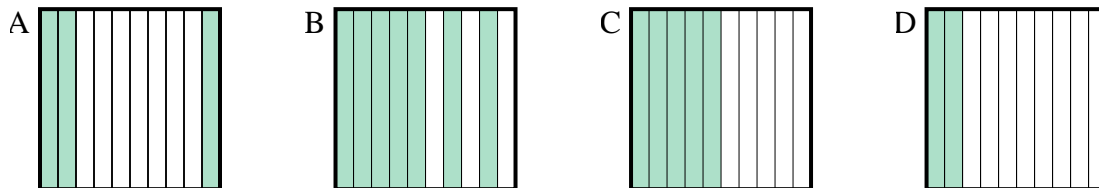
6) Which  $10 \times 1$  grid is shaded to represent the decimal number that, when added to 0.4, results in a total of 1.00?



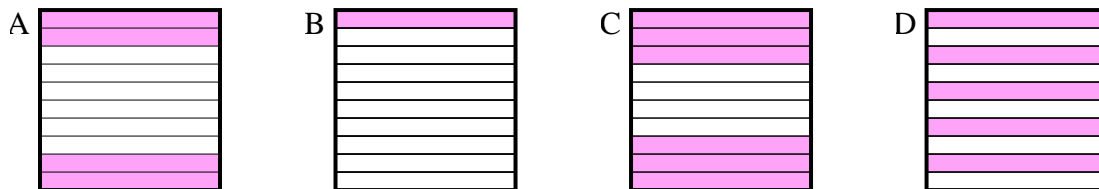


Determine which letter best answer the question.

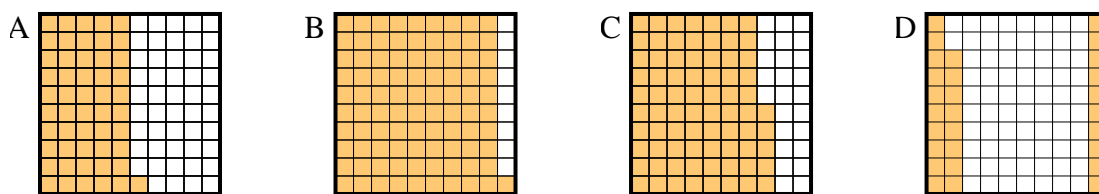
1) Which  $10 \times 1$  grid is shaded to represent the decimal number that, when added to 0.5, results in a total of 1.00?



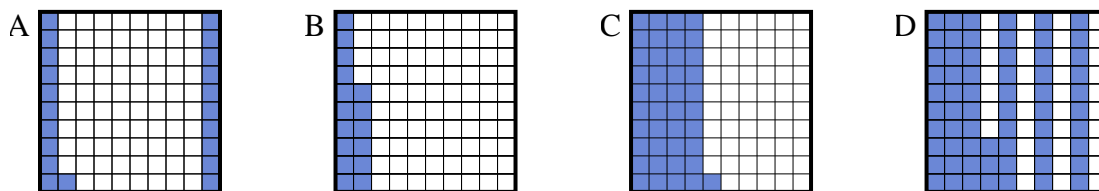
2) Which  $10 \times 1$  grid is shaded to represent the decimal number that, when added to 0.6, results in a total of 1.00?



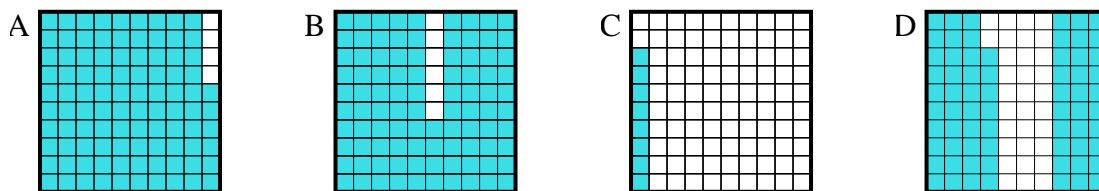
3) Which  $10 \times 10$  grid is shaded to represent the decimal number that, when added to 0.72, results in a total of 1.00?



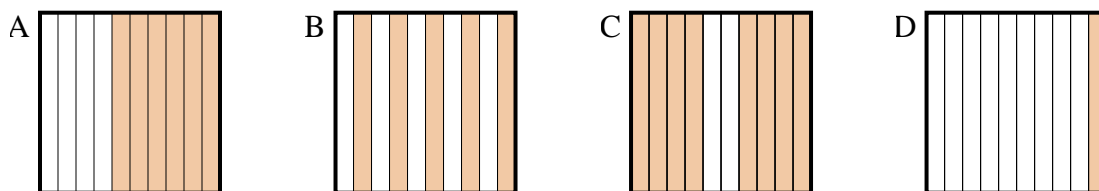
4) Which  $10 \times 10$  grid is shaded to represent the decimal number that, when added to 0.59, results in a total of 1.00?



5) Which  $10 \times 10$  grid is shaded to represent the decimal number that, when added to 0.32, results in a total of 1.00?



6) Which  $10 \times 1$  grid is shaded to represent the decimal number that, when added to 0.4, results in a total of 1.00?



Answers

1.     **C**    

2.     **A**    

3.     **D**    

4.     **C**    

5.     **D**    

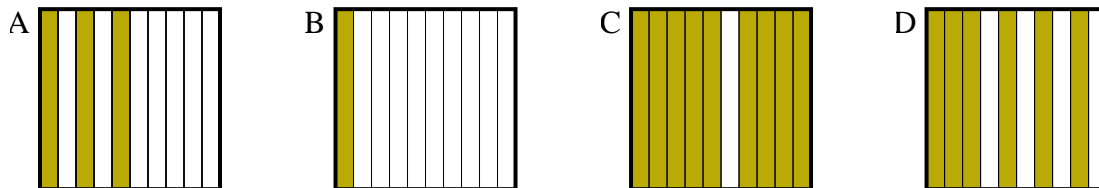
6.     **A**



Determine which letter best answer the question.

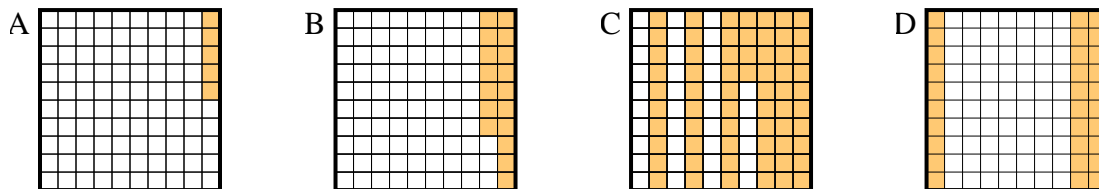
Answers

1) Which  $10 \times 1$  grid is shaded to represent the decimal number that, when added to 0.9, results in a total of 1.00?



1. \_\_\_\_\_

2) Which  $10 \times 10$  grid is shaded to represent the decimal number that, when added to 0.7, results in a total of 1.00?

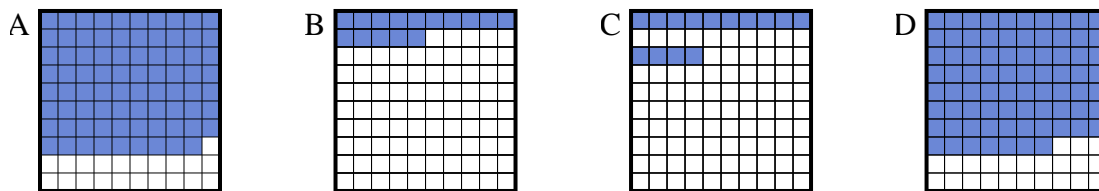


2. \_\_\_\_\_

3. \_\_\_\_\_

4. \_\_\_\_\_

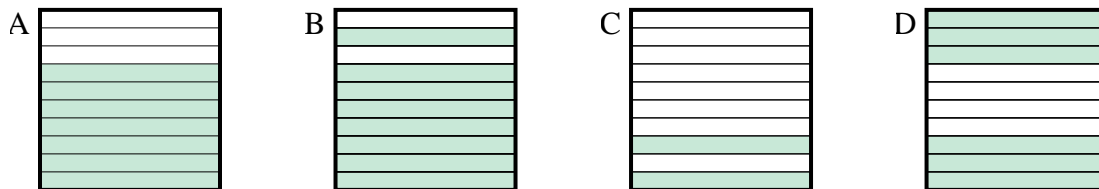
3) Which  $10 \times 10$  grid is shaded to represent the decimal number that, when added to 0.21, results in a total of 1.00?



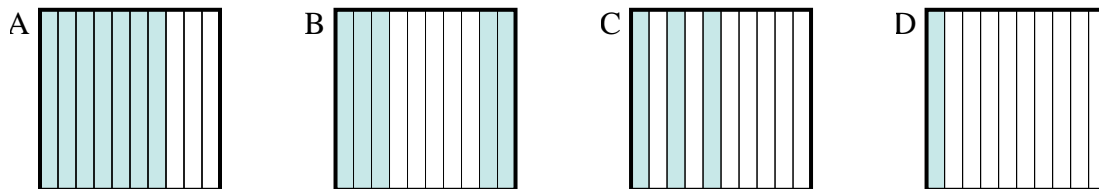
5. \_\_\_\_\_

6. \_\_\_\_\_

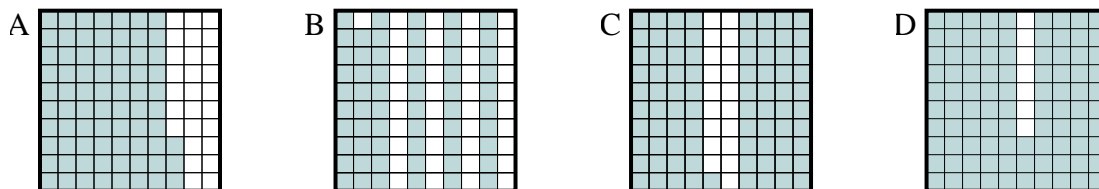
4) Which  $10 \times 1$  grid is shaded to represent the decimal number that, when added to 0.3, results in a total of 1.00?



5) Which  $10 \times 1$  grid is shaded to represent the decimal number that, when added to 0.5, results in a total of 1.00?



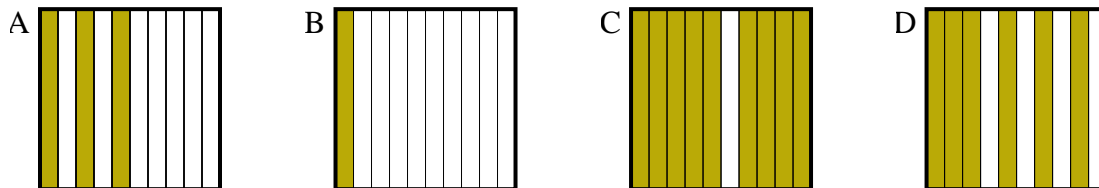
6) Which  $10 \times 10$  grid is shaded to represent the decimal number that, when added to 0.07, results in a total of 1.00?



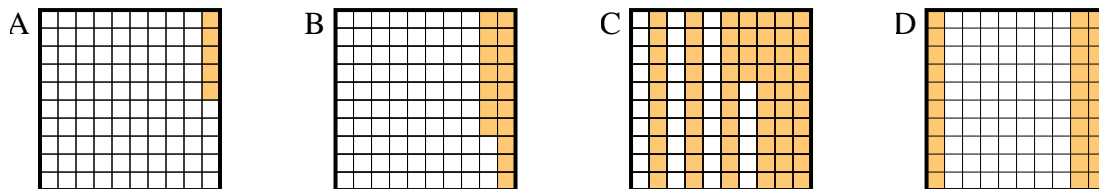


Determine which letter best answer the question.

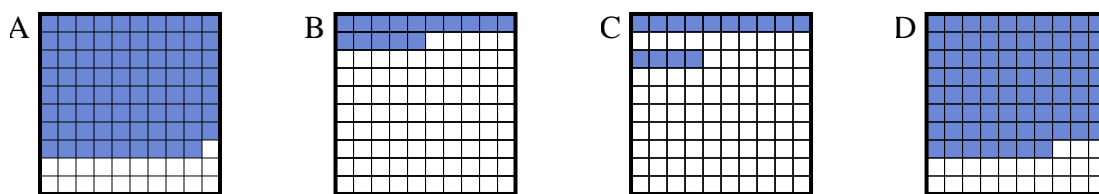
1) Which  $10 \times 1$  grid is shaded to represent the decimal number that, when added to 0.9, results in a total of 1.00?



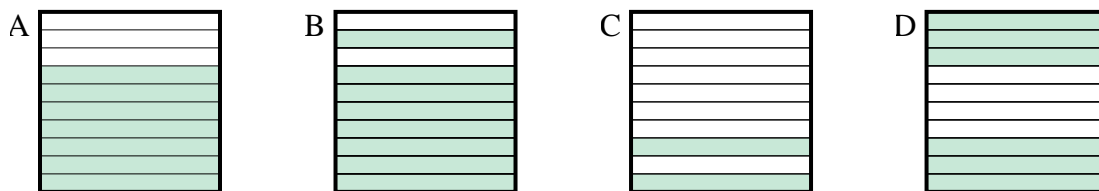
2) Which  $10 \times 10$  grid is shaded to represent the decimal number that, when added to 0.7, results in a total of 1.00?



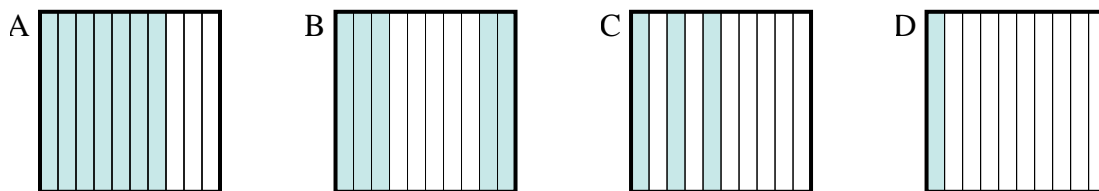
3) Which  $10 \times 10$  grid is shaded to represent the decimal number that, when added to 0.21, results in a total of 1.00?



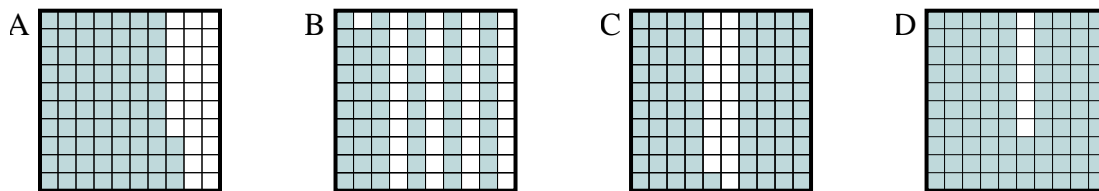
4) Which  $10 \times 1$  grid is shaded to represent the decimal number that, when added to 0.3, results in a total of 1.00?



5) Which  $10 \times 1$  grid is shaded to represent the decimal number that, when added to 0.5, results in a total of 1.00?



6) Which  $10 \times 10$  grid is shaded to represent the decimal number that, when added to 0.07, results in a total of 1.00?



Answers

1.     **B**    

2.     **D**    

3.     **A**    

4.     **A**    

5.     **B**    

6.     **D**