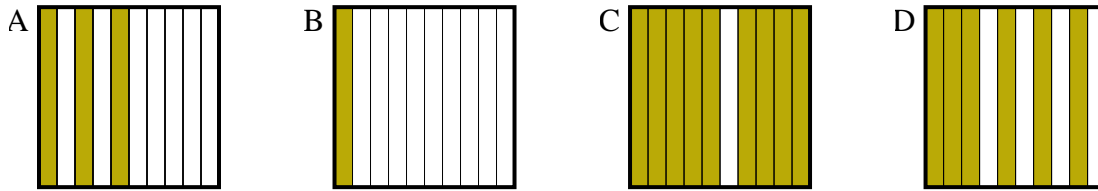




Determine which letter best answer the question.

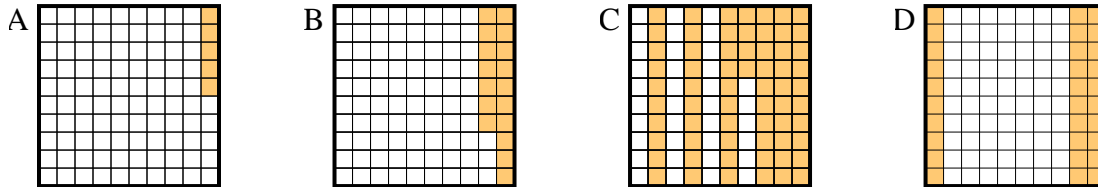
Answers

1) Which  $10 \times 1$  grid is shaded to represent the decimal number that, when added to 0.9, results in a total of 1.00?



1. \_\_\_\_\_

2) Which  $10 \times 10$  grid is shaded to represent the decimal number that, when added to 0.7, results in a total of 1.00?

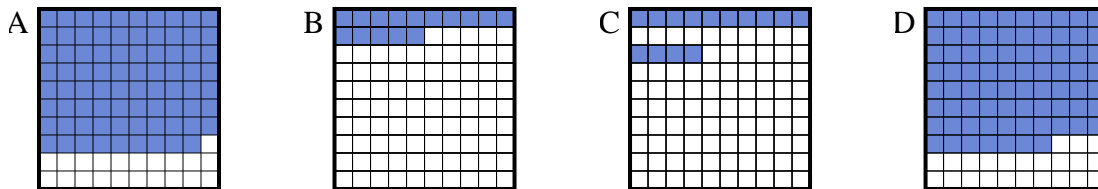


2. \_\_\_\_\_

3. \_\_\_\_\_

4. \_\_\_\_\_

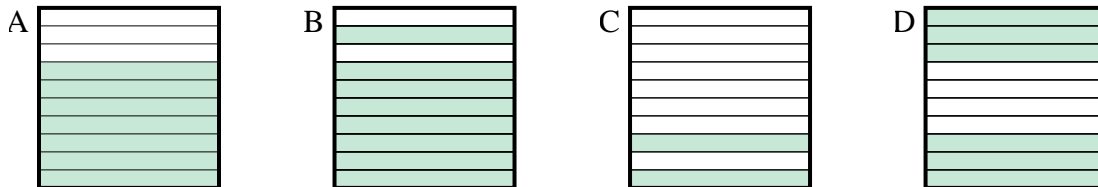
3) Which  $10 \times 10$  grid is shaded to represent the decimal number that, when added to 0.21, results in a total of 1.00?



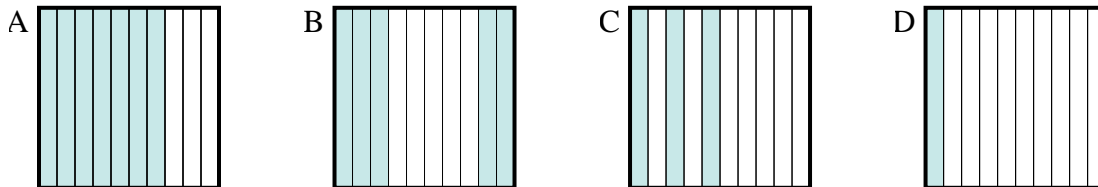
5. \_\_\_\_\_

6. \_\_\_\_\_

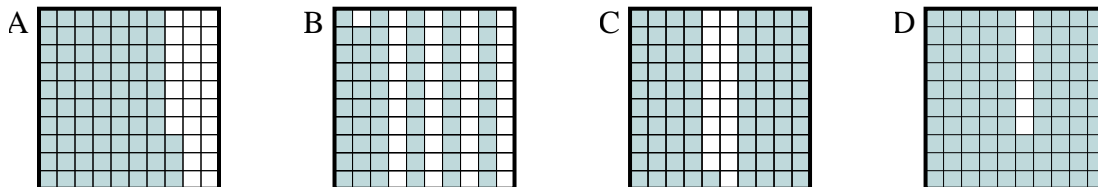
4) Which  $10 \times 1$  grid is shaded to represent the decimal number that, when added to 0.3, results in a total of 1.00?



5) Which  $10 \times 1$  grid is shaded to represent the decimal number that, when added to 0.5, results in a total of 1.00?



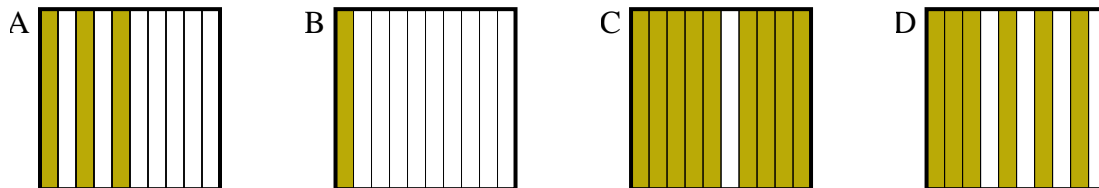
6) Which  $10 \times 10$  grid is shaded to represent the decimal number that, when added to 0.07, results in a total of 1.00?



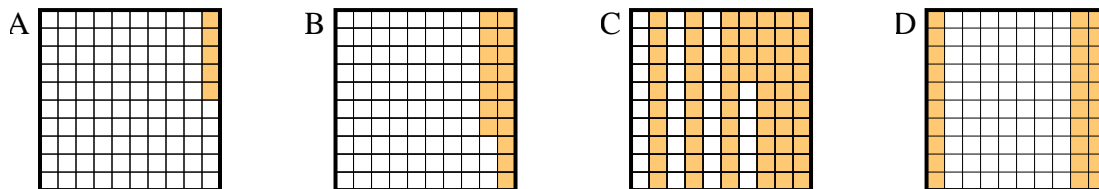


Determine which letter best answer the question.

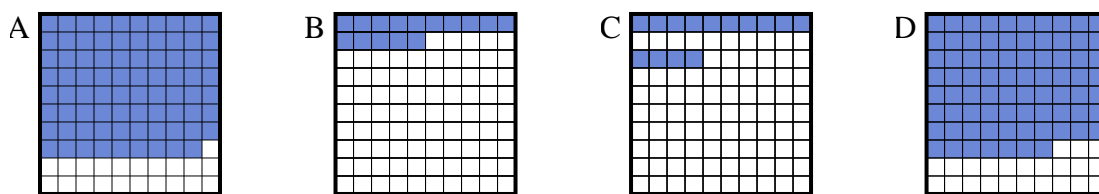
1) Which  $10 \times 1$  grid is shaded to represent the decimal number that, when added to 0.9, results in a total of 1.00?



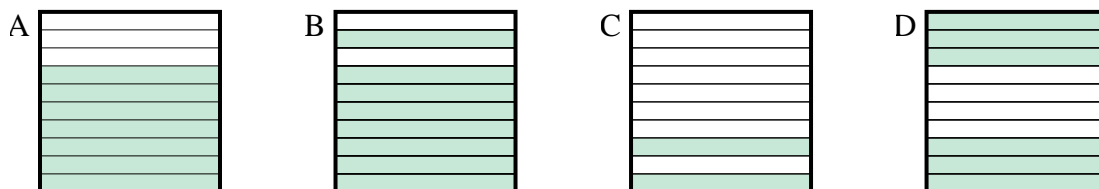
2) Which  $10 \times 10$  grid is shaded to represent the decimal number that, when added to 0.7, results in a total of 1.00?



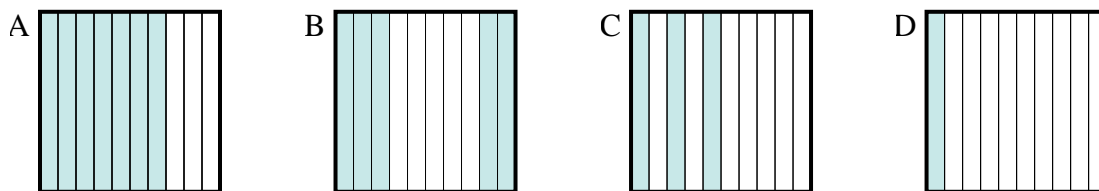
3) Which  $10 \times 10$  grid is shaded to represent the decimal number that, when added to 0.21, results in a total of 1.00?



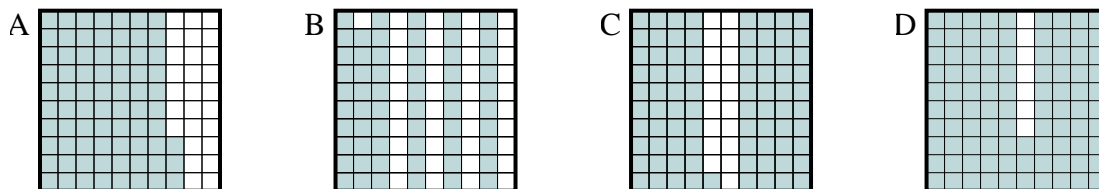
4) Which  $10 \times 1$  grid is shaded to represent the decimal number that, when added to 0.3, results in a total of 1.00?



5) Which  $10 \times 1$  grid is shaded to represent the decimal number that, when added to 0.5, results in a total of 1.00?



6) Which  $10 \times 10$  grid is shaded to represent the decimal number that, when added to 0.07, results in a total of 1.00?



Answers

1. **B**

2. **D**

3. **A**

4. **A**

5. **B**

6. **D**