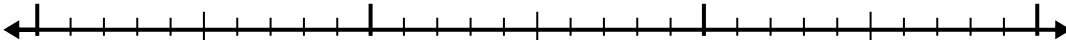


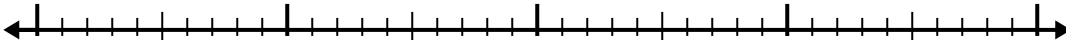


Use the number line to solve each problem.

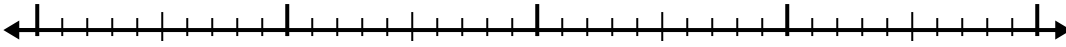
1) $7.9 + 1.4 =$



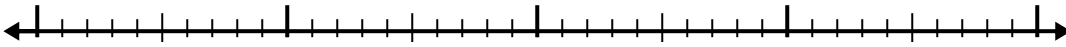
2) $3.7 + 2.2 =$



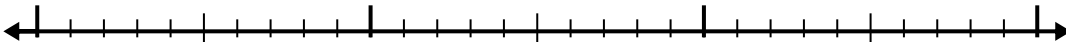
3) $8.3 + 2.6 =$



4) $1 + 2.1 =$




5) $5.6 + 1.9 =$



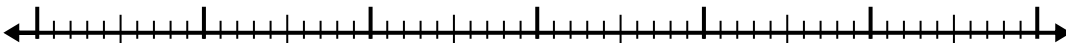
6) $6.2 + 3.5 =$



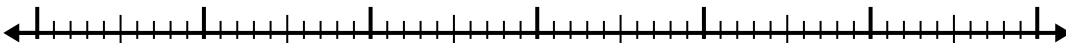
7) $1.8 + 1.3 =$



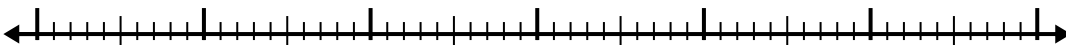
8) $3 + 3.5 =$



9) $4.7 + 3.4 =$



10) $6.6 + 3.3 =$



Answers

1. _____

2. _____

3. _____

4. _____

5. _____

6. _____

7. _____

8. _____

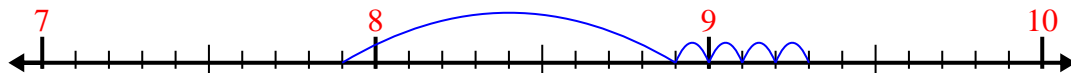
9. _____

10. _____

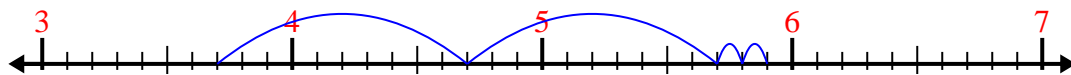


Use the number line to solve each problem.

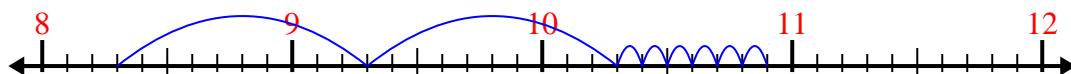
1) $7.9 + 1.4 =$



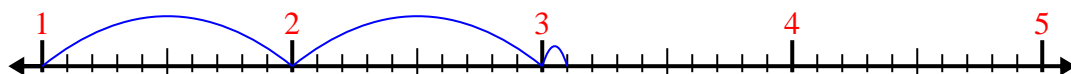
2) $3.7 + 2.2 =$



3) $8.3 + 2.6 =$



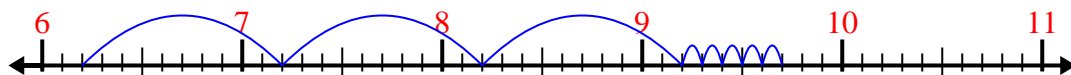
4) $1 + 2.1 =$



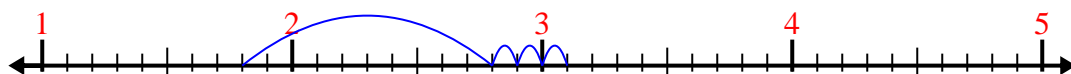
5) $5.6 + 1.9 =$



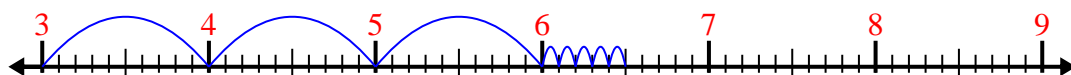
6) $6.2 + 3.5 =$



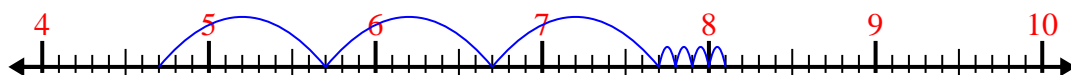
7) $1.8 + 1.3 =$



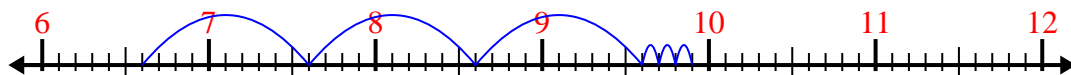
8) $3 + 3.5 =$



9) $4.7 + 3.4 =$



10) $6.6 + 3.3 =$



Answers

1. 9.3

2. 5.9

3. 10.9

4. 3.1

5. 7.5

6. 9.7

7. 3.1

8. 6.5

9. 8.1

10. 9.9