




Determine which letter best represents the volume.

Milliliter

A milliliter is equal to about 20 drops of water.



Liter

Many large soda bottles are either 1 or 2 liters.


1 Liter = 1,000 Milliliters



Answers

1. _____
2. _____
3. _____
4. _____
5. _____
6. _____
7. _____
8. _____
9. _____

1)



Liquid in a pitcher

- A. 5 liters
- B. 20 milliliters
- C. 1 liter
- D. 500 milliliters

2)



Flour in a pan of brownies

- A. 3 liters
- B. 0.5 liters
- C. 10 milliliters
- D. 16 liters


3)



Liquid in a tea cup

- A. 2 milliliters
- B. 2 liters
- C. 250 milliliters
- D. 5 liters


4)



Eyedropper holds

- A. 1000 milliliters
- B. 2 liters
- C. 500 milliliters
- D. 2 milliliters

5)



Sand a wheel barrow holds

- A. 50 milliliters
- B. 500 milliliters
- C. 3 liters
- D. 170 liters

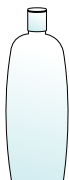
6)



Measuring Cup

- A. 1 liter
- B. 237 liters
- C. 50 milliliters
- D. 237 milliliters


7)



Shampoo in a bottle

- A. 1 milliliter
- B. 20 milliliters
- C. 1.5 liters
- D. 20 liters

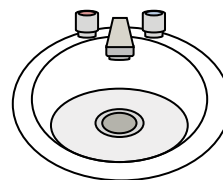
8)



Gas tank in a car

- A. 60 liters
- B. 15 milliliters
- C. 70 milliliters
- D. 3 liters

9)



Water in bathroom sink


- A. 10 milliliters
- B. 2 liters
- C. 500 milliliters
- D. 7.5 liters



Determine which letter best represents the volume.

Milliliter

A milliliter is equal to about 20 drops of water.




Liter


Many large soda bottles are either 1 or 2 liters.


1 Liter = 1,000 Milliliters





Answers


1) 
Liquid in a pitcher
A. 5 liters
B. 20 milliliters
C. 1 liter
D. 500 milliliters

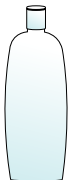
2) 
Flour in a pan of brownies
A. 3 liters
B. 0.5 liters
C. 10 milliliters
D. 16 liters


3) 
Liquid in a tea cup
A. 2 milliliters
B. 2 liters
C. 250 milliliters
D. 5 liters

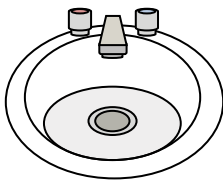
4) 
Eyedropper holds
A. 1000 milliliters
B. 2 liters
C. 500 milliliters
D. 2 milliliters

5) 
Sand a wheel barrow holds
A. 50 milliliters
B. 500 milliliters
C. 3 liters
D. 170 liters

6) 
Measuring Cup
A. 1 liter
B. 237 liters
C. 50 milliliters
D. 237 milliliters

7) 
Shampoo in a bottle
A. 1 milliliter
B. 20 milliliters
C. 1.5 liters
D. 20 liters

8) 
Gas tank in a car
A. 60 liters
B. 15 milliliters
C. 70 milliliters
D. 3 liters

9) 
Water in bathroom sink
A. 10 milliliters
B. 2 liters
C. 500 milliliters
D. 7.5 liters

- 1. **A**
- 2. **B**
- 3. **C**
- 4. **D**
- 5. **D**
- 6. **D**
- 7. **C**
- 8. **A**
- 9. **D**