



Determine which letter best represents the volume.

Answers

**Cup**

A cup is about the amount of milk you get from the cafeteria.

**Pint**

A pint is about the amount you get in a large glass.

1 pint = 2 cups

**Quart**

A quart is about the amount you get in a large milk container.

1 quart = 2 pints

**Gallon**

A gallon is the amount that comes in the large plastic container.

1 gallon = 4 quarts




1)



Measuring Cup

- A. 1 pint
- B. 1 gallon
- C. 1 cup
- D. 1 quart

2)



Water a barrel holds

- A. 20 cups
- B. 10 pints
- C. 50 gallons
- D. 3 inches

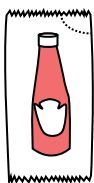
3)



Liquid a spoon holds

- A. 1 pint
- B. 1 quart
- C. Less than a cup
- D. 1 cup

4)



Ketchup in a packet

- A. less than 1 cup
- B. 2 quarts
- C. 0.5 gallons
- D. 1.5 pints

5)



2 liter of Soda

- A. 1 pint
- B. 0.5 gallons
- C. 5 gallons
- D. 2 cups


6)



Cereal Bowl

- A. 0.5 gallons
- B. 2 gallons
- C. 4 pints
- D. 1 pint


7)



Shampoo in a bottle

- A. 0.5 gallons
- B. 100 cups
- C. 1 cup
- D. 2 pints


8)



Eyedropper holds

- A. less than 1 cup
- B. 1 pint
- C. 3 gallons
- D. 1 cup

9)



Gas tank in a car

- A. 15 gallons
- B. 4 pints
- C. 3 quarts
- D. 16 cups

- 1. \_\_\_\_\_
- 2. \_\_\_\_\_
- 3. \_\_\_\_\_
- 4. \_\_\_\_\_
- 5. \_\_\_\_\_
- 6. \_\_\_\_\_
- 7. \_\_\_\_\_
- 8. \_\_\_\_\_
- 9. \_\_\_\_\_



Determine which letter best represents the volume.

**Cup**

A cup is about the amount of milk you get from the cafeteria.

**Pint**

A pint is about the amount you get in a large glass.

1 pint = 2 cups

**Quart**

A quart is about the amount you get in a large milk container.

1 quart = 2 pints

**Gallon**

A gallon is the amount that comes in the large plastic container.

1 gallon = 4 quarts



**Answers**

1. **C**

2. **C**

3. **C**

4. **A**

5. **B**

6. **D**

7. **D**

8. **A**

9. **A**


1)



Measuring Cup

- A. 1 pint
- B. 1 gallon
- C. 1 cup
- D. 1 quart

2)



Water a barrel holds

- A. 20 cups
- B. 10 pints
- C. 50 gallons
- D. 3 inches

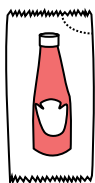
3)



Liquid a spoon holds

- A. 1 pint
- B. 1 quart
- C. Less than a cup
- D. 1 cup

4)



Ketchup in a packet

- A. less than 1 cup
- B. 2 quarts
- C. 0.5 gallons
- D. 1.5 pints


5)



2 liter of Soda

- A. 1 pint
- B. 0.5 gallons
- C. 5 gallons
- D. 2 cups

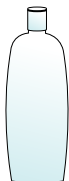
6)



Cereal Bowl

- A. 0.5 gallons
- B. 2 gallons
- C. 4 pints
- D. 1 pint


7)



Shampoo in a bottle

- A. 0.5 gallons
- B. 100 cups
- C. 1 cup
- D. 2 pints


8)



Eyedropper holds

- A. less than 1 cup
- B. 1 pint
- C. 3 gallons
- D. 1 cup

9)



Gas tank in a car

- A. 15 gallons
- B. 4 pints
- C. 3 quarts
- D. 16 cups