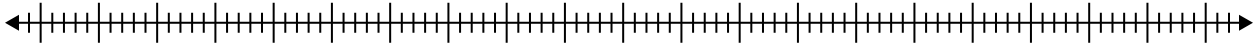


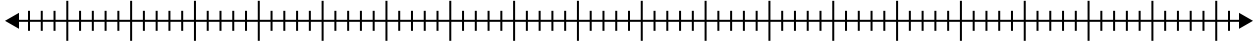


Create a box plot from the set of numbers.

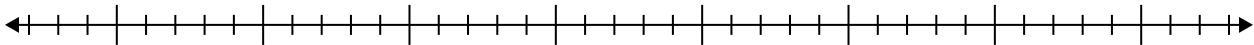
- 1) 65 , 50 , 89 , 99 , 61 , 70 , 21 , 35 , 89 , 49 , 45



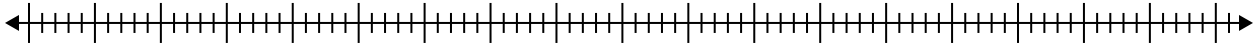
- 2) 40 , 44 , 74 , 28 , 79 , 97 , 83 , 55 , 33 , 85 , 40 , 81



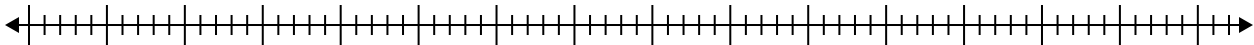
- 3) 7 , 17 , 20 , 8 , 17 , 11 , 6 , 11



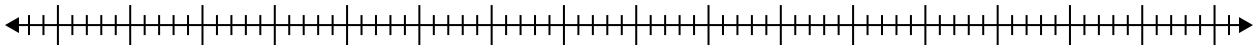
- 4) 66 , 35 , 87 , 66 , 96 , 54 , 85 , 67 , 53



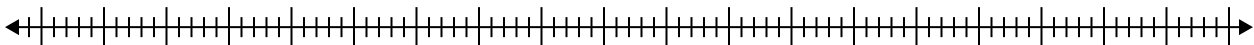
- 5) 86 , 59 , 75 , 46 , 83 , 29 , 70 , 35 , 31 , 22 , 64 , 82



- 6) 97 , 93 , 30 , 61 , 68 , 83 , 60



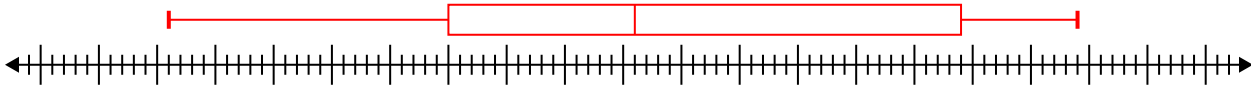
- 7) 62 , 30 , 97 , 38 , 65 , 67 , 21 , 25



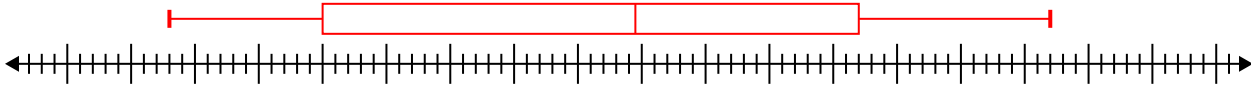


Create a box plot from the set of numbers.

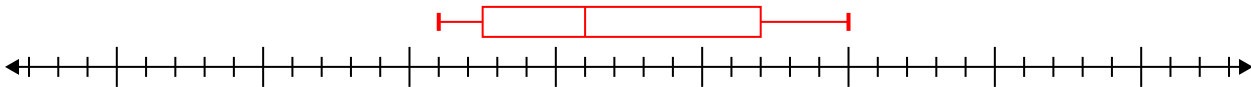
- 1) 65, 50, 89, 99, 61, 70, 21, 35, 89, 49, 45 **Min=21 Max=99 q1=45 Q2=61 q3=89**



- 2) 40, 44, 74, 28, 79, 97, 83, 55, 33, 85, 40, 81 **Min=28 Max=97 q1=40 Q2=64.5 q3=82**



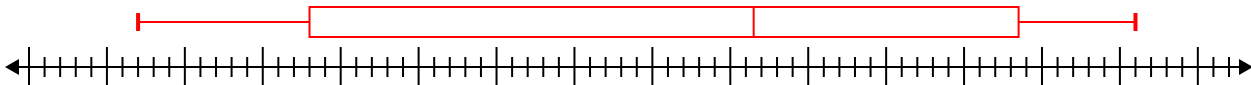
- 3) 7, 17, 20, 8, 17, 11, 6, 11 **Min=6 Max=20 q1=7.5 Q2=11 q3=17**



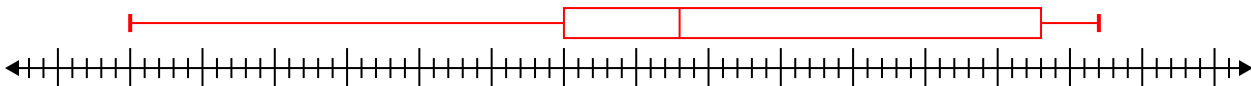
- 4) 66, 35, 87, 66, 96, 54, 85, 67, 53 **Min=35 Max=96 q1=53.5 Q2=66 q3=86**



- 5) 86, 59, 75, 46, 83, 29, 70, 35, 31, 22, 64, 82 **Min=22 Max=86 q1=33 Q2=61.5 q3=78.5**



- 6) 97, 93, 30, 61, 68, 83, 60 **Min=30 Max=97 q1=60 Q2=68 q3=93**



- 7) 62, 30, 97, 38, 65, 67, 21, 25 **Min=21 Max=97 q1=27.5 Q2=50 q3=66**

