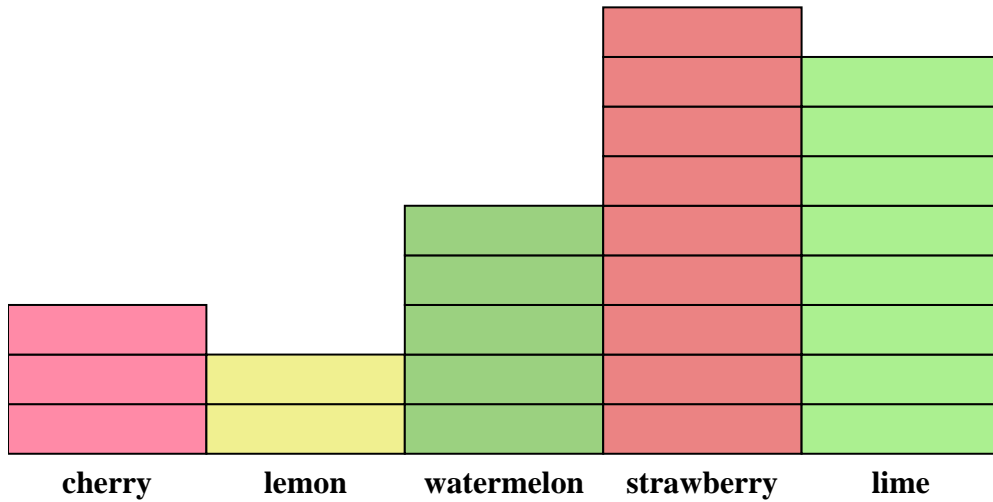




Solve each problem.



Each  = 2 pieces

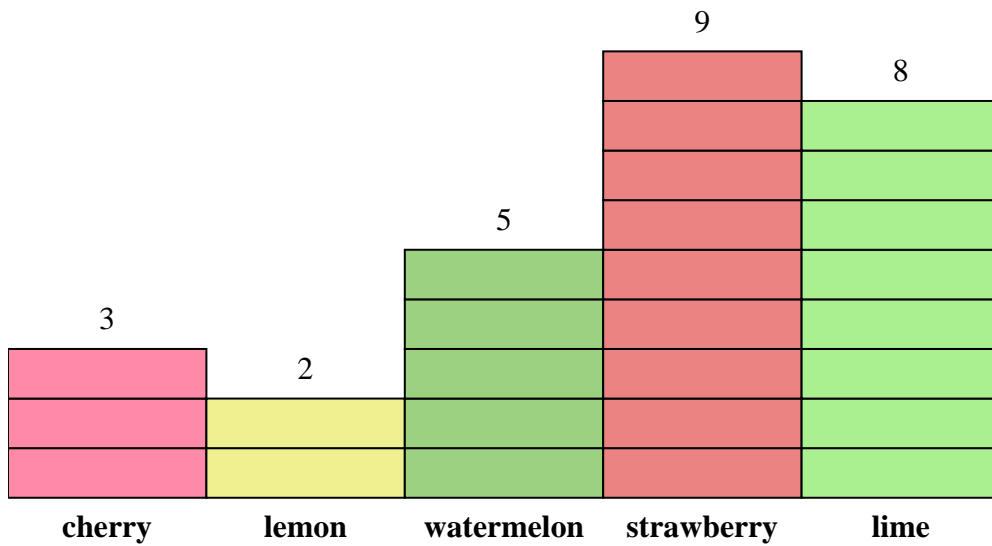
Answers

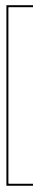
1. _____
2. _____
3. _____
4. _____
5. _____
6. _____
7. _____
8. _____
9. _____
10. _____

- 1) How many more lime pieces were there than lemon pieces?
- 2) Which flavor had the most pieces in the bag?
- 3) Which flavor had the fewest pieces in the bag?
- 4) How many pieces were there total in the box?
- 5) Were there fewer strawberry pieces or lime pieces?
- 6) Were there more lime pieces or cherry pieces?
- 7) Which flavor had exactly 16 pieces in the bag?
- 8) How many pieces were strawberry?
- 9) What is the combined number of watermelon and lime pieces?
- 10) What is the difference in the number of watermelon pieces and the number of cherry pieces?



Solve each problem.



Each  = 2 pieces

Answers

- 1) How many more lime pieces were there than lemon pieces?
- 2) Which flavor had the most pieces in the bag?
- 3) Which flavor had the fewest pieces in the bag?
- 4) How many pieces were there total in the box?
- 5) Were there fewer strawberry pieces or lime pieces?
- 6) Were there more lime pieces or cherry pieces?
- 7) Which flavor had exactly 16 pieces in the bag?
- 8) How many pieces were strawberry?
- 9) What is the combined number of watermelon and lime pieces?
- 10) What is the difference in the number of watermelon pieces and the number of cherry pieces?

1. 12
2. strawberry
3. lemon
4. 54
5. lime
6. lime
7. lime
8. 18
9. 26
10. 4