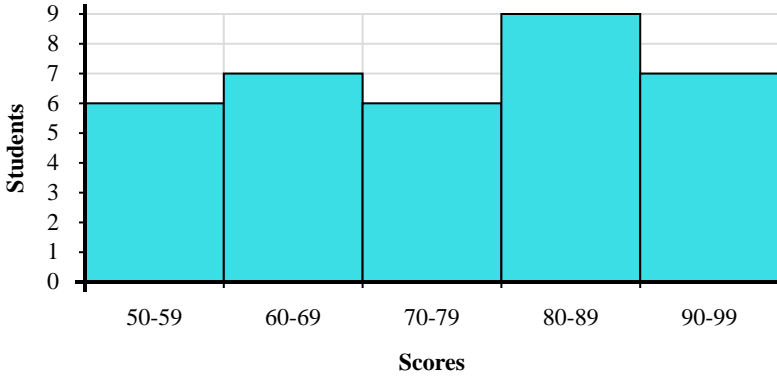




Use the histograms shown to answer each question.



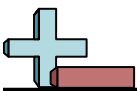
- 1) How many students received between 0 and 2 gifts?
- 2) How many students are represented in this histogram?
- 3) If a student received 6 gifts which bar would they be added to?
- 4) Most students received between \_\_\_\_\_ and \_\_\_\_\_ gifts.



- 5) How many students are represented in this histogram?
- 6) How many students scored between a 50 and 60?
- 7) Most students scored between a \_\_\_\_\_ and \_\_\_\_\_.
- 8) If a student scored a 54 which bar would they be added to?

Answers

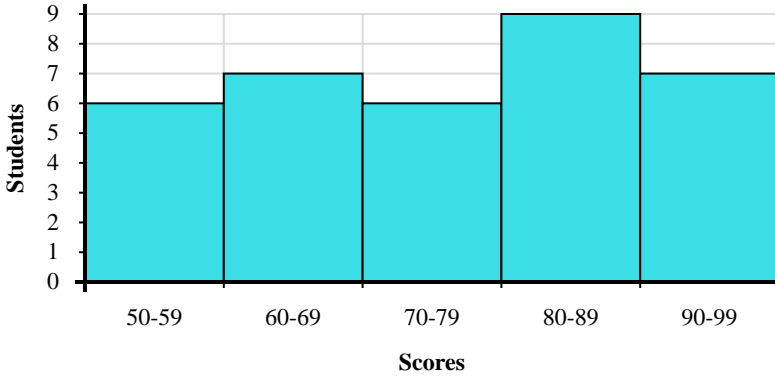
1. \_\_\_\_\_
2. \_\_\_\_\_
3. \_\_\_\_\_
4. \_\_\_\_\_
5. \_\_\_\_\_
6. \_\_\_\_\_
7. \_\_\_\_\_
8. \_\_\_\_\_



Use the histograms shown to answer each question.



- 1) How many students received between 0 and 2 gifts?
- 2) How many students are represented in this histogram?
- 3) If a student received 6 gifts which bar would they be added to?
- 4) Most students received between \_\_\_\_\_ and \_\_\_\_\_ gifts.



- 5) How many students are represented in this histogram?
- 6) How many students scored between a 50 and 60?
- 7) Most students scored between a \_\_\_\_\_ and \_\_\_\_\_.
- 8) If a student scored a 54 which bar would they be added to?

Answers

1. 2
2. 15
3. 4
4. 8 10
5. 35
6. 6
7. 80 90
8. 1