

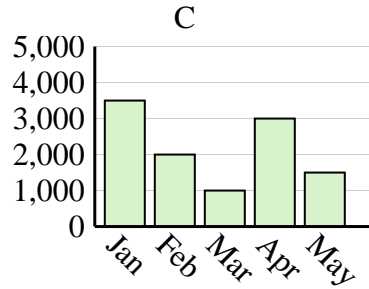
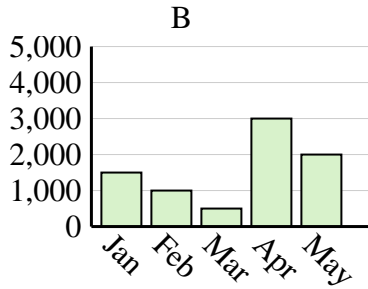
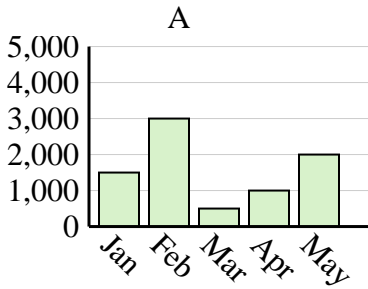


Determine which graph (A, B or C) best represents the information in the table.

Answers

1)

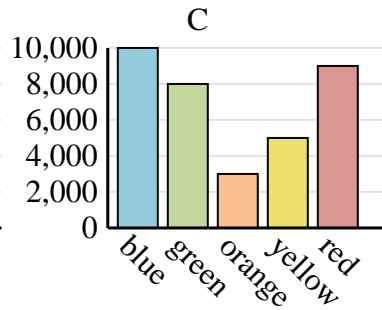
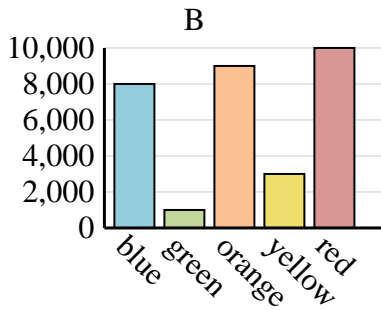
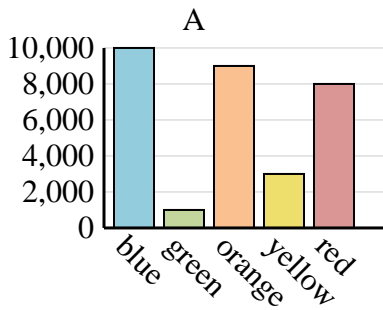
Sales	Jan	Feb	Mar	Apr	May
Month	3,500	2,000	1,000	3,000	1,500



1. _____
2. _____
3. _____
4. _____

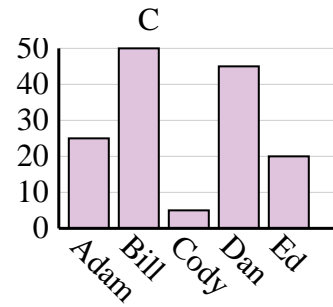
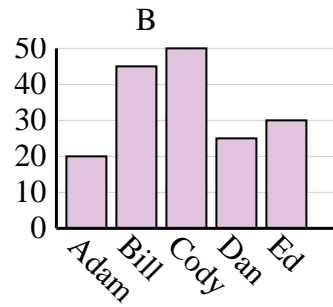
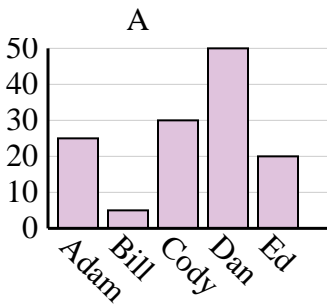
2)

Favorite Color	blue	green	orange	yellow	red
People	10,000	1,000	9,000	3,000	8,000



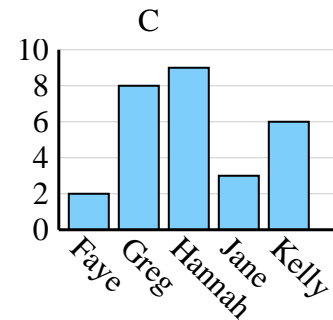
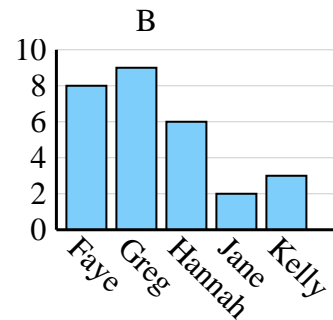
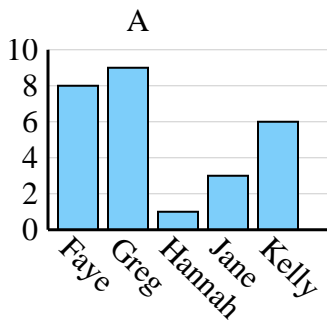
3)

Name	Adam	Bill	Cody	Dan	Ed
Points	25	5	30	50	20



4)

Name	Faye	Greg	Hannah	Jane	Kelly
States Lived In	8	9	1	3	6

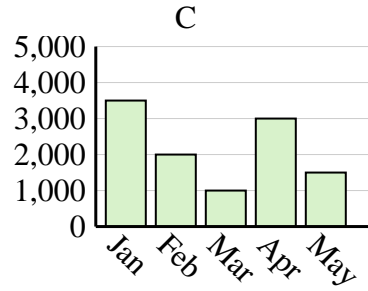
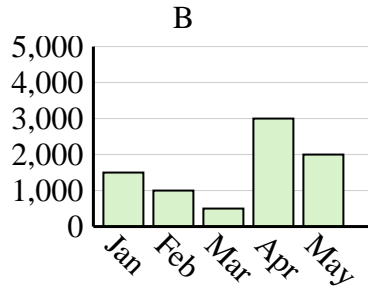
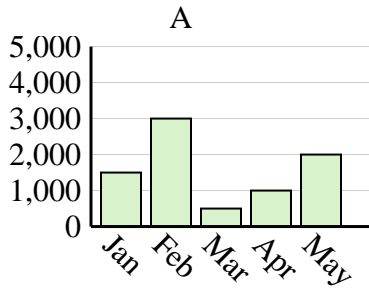




Determine which graph (A, B or C) best represents the information in the table.

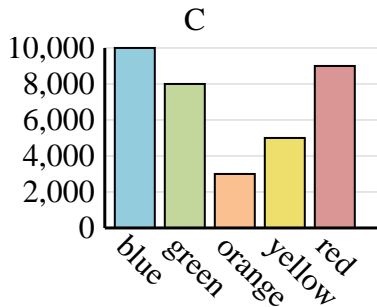
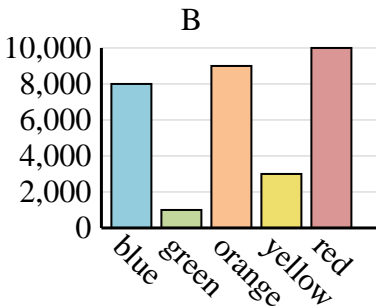
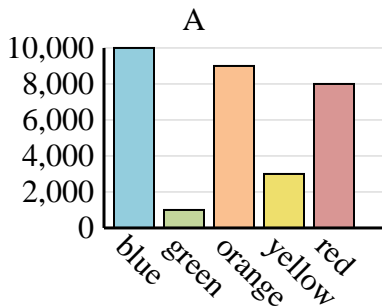
Answers

Sales	Jan	Feb	Mar	Apr	May
Month	3,500	2,000	1,000	3,000	1,500



1. **C**

Favorite Color	blue	green	orange	yellow	red
People	10,000	1,000	9,000	3,000	8,000

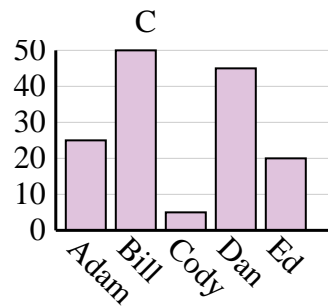
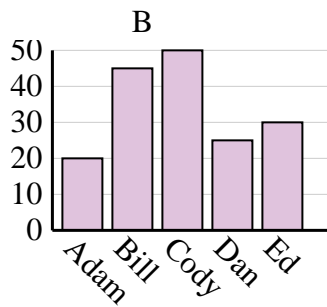
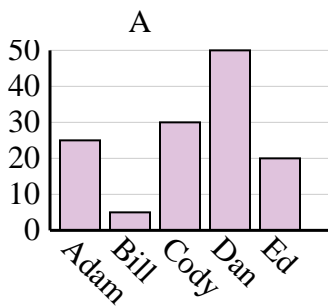


2. **A**

3. **A**

4. **A**

Name	Adam	Bill	Cody	Dan	Ed
Points	25	5	30	50	20



Name	Faye	Greg	Hannah	Jane	Kelly
States Lived In	8	9	1	3	6

