




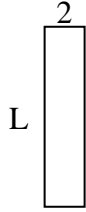
Determine the value of 'L'. Lengths are in cm (not to scale).

Answers

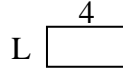
1) perimeter = 26



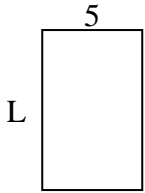
2) perimeter = 22



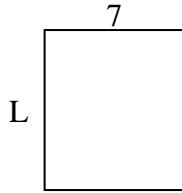
3) perimeter = 12



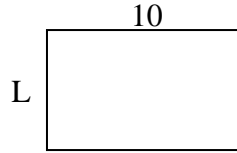
4) perimeter = 26



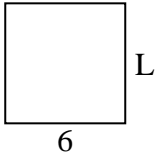
5) perimeter = 30




6) perimeter = 32



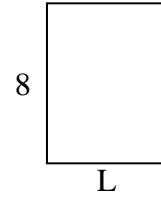
7) perimeter = 24



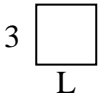
8) perimeter = 24



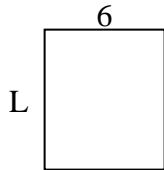
9) perimeter = 28



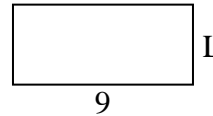
10) perimeter = 12




11) perimeter = 26



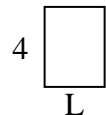
12) perimeter = 26



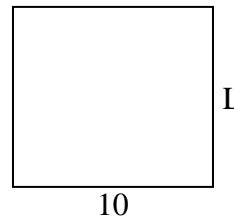
13) perimeter = 20



14) perimeter = 14



15) perimeter = 38

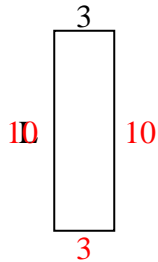


1. _____
2. _____
3. _____
4. _____
5. _____
6. _____
7. _____
8. _____
9. _____
10. _____
11. _____
12. _____
13. _____
14. _____
15. _____

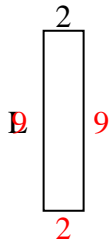


Determine the value of 'L'. Lengths are in cm (not to scale).

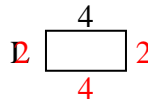
1) perimeter = 26



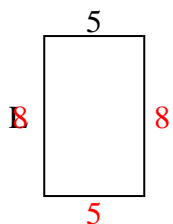
2) perimeter = 22



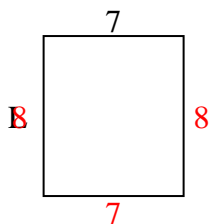
3) perimeter = 12



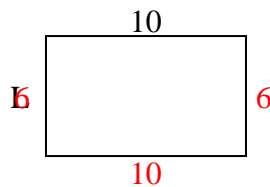
4) perimeter = 26



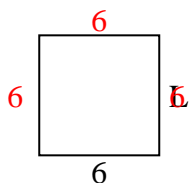
5) perimeter = 30




6) perimeter = 32



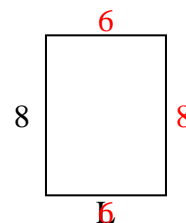
7) perimeter = 24



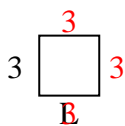
8) perimeter = 24



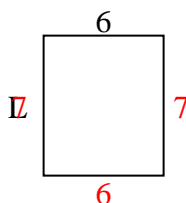
9) perimeter = 28



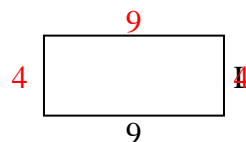
10) perimeter = 12



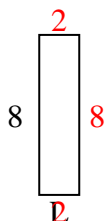
11) perimeter = 26



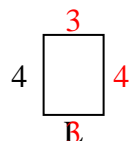
12) perimeter = 26



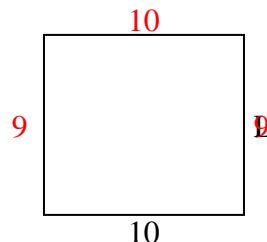
13) perimeter = 20



14) perimeter = 14



15) perimeter = 38



Answers

1. 10 cm

2. 9 cm

3. 2 cm

4. 8 cm

5. 8 cm

6. 6 cm

7. 6 cm

8. 2 cm

9. 6 cm

10. 3 cm

11. 7 cm

12. 4 cm

13. 2 cm

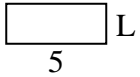
14. 3 cm

15. 9 cm

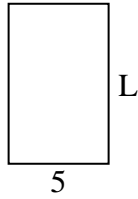


Determine the value of 'L'. Lengths are in cm (not to scale).

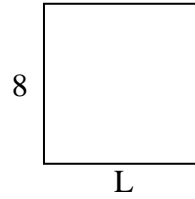
1) perimeter = 14



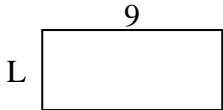
2) perimeter = 26



3) perimeter = 32



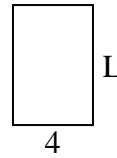
4) perimeter = 26



5) perimeter = 16




6) perimeter = 20



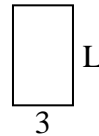
7) perimeter = 16



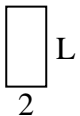
8) perimeter = 24



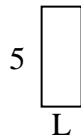
9) perimeter = 16



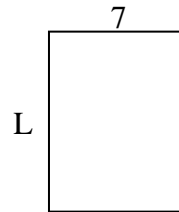
10) perimeter = 12



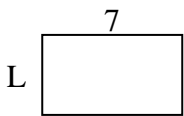
11) perimeter = 14



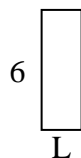
12) perimeter = 32



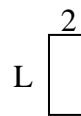
13) perimeter = 22



14) perimeter = 16



15) perimeter = 12



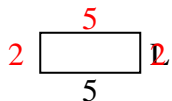
Answers

1. _____
2. _____
3. _____
4. _____
5. _____
6. _____
7. _____
8. _____
9. _____
10. _____
11. _____
12. _____
13. _____
14. _____
15. _____

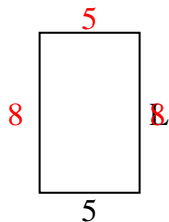


Determine the value of 'L'. Lengths are in cm (not to scale).

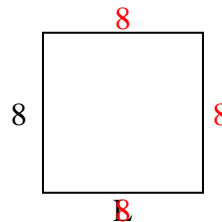
1) perimeter = 14



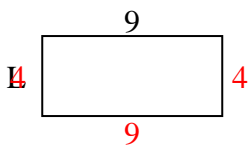
2) perimeter = 26



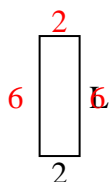
3) perimeter = 32



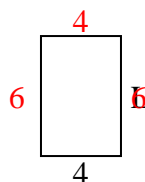
4) perimeter = 26



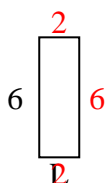
5) perimeter = 16




6) perimeter = 20



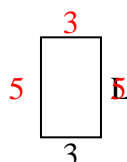
7) perimeter = 16



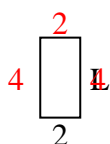
8) perimeter = 24



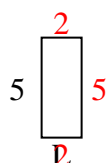
9) perimeter = 16



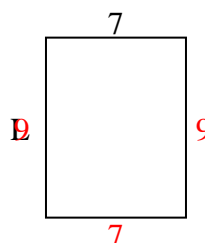
10) perimeter = 12



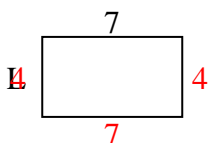
11) perimeter = 14



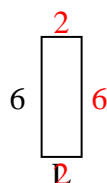
12) perimeter = 32



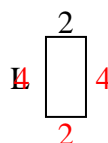
13) perimeter = 22



14) perimeter = 16



15) perimeter = 12



Answers

1. 2 cm

2. 8 cm

3. 8 cm

4. 4 cm

5. 6 cm

6. 6 cm

7. 2 cm

8. 2 cm

9. 5 cm

10. 4 cm

11. 2 cm

12. 9 cm

13. 4 cm

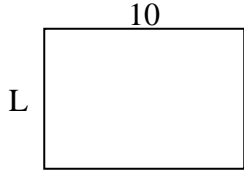
14. 2 cm

15. 4 cm

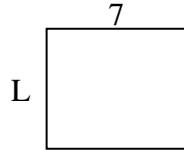


Determine the value of 'L'. Lengths are in cm (not to scale).

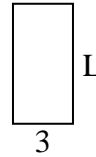
1) perimeter = 34



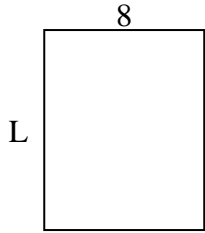
2) perimeter = 26



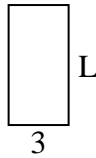
3) perimeter = 18



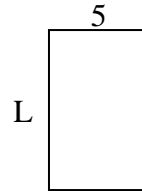
4) perimeter = 36



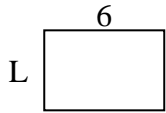
5) perimeter = 18



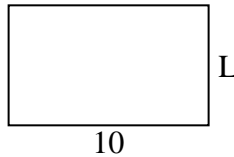
6) perimeter = 26



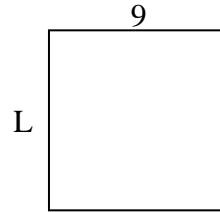
7) perimeter = 20



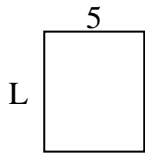
8) perimeter = 32



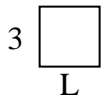
9) perimeter = 36



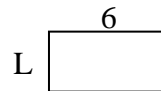
10) perimeter = 22



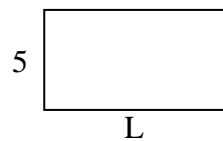
11) perimeter = 12



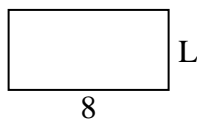
12) perimeter = 18



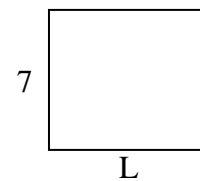
13) perimeter = 28



14) perimeter = 24



15) perimeter = 30



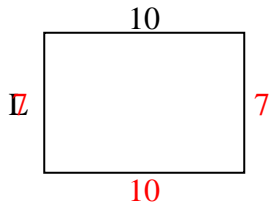
Answers

1. _____
2. _____
3. _____
4. _____
5. _____
6. _____
7. _____
8. _____
9. _____
10. _____
11. _____
12. _____
13. _____
14. _____
15. _____

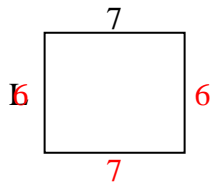


Determine the value of 'L'. Lengths are in cm (not to scale).

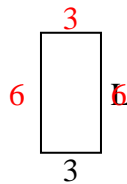
1) perimeter = 34



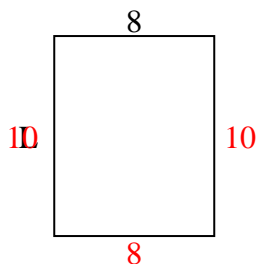
2) perimeter = 26



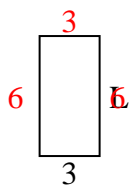
3) perimeter = 18



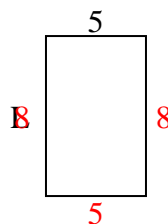
4) perimeter = 36



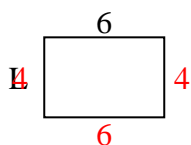
5) perimeter = 18



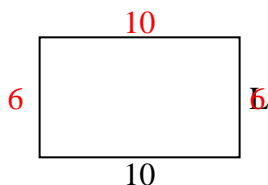
6) perimeter = 26



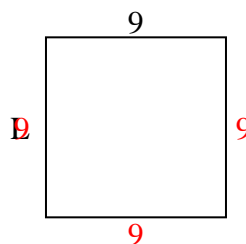
7) perimeter = 20



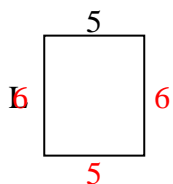
8) perimeter = 32



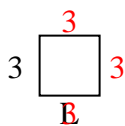
9) perimeter = 36



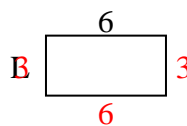
10) perimeter = 22



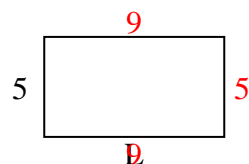
11) perimeter = 12



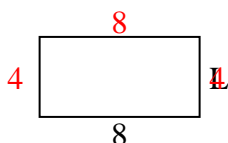
12) perimeter = 18



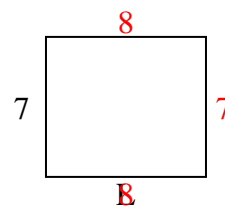
13) perimeter = 28



14) perimeter = 24



15) perimeter = 30



Answers

1. 7 cm

2. 6 cm

3. 6 cm

4. 10 cm

5. 6 cm

6. 8 cm

7. 4 cm

8. 6 cm

9. 9 cm

10. 6 cm

11. 3 cm

12. 3 cm

13. 9 cm

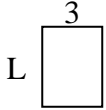
14. 4 cm

15. 8 cm

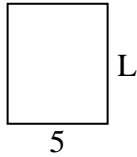


Determine the value of 'L'. Lengths are in cm (not to scale).

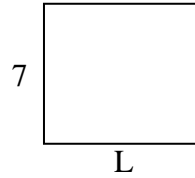
1) perimeter = 14



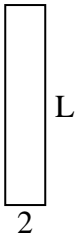
2) perimeter = 22



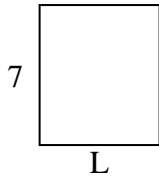
3) perimeter = 30



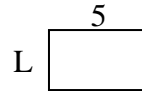
4) perimeter = 24



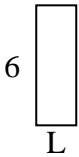
5) perimeter = 26



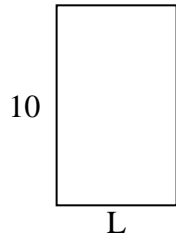
6) perimeter = 16



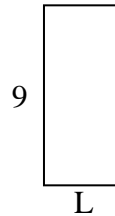
7) perimeter = 16



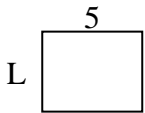
8) perimeter = 32



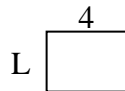
9) perimeter = 26



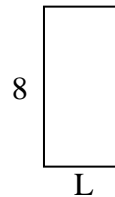
10) perimeter = 18



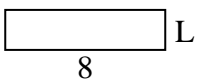
11) perimeter = 14



12) perimeter = 24



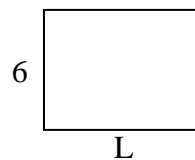
13) perimeter = 20



14) perimeter = 18



15) perimeter = 28



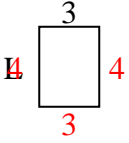
Answers

1. _____
2. _____
3. _____
4. _____
5. _____
6. _____
7. _____
8. _____
9. _____
10. _____
11. _____
12. _____
13. _____
14. _____
15. _____

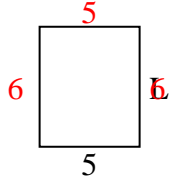


Determine the value of 'L'. Lengths are in cm (not to scale).

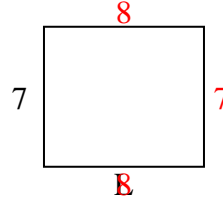
1) perimeter = 14



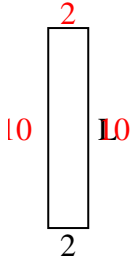
2) perimeter = 22



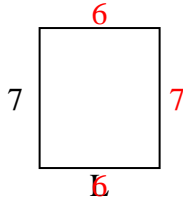
3) perimeter = 30



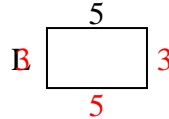
4) perimeter = 24



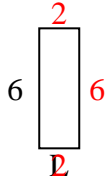
5) perimeter = 26



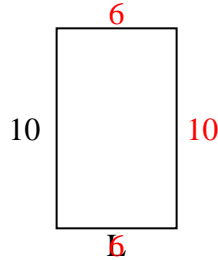
6) perimeter = 16




7) perimeter = 16



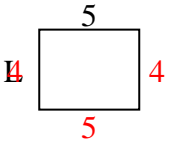
8) perimeter = 32



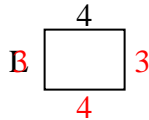
9) perimeter = 26



10) perimeter = 18



11) perimeter = 14



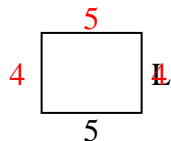
12) perimeter = 24



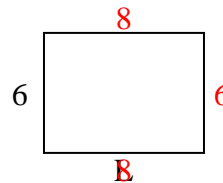
13) perimeter = 20



14) perimeter = 18



15) perimeter = 28



Answers

1. 4 cm

2. 6 cm

3. 8 cm

4. 10 cm

5. 6 cm

6. 3 cm

7. 2 cm

8. 6 cm

9. 4 cm

10. 4 cm

11. 3 cm

12. 4 cm

13. 2 cm

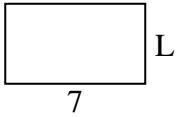
14. 4 cm

15. 8 cm

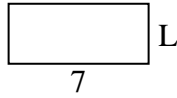


Determine the value of 'L'. Lengths are in cm (not to scale).

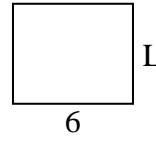
1) perimeter = 22



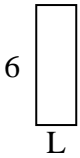
2) perimeter = 20



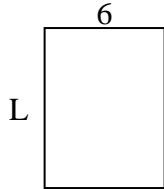
3) perimeter = 22



4) perimeter = 16




5) perimeter = 28



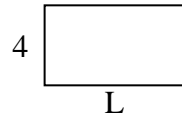
6) perimeter = 10



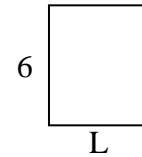
7) perimeter = 22



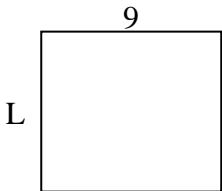
8) perimeter = 22



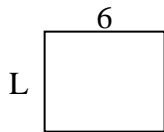
9) perimeter = 22



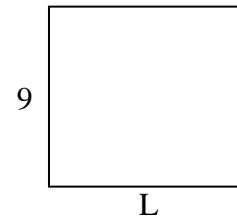
10) perimeter = 34



11) perimeter = 22



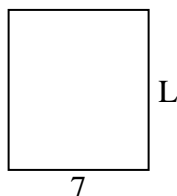
12) perimeter = 38




13) perimeter = 26



14) perimeter = 30



15) perimeter = 30



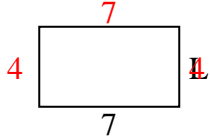
Answers

1. _____
2. _____
3. _____
4. _____
5. _____
6. _____
7. _____
8. _____
9. _____
10. _____
11. _____
12. _____
13. _____
14. _____
15. _____



Determine the value of 'L'. Lengths are in cm (not to scale).

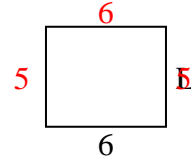
1) perimeter = 22



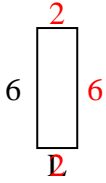
2) perimeter = 20



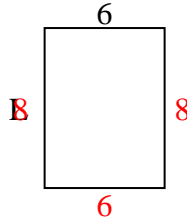
3) perimeter = 22



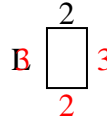
4) perimeter = 16



5) perimeter = 28



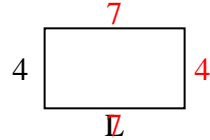
6) perimeter = 10



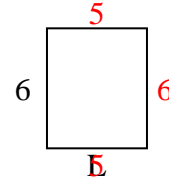
7) perimeter = 22



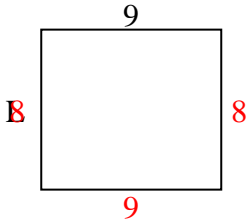
8) perimeter = 22



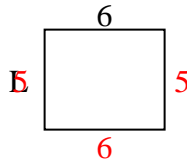
9) perimeter = 22



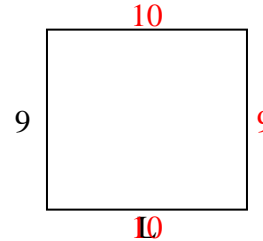
10) perimeter = 34



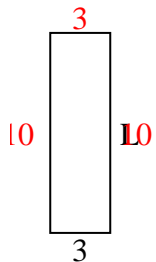
11) perimeter = 22



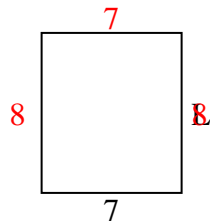
12) perimeter = 38



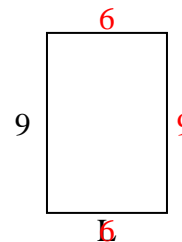
13) perimeter = 26



14) perimeter = 30



15) perimeter = 30



Answers

1. 4 cm

2. 3 cm

3. 5 cm

4. 2 cm

5. 8 cm

6. 3 cm

7. 2 cm

8. 7 cm

9. 5 cm

10. 8 cm

11. 5 cm

12. 10 cm

13. 10 cm

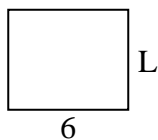
14. 8 cm

15. 6 cm

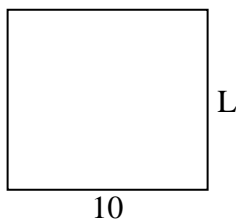


Determine the value of 'L'. Lengths are in cm (not to scale).

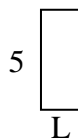
1) perimeter = 22



2) perimeter = 38



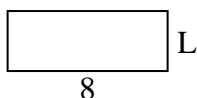
3) perimeter = 14



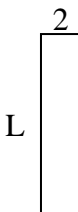
4) perimeter = 18



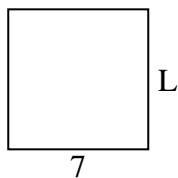
5) perimeter = 22



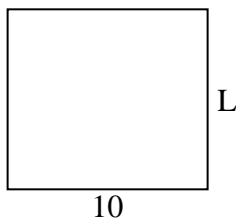
6) perimeter = 22



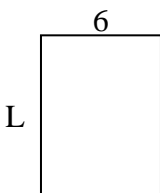
7) perimeter = 28



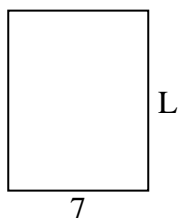
8) perimeter = 38



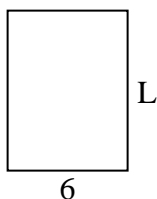
9) perimeter = 28



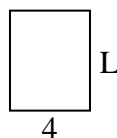
10) perimeter = 32



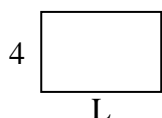
11) perimeter = 28



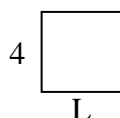
12) perimeter = 18



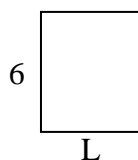
13) perimeter = 20



14) perimeter = 16



15) perimeter = 22



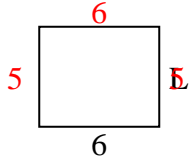
Answers

1. _____
2. _____
3. _____
4. _____
5. _____
6. _____
7. _____
8. _____
9. _____
10. _____
11. _____
12. _____
13. _____
14. _____
15. _____

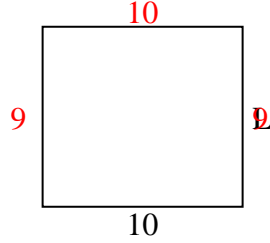


Determine the value of 'L'. Lengths are in cm (not to scale).

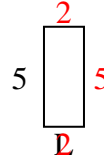
1) perimeter = 22



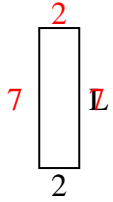
2) perimeter = 38



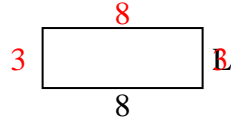
3) perimeter = 14



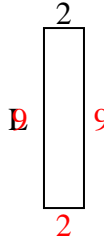
4) perimeter = 18



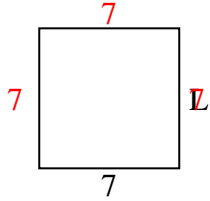
5) perimeter = 22



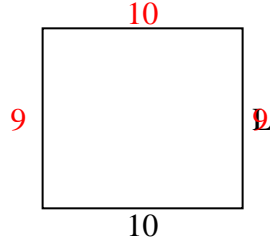
6) perimeter = 22



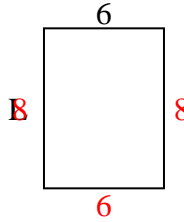
7) perimeter = 28



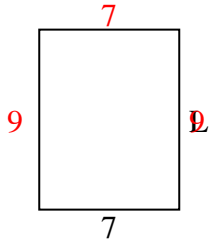
8) perimeter = 38



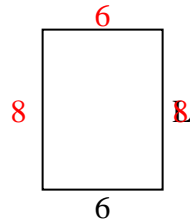
9) perimeter = 28



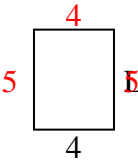
10) perimeter = 32



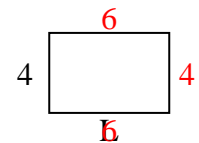
11) perimeter = 28



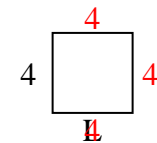
12) perimeter = 18



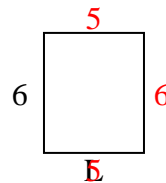
13) perimeter = 20



14) perimeter = 16



15) perimeter = 22



Answers

1. 5 cm

2. 9 cm

3. 2 cm

4. 7 cm

5. 3 cm

6. 9 cm

7. 7 cm

8. 9 cm

9. 8 cm

10. 9 cm

11. 8 cm

12. 5 cm

13. 6 cm

14. 4 cm

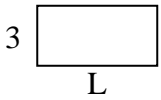
15. 5 cm



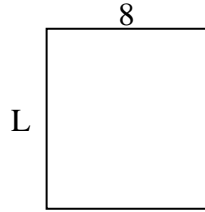
Determine the value of 'L'. Lengths are in cm (not to scale).

Answers

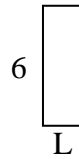
1) perimeter = 18



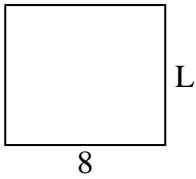
2) perimeter = 34



3) perimeter = 16



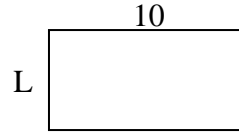
4) perimeter = 30



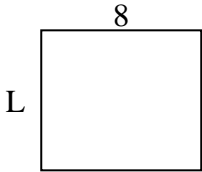
5) perimeter = 10



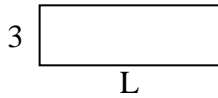
6) perimeter = 30



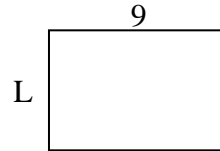
7) perimeter = 30



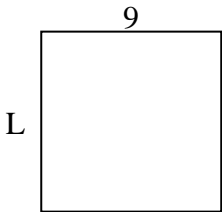
8) perimeter = 24



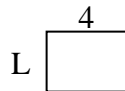
9) perimeter = 30



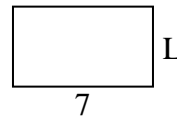
10) perimeter = 36



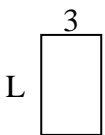
11) perimeter = 14




12) perimeter = 22



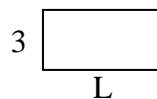
13) perimeter = 16



14) perimeter = 24



15) perimeter = 18

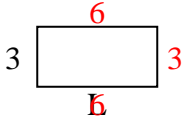


1. _____
2. _____
3. _____
4. _____
5. _____
6. _____
7. _____
8. _____
9. _____
10. _____
11. _____
12. _____
13. _____
14. _____
15. _____

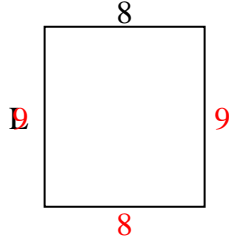


Determine the value of 'L'. Lengths are in cm (not to scale).

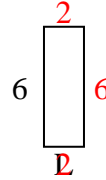
1) perimeter = 18



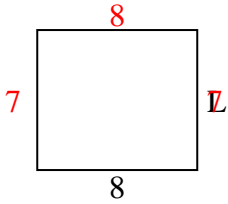
2) perimeter = 34



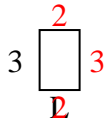
3) perimeter = 16



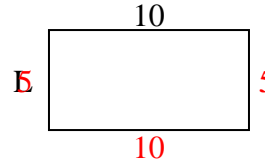
4) perimeter = 30



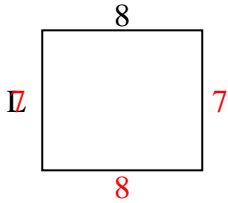
5) perimeter = 10



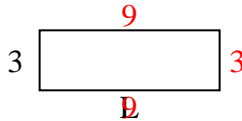
6) perimeter = 30



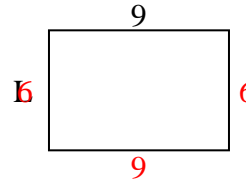
7) perimeter = 30



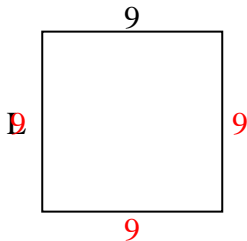
8) perimeter = 24



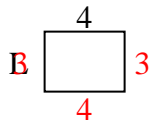
9) perimeter = 30



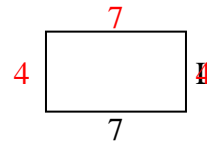
10) perimeter = 36



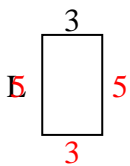
11) perimeter = 14



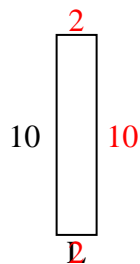
12) perimeter = 22



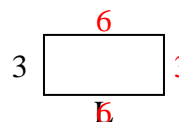
13) perimeter = 16



14) perimeter = 24



15) perimeter = 18



Answers

1. 6 cm

2. 9 cm

3. 2 cm

4. 7 cm

5. 2 cm

6. 5 cm

7. 7 cm

8. 9 cm

9. 6 cm

10. 9 cm

11. 3 cm

12. 4 cm

13. 5 cm

14. 2 cm

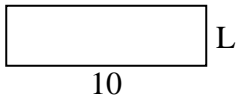
15. 6 cm



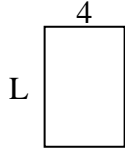
Determine the value of 'L'. Lengths are in cm (not to scale).

Answers

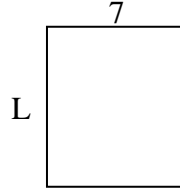
1) perimeter = 26



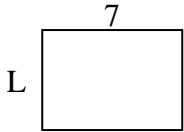
2) perimeter = 20



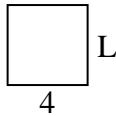
3) perimeter = 30



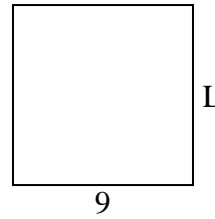
4) perimeter = 24



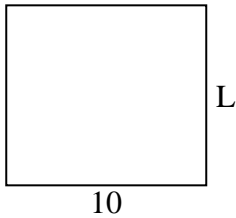
5) perimeter = 16



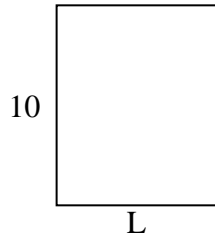
6) perimeter = 36



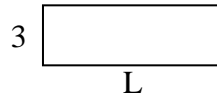
7) perimeter = 38




8) perimeter = 36



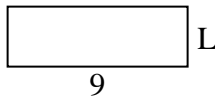
9) perimeter = 24



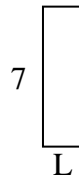
10) perimeter = 24



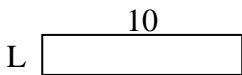
11) perimeter = 24



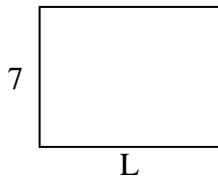
12) perimeter = 18



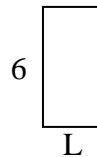
13) perimeter = 24



14) perimeter = 32



15) perimeter = 18

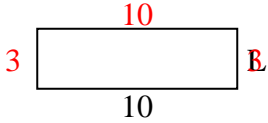


1. _____
2. _____
3. _____
4. _____
5. _____
6. _____
7. _____
8. _____
9. _____
10. _____
11. _____
12. _____
13. _____
14. _____
15. _____

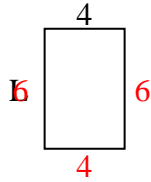


Determine the value of 'L'. Lengths are in cm (not to scale).

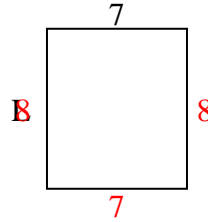
1) perimeter = 26



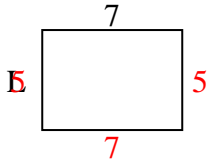
2) perimeter = 20



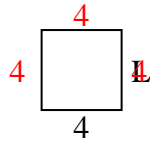
3) perimeter = 30



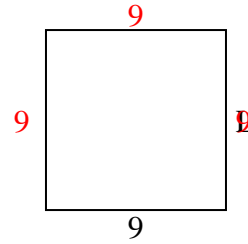
4) perimeter = 24



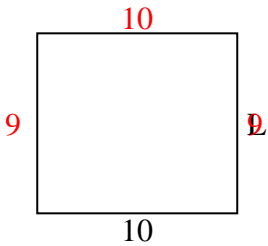
5) perimeter = 16



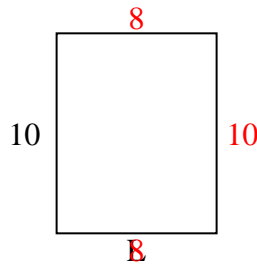
6) perimeter = 36



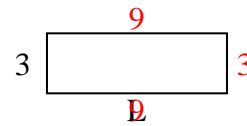
7) perimeter = 38



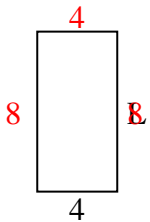
8) perimeter = 36



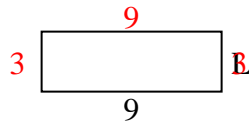
9) perimeter = 24



10) perimeter = 24



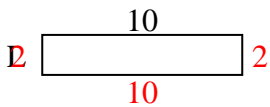
11) perimeter = 24



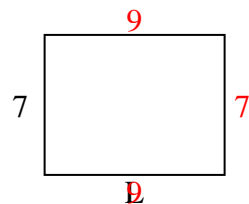
12) perimeter = 18



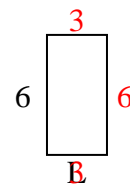
13) perimeter = 24



14) perimeter = 32



15) perimeter = 18



Answers

1. 3 cm

2. 6 cm

3. 8 cm

4. 5 cm

5. 4 cm

6. 9 cm

7. 9 cm

8. 8 cm

9. 9 cm

10. 8 cm

11. 3 cm

12. 2 cm

13. 2 cm

14. 9 cm

15. 3 cm

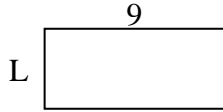


Determine the value of 'L'. Lengths are in cm (not to scale).

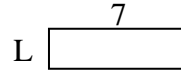
1) perimeter = 12



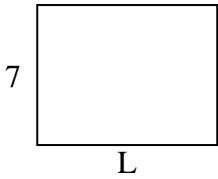
2) perimeter = 26



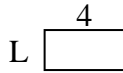
3) perimeter = 18



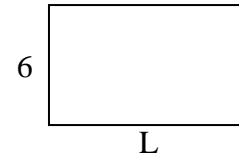
4) perimeter = 32



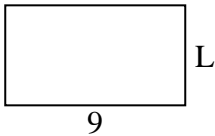
5) perimeter = 12



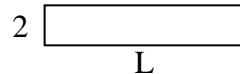
6) perimeter = 32



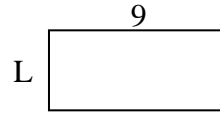
7) perimeter = 28



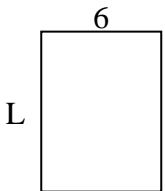
8) perimeter = 24



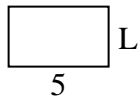
9) perimeter = 26



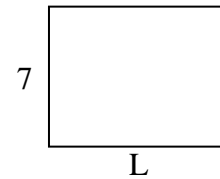
10) perimeter = 28



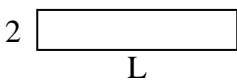
11) perimeter = 16



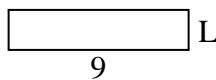
12) perimeter = 32



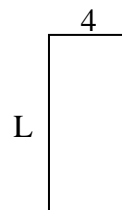
13) perimeter = 24



14) perimeter = 22



15) perimeter = 26



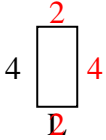
Answers

1. _____
2. _____
3. _____
4. _____
5. _____
6. _____
7. _____
8. _____
9. _____
10. _____
11. _____
12. _____
13. _____
14. _____
15. _____

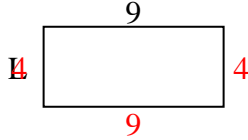


Determine the value of 'L'. Lengths are in cm (not to scale).

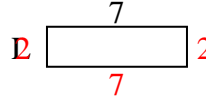
1) perimeter = 12



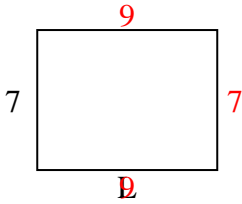
2) perimeter = 26



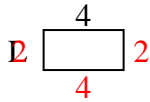
3) perimeter = 18



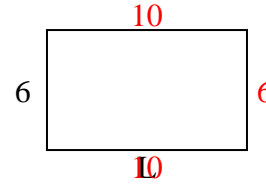
4) perimeter = 32



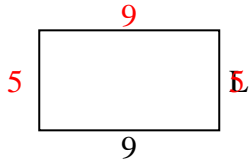
5) perimeter = 12



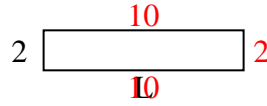
6) perimeter = 32



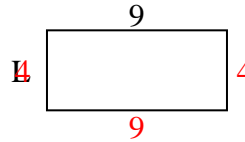
7) perimeter = 28



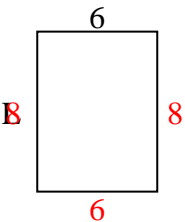
8) perimeter = 24



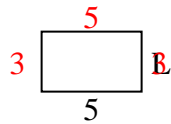
9) perimeter = 26



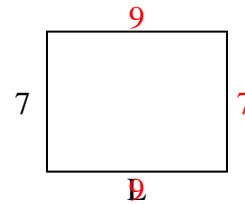
10) perimeter = 28



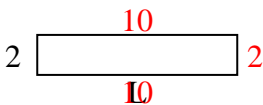
11) perimeter = 16



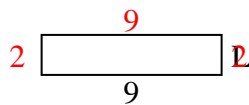
12) perimeter = 32



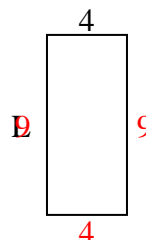
13) perimeter = 24



14) perimeter = 22



15) perimeter = 26



Answers

1. 2 cm

2. 4 cm

3. 2 cm

4. 9 cm

5. 2 cm

6. 10 cm

7. 5 cm

8. 10 cm

9. 4 cm

10. 8 cm

11. 3 cm

12. 9 cm

13. 10 cm

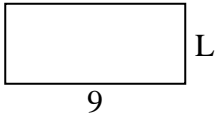
14. 2 cm

15. 9 cm

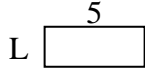


Determine the value of 'L'. Lengths are in cm (not to scale).

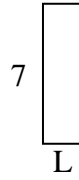
1) perimeter = 26



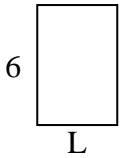
2) perimeter = 14



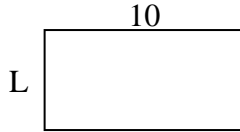
3) perimeter = 18



4) perimeter = 20



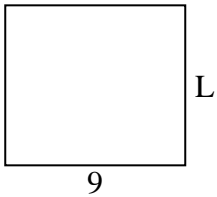
5) perimeter = 30



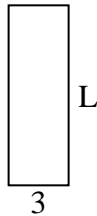
6) perimeter = 10



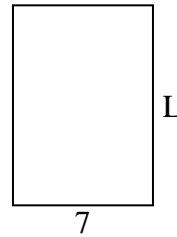
7) perimeter = 34



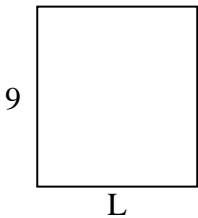
8) perimeter = 24



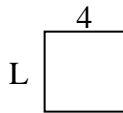
9) perimeter = 34



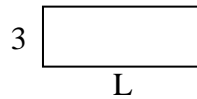
10) perimeter = 34



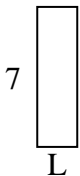
11) perimeter = 16



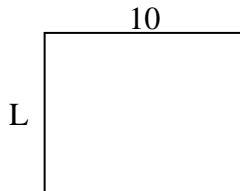
12) perimeter = 22



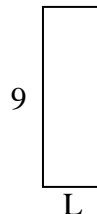
13) perimeter = 18



14) perimeter = 36



15) perimeter = 24



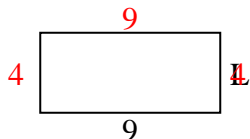
Answers

1. _____
2. _____
3. _____
4. _____
5. _____
6. _____
7. _____
8. _____
9. _____
10. _____
11. _____
12. _____
13. _____
14. _____
15. _____

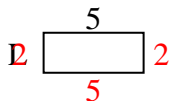


Determine the value of 'L'. Lengths are in cm (not to scale).

1) perimeter = 26



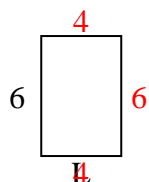
2) perimeter = 14



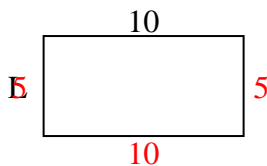
3) perimeter = 18



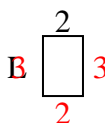
4) perimeter = 20



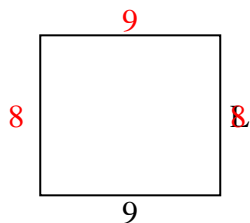
5) perimeter = 30



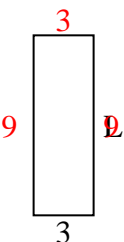
6) perimeter = 10



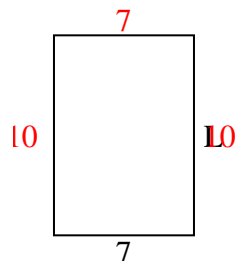
7) perimeter = 34



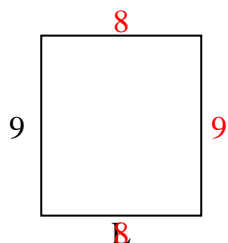
8) perimeter = 24



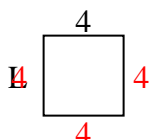
9) perimeter = 34



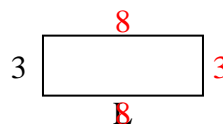
10) perimeter = 34



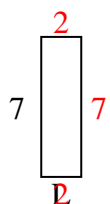
11) perimeter = 16



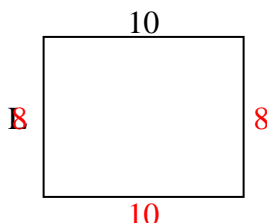
12) perimeter = 22



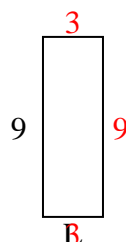
13) perimeter = 18



14) perimeter = 36



15) perimeter = 24



Answers

1. 4 cm

2. 2 cm

3. 2 cm

4. 4 cm

5. 5 cm

6. 3 cm

7. 8 cm

8. 9 cm

9. 10 cm

10. 8 cm

11. 4 cm

12. 8 cm

13. 2 cm

14. 8 cm

15. 3 cm