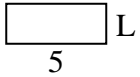


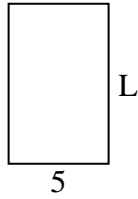


Determine the value of 'L'. Lengths are in cm (not to scale).

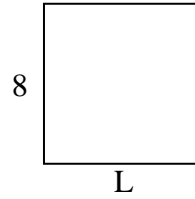
1) perimeter = 14



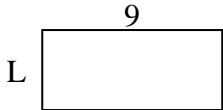
2) perimeter = 26



3) perimeter = 32



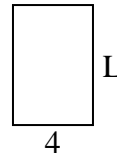
4) perimeter = 26



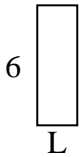
5) perimeter = 16




6) perimeter = 20



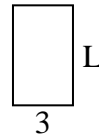
7) perimeter = 16



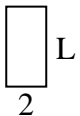
8) perimeter = 24



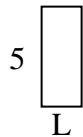
9) perimeter = 16



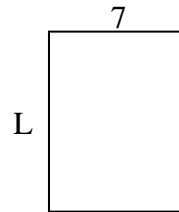
10) perimeter = 12



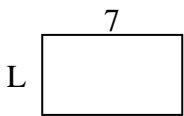
11) perimeter = 14



12) perimeter = 32



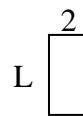
13) perimeter = 22



14) perimeter = 16



15) perimeter = 12



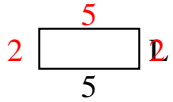
Answers

1. \_\_\_\_\_
2. \_\_\_\_\_
3. \_\_\_\_\_
4. \_\_\_\_\_
5. \_\_\_\_\_
6. \_\_\_\_\_
7. \_\_\_\_\_
8. \_\_\_\_\_
9. \_\_\_\_\_
10. \_\_\_\_\_
11. \_\_\_\_\_
12. \_\_\_\_\_
13. \_\_\_\_\_
14. \_\_\_\_\_
15. \_\_\_\_\_

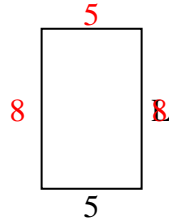


Determine the value of 'L'. Lengths are in cm (not to scale).

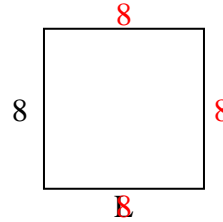
1) perimeter = 14



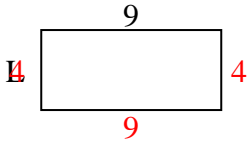
2) perimeter = 26



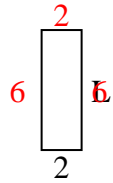
3) perimeter = 32



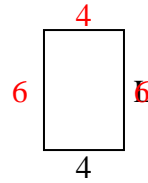
4) perimeter = 26



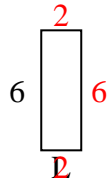
5) perimeter = 16



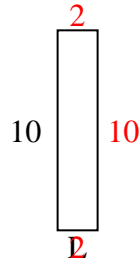
6) perimeter = 20



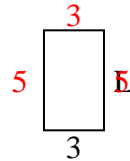
7) perimeter = 16



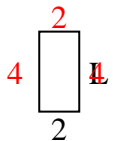
8) perimeter = 24



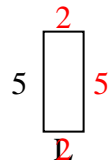
9) perimeter = 16



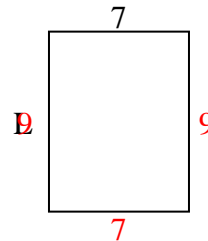
10) perimeter = 12



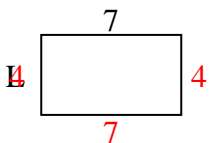
11) perimeter = 14



12) perimeter = 32



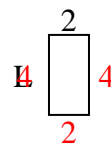
13) perimeter = 22



14) perimeter = 16



15) perimeter = 12



Answers

1. 2 cm

2. 8 cm

3. 8 cm

4. 4 cm

5. 6 cm

6. 6 cm

7. 2 cm

8. 2 cm

9. 5 cm

10. 4 cm

11. 2 cm

12. 9 cm

13. 4 cm

14. 2 cm

15. 4 cm