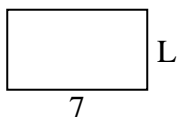


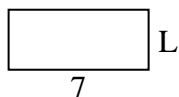


Determine the value of 'L'.

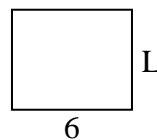
1) Area =  $28u^2$



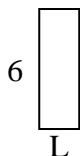
2) Area =  $21u^2$



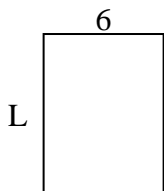
3) Area =  $30u^2$



4) Area =  $12u^2$



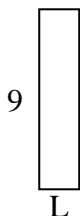
5) Area =  $48u^2$



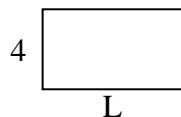
6) Area =  $6u^2$



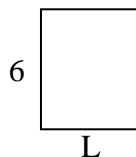
7) Area =  $18u^2$



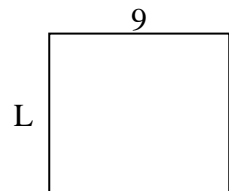
8) Area =  $28u^2$



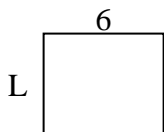
9) Area =  $30u^2$



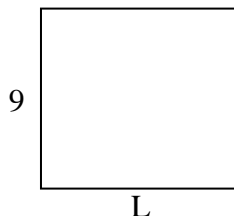
10) Area =  $72u^2$



11) Area =  $30u^2$



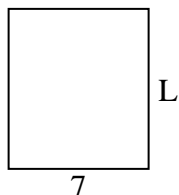
12) Area =  $90u^2$



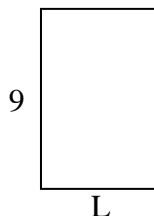
13) Area =  $30u^2$



14) Area =  $56u^2$



15) Area =  $54u^2$



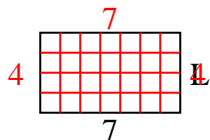
**Answers**

1. \_\_\_\_\_
2. \_\_\_\_\_
3. \_\_\_\_\_
4. \_\_\_\_\_
5. \_\_\_\_\_
6. \_\_\_\_\_
7. \_\_\_\_\_
8. \_\_\_\_\_
9. \_\_\_\_\_
10. \_\_\_\_\_
11. \_\_\_\_\_
12. \_\_\_\_\_
13. \_\_\_\_\_
14. \_\_\_\_\_
15. \_\_\_\_\_

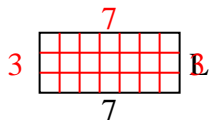


Determine the value of 'L'.

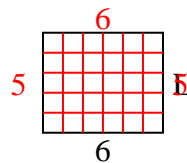
1) Area =  $28u^2$



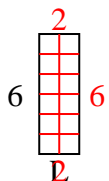
2) Area =  $21u^2$



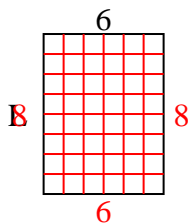
3) Area =  $30u^2$



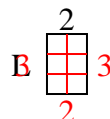
4) Area =  $12u^2$



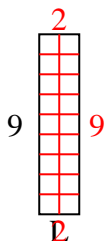
5) Area =  $48u^2$



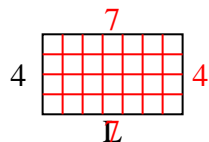
6) Area =  $6u^2$



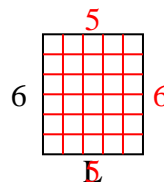
7) Area =  $18u^2$



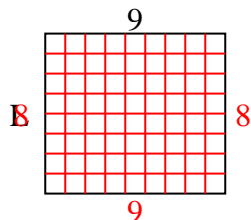
8) Area =  $28u^2$



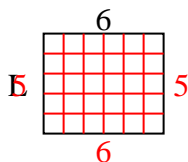
9) Area =  $30u^2$



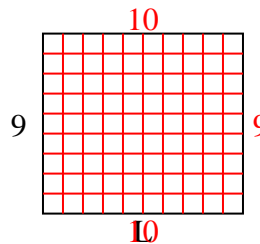
10) Area =  $72u^2$



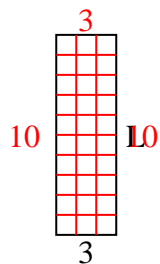
11) Area =  $30u^2$



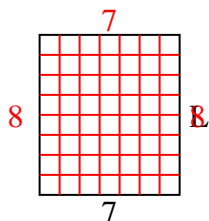
12) Area =  $90u^2$



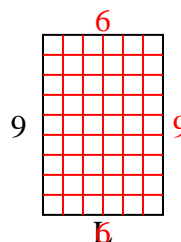
13) Area =  $30u^2$



14) Area =  $56u^2$



15) Area =  $54u^2$



Answers

1. 4

2. 3

3. 5

4. 2

5. 8

6. 3

7. 2

8. 7

9. 5

10. 8

11. 5

12. 10

13. 10

14. 8

15. 6