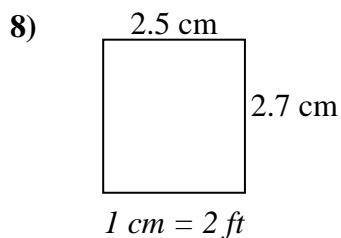
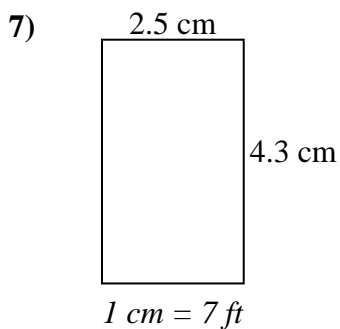
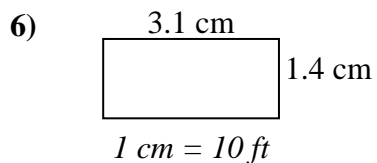
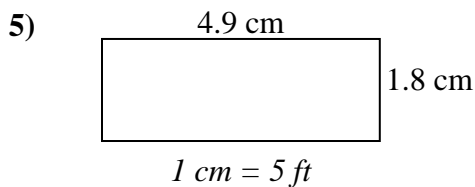
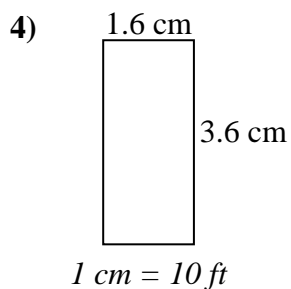
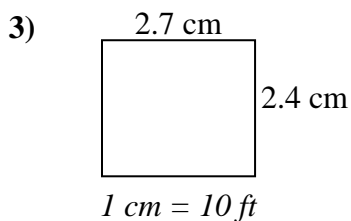
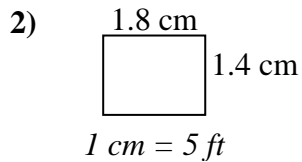
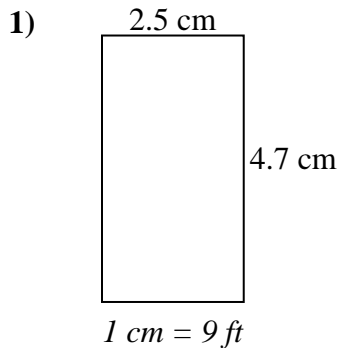




Determine the actual width, height and area of each scale rectangle.

Round the area to the nearest whole number.



Answers

1. _____

2. _____

3. _____

4. _____

5. _____

6. _____

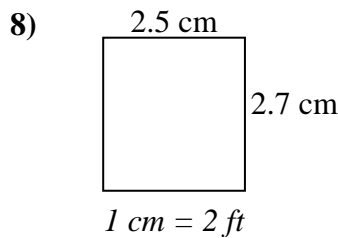
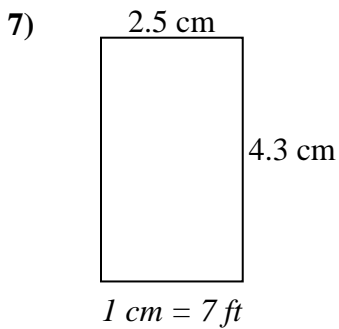
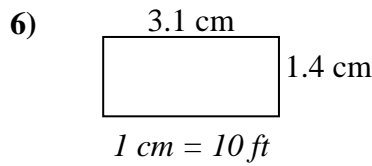
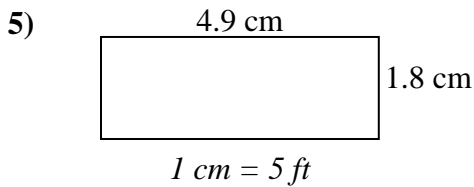
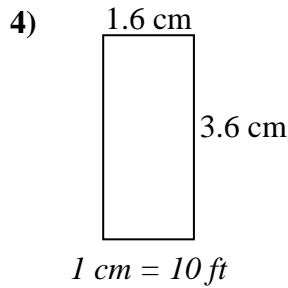
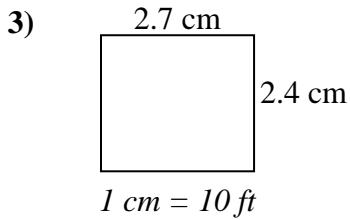
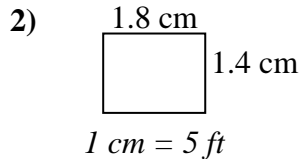
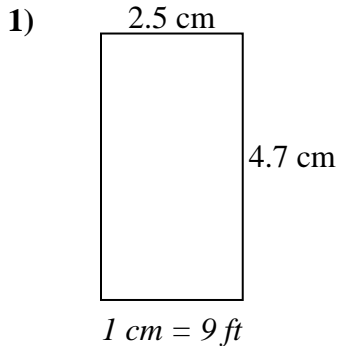
7. _____

8. _____



Determine the actual width, height and area of each scale rectangle.

Round the area to the nearest whole number.



Answers

1.	<u>22.5</u>	<u>42.3</u>	<u>952</u>
2.	<u>9</u>	<u>7</u>	<u>63</u>
3.	<u>27</u>	<u>24</u>	<u>648</u>
4.	<u>16</u>	<u>36</u>	<u>576</u>
5.	<u>24.5</u>	<u>9</u>	<u>221</u>
6.	<u>31</u>	<u>14</u>	<u>434</u>
7.	<u>17.5</u>	<u>30.1</u>	<u>527</u>
8.	<u>5</u>	<u>5.4</u>	<u>27</u>