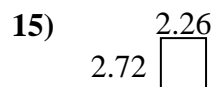
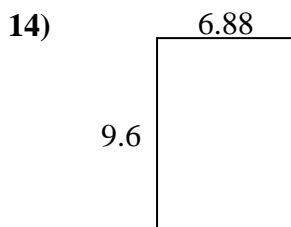
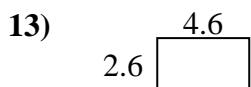
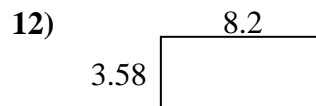
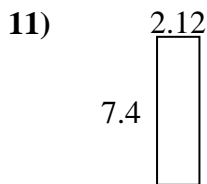
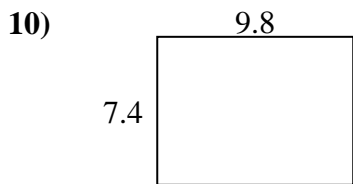
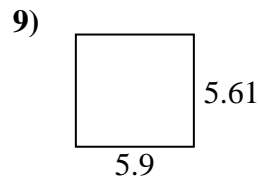
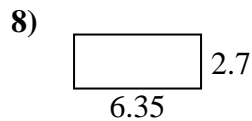
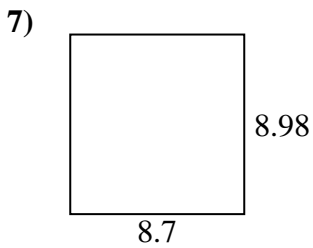
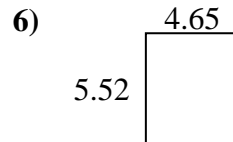
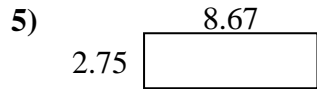
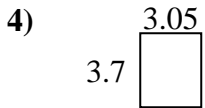
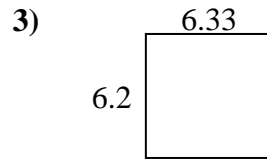
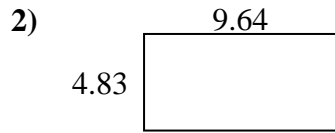
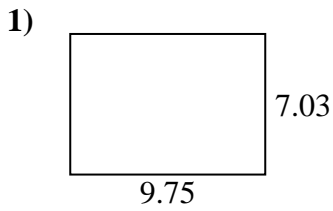




Find the perimeter and area of each figure. Answer to the nearest 10th.

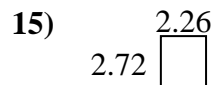
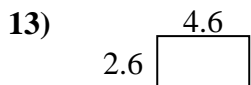
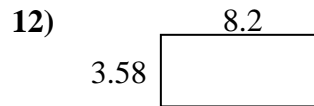
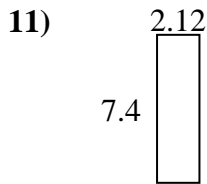
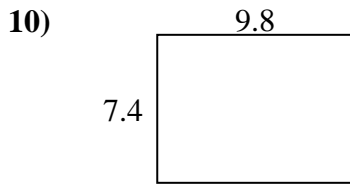
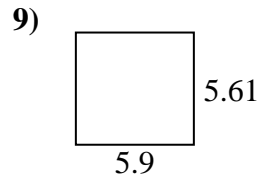
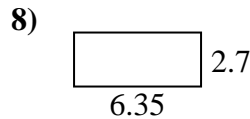
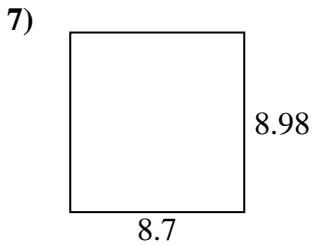
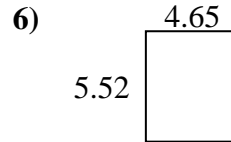
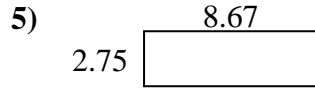
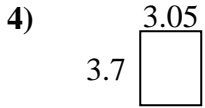
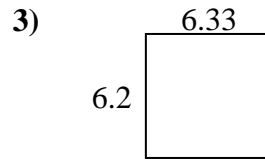
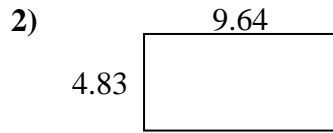
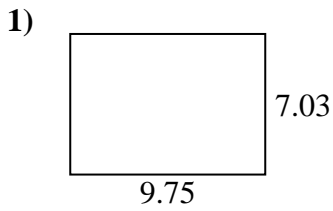
Answers



1. _____
2. _____
3. _____
4. _____
5. _____
6. _____
7. _____
8. _____
9. _____
10. _____
11. _____
12. _____
13. _____
14. _____
15. _____



Find the perimeter and area of each figure. Answer to the nearest 10th.



Answers

1.	<u>68.5</u>	<u>33.6</u>
2.	<u>46.6</u>	<u>28.9</u>
3.	<u>39.2</u>	<u>25.1</u>
4.	<u>11.3</u>	<u>13.5</u>
5.	<u>23.8</u>	<u>22.8</u>
6.	<u>25.7</u>	<u>20.3</u>
7.	<u>78.1</u>	<u>35.4</u>
8.	<u>17.1</u>	<u>18.1</u>
9.	<u>33.1</u>	<u>23.0</u>
10.	<u>72.5</u>	<u>34.4</u>
11.	<u>15.7</u>	<u>19.0</u>
12.	<u>29.4</u>	<u>23.6</u>
13.	<u>12.0</u>	<u>14.4</u>
14.	<u>66.0</u>	<u>33.0</u>
15.	<u>6.1</u>	<u>10.0</u>