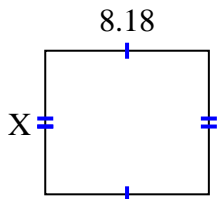


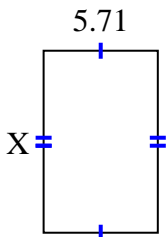


Find the value of X for each figure. Each figure is in centimeters (cm). Not to scale.

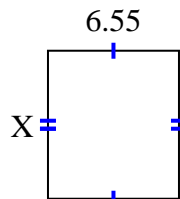
1) area = 58.7324 cm^2



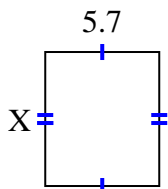
2) area = 51.961 cm^2



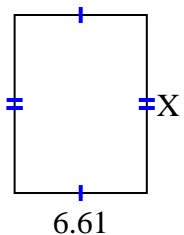
3) area = 48.47 cm^2



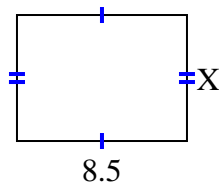
4) area = 38.19 cm^2



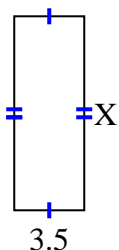
5) area = 58.829 cm^2



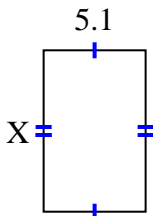
6) area = 53.55 cm^2



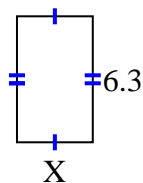
7) area = 33.95 cm^2



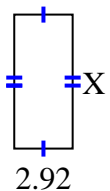
8) area = 41.157 cm^2



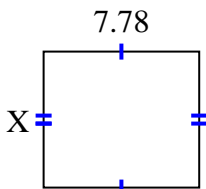
9) area = 23.877 cm^2



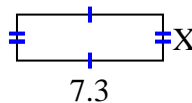
10) area = 19.564 cm^2



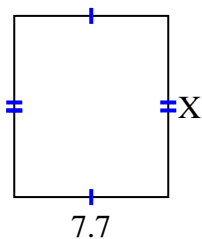
11) area = 52.904 cm^2



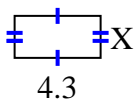
12) area = 16.79 cm^2



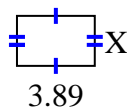
13) area = 69.762 cm^2



14) area = 9.03 cm^2



15) area = 9.725 cm^2



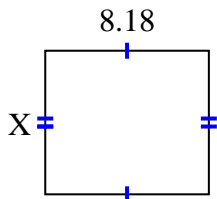
Answers

1. _____
2. _____
3. _____
4. _____
5. _____
6. _____
7. _____
8. _____
9. _____
10. _____
11. _____
12. _____
13. _____
14. _____
15. _____

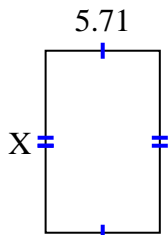


Find the value of X for each figure. Each figure is in centimeters (cm). Not to scale.

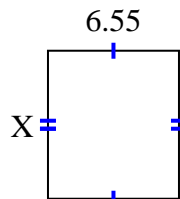
1) area = 58.7324 cm^2



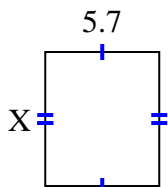
2) area = 51.961 cm^2



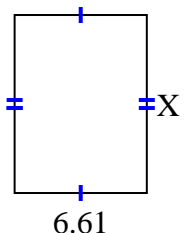
3) area = 48.47 cm^2



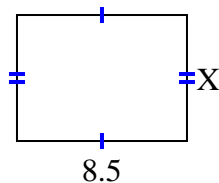
4) area = 38.19 cm^2



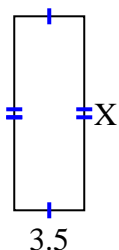
5) area = 58.829 cm^2



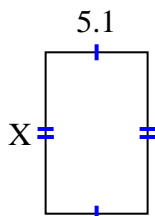
6) area = 53.55 cm^2



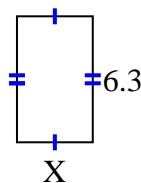
7) area = 33.95 cm^2



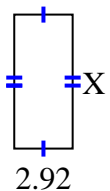
8) area = 41.157 cm^2



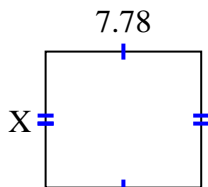
9) area = 23.877 cm^2



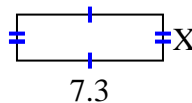
10) area = 19.564 cm^2



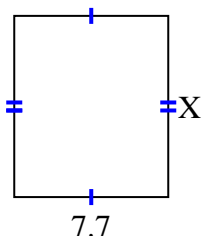
11) area = 52.904 cm^2



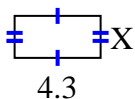
12) area = 16.79 cm^2



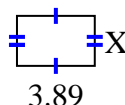
13) area = 69.762 cm^2



14) area = 9.03 cm^2



15) area = 9.725 cm^2



Answers

1. 7.18

2. 9.1

3. 7.4

4. 6.7

5. 8.9

6. 6.3

7. 9.7

8. 8.07

9. 3.79

10. 6.7

11. 6.8

12. 2.3

13. 9.06

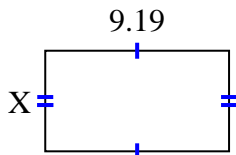
14. 2.1

15. 2.5

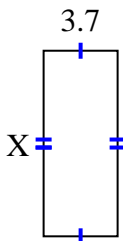


Find the value of X for each figure. Each figure is in centimeters (cm). Not to scale.

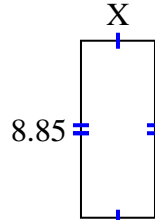
1) area = 46.2257 cm^2



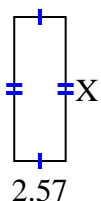
2) area = 34.336 cm^2



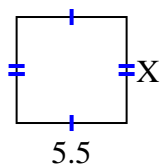
3) area = 32.745 cm^2



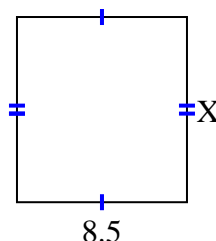
4) area = 18.504 cm^2



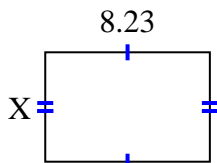
5) area = 29.15 cm^2



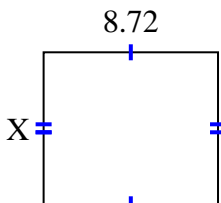
6) area = 78.71 cm^2



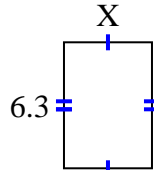
7) area = 45.0181 cm^2



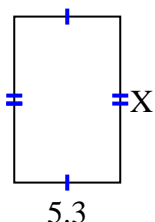
8) area = 66.272 cm^2



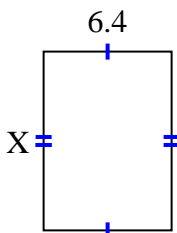
9) area = 27.72 cm^2



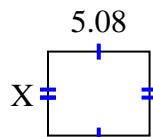
10) area = 43.99 cm^2



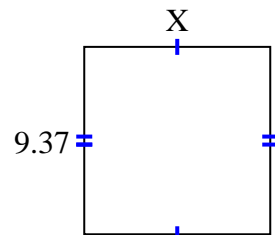
11) area = 57.216 cm^2



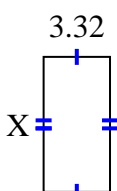
12) area = 21.336 cm^2



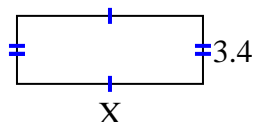
13) area = 87.141 cm^2



14) area = 22.41 cm^2



15) area = 31.62 cm^2



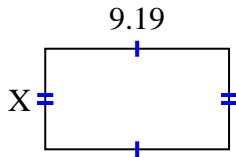
Answers

1. _____
2. _____
3. _____
4. _____
5. _____
6. _____
7. _____
8. _____
9. _____
10. _____
11. _____
12. _____
13. _____
14. _____
15. _____

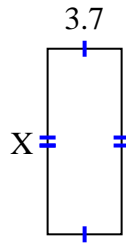


Find the value of X for each figure. Each figure is in centimeters (cm). Not to scale.

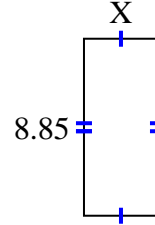
1) area = 46.2257 cm^2



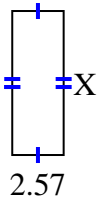
2) area = 34.336 cm^2



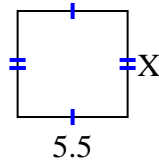
3) area = 32.745 cm^2



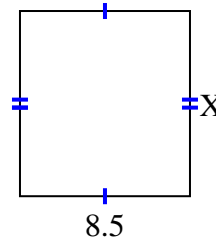
4) area = 18.504 cm^2



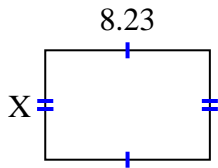
5) area = 29.15 cm^2



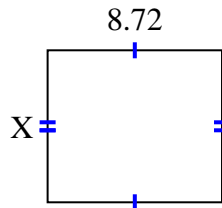
6) area = 78.71 cm^2



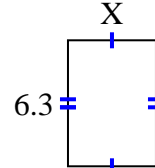
7) area = 45.0181 cm^2



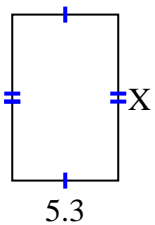
8) area = 66.272 cm^2



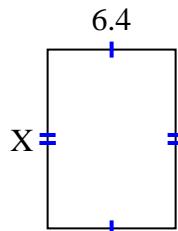
9) area = 27.72 cm^2



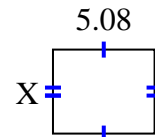
10) area = 43.99 cm^2



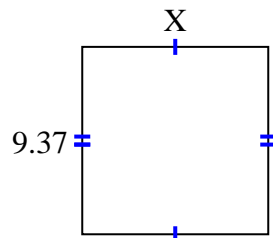
11) area = 57.216 cm^2



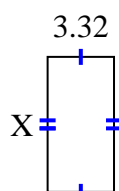
12) area = 21.336 cm^2



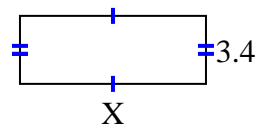
13) area = 87.141 cm^2



14) area = 22.41 cm^2



15) area = 31.62 cm^2



Answers

1. 5.03

2. 9.28

3. 3.7

4. 7.2

5. 5.3

6. 9.26

7. 5.47

8. 7.6

9. 4.4

10. 8.3

11. 8.94

12. 4.2

13. 9.3

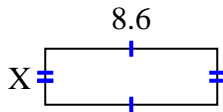
14. 6.75

15. 9.3

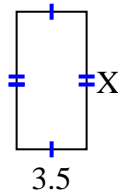


Find the value of X for each figure. Each figure is in centimeters (cm). Not to scale.

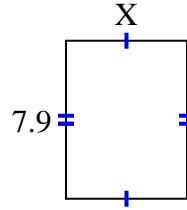
1) area = 24.08 cm^2



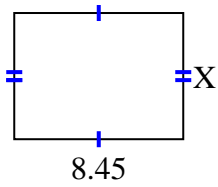
2) area = 24.08 cm^2



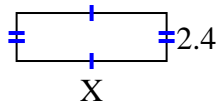
3) area = 47.795 cm^2



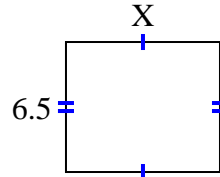
4) area = 53.3195 cm^2



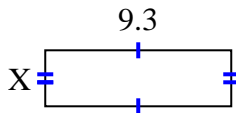
5) area = 18 cm^2



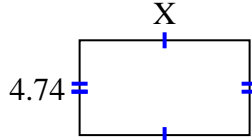
6) area = 50.05 cm^2



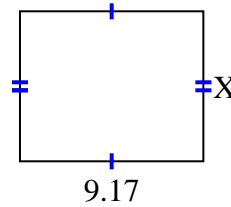
7) area = 26.04 cm^2



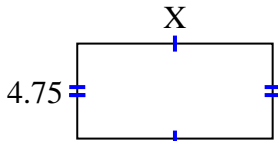
8) area = 40.29 cm^2



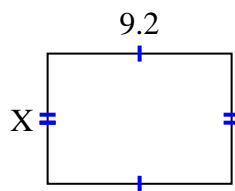
9) area = 68.775 cm^2



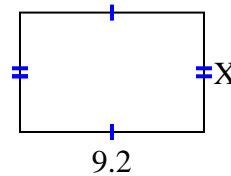
10) area = 46.4075 cm^2



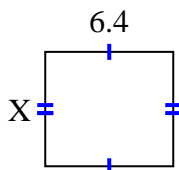
11) area = 59.892 cm^2



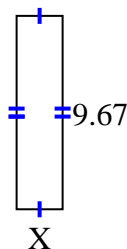
12) area = 54.924 cm^2



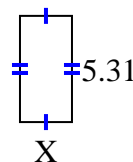
13) area = 36.608 cm^2



14) area = 22.241 cm^2



15) area = 13.806 cm^2



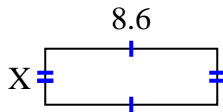
Answers

1. _____
2. _____
3. _____
4. _____
5. _____
6. _____
7. _____
8. _____
9. _____
10. _____
11. _____
12. _____
13. _____
14. _____
15. _____

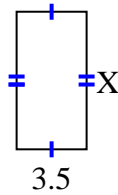


Find the value of X for each figure. Each figure is in centimeters (cm). Not to scale.

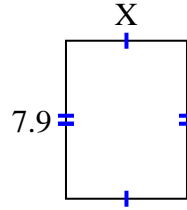
1) area = 24.08 cm^2



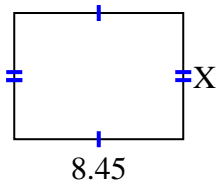
2) area = 24.08 cm^2



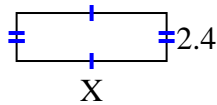
3) area = 47.795 cm^2



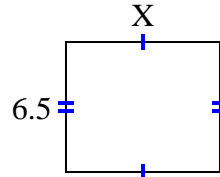
4) area = 53.3195 cm^2



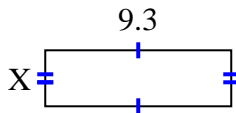
5) area = 18 cm^2



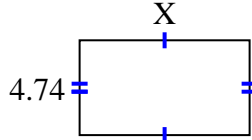
6) area = 50.05 cm^2



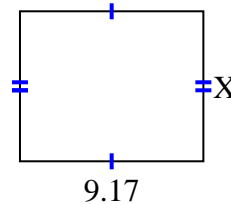
7) area = 26.04 cm^2



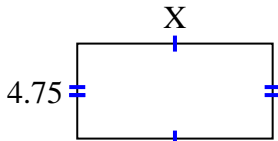
8) area = 40.29 cm^2



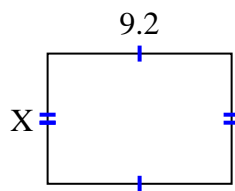
9) area = 68.775 cm^2



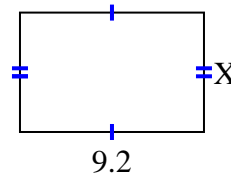
10) area = 46.4075 cm^2



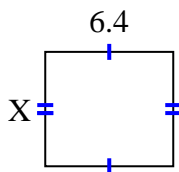
11) area = 59.892 cm^2



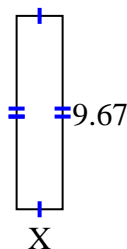
12) area = 54.924 cm^2



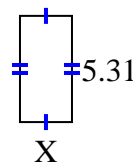
13) area = 36.608 cm^2



14) area = 22.241 cm^2



15) area = 13.806 cm^2



Answers

1. 2.8

2. 6.88

3. 6.05

4. 6.31

5. 7.5

6. 7.7

7. 2.8

8. 8.5

9. 7.5

10. 9.77

11. 6.51

12. 5.97

13. 5.72

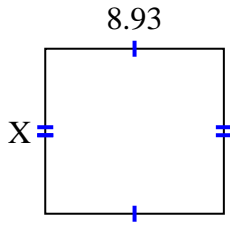
14. 2.3

15. 2.6

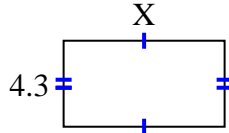


Find the value of X for each figure. Each figure is in centimeters (cm). Not to scale.

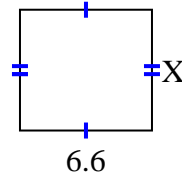
1) area = 73.6725 cm^2



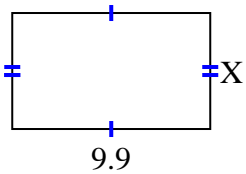
2) area = 34.615 cm^2



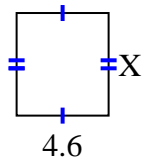
3) area = 39.864 cm^2



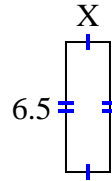
4) area = 57.42 cm^2



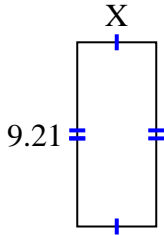
5) area = 23.598 cm^2



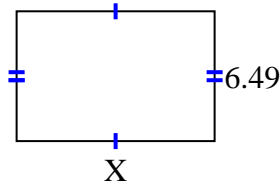
6) area = 14.3 cm^2



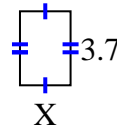
7) area = 36.3795 cm^2



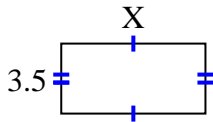
8) area = 64.251 cm^2



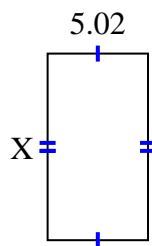
9) area = 9.361 cm^2



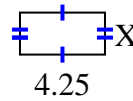
10) area = 25.235 cm^2



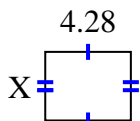
11) area = 46.8366 cm^2



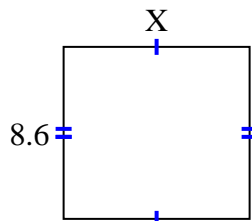
12) area = 8.925 cm^2



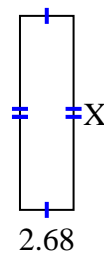
13) area = 14.6804 cm^2



14) area = 79.98 cm^2



15) area = 25.996 cm^2



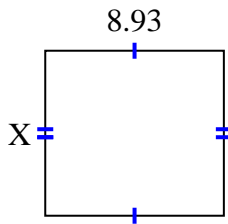
Answers

1. _____
2. _____
3. _____
4. _____
5. _____
6. _____
7. _____
8. _____
9. _____
10. _____
11. _____
12. _____
13. _____
14. _____
15. _____

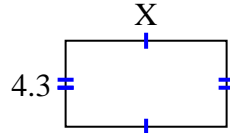


Find the value of X for each figure. Each figure is in centimeters (cm). Not to scale.

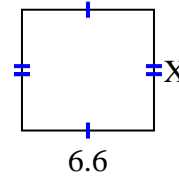
1) area = 73.6725 cm^2



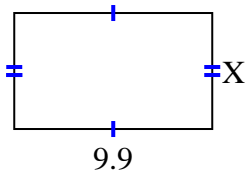
2) area = 34.615 cm^2



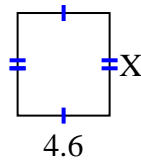
3) area = 39.864 cm^2



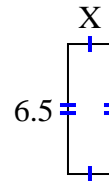
4) area = 57.42 cm^2



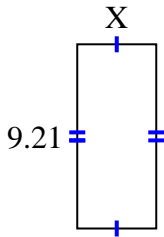
5) area = 23.598 cm^2



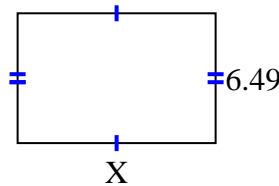
6) area = 14.3 cm^2



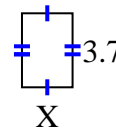
7) area = 36.3795 cm^2



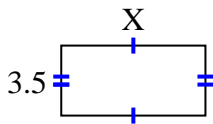
8) area = 64.251 cm^2



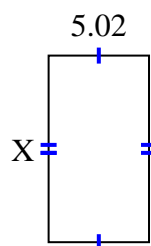
9) area = 9.361 cm^2



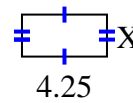
10) area = 25.235 cm^2



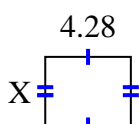
11) area = 46.8366 cm^2



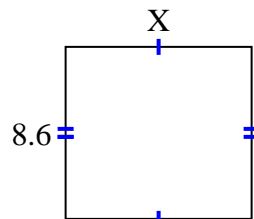
12) area = 8.925 cm^2



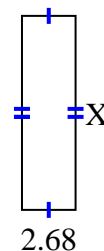
13) area = 14.6804 cm^2



14) area = 79.98 cm^2



15) area = 25.996 cm^2



Answers

1. 8.25

2. 8.05

3. 6.04

4. 5.8

5. 5.13

6. 2.2

7. 3.95

8. 9.9

9. 2.53

10. 7.21

11. 9.33

12. 2.1

13. 3.43

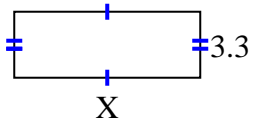
14. 9.3

15. 9.7

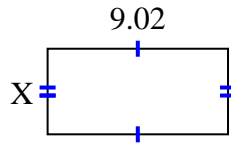


Find the value of X for each figure. Each figure is in centimeters (cm). Not to scale.

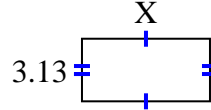
1) area = 30.69 cm^2



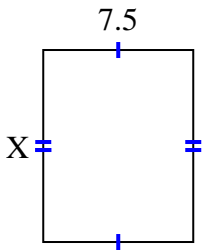
2) area = 38.6056 cm^2



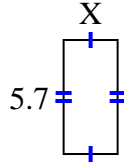
3) area = 20.032 cm^2



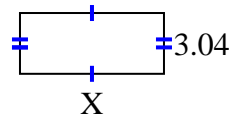
4) area = 72 cm^2



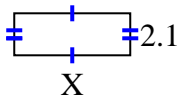
5) area = 15.39 cm^2



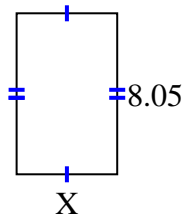
6) area = 21.888 cm^2



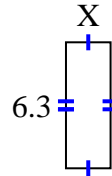
7) area = 12.18 cm^2



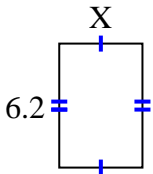
8) area = 40.4915 cm^2



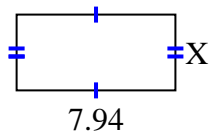
9) area = 14.049 cm^2



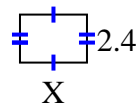
10) area = 25.792 cm^2



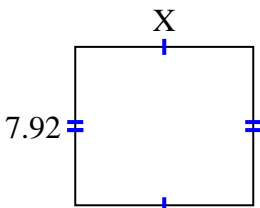
11) area = 30.0926 cm^2



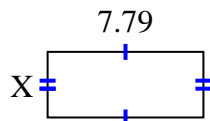
12) area = 8.04 cm^2



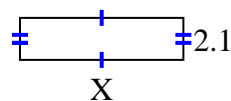
13) area = 70.488 cm^2



14) area = 25.5512 cm^2



15) area = 17.157 cm^2



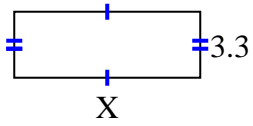
Answers

1. _____
2. _____
3. _____
4. _____
5. _____
6. _____
7. _____
8. _____
9. _____
10. _____
11. _____
12. _____
13. _____
14. _____
15. _____

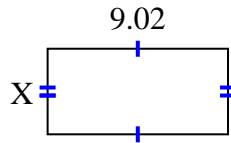


Find the value of X for each figure. Each figure is in centimeters (cm). Not to scale.

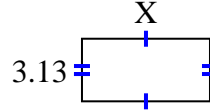
1) area = 30.69 cm^2



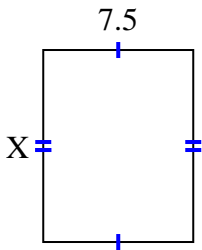
2) area = 38.6056 cm^2



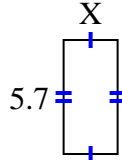
3) area = 20.032 cm^2



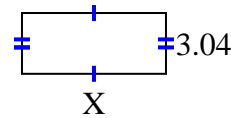
4) area = 72 cm^2



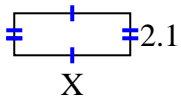
5) area = 15.39 cm^2



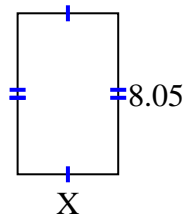
6) area = 21.888 cm^2



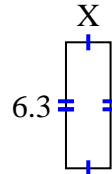
7) area = 12.18 cm^2



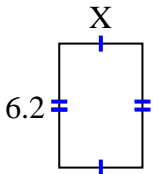
8) area = 40.4915 cm^2



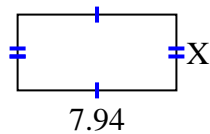
9) area = 14.049 cm^2



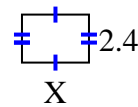
10) area = 25.792 cm^2



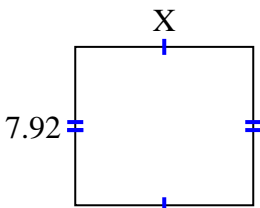
11) area = 30.0926 cm^2



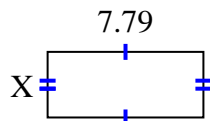
12) area = 8.04 cm^2



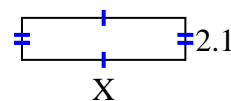
13) area = 70.488 cm^2



14) area = 25.5512 cm^2



15) area = 17.157 cm^2



Answers

1. 9.3

2. 4.28

3. 6.4

4. 9.6

5. 2.7

6. 7.2

7. 5.8

8. 5.03

9. 2.23

10. 4.16

11. 3.79

12. 3.35

13. 8.9

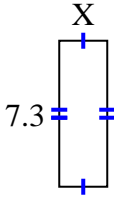
14. 3.28

15. 8.17

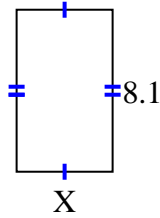


Find the value of X for each figure. Each figure is in centimeters (cm). Not to scale.

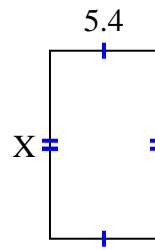
1) area = 17.52 cm^2



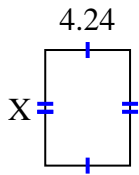
2) area = 38.88 cm^2



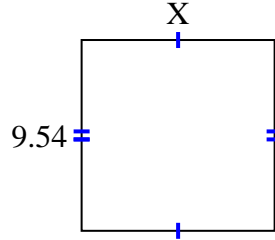
3) area = 50.76 cm^2



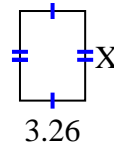
4) area = 24.5072 cm^2



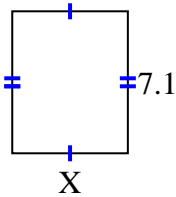
5) area = 92.061 cm^2



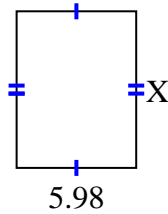
6) area = 14.6048 cm^2



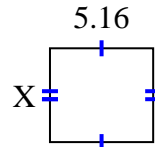
7) area = 41.038 cm^2



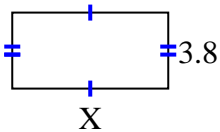
8) area = 46.8234 cm^2



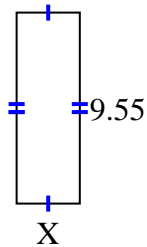
9) area = 24.2004 cm^2



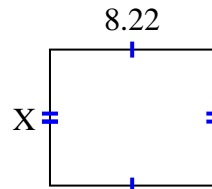
10) area = 29.64 cm^2



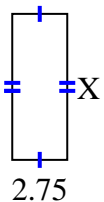
11) area = 30.178 cm^2



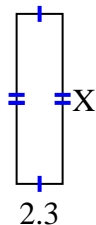
12) area = 55.896 cm^2



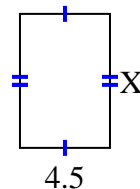
13) area = 20.075 cm^2



14) area = 19.55 cm^2



15) area = 30.15 cm^2



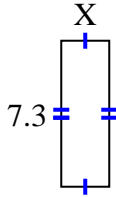
Answers

1. _____
2. _____
3. _____
4. _____
5. _____
6. _____
7. _____
8. _____
9. _____
10. _____
11. _____
12. _____
13. _____
14. _____
15. _____

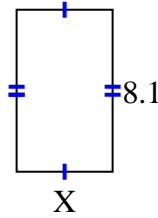


Find the value of X for each figure. Each figure is in centimeters (cm). Not to scale.

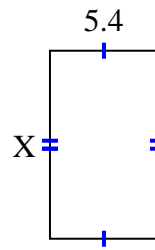
1) area = 17.52 cm^2



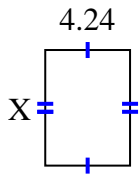
2) area = 38.88 cm^2



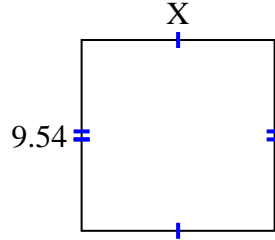
3) area = 50.76 cm^2



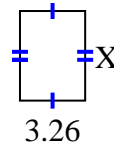
4) area = 24.5072 cm^2



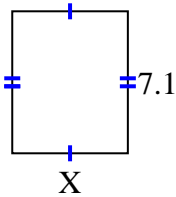
5) area = 92.061 cm^2



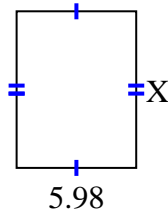
6) area = 14.6048 cm^2



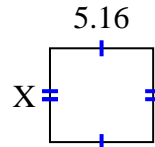
7) area = 41.038 cm^2



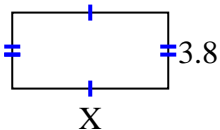
8) area = 46.8234 cm^2



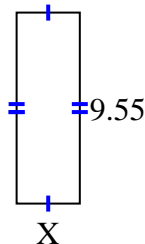
9) area = 24.2004 cm^2



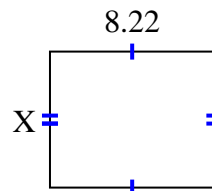
10) area = 29.64 cm^2



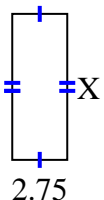
11) area = 30.178 cm^2



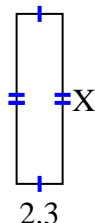
12) area = 55.896 cm^2



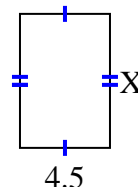
13) area = 20.075 cm^2



14) area = 19.55 cm^2



15) area = 30.15 cm^2



Answers

1. 2.4

2. 4.8

3. 9.4

4. 5.78

5. 9.65

6. 4.48

7. 5.78

8. 7.83

9. 4.69

10. 7.8

11. 3.16

12. 6.8

13. 7.3

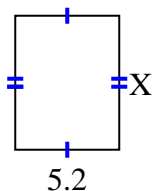
14. 8.5

15. 6.7

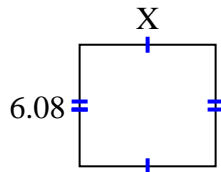


Find the value of X for each figure. Each figure is in centimeters (cm). Not to scale.

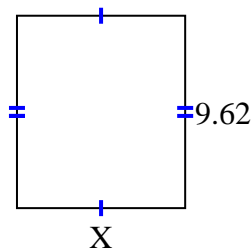
1) area = 34.84 cm^2



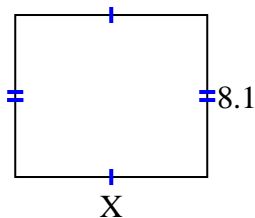
2) area = 41.344 cm^2



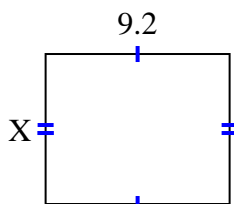
3) area = 80.9042 cm^2



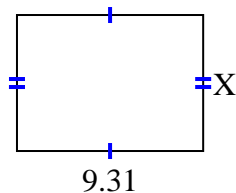
4) area = 77.76 cm^2



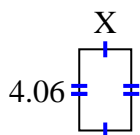
5) area = 69 cm^2



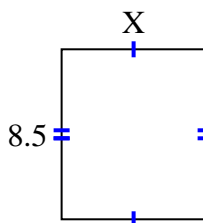
6) area = 63.308 cm^2



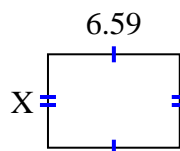
7) area = 10.556 cm^2



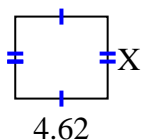
8) area = 61.2 cm^2



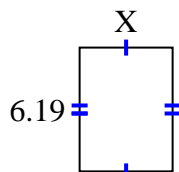
9) area = 30.7753 cm^2



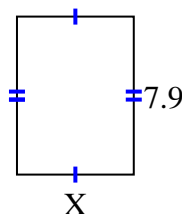
10) area = 18.942 cm^2



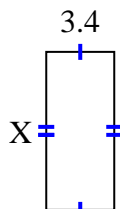
11) area = 28.7835 cm^2



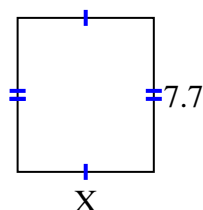
12) area = 46.136 cm^2



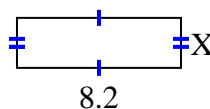
13) area = 26.86 cm^2



14) area = 52.437 cm^2



15) area = 20.5 cm^2



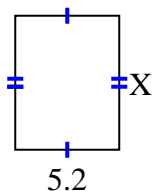
Answers

1. _____
2. _____
3. _____
4. _____
5. _____
6. _____
7. _____
8. _____
9. _____
10. _____
11. _____
12. _____
13. _____
14. _____
15. _____

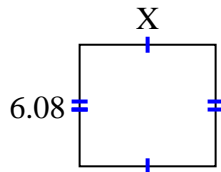


Find the value of X for each figure. Each figure is in centimeters (cm). Not to scale.

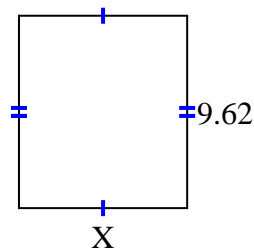
1) area = 34.84 cm^2



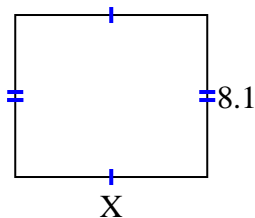
2) area = 41.344 cm^2



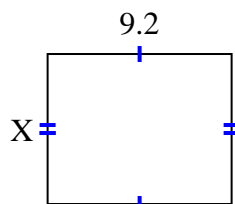
3) area = 80.9042 cm^2



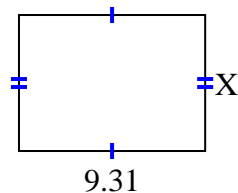
4) area = 77.76 cm^2



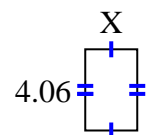
5) area = 69 cm^2



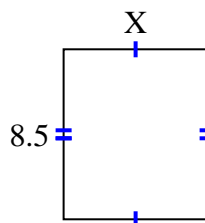
6) area = 63.308 cm^2



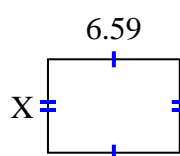
7) area = 10.556 cm^2



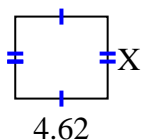
8) area = 61.2 cm^2



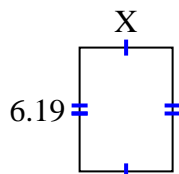
9) area = 30.7753 cm^2



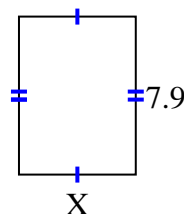
10) area = 18.942 cm^2



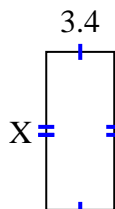
11) area = 28.7835 cm^2



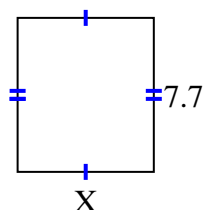
12) area = 46.136 cm^2



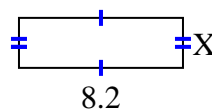
13) area = 26.86 cm^2



14) area = 52.437 cm^2



15) area = 20.5 cm^2



Answers

1. 6.7

2. 6.8

3. 8.41

4. 9.6

5. 7.5

6. 6.8

7. 2.6

8. 7.2

9. 4.67

10. 4.1

11. 4.65

12. 5.84

13. 7.9

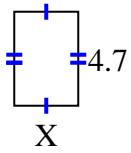
14. 6.81

15. 2.5

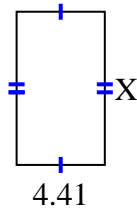


Find the value of X for each figure. Each figure is in centimeters (cm). Not to scale.

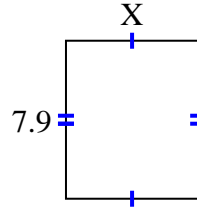
1) area = 15.04 cm^2



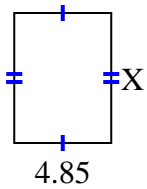
2) area = 33.7806 cm^2



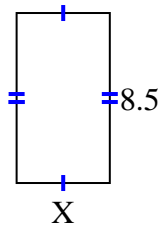
3) area = 52.219 cm^2



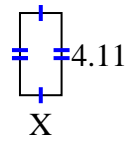
4) area = 31.525 cm^2



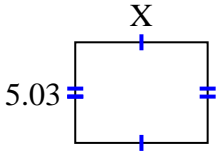
5) area = 39.61 cm^2



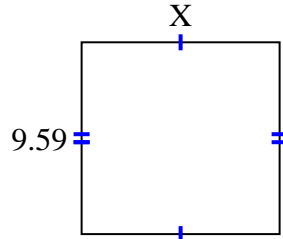
6) area = 8.5488 cm^2



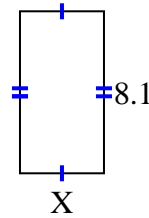
7) area = 33.2986 cm^2



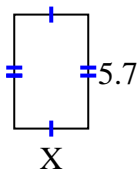
8) area = 94.941 cm^2



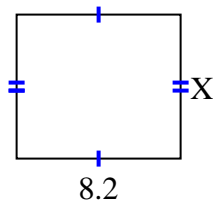
9) area = 34.02 cm^2



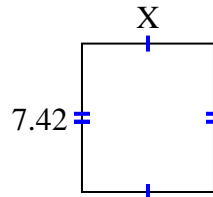
10) area = 21.09 cm^2



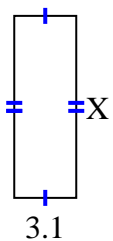
11) area = 59.04 cm^2



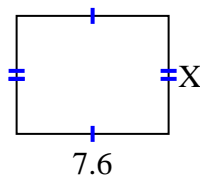
12) area = 48.972 cm^2



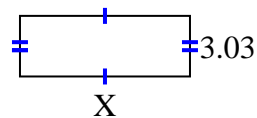
13) area = 28.21 cm^2



14) area = 44.84 cm^2



15) area = 25.755 cm^2



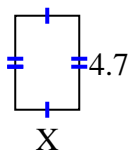
Answers

1. _____
2. _____
3. _____
4. _____
5. _____
6. _____
7. _____
8. _____
9. _____
10. _____
11. _____
12. _____
13. _____
14. _____
15. _____

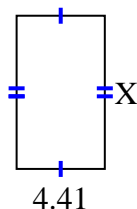


Find the value of X for each figure. Each figure is in centimeters (cm). Not to scale.

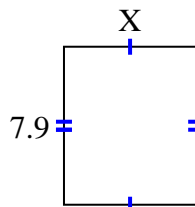
1) area = 15.04 cm^2



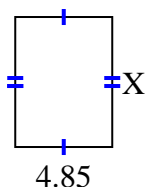
2) area = 33.7806 cm^2



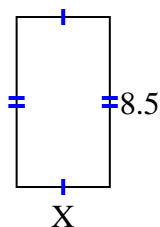
3) area = 52.219 cm^2



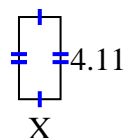
4) area = 31.525 cm^2



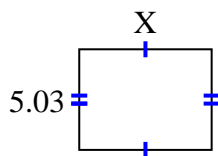
5) area = 39.61 cm^2



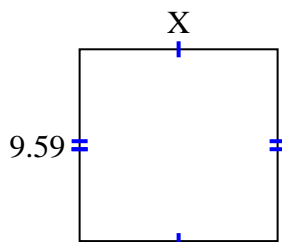
6) area = 8.5488 cm^2



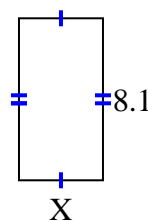
7) area = 33.2986 cm^2



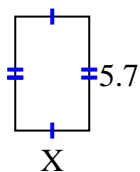
8) area = 94.941 cm^2



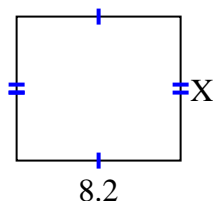
9) area = 34.02 cm^2



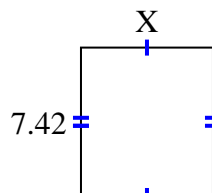
10) area = 21.09 cm^2



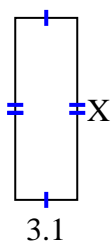
11) area = 59.04 cm^2



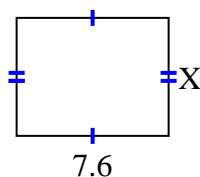
12) area = 48.972 cm^2



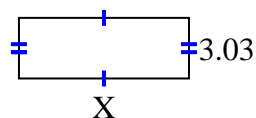
13) area = 28.21 cm^2



14) area = 44.84 cm^2



15) area = 25.755 cm^2



Answers

1. 3.2

2. 7.66

3. 6.61

4. 6.5

5. 4.66

6. 2.08

7. 6.62

8. 9.9

9. 4.2

10. 3.7

11. 7.2

12. 6.6

13. 9.1

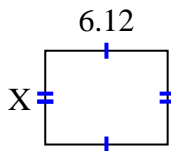
14. 5.9

15. 8.5

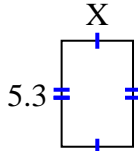


Find the value of X for each figure. Each figure is in centimeters (cm). Not to scale.

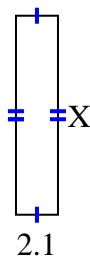
1) area = 28.7028 cm^2



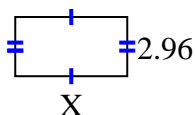
2) area = 18.921 cm^2



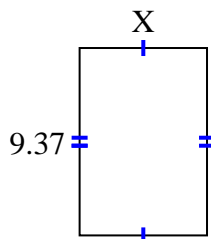
3) area = 20.895 cm^2



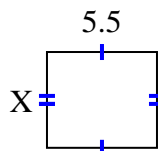
4) area = 16.576 cm^2



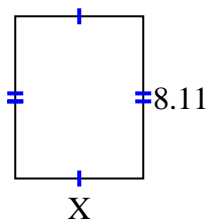
5) area = 59.6869 cm^2



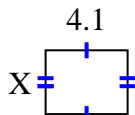
6) area = 26.345 cm^2



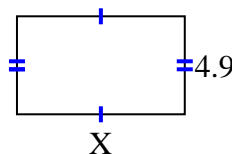
7) area = 51.904 cm^2



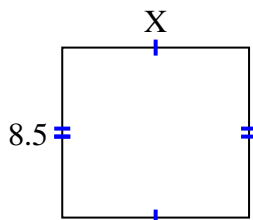
8) area = 13.079 cm^2



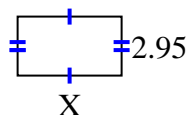
9) area = 41.111 cm^2



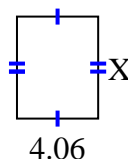
10) area = 79.39 cm^2



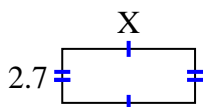
11) area = 15.34 cm^2



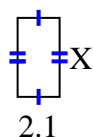
12) area = 20.706 cm^2



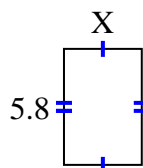
13) area = 17.928 cm^2



14) area = 8.295 cm^2



15) area = 22.562 cm^2



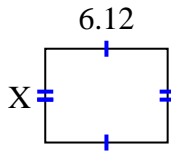
Answers

1. _____
2. _____
3. _____
4. _____
5. _____
6. _____
7. _____
8. _____
9. _____
10. _____
11. _____
12. _____
13. _____
14. _____
15. _____

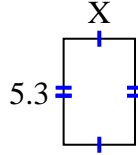


Find the value of X for each figure. Each figure is in centimeters (cm). Not to scale.

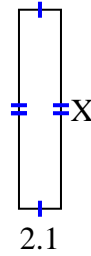
1) area = 28.7028 cm^2



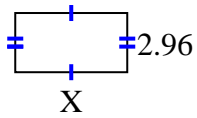
2) area = 18.921 cm^2



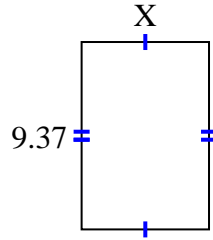
3) area = 20.895 cm^2



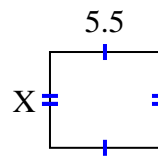
4) area = 16.576 cm^2



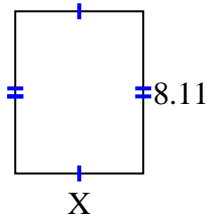
5) area = 59.6869 cm^2



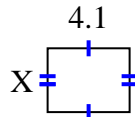
6) area = 26.345 cm^2



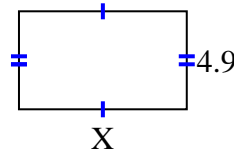
7) area = 51.904 cm^2



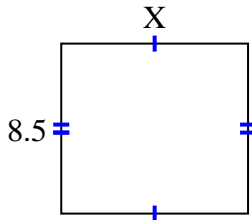
8) area = 13.079 cm^2



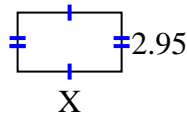
9) area = 41.111 cm^2



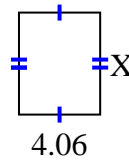
10) area = 79.39 cm^2



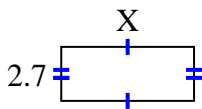
11) area = 15.34 cm^2



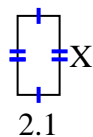
12) area = 20.706 cm^2



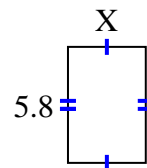
13) area = 17.928 cm^2



14) area = 8.295 cm^2



15) area = 22.562 cm^2



Answers

1. 4.69

2. 3.57

3. 9.95

4. 5.6

5. 6.37

6. 4.79

7. 6.4

8. 3.19

9. 8.39

10. 9.34

11. 5.2

12. 5.1

13. 6.64

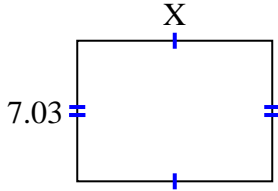
14. 3.95

15. 3.89

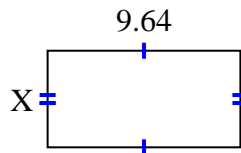


Find the value of X for each figure. Each figure is in centimeters (cm). Not to scale.

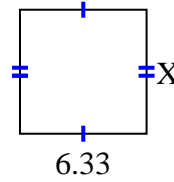
1) area = 68.5425 cm^2



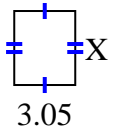
2) area = 46.5612 cm^2



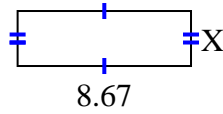
3) area = 39.246 cm^2



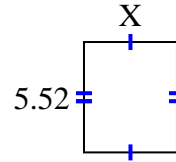
4) area = 11.285 cm^2



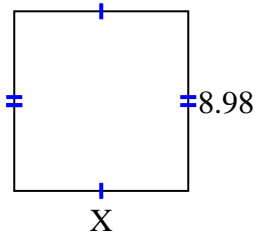
5) area = 23.8425 cm^2



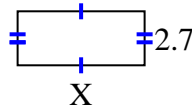
6) area = 25.668 cm^2



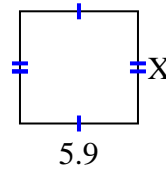
7) area = 78.126 cm^2



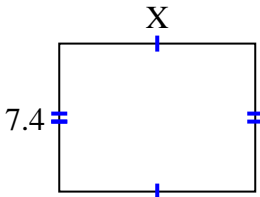
8) area = 17.145 cm^2



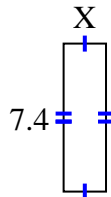
9) area = 33.099 cm^2



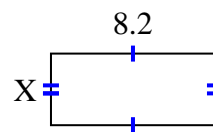
10) area = 72.52 cm^2



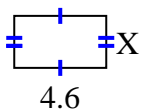
11) area = 15.688 cm^2



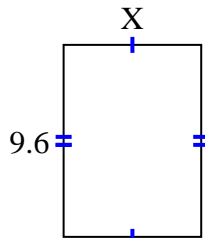
12) area = 29.356 cm^2



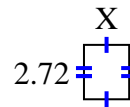
13) area = 11.96 cm^2



14) area = 66.048 cm^2



15) area = 6.1472 cm^2



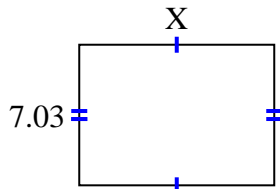
Answers

1. _____
2. _____
3. _____
4. _____
5. _____
6. _____
7. _____
8. _____
9. _____
10. _____
11. _____
12. _____
13. _____
14. _____
15. _____

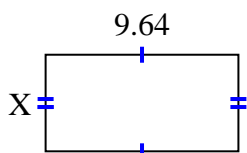


Find the value of X for each figure. Each figure is in centimeters (cm). Not to scale.

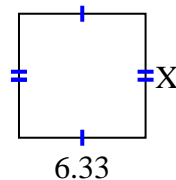
1) area = 68.5425 cm^2



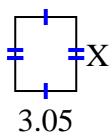
2) area = 46.5612 cm^2



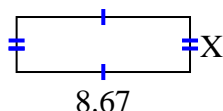
3) area = 39.246 cm^2



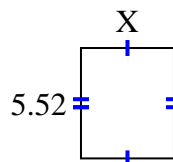
4) area = 11.285 cm^2



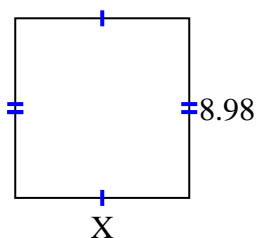
5) area = 23.8425 cm^2



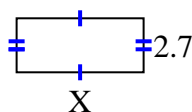
6) area = 25.668 cm^2



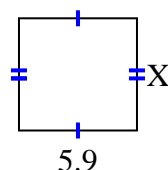
7) area = 78.126 cm^2



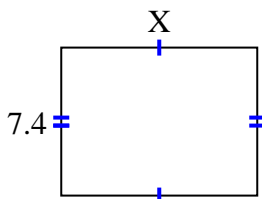
8) area = 17.145 cm^2



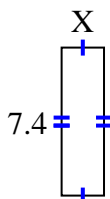
9) area = 33.099 cm^2



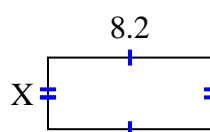
10) area = 72.52 cm^2



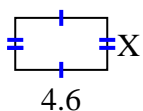
11) area = 15.688 cm^2



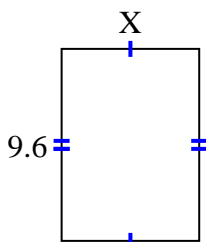
12) area = 29.356 cm^2



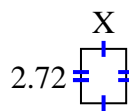
13) area = 11.96 cm^2



14) area = 66.048 cm^2



15) area = 6.1472 cm^2



Answers

1. 9.75

2. 4.83

3. 6.2

4. 3.7

5. 2.75

6. 4.65

7. 8.7

8. 6.35

9. 5.61

10. 9.8

11. 2.12

12. 3.58

13. 2.6

14. 6.88

15. 2.26