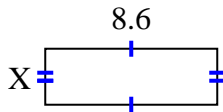


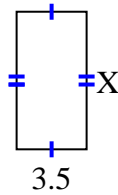


Find the value of X for each figure. Each figure is in centimeters (cm). Not to scale.

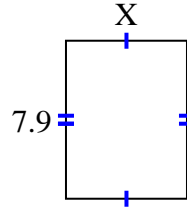
1) area = 24.08 cm^2



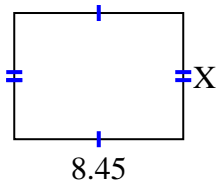
2) area = 24.08 cm^2



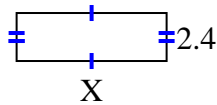
3) area = 47.795 cm^2



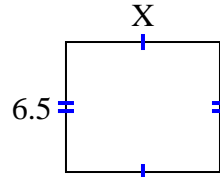
4) area = 53.3195 cm^2



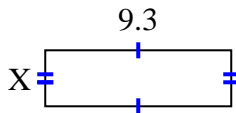
5) area = 18 cm^2



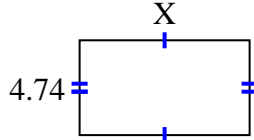
6) area = 50.05 cm^2



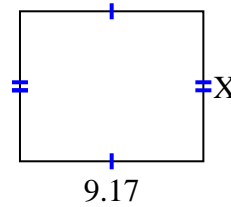
7) area = 26.04 cm^2



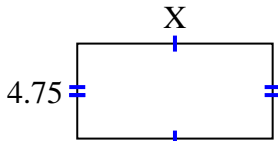
8) area = 40.29 cm^2



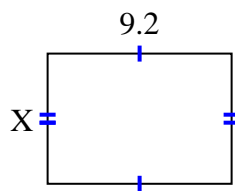
9) area = 68.775 cm^2



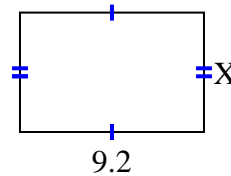
10) area = 46.4075 cm^2



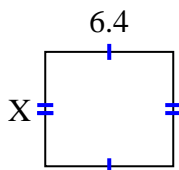
11) area = 59.892 cm^2



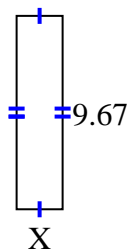
12) area = 54.924 cm^2



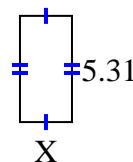
13) area = 36.608 cm^2



14) area = 22.241 cm^2



15) area = 13.806 cm^2



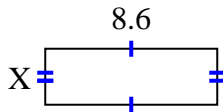
Answers

1. _____
2. _____
3. _____
4. _____
5. _____
6. _____
7. _____
8. _____
9. _____
10. _____
11. _____
12. _____
13. _____
14. _____
15. _____

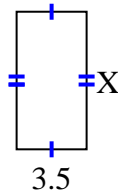


Find the value of X for each figure. Each figure is in centimeters (cm). Not to scale.

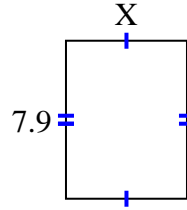
1) area = 24.08 cm^2



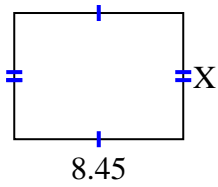
2) area = 24.08 cm^2



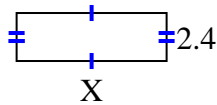
3) area = 47.795 cm^2



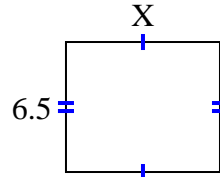
4) area = 53.3195 cm^2



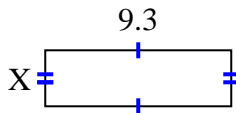
5) area = 18 cm^2



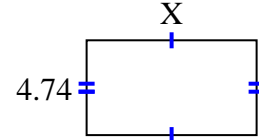
6) area = 50.05 cm^2



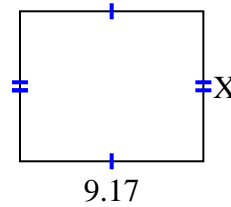
7) area = 26.04 cm^2



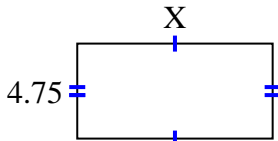
8) area = 40.29 cm^2



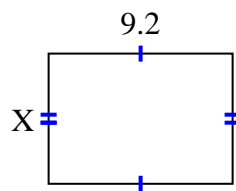
9) area = 68.775 cm^2



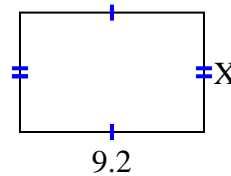
10) area = 46.4075 cm^2



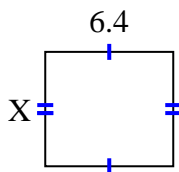
11) area = 59.892 cm^2



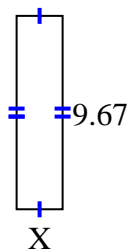
12) area = 54.924 cm^2



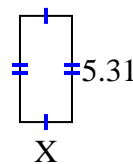
13) area = 36.608 cm^2



14) area = 22.241 cm^2



15) area = 13.806 cm^2



Answers

1. 2.8

2. 6.88

3. 6.05

4. 6.31

5. 7.5

6. 7.7

7. 2.8

8. 8.5

9. 7.5

10. 9.77

11. 6.51

12. 5.97

13. 5.72

14. 2.3

15. 2.6