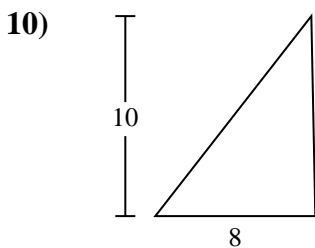
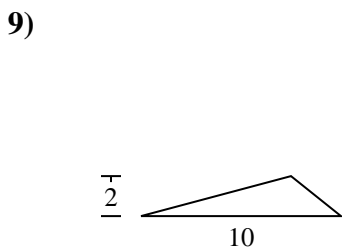
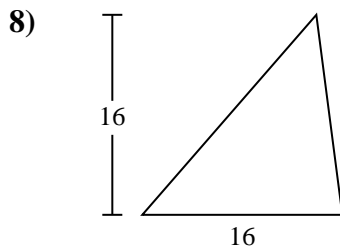
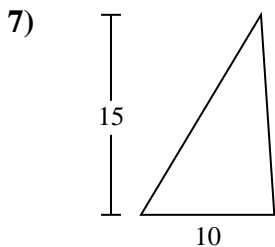
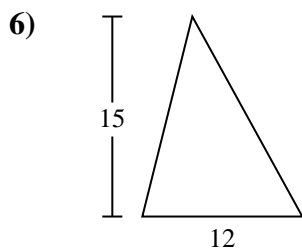
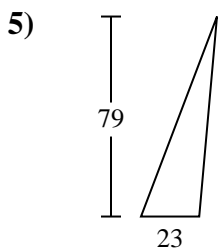
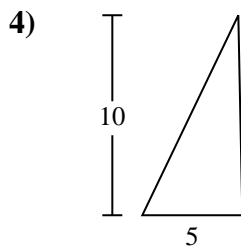
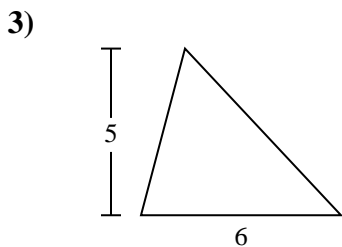
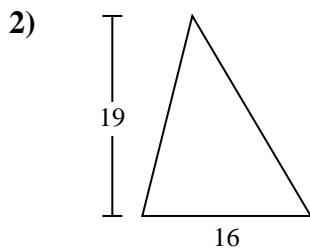
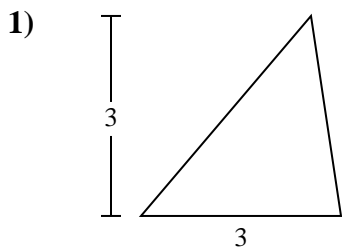




Find the area of the triangle. Round your answer to the nearest 10th.

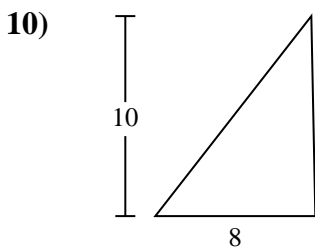
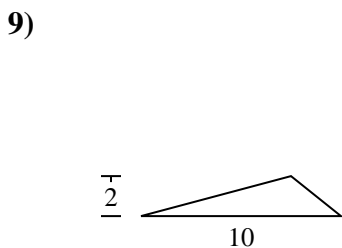
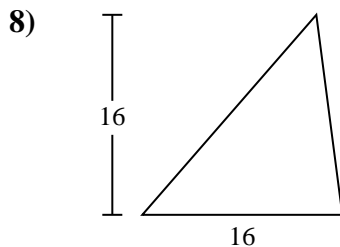
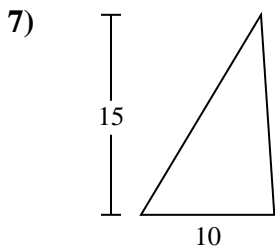
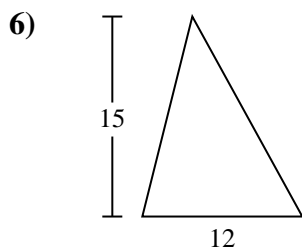
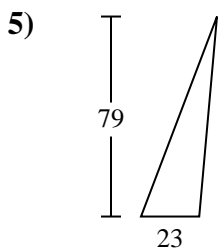
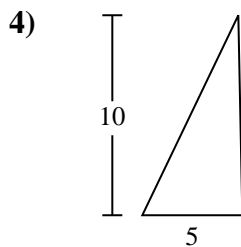
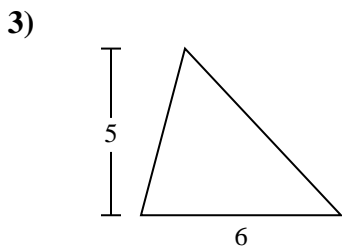
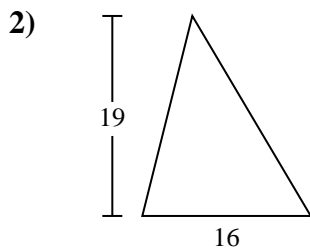
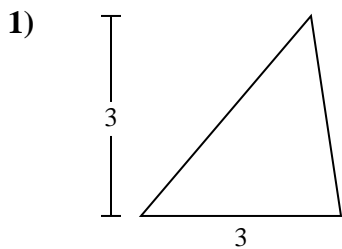


Answers

- 1. _____
- 2. _____
- 3. _____
- 4. _____
- 5. _____
- 6. _____
- 7. _____
- 8. _____
- 9. _____
- 10. _____



Find the area of the triangle. Round your answer to the nearest 10th.



Answers

1. 4.5

2. 152

3. 15

4. 25

5. 908.5

6. 90

7. 75

8. 128

9. 10

10. 40



Find the area of the triangle. Round your answer to the nearest 10th.

75

4.5

908.5

90

10

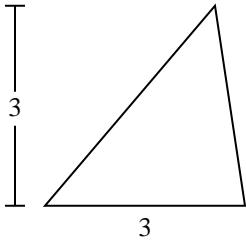
25

152

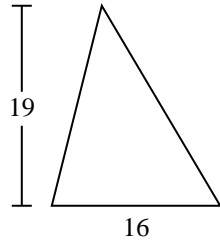
15

128

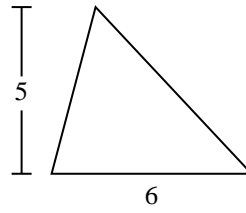
1)



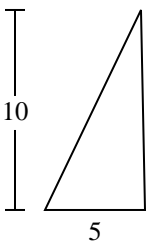
2)



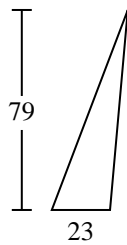
3)



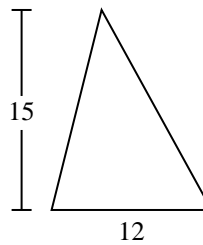
4)



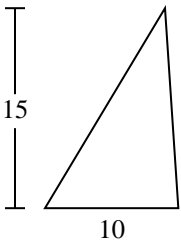
5)



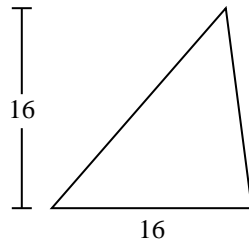
6)



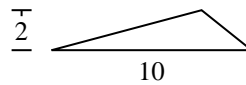
7)



8)



9)



Answers

1. _____
2. _____
3. _____
4. _____
5. _____
6. _____
7. _____
8. _____
9. _____