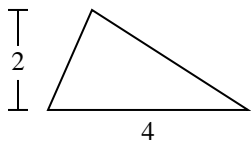


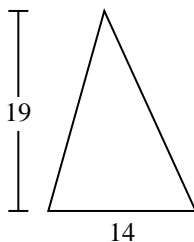


Find the area of the triangle. Round your answer to the nearest 10th.

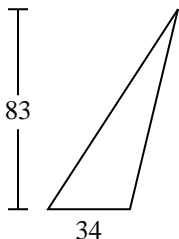
1)



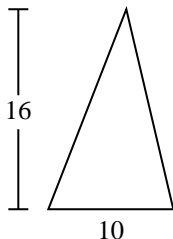
2)



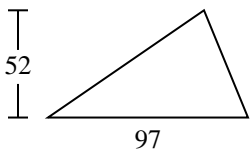
3)



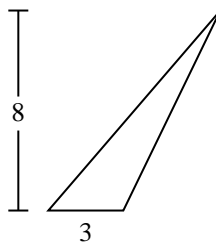
4)



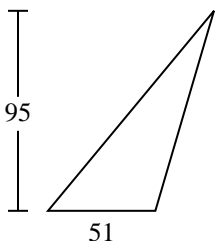
5)



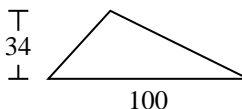
6)



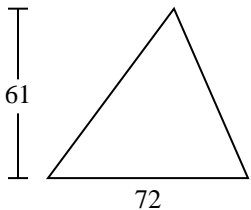
7)



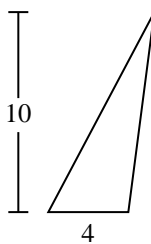
8)



9)



10)



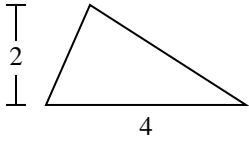
Answers

1. \_\_\_\_\_
2. \_\_\_\_\_
3. \_\_\_\_\_
4. \_\_\_\_\_
5. \_\_\_\_\_
6. \_\_\_\_\_
7. \_\_\_\_\_
8. \_\_\_\_\_
9. \_\_\_\_\_
10. \_\_\_\_\_

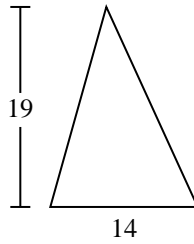


Find the area of the triangle. Round your answer to the nearest 10th.

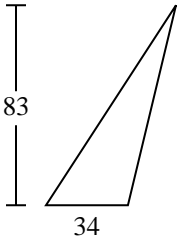
1)



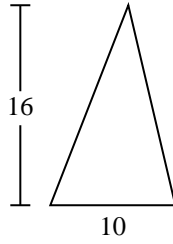
2)



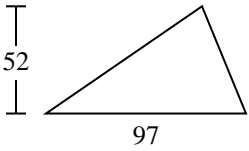
3)



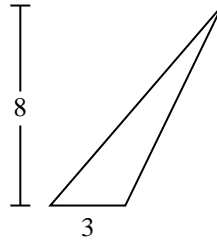
4)



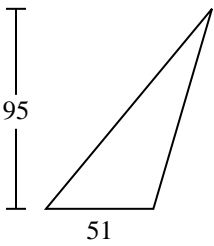
5)



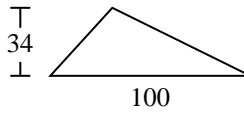
6)



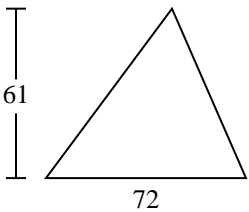
7)



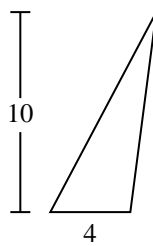
8)



9)



10)



Answers

1. 4
2. 133
3. 1,411
4. 80
5. 2,522
6. 12
7. 2,422.5
8. 1,700
9. 2,196
10. 20

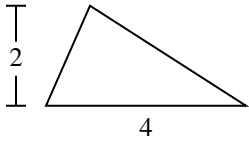


Find the area of the triangle. Round your answer to the nearest 10th.

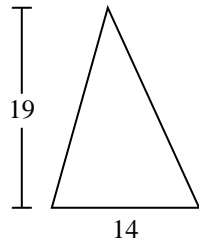
133	4	1,411	2,522	2,196
1,700	2,422.5	80	12	

Answers

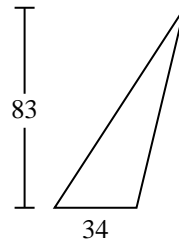
1)



2)



3)



1. \_\_\_\_\_

2. \_\_\_\_\_

3. \_\_\_\_\_

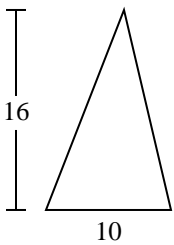
4. \_\_\_\_\_

5. \_\_\_\_\_

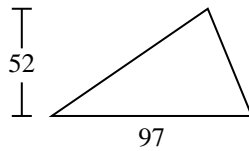
6. \_\_\_\_\_

7. \_\_\_\_\_

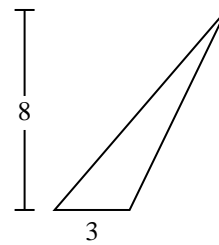
4)



5)



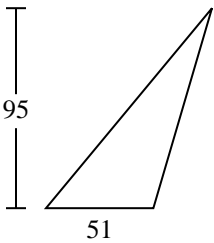
6)



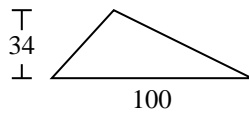
8. \_\_\_\_\_

9. \_\_\_\_\_

7)



8)



9)

