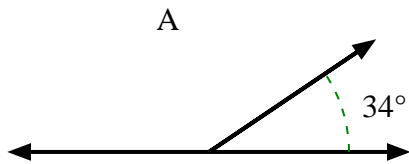


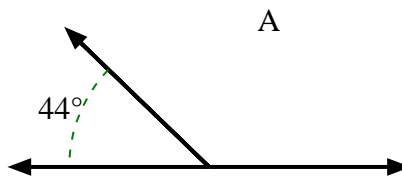


Find the value of 'A' in the set of supplementary angles.

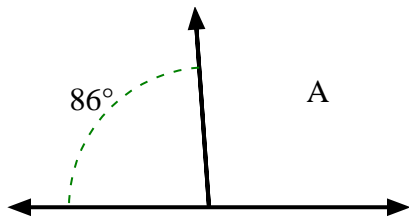
1)



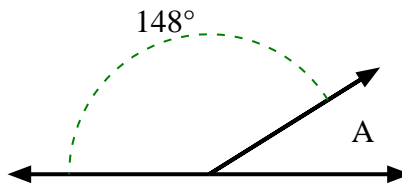
2)



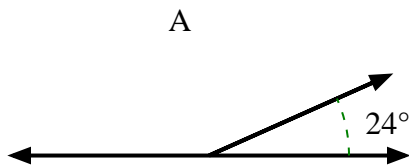
3)



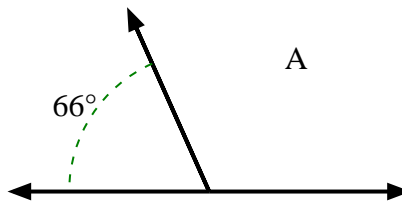
4)



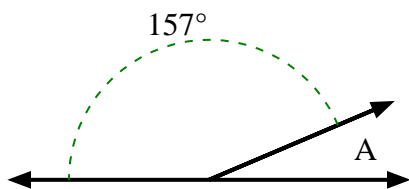
5)



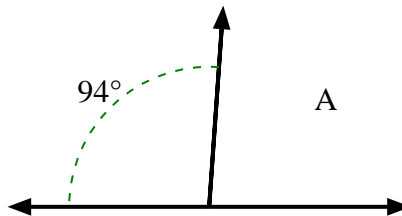
6)



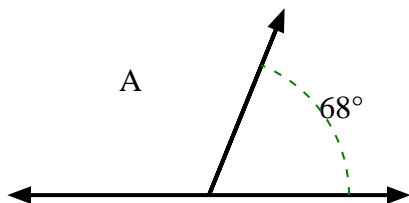
7)



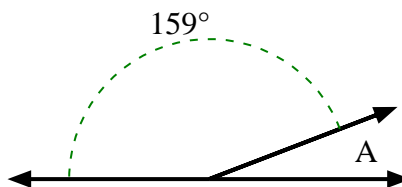
8)



9)



10)



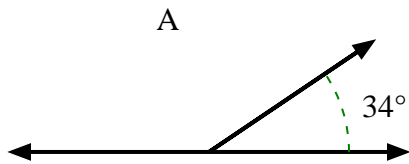
Answers

1. _____
2. _____
3. _____
4. _____
5. _____
6. _____
7. _____
8. _____
9. _____
10. _____

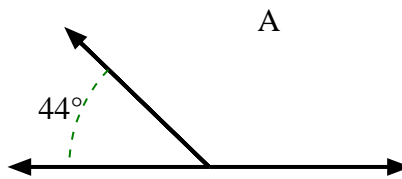


Find the value of 'A' in the set of supplementary angles.

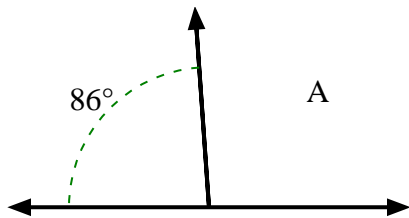
1)



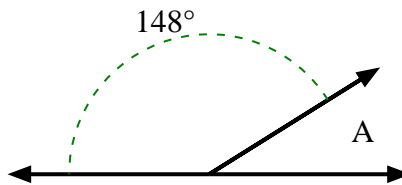
2)



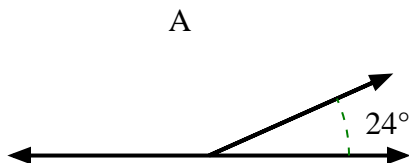
3)



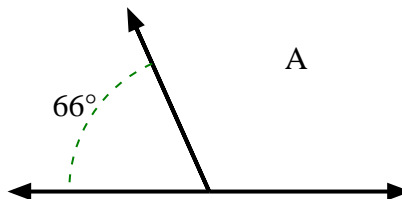
4)



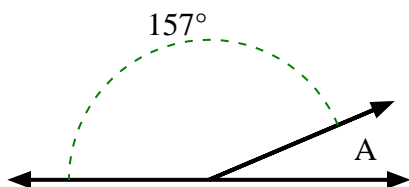
5)



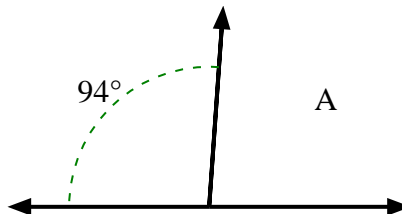
6)



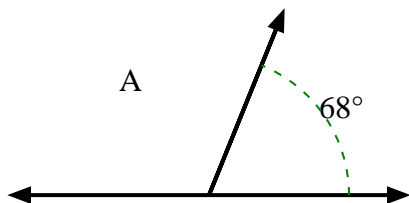
7)



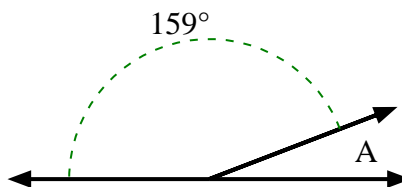
8)



9)



10)



Answers

1. **146°**

2. **136°**

3. **94°**

4. **32°**

5. **156°**

6. **114°**

7. **23°**

8. **86°**

9. **112°**

10. **21°**