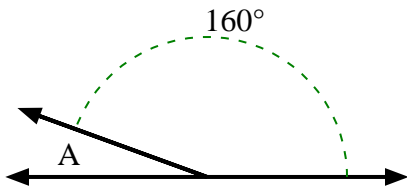




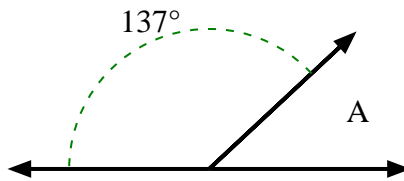
Find the value of 'A' in the set of supplementary angles.

Answers

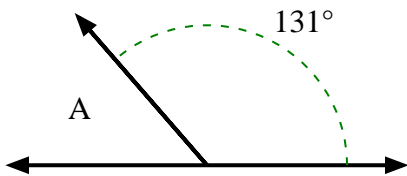
1)



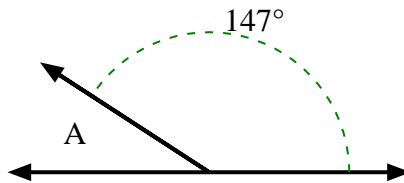
2)



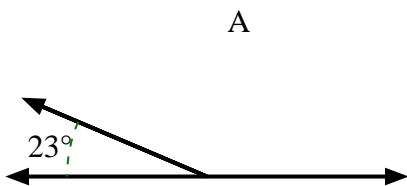
3)



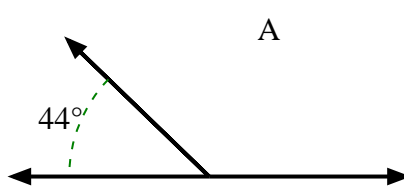
4)



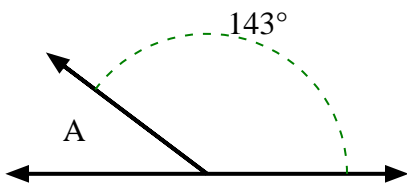
5)



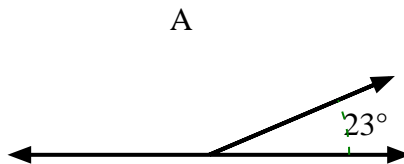
6)



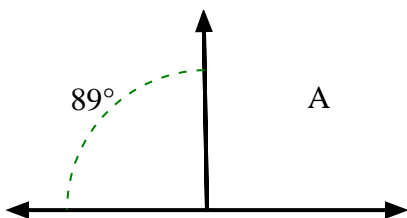
7)



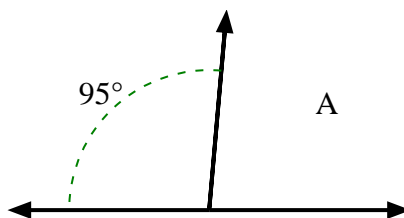
8)



9)



10)

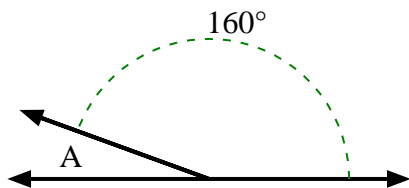


- 1. _____
- 2. _____
- 3. _____
- 4. _____
- 5. _____
- 6. _____
- 7. _____
- 8. _____
- 9. _____
- 10. _____

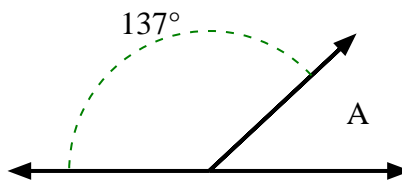


Find the value of 'A' in the set of supplementary angles.

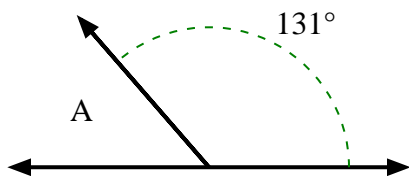
1)



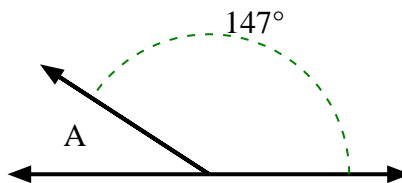
2)



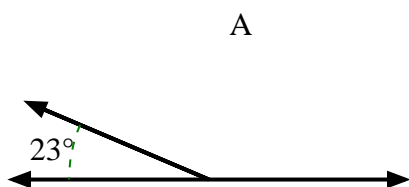
3)



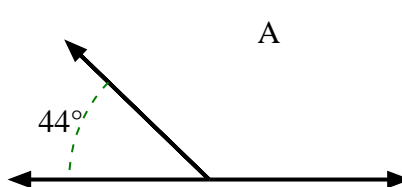
4)



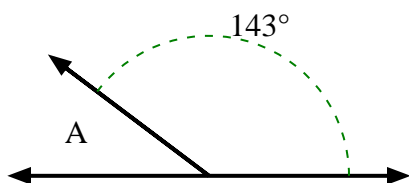
5)



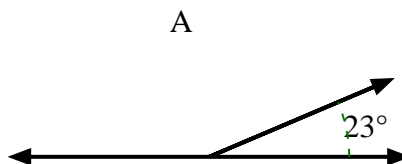
6)



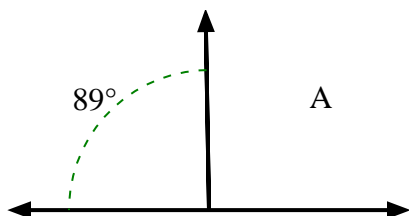
7)



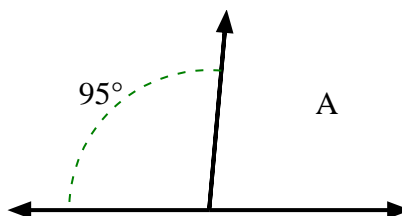
8)



9)



10)



Answers

1. 20°

2. 43°

3. 49°

4. 33°

5. 157°

6. 136°

7. 37°

8. 157°

9. 91°

10. 85°