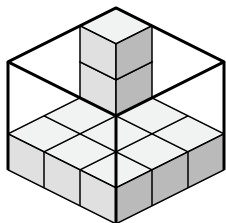


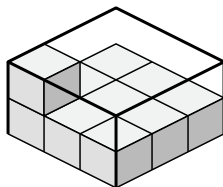


Determine the volume of each box. Each block is 1 cubic unit ( $u^3$ ).

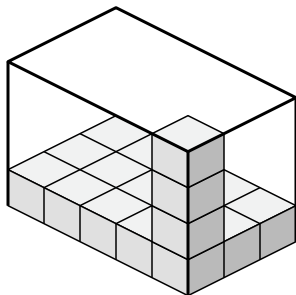
1)



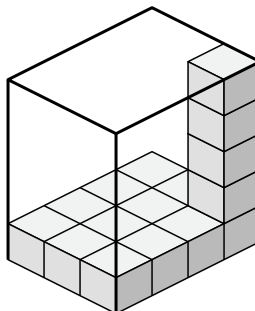
2)



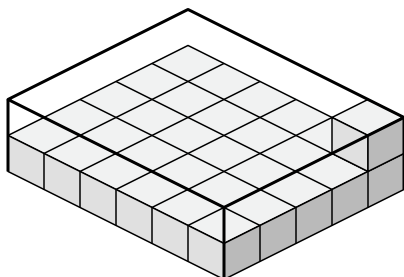
3)



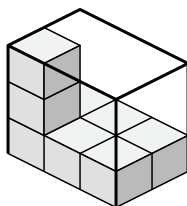
4)



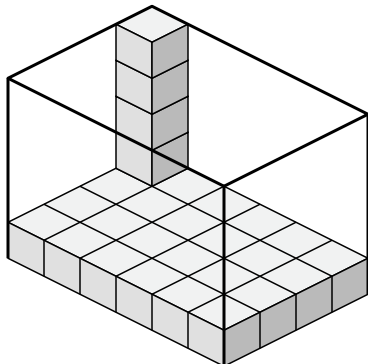
5)



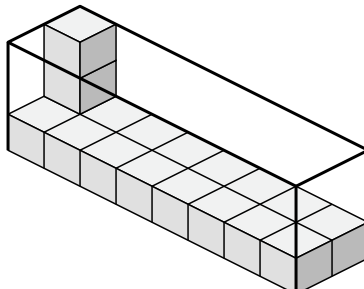
6)



7)



8)



Answers

1. \_\_\_\_\_

2. \_\_\_\_\_

3. \_\_\_\_\_

4. \_\_\_\_\_

5. \_\_\_\_\_

6. \_\_\_\_\_

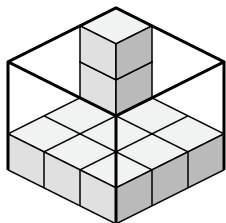
7. \_\_\_\_\_

8. \_\_\_\_\_

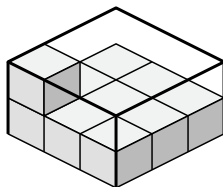


Determine the volume of each box. Each block is 1 cubic unit ( $u^3$ ).

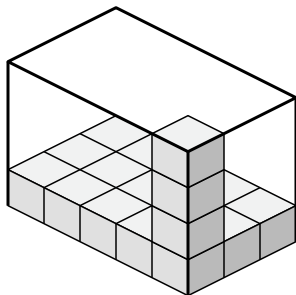
1)



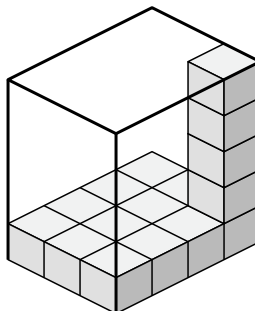
2)



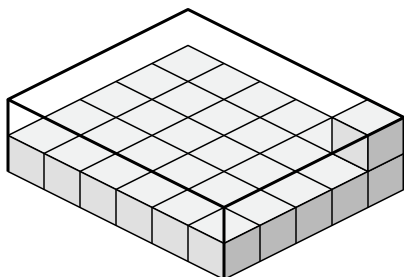
3)



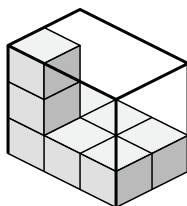
4)



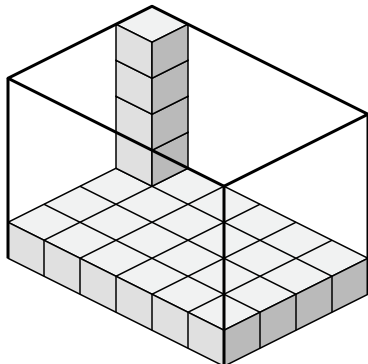
5)



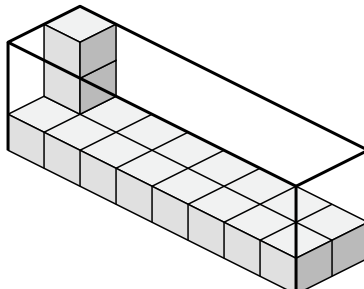
6)



7)



8)



Answers

1. 27  $u^3$

2. 18  $u^3$

3. 60  $u^3$

4. 60  $u^3$

5. 60  $u^3$

6. 18  $u^3$

7. 120  $u^3$

8. 48  $u^3$