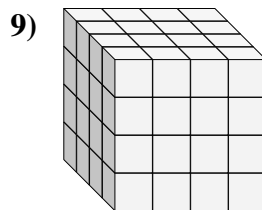
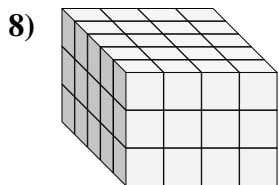
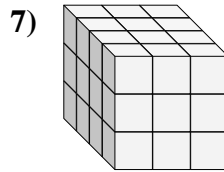
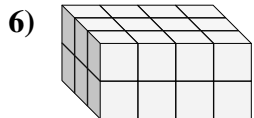
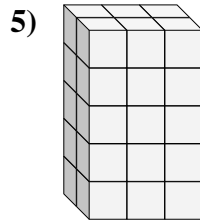
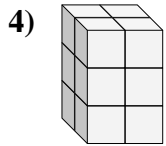
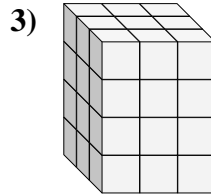
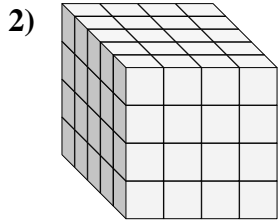
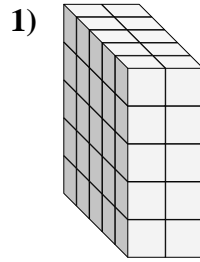
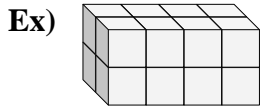




Find the length, width and height of the rectangular prism. Then find the volume.



Answers

Ex. 2 4 2 16

1. \_\_\_\_\_

2. \_\_\_\_\_

3. \_\_\_\_\_

4. \_\_\_\_\_

5. \_\_\_\_\_

6. \_\_\_\_\_

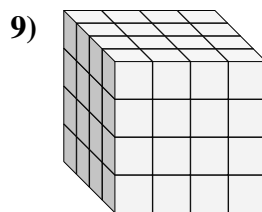
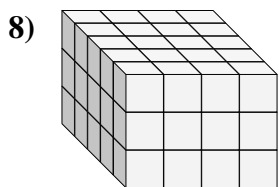
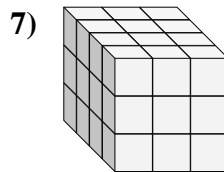
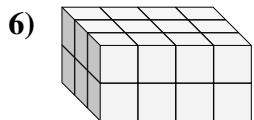
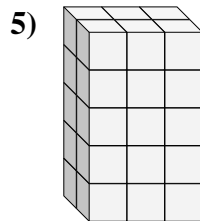
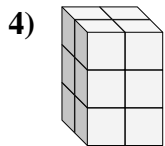
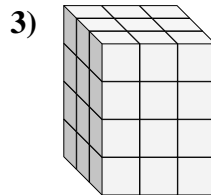
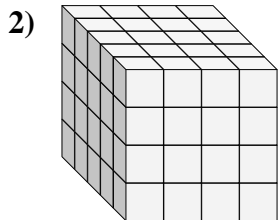
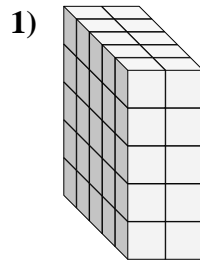
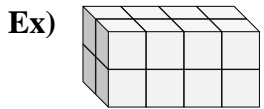
7. \_\_\_\_\_

8. \_\_\_\_\_

9. \_\_\_\_\_



Find the length, width and height of the rectangular prism. Then find the volume.



Answers

Ex. 2 4 2 16

1. 5 2 5 50

2. 5 4 4 80

3. 3 3 4 36

4. 2 2 3 12

5. 2 3 5 30

6. 3 4 2 24

7. 4 3 3 36

8. 5 4 3 60

9. 4 4 4 64