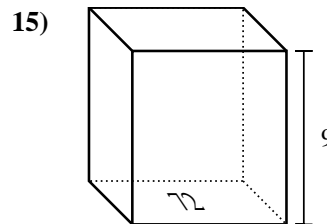
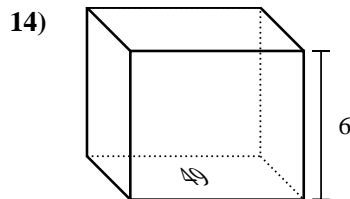
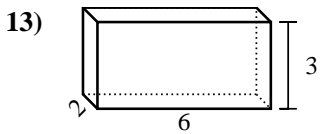
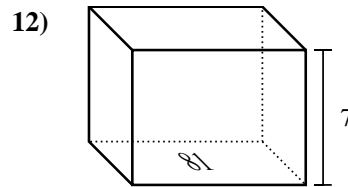
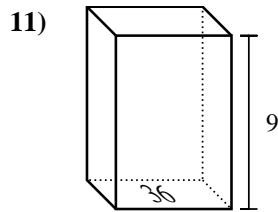
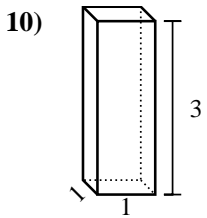
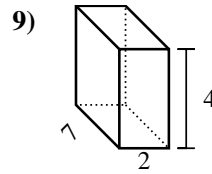
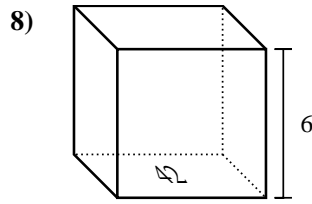
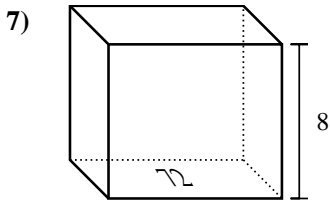
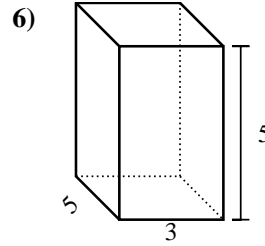
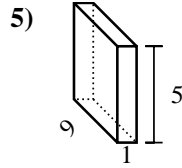
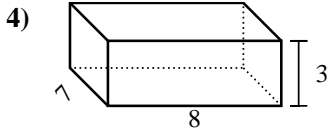
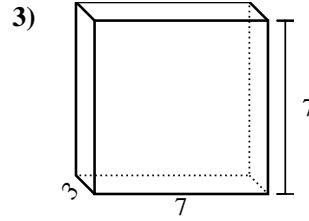
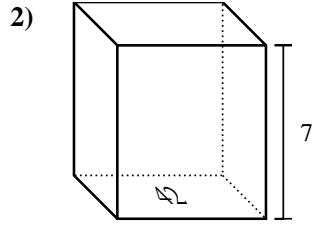
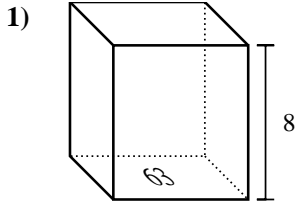




Find the volume of each rectangular prism. Units are in cm (not to scale). Remember  $V = BH$  and  $V = L \times W \times H$

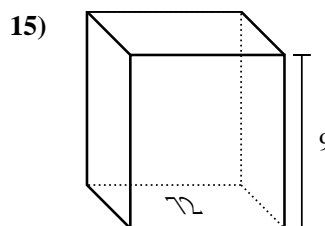
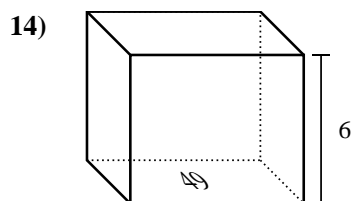
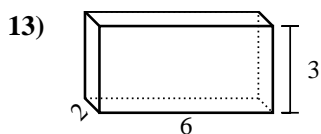
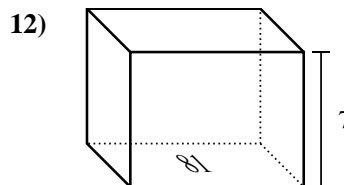
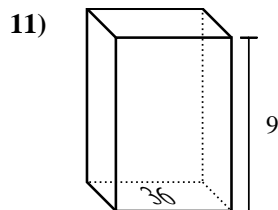
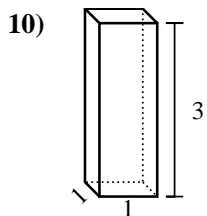
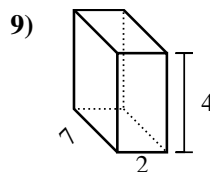
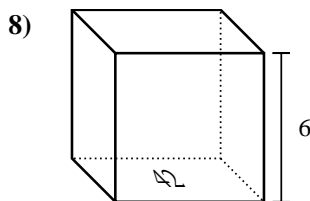
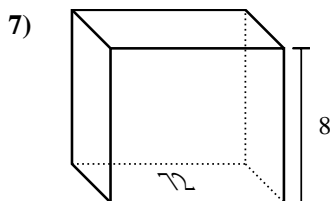
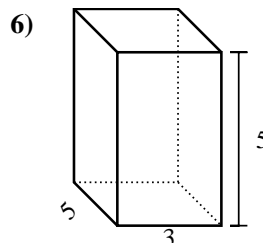
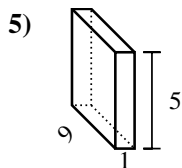
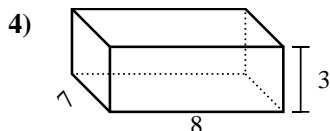
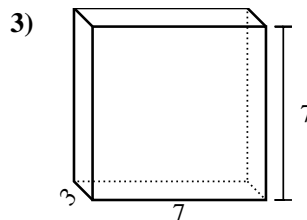
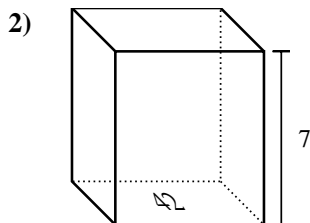
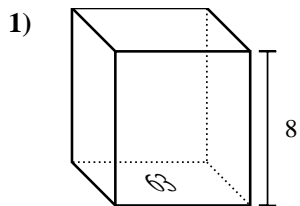
Answers



1. \_\_\_\_\_
2. \_\_\_\_\_
3. \_\_\_\_\_
4. \_\_\_\_\_
5. \_\_\_\_\_
6. \_\_\_\_\_
7. \_\_\_\_\_
8. \_\_\_\_\_
9. \_\_\_\_\_
10. \_\_\_\_\_
11. \_\_\_\_\_
12. \_\_\_\_\_
13. \_\_\_\_\_
14. \_\_\_\_\_
15. \_\_\_\_\_



Find the volume of each rectangular prism. Units are in cm (not to scale). Remember  $V = BH$  and  $V = L \times W \times H$



**Answers**

1. 504 cm<sup>3</sup>
2. 294 cm<sup>3</sup>
3. 147 cm<sup>3</sup>
4. 168 cm<sup>3</sup>
5. 45 cm<sup>3</sup>
6. 75 cm<sup>3</sup>
7. 576 cm<sup>3</sup>
8. 252 cm<sup>3</sup>
9. 56 cm<sup>3</sup>
10. 3 cm<sup>3</sup>
11. 324 cm<sup>3</sup>
12. 567 cm<sup>3</sup>
13. 36 cm<sup>3</sup>
14. 294 cm<sup>3</sup>
15. 648 cm<sup>3</sup>