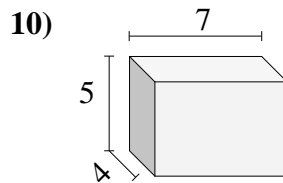
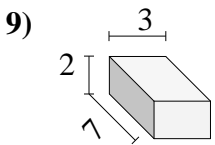
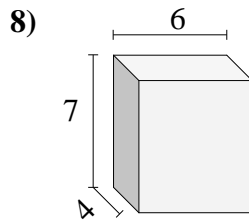
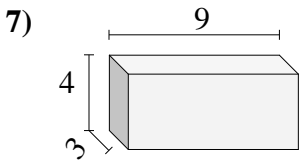
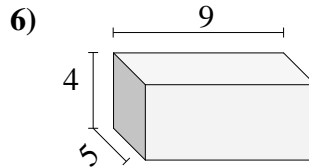
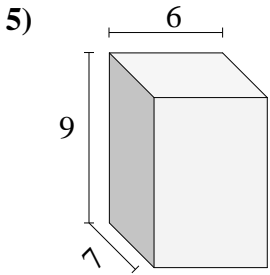
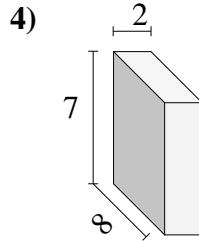
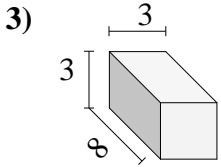
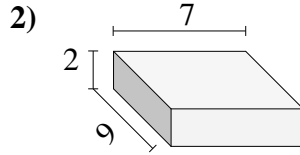
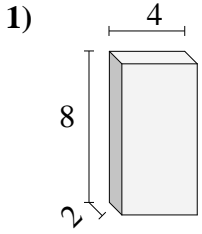




Find the volume of each of the rectangular prisms. Measured in cm (not to scale).

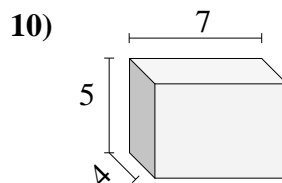
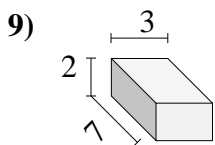
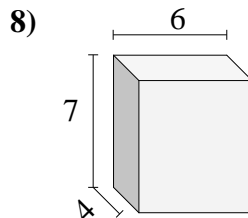
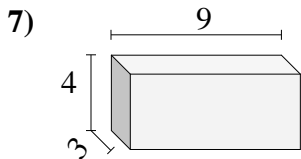
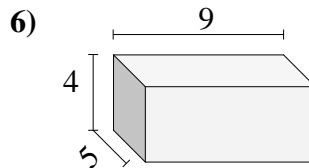
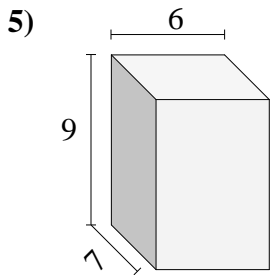
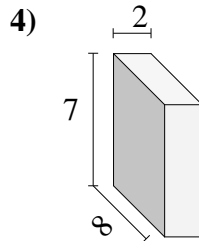
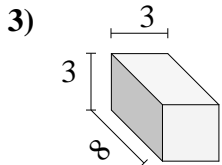
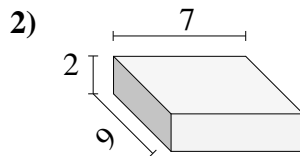
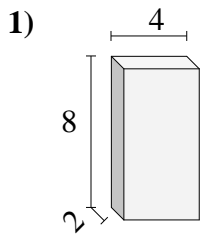


Answers

- 1. \_\_\_\_\_
- 2. \_\_\_\_\_
- 3. \_\_\_\_\_
- 4. \_\_\_\_\_
- 5. \_\_\_\_\_
- 6. \_\_\_\_\_
- 7. \_\_\_\_\_
- 8. \_\_\_\_\_
- 9. \_\_\_\_\_
- 10. \_\_\_\_\_



Find the volume of each of the rectangular prisms. Measured in cm (not to scale).

Answers1. 642. 1263. 724. 1125. 3786. 1807. 1088. 1689. 4210. 140