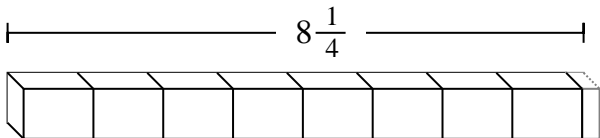




Determine the number of smaller fractional pieces that can be made from the larger piece.

Answers

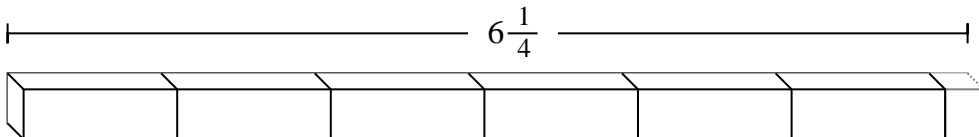
Ex)



Ex. **33**

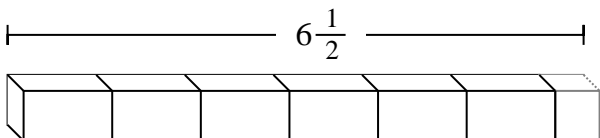
1. _____

1)



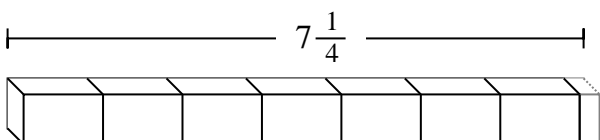
2. _____

2)



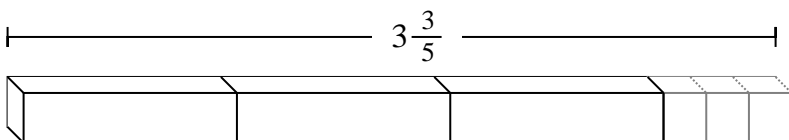
3. _____

3)



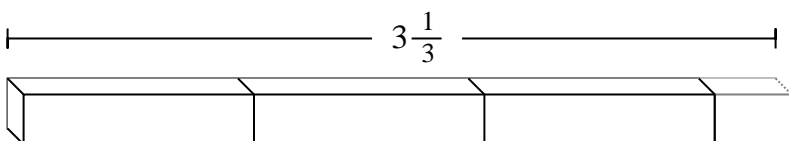
4. _____

4)



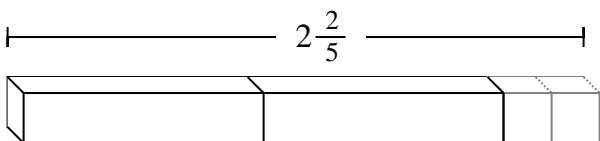
5. _____

5)



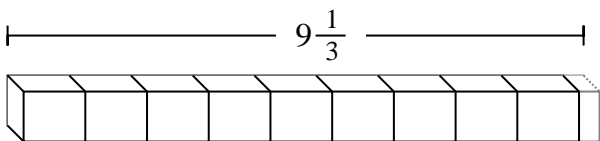
6. _____

6)



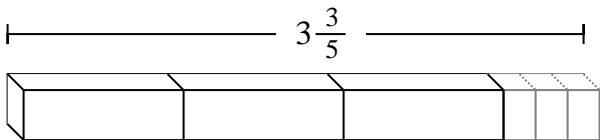
7. _____

7)



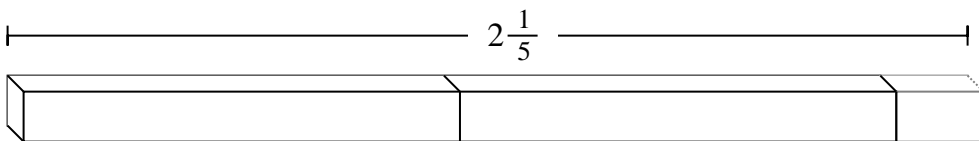
8. _____

8)



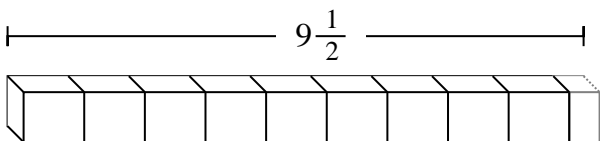
9. _____

9)



10. _____

10)





Determine the number of smaller fractional pieces that can be made from the larger piece.

Answers

Ex) $8\frac{1}{4}$

1) $6\frac{1}{4}$

2) $6\frac{1}{2}$

3) $7\frac{1}{4}$

4) $3\frac{3}{5}$

5) $3\frac{1}{3}$

6) $2\frac{2}{5}$

7) $9\frac{1}{3}$

8) $3\frac{3}{5}$

9) $2\frac{1}{5}$

10) $9\frac{1}{2}$

- Ex. 33
1. 25
2. 13
3. 29
4. 18
5. 10
6. 12
7. 28
8. 18
9. 11
10. 19