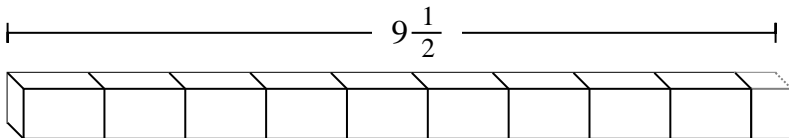




Determine the number of smaller fractional pieces that can be made from the larger piece.

Answers

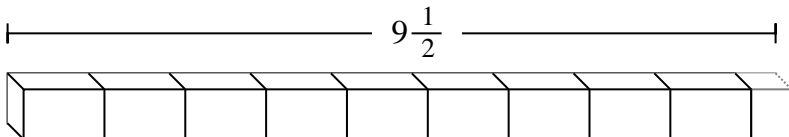
Ex)



Ex. **19**

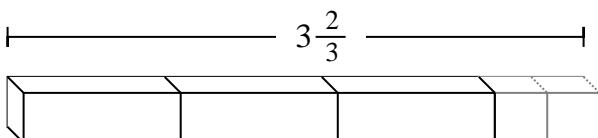
1. _____

1)



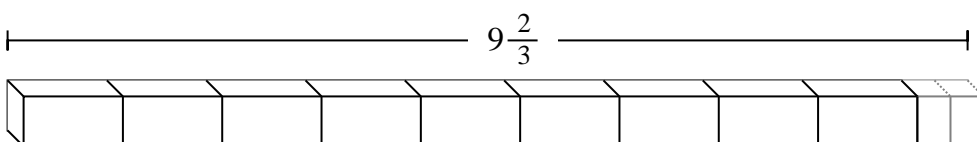
2. _____

2)



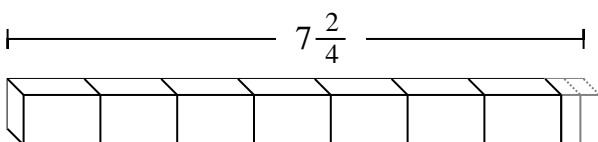
3. _____

3)



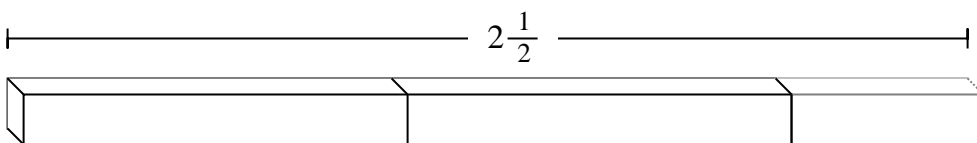
4. _____

4)



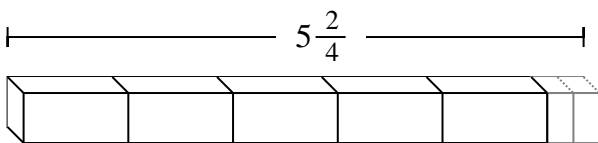
5. _____

5)



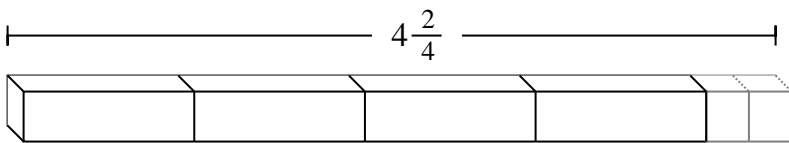
6. _____

6)



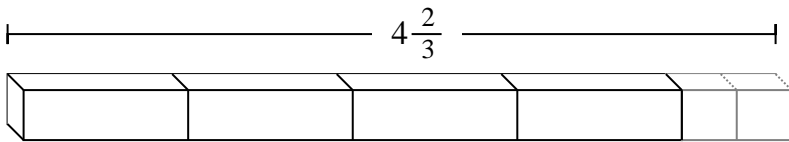
7. _____

7)



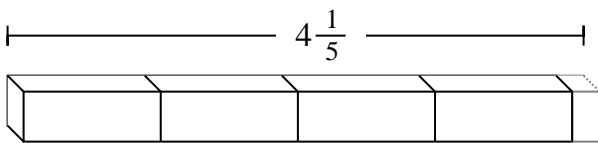
8. _____

8)



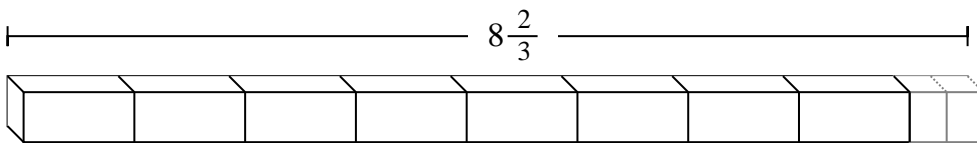
9. _____

9)



10. _____

10)





Determine the number of smaller fractional pieces that can be made from the larger piece.

Answers

Ex) $9\frac{1}{2}$

1) $9\frac{1}{2}$

2) $3\frac{2}{3}$

3) $9\frac{2}{3}$

4) $7\frac{2}{4}$

5) $2\frac{1}{2}$

6) $5\frac{2}{4}$

7) $4\frac{2}{4}$

8) $4\frac{2}{3}$

9) $4\frac{1}{5}$

10) $8\frac{2}{3}$

- Ex. 19
1. 19
2. 11
3. 29
4. 30
5. 5
6. 22
7. 18
8. 14
9. 21
10. 26