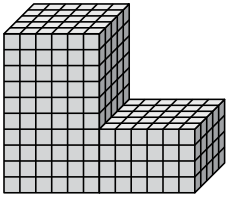




Find the total volume of each figure. Measurement is in cm (not to scale).

Answers

1)



1. \_\_\_\_\_

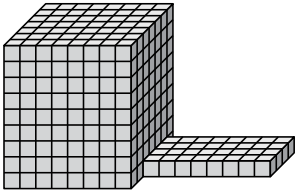
2. \_\_\_\_\_

3. \_\_\_\_\_

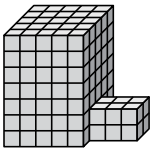
4. \_\_\_\_\_

5. \_\_\_\_\_

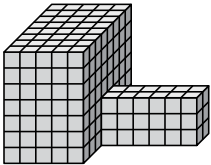
2)



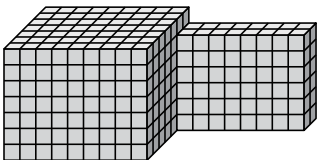
3)



4)

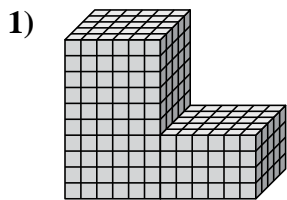


5)



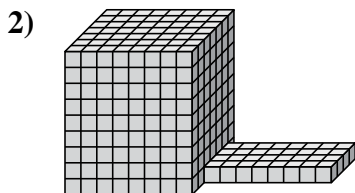


Find the total volume of each figure. Measurement is in cm (not to scale).



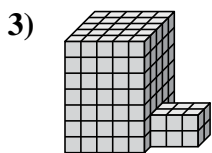
$$6 \times 5 \times 10 = 300$$

$$6 \times 5 \times 4 = 120$$



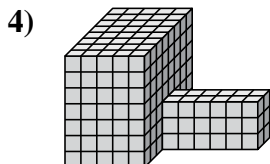
$$8 \times 7 \times 9 = 504$$

$$8 \times 4 \times 1 = 32$$



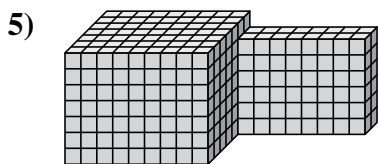
$$5 \times 5 \times 7 = 175$$

$$3 \times 2 \times 2 = 12$$



$$5 \times 8 \times 7 = 280$$

$$6 \times 2 \times 3 = 36$$



$$9 \times 7 \times 7 = 441$$

$$8 \times 2 \times 6 = 96$$

Answers

1. 420 cm<sup>3</sup>

2. 536 cm<sup>3</sup>

3. 187 cm<sup>3</sup>

4. 316 cm<sup>3</sup>

5. 537 cm<sup>3</sup>