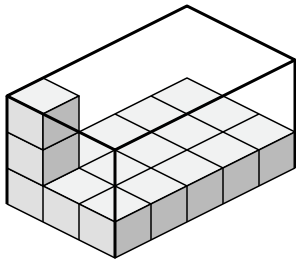




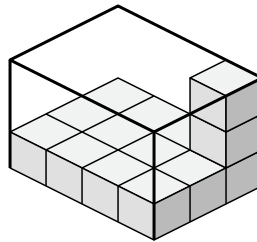
Create an expression to determine the volume of each box.

Answers

1)



2)



1. _____

2. _____

3. _____

4. _____

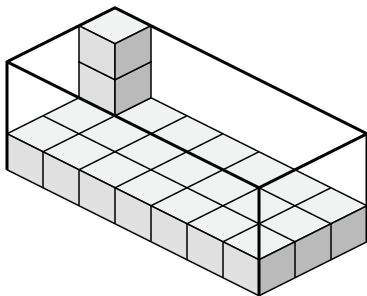
5. _____

6. _____

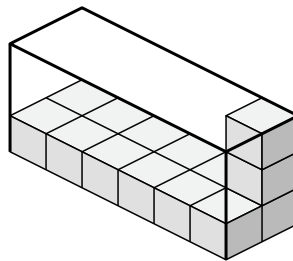
7. _____

8. _____

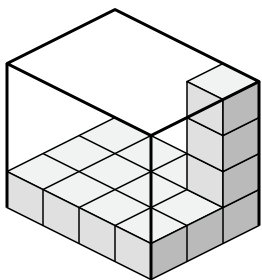
3)



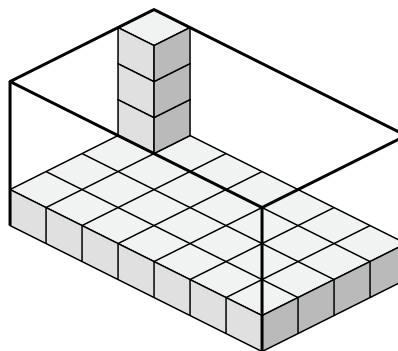
4)



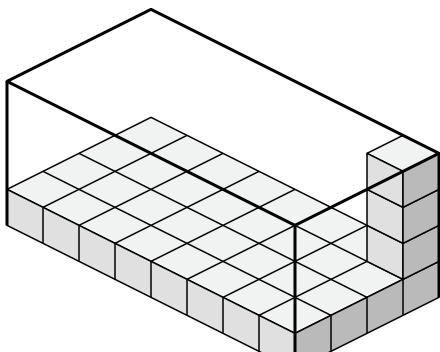
5)



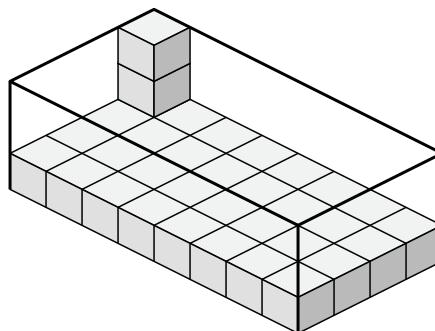
6)



7)



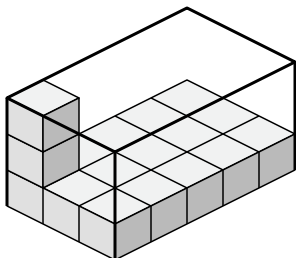
8)



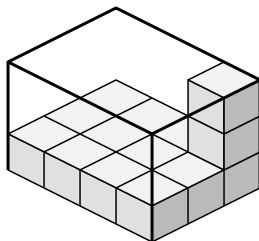


Create an expression to determine the volume of each box.

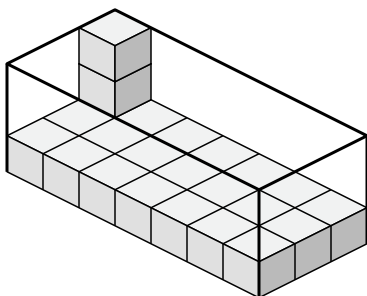
1)



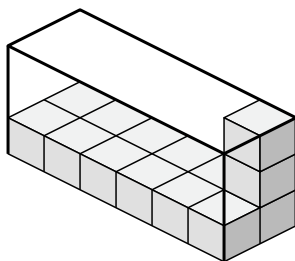
2)



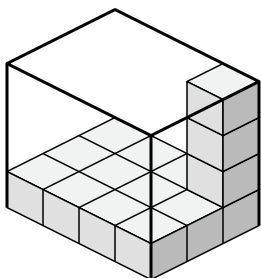
3)



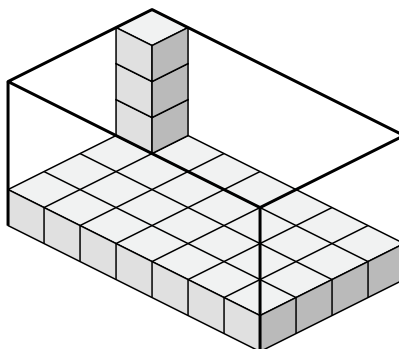
4)



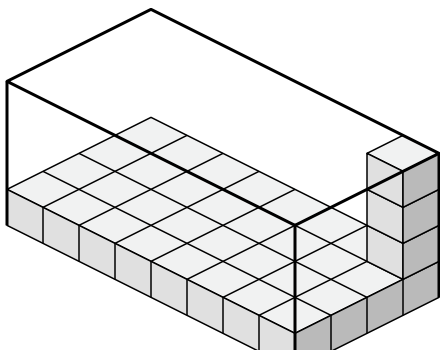
5)



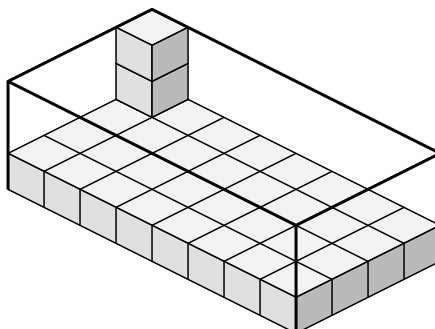
6)



7)



8)



Answers

1. $3 \times 5 \times 3$

2. $4 \times 3 \times 3$

3. $7 \times 3 \times 3$

4. $6 \times 2 \times 3$

5. $4 \times 3 \times 4$

6. $7 \times 4 \times 4$

7. $8 \times 4 \times 4$

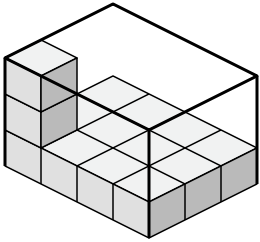
8. $8 \times 4 \times 3$



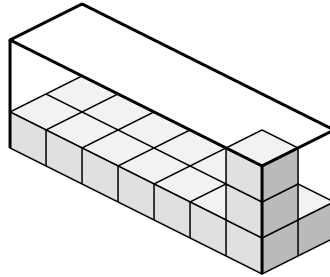
Create an expression to determine the volume of each box.

Answers

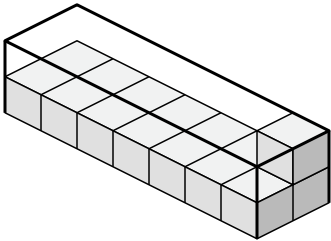
1)



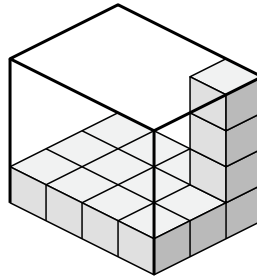
2)



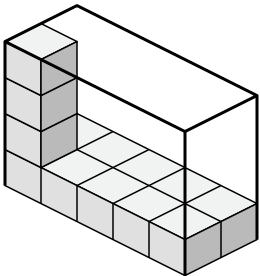
3)



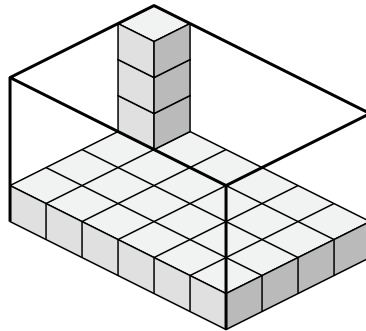
4)



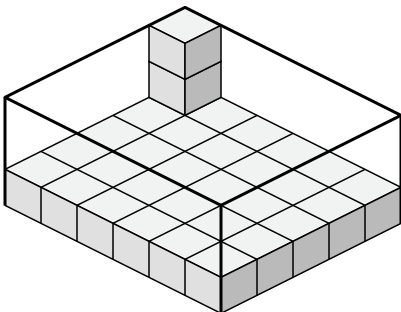
5)



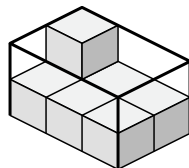
6)



7)



8)

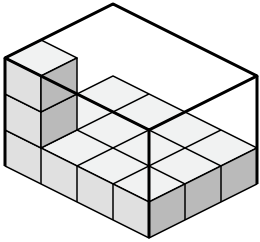


- 1. _____
- 2. _____
- 3. _____
- 4. _____
- 5. _____
- 6. _____
- 7. _____
- 8. _____

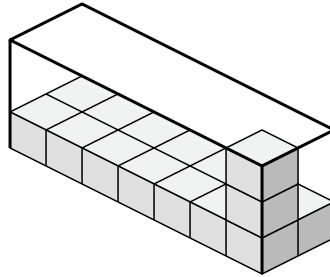


Create an expression to determine the volume of each box.

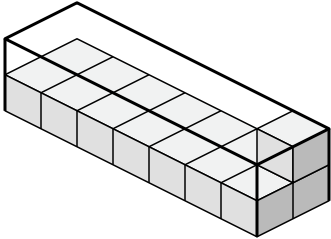
1)



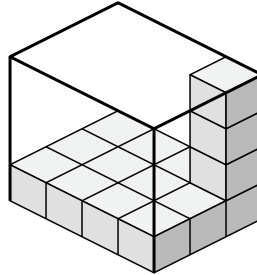
2)



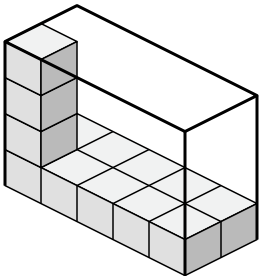
3)



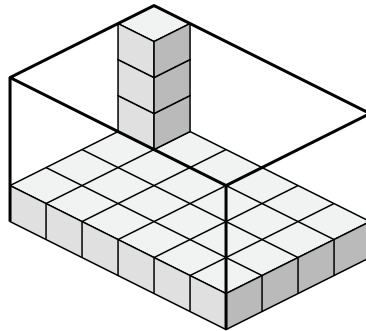
4)



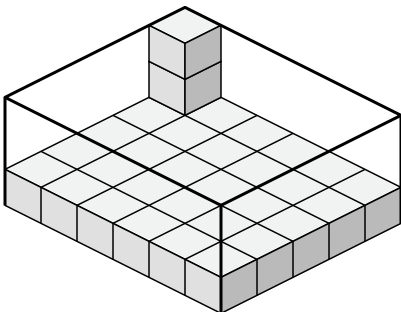
5)



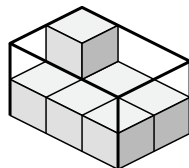
6)



7)



8)



Answers

1. 4×3×3

2. 7×2×3

3. 7×2×2

4. 4×3×4

5. 5×2×4

6. 6×4×4

7. 6×5×3

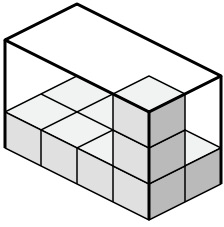
8. 3×2×2



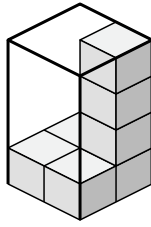
Create an expression to determine the volume of each box.

Answers

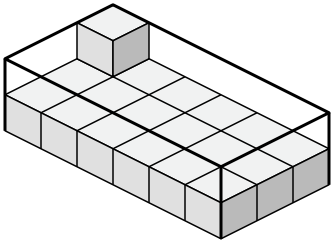
1)



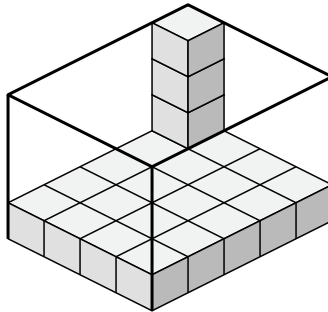
2)



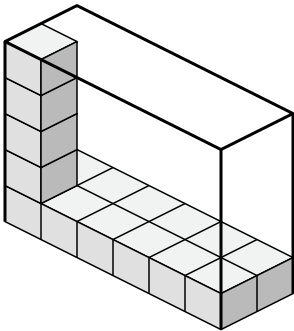
3)



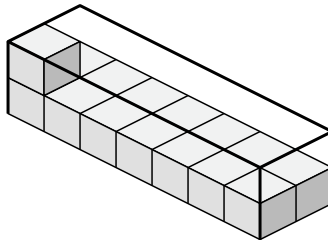
4)



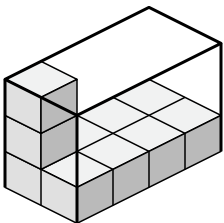
5)



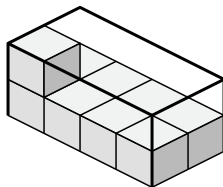
6)



7)



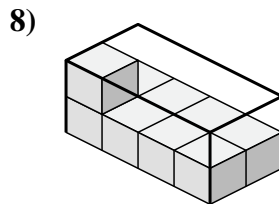
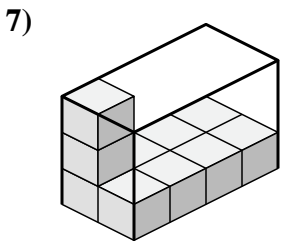
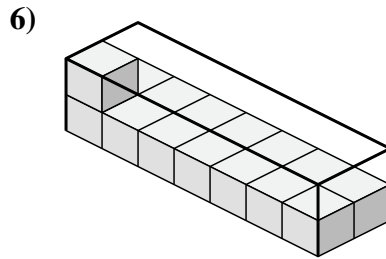
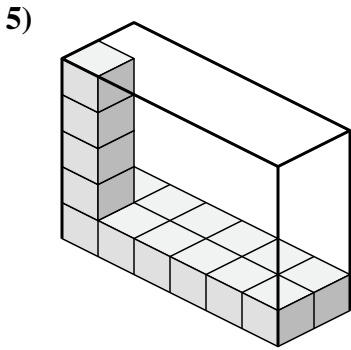
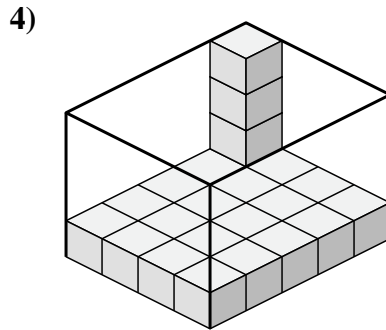
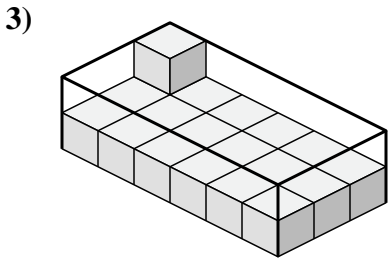
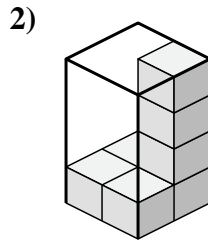
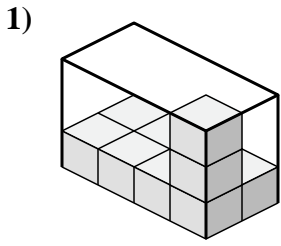
8)



- 1. _____
- 2. _____
- 3. _____
- 4. _____
- 5. _____
- 6. _____
- 7. _____
- 8. _____



Create an expression to determine the volume of each box.



Answers

1. 4x2x3

2. 2x2x4

3. 6x3x2

4. 4x5x4

5. 6x2x5

6. 7x2x2

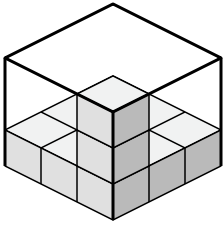
7. 2x4x3

8. 4x2x2

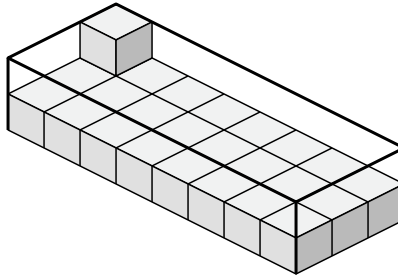


Create an expression to determine the volume of each box.

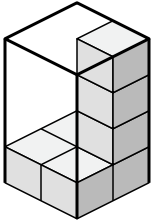
1)



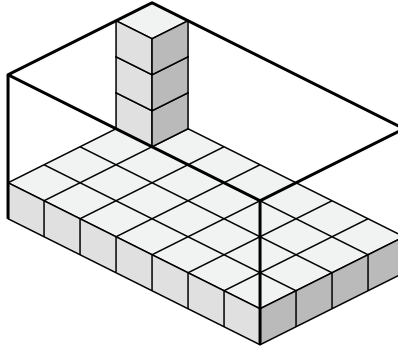
2)



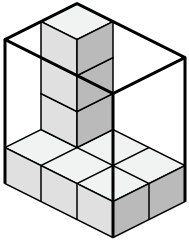
3)



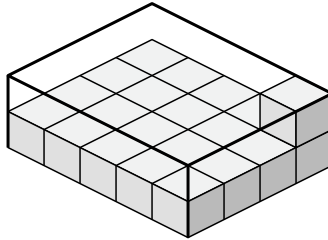
4)



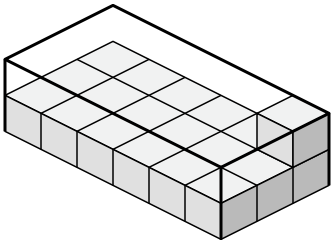
5)



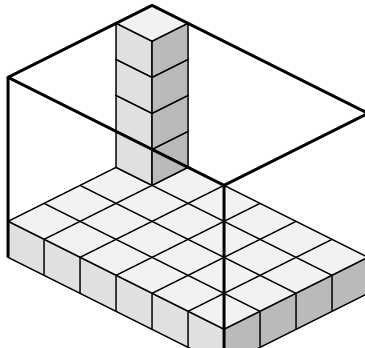
6)



7)



8)



Answers

1. _____

2. _____

3. _____

4. _____

5. _____

6. _____

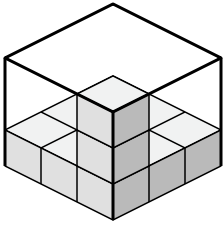
7. _____

8. _____

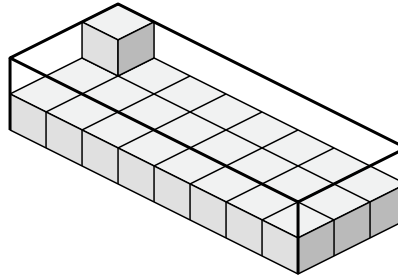


Create an expression to determine the volume of each box.

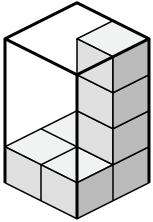
1)



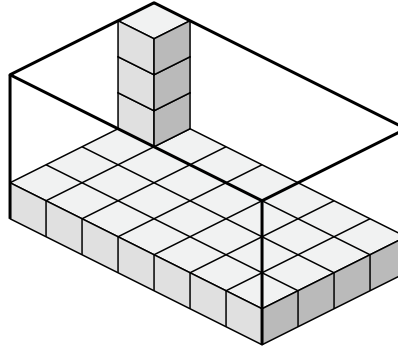
2)



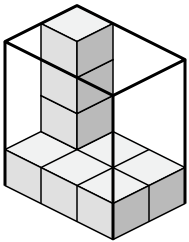
3)



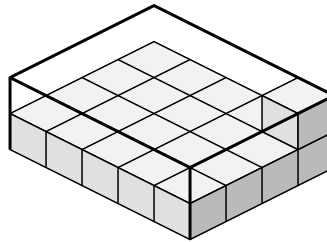
4)



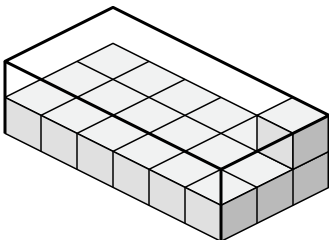
5)



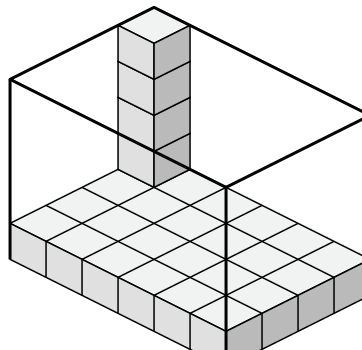
6)



7)



8)



Answers

1. 3×3×3

2. 8×3×2

3. 2×2×4

4. 7×4×4

5. 3×2×4

6. 5×4×2

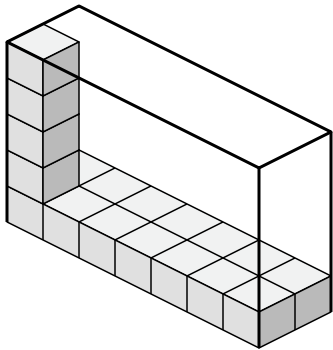
7. 6×3×2

8. 6×4×5

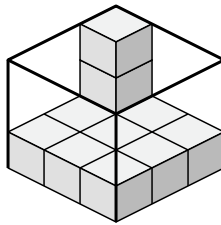


Create an expression to determine the volume of each box.

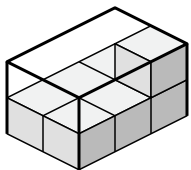
1)



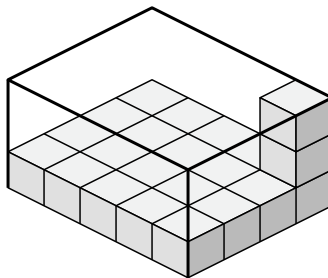
2)



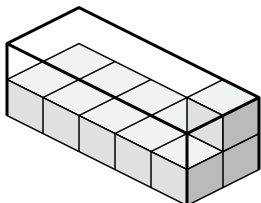
3)



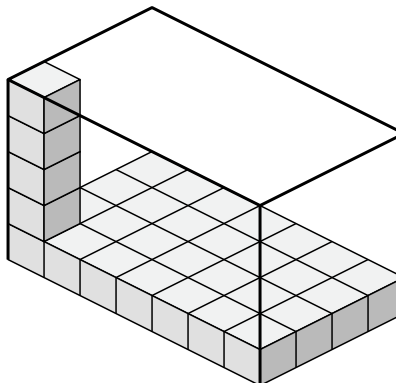
4)



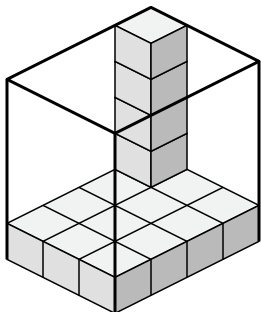
5)



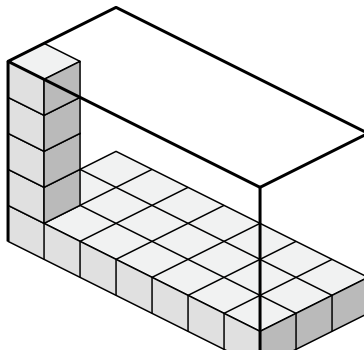
6)



7)



8)



Answers

1. _____

2. _____

3. _____

4. _____

5. _____

6. _____

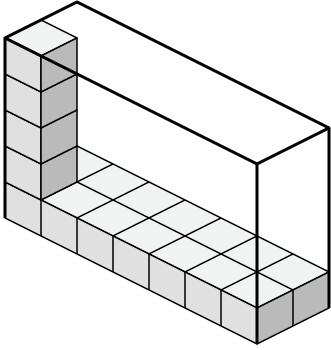
7. _____

8. _____

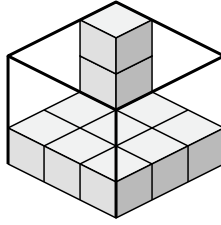


Create an expression to determine the volume of each box.

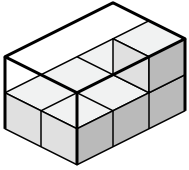
1)



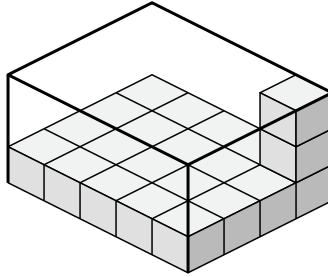
2)



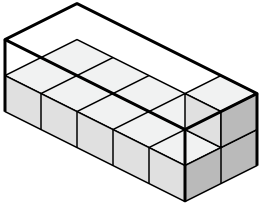
3)



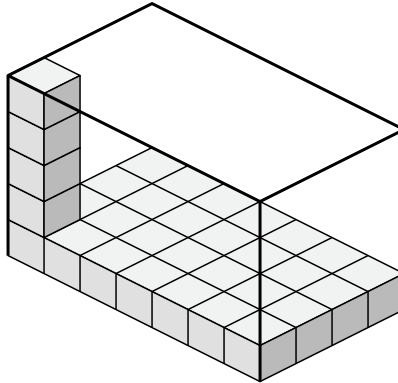
4)



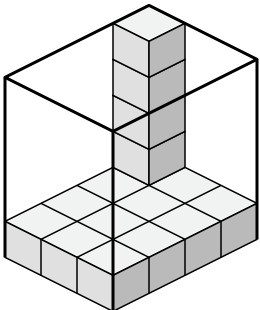
5)



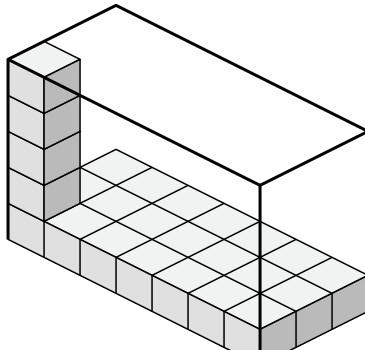
6)



7)



8)



Answers

1. 7×2×5

2. 3×3×3

3. 2×3×2

4. 5×4×3

5. 5×2×2

6. 7×4×5

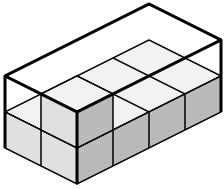
7. 3×4×5

8. 7×3×5

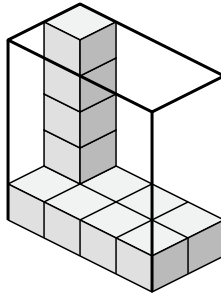


Create an expression to determine the volume of each box.

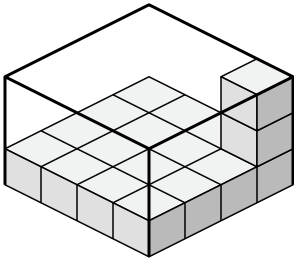
1)



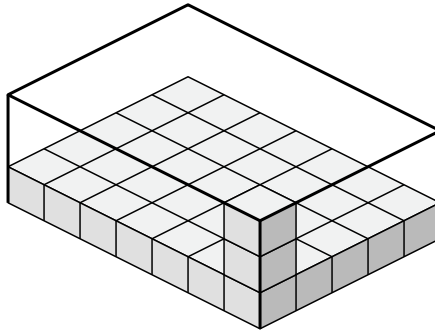
2)



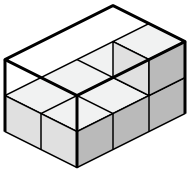
3)



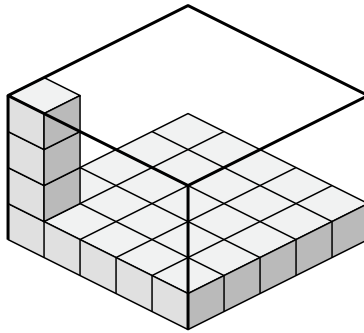
4)



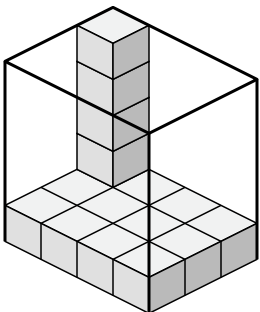
5)



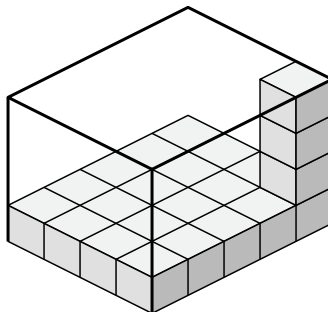
6)



7)



8)



Answers

1. _____

2. _____

3. _____

4. _____

5. _____

6. _____

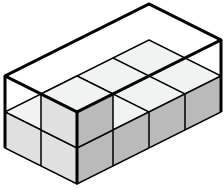
7. _____

8. _____

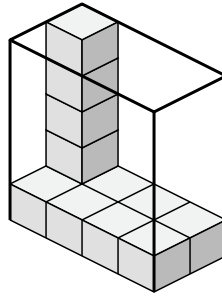


Create an expression to determine the volume of each box.

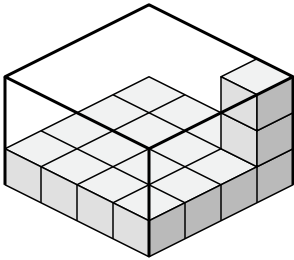
1)



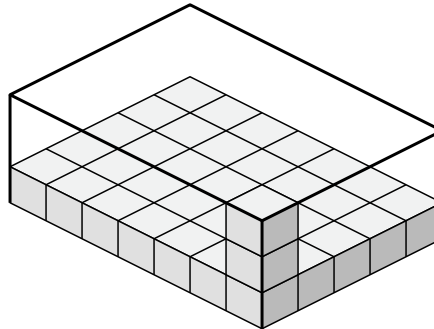
2)



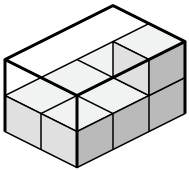
3)



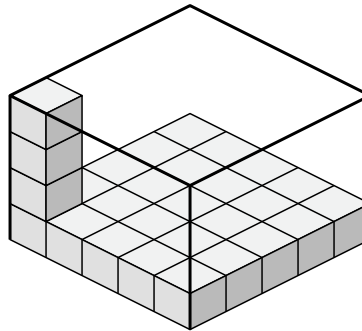
4)



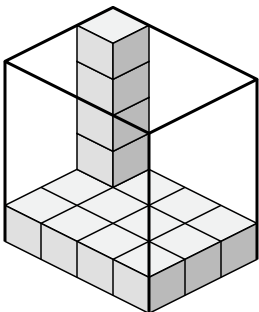
5)



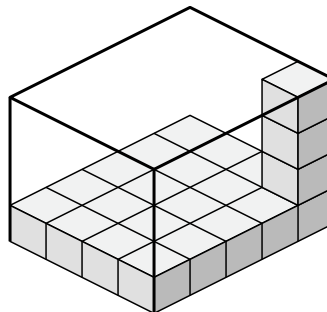
6)



7)



8)



Answers

1. 2×4×2

2. 4×2×5

3. 4×4×3

4. 7×5×3

5. 2×3×2

6. 5×5×4

7. 4×3×5

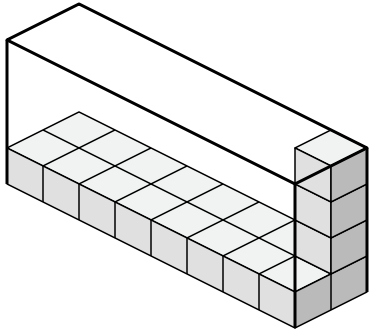
8. 4×5×4



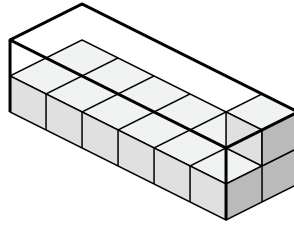
Create an expression to determine the volume of each box.

Answers

1)



2)



1. _____

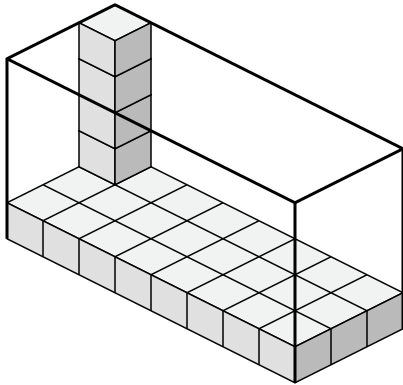
2. _____

3. _____

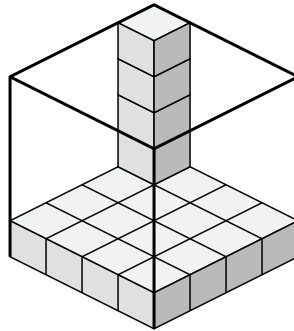
4. _____

5. _____

3)



4)

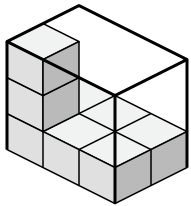


6. _____

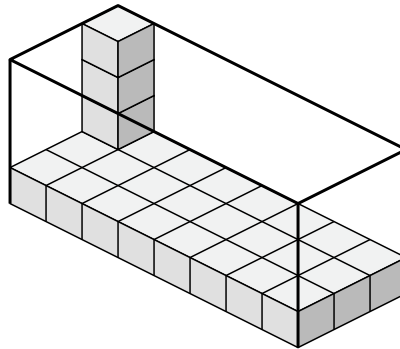
7. _____

8. _____

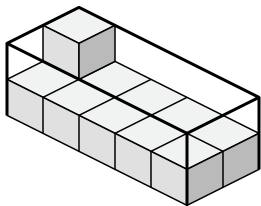
5)



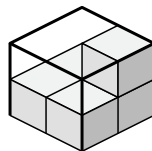
6)



7)



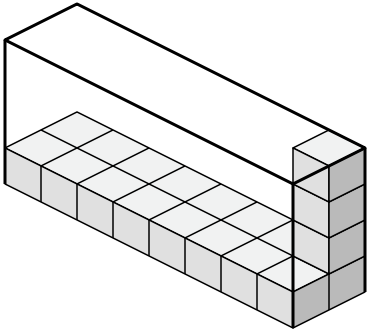
8)



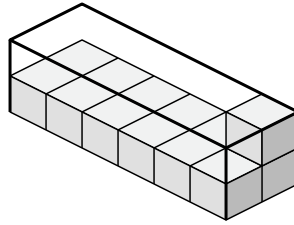


Create an expression to determine the volume of each box.

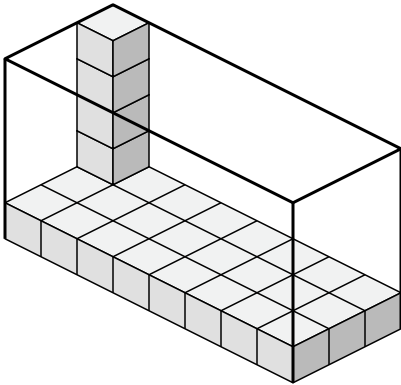
1)



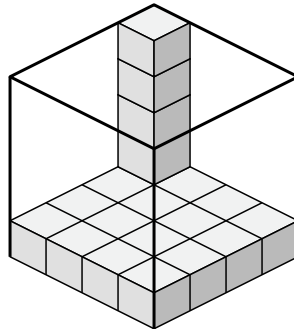
2)



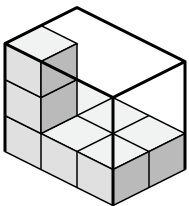
3)



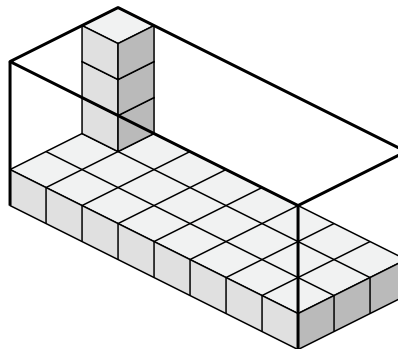
4)



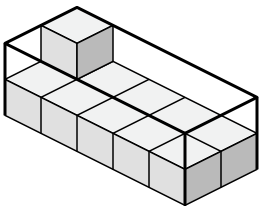
5)



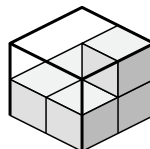
6)



7)



8)



Answers

1. $8 \times 2 \times 4$

2. $6 \times 2 \times 2$

3. $8 \times 3 \times 5$

4. $4 \times 4 \times 5$

5. $3 \times 2 \times 3$

6. $8 \times 3 \times 4$

7. $5 \times 2 \times 2$

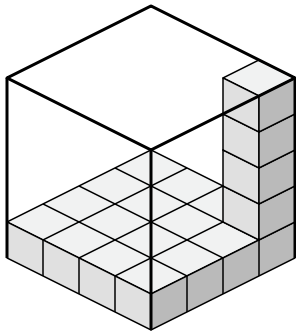
8. $2 \times 2 \times 2$



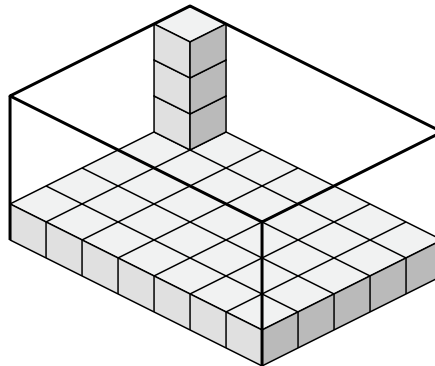
Create an expression to determine the volume of each box.

Answers

1)



2)



1. _____

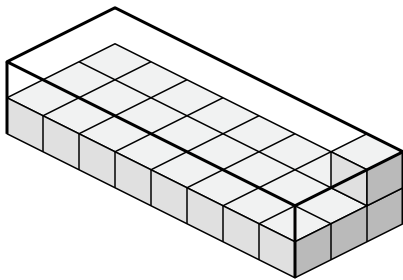
2. _____

3. _____

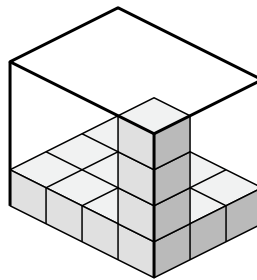
4. _____

5. _____

3)



4)

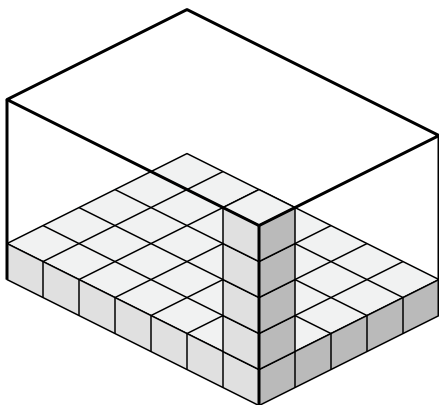


6. _____

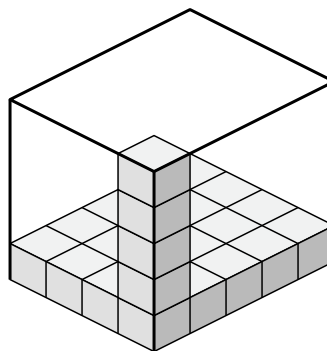
7. _____

8. _____

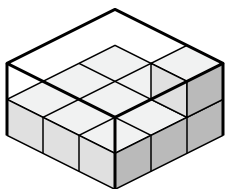
5)



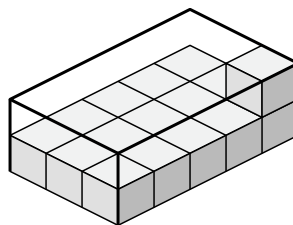
6)



7)



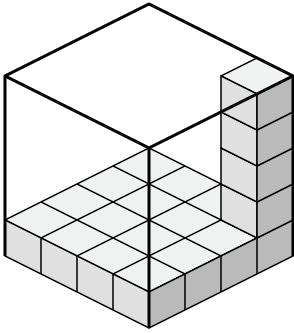
8)



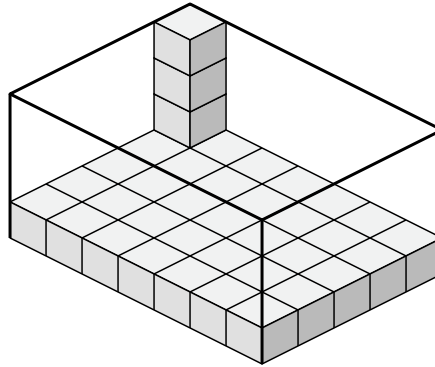


Create an expression to determine the volume of each box.

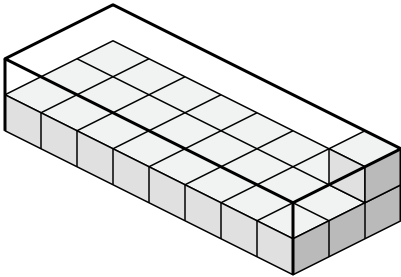
1)



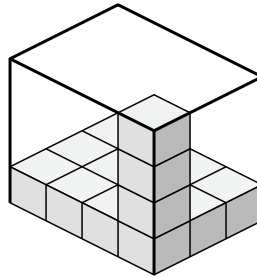
2)



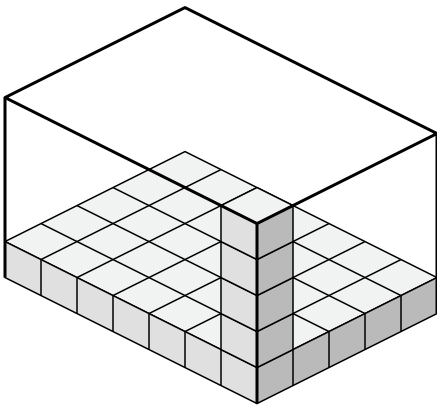
3)



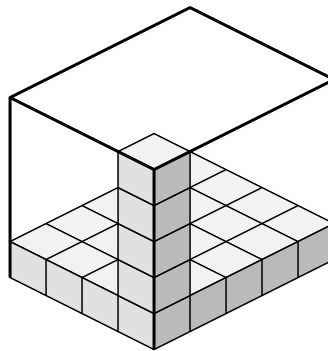
4)



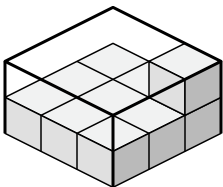
5)



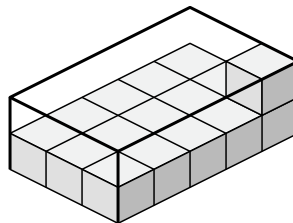
6)



7)



8)



Answers

1. 4x4x5

2. 7x5x4

3. 8x3x2

4. 4x3x4

5. 7x5x5

6. 4x5x5

7. 3x3x2

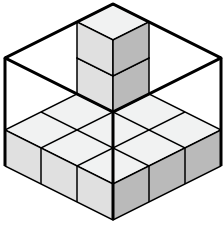
8. 3x5x2



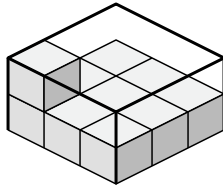
Create an expression to determine the volume of each box.

Answers

1)



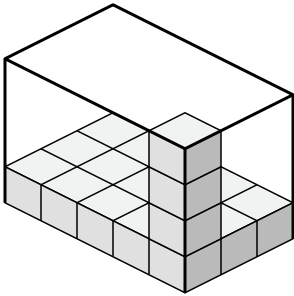
2)



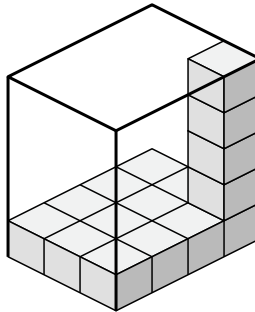
1. _____

2. _____

3)



4)

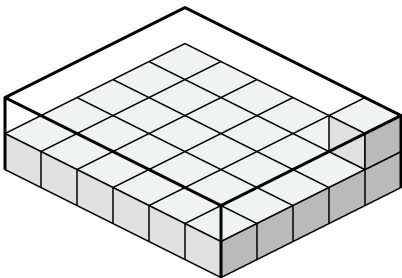


3. _____

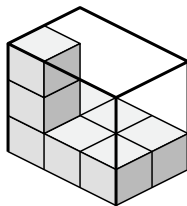
4. _____

5. _____

5)



6)

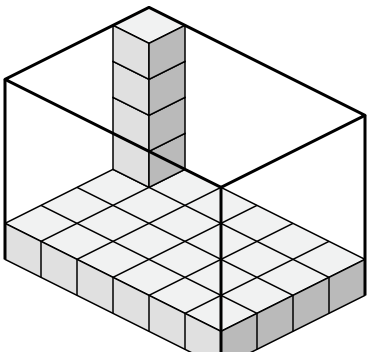


6. _____

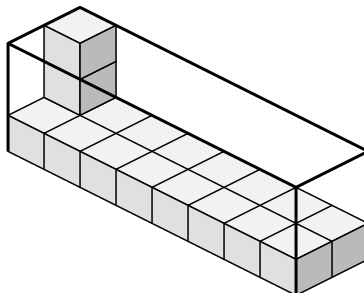
7. _____

8. _____

7)



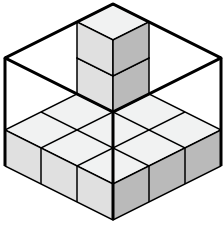
8)



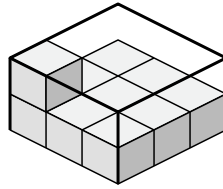


Create an expression to determine the volume of each box.

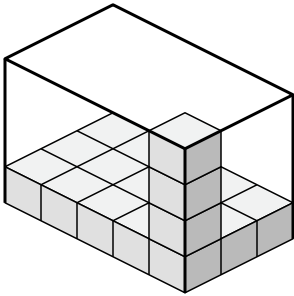
1)



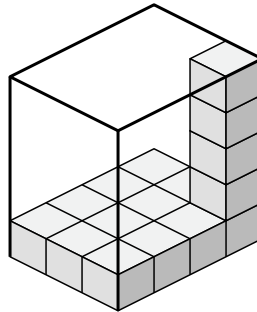
2)



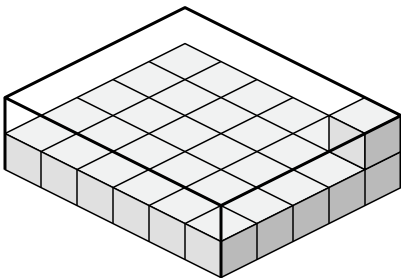
3)



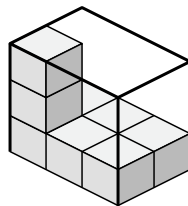
4)



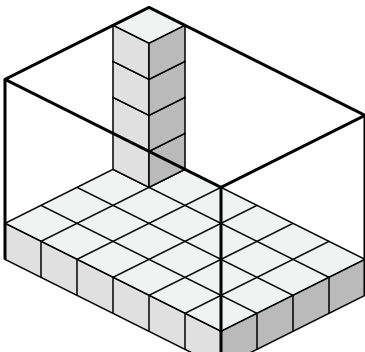
5)



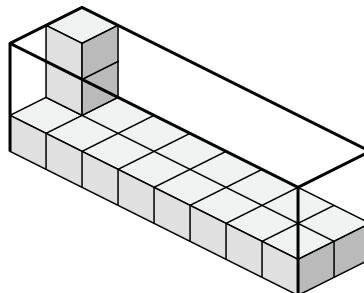
6)



7)



8)



Answers

1. 3×3×3

2. 3×3×2

3. 5×3×4

4. 3×4×5

5. 6×5×2

6. 3×2×3

7. 6×4×5

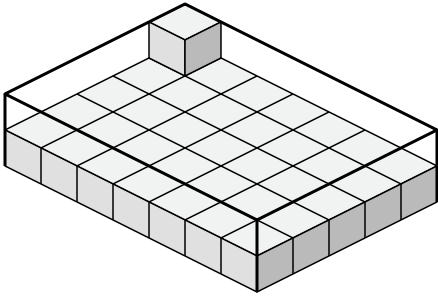
8. 8×2×3



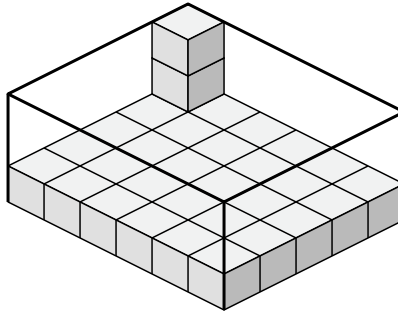
Create an expression to determine the volume of each box.

Answers

1)



2)



1. _____

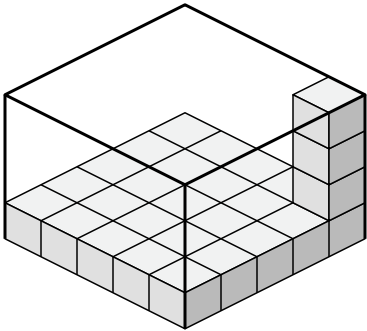
2. _____

3. _____

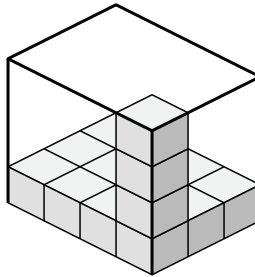
4. _____

5. _____

3)



4)

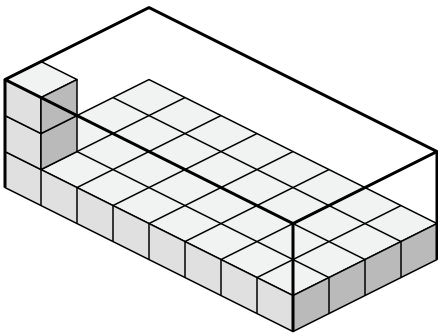


6. _____

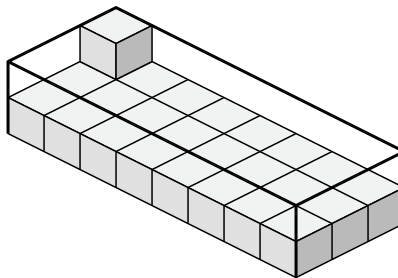
7. _____

8. _____

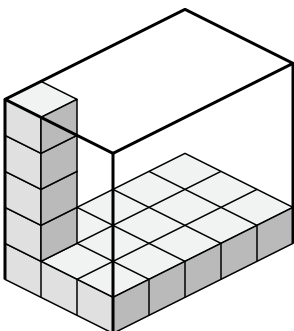
5)



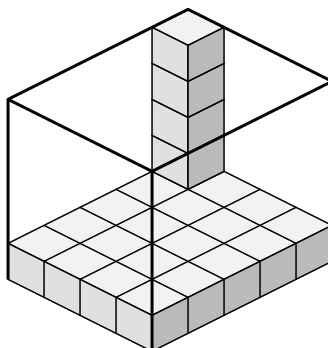
6)



7)



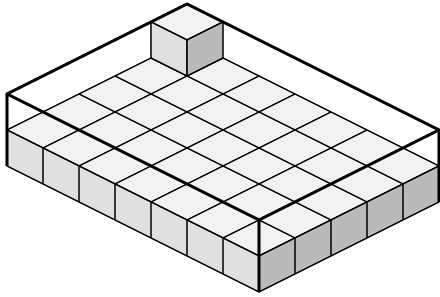
8)



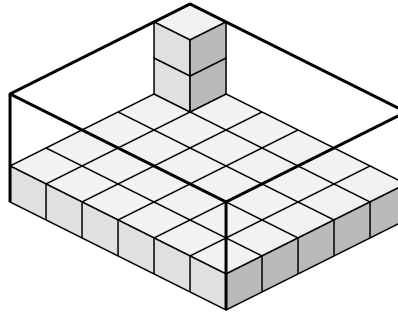


Create an expression to determine the volume of each box.

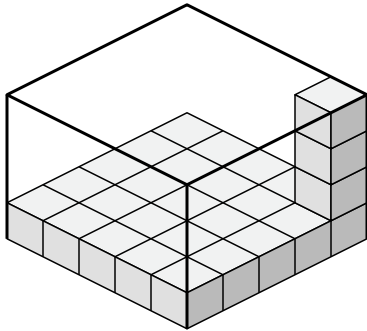
1)



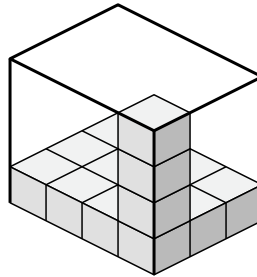
2)



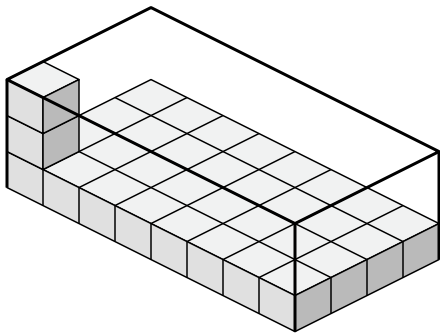
3)



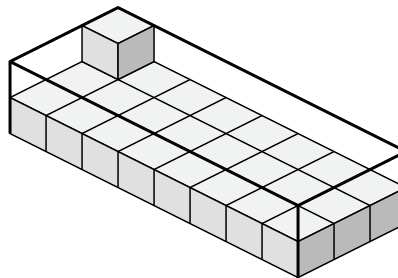
4)



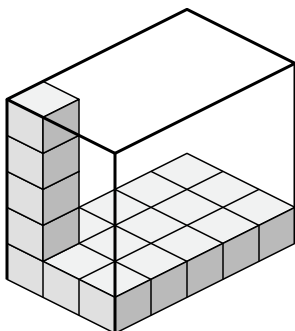
5)



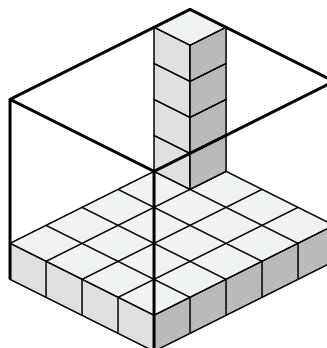
6)



7)



8)



Answers

1. $7 \times 5 \times 2$

2. $6 \times 5 \times 3$

3. $5 \times 5 \times 4$

4. $4 \times 3 \times 4$

5. $8 \times 4 \times 3$

6. $8 \times 3 \times 2$

7. $3 \times 5 \times 5$

8. $4 \times 5 \times 5$