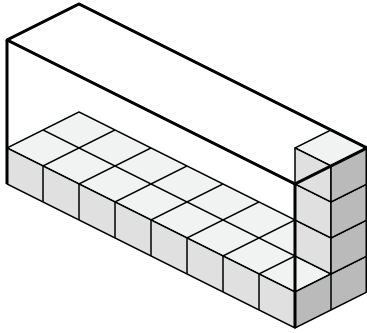




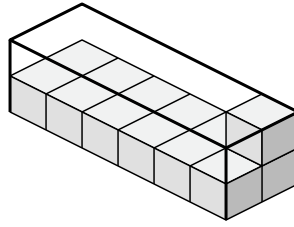
Create an expression to determine the volume of each box.

Answers

1)



2)



1. \_\_\_\_\_

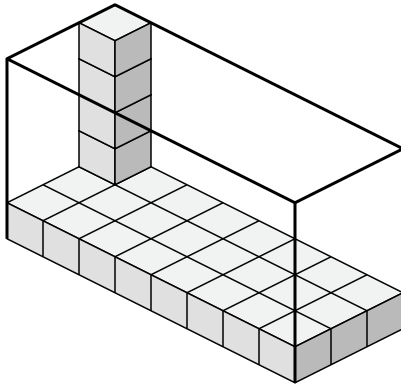
2. \_\_\_\_\_

3. \_\_\_\_\_

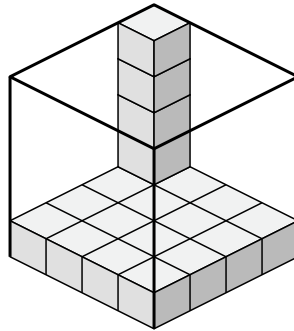
4. \_\_\_\_\_

5. \_\_\_\_\_

3)



4)

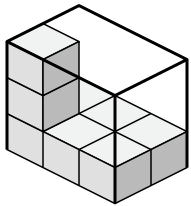


6. \_\_\_\_\_

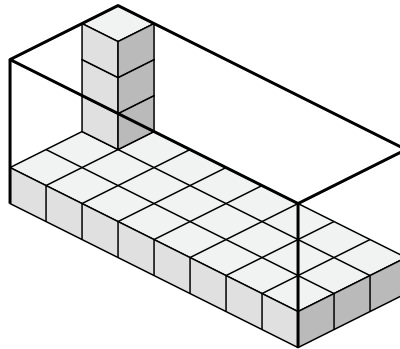
7. \_\_\_\_\_

8. \_\_\_\_\_

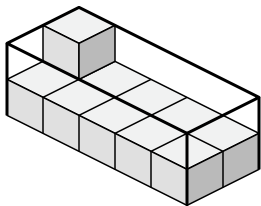
5)



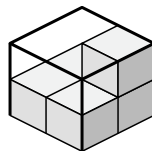
6)



7)



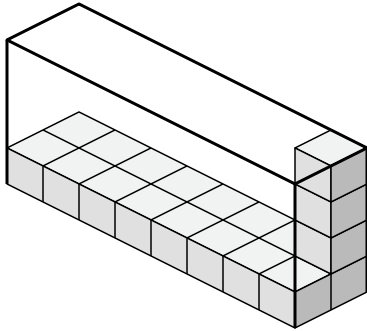
8)



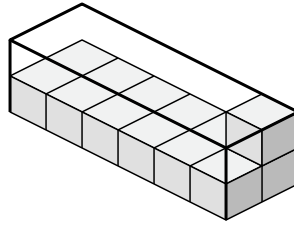


Create an expression to determine the volume of each box.

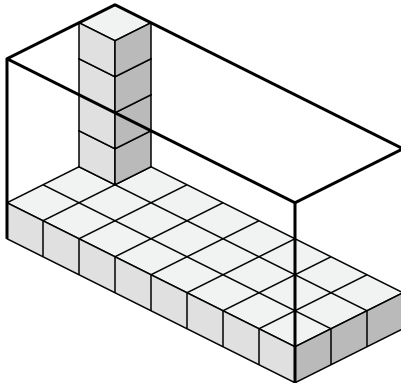
1)



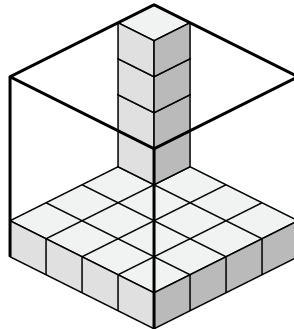
2)



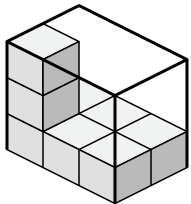
3)



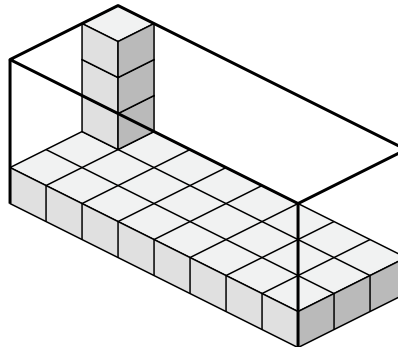
4)



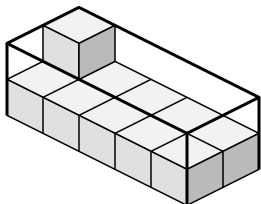
5)



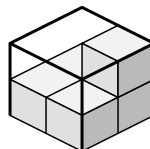
6)



7)



8)



Answers

1. 8×2×4

2. 6×2×2

3. 8×3×5

4. 4×4×5

5. 3×2×3

6. 8×3×4

7. 5×2×2

8. 2×2×2